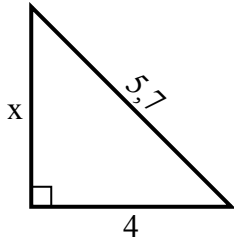


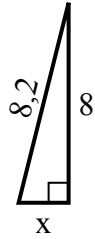


Найдите значение X.

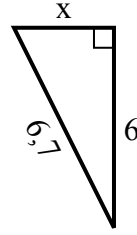
1) Периметр = 13,7 u



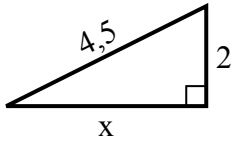
2) Периметр = 18,2 u



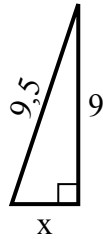
3) Периметр = 15,7 u



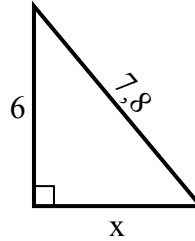
4) Периметр = 10,5 u



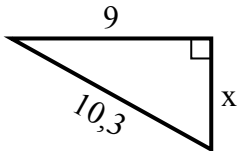
5) Периметр = 21,5 u



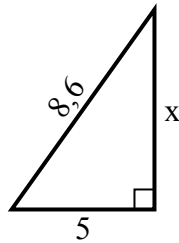
6) Периметр = 18,8 u



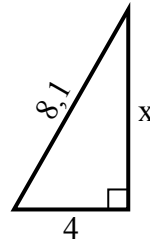
7) Периметр = 24,3 u



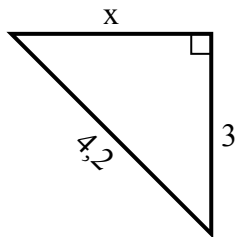
8) Периметр = 20,6 u



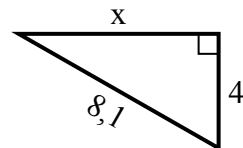
9) Периметр = 19,1 u



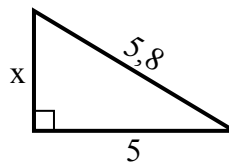
10) Периметр = 10,2 u



11) Периметр = 19,1 u



12) Периметр = 13,8 u



Ответы

1. _____

2. _____

3. _____

4. _____

5. _____

6. _____

7. _____

8. _____

9. _____

10. _____

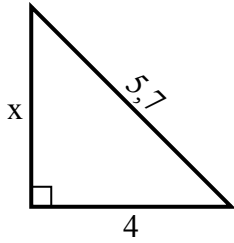
11. _____

12. _____

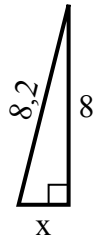


Найдите значение X.

1) Периметр = 13,7 у



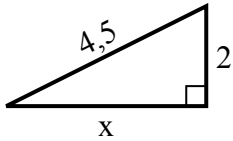
2) Периметр = 18,2 у



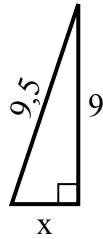
3) Периметр = 15,7 у



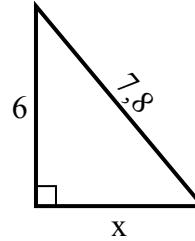
4) Периметр = 10,5 у



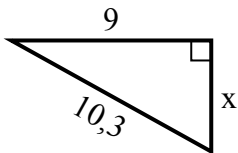
5) Периметр = 21,5 у



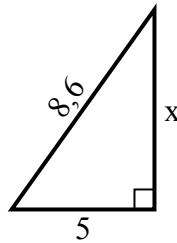
6) Периметр = 18,8 у



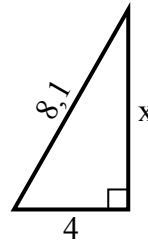
7) Периметр = 24,3 у



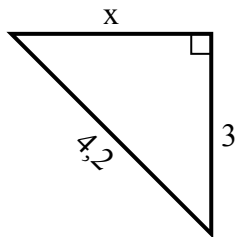
8) Периметр = 20,6 у



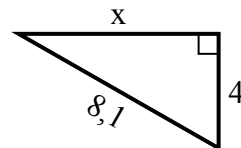
9) Периметр = 19,1 у



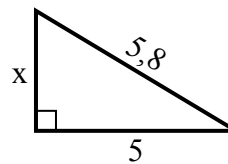
10) Периметр = 10,2 у



11) Периметр = 19,1 у



12) Периметр = 13,8 у

**Ответы**1. 42. 23. 34. 45. 36. 57. 58. 79. 710. 311. 712. 3