



Определите отношение угла, больше, меньше или равно 90.

Ответы

об)



1)



2)

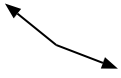


об. **меньше**

1. _____

2. _____

3)



4)



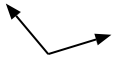
5)



3. _____

4. _____

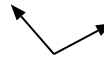
6)



7)



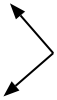
8)



6. _____

7. _____

9)



10)



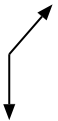
11)



9. _____

10. _____

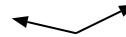
12)



13)



14)

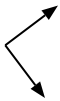


11. _____

12. _____

13. _____


15)



16)



17)



14. _____

15. _____

16. _____

18)



19)



20)



17. _____

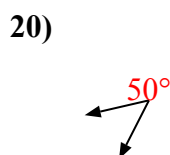
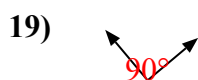
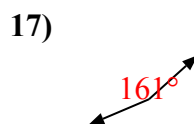
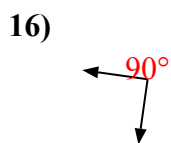
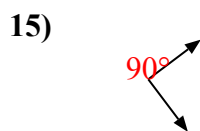
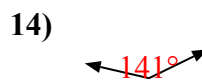
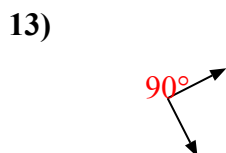
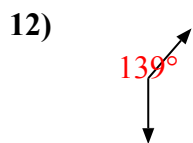
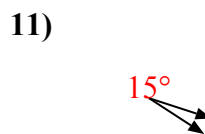
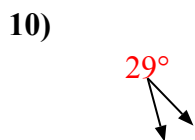
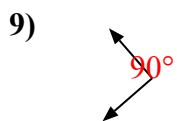
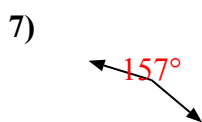
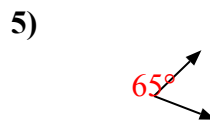
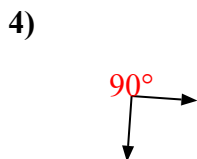
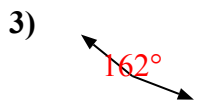
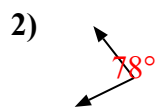
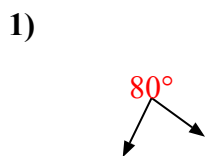
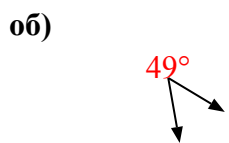
18. _____

19. _____

20. _____



Определите отношение угла, больше, меньше или равно 90.



ОТВЕТЫ

об. меньше

1. меньше

2. меньше

3. больше

4. равно

5. меньше

6. больше

7. больше

8. больше

9. равно

10. меньше

11. меньше

12. больше

13. равно

14. больше

15. равно

16. равно

17. больше

18. равно

19. равно

20. меньше