



Определите отношение угла, больше, меньше или равно 90.

об)



1)



2)



3)



4)



5)



6)



7)



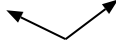
8)



9)



10)



11)



12)



13)



14)



15)



16)



17)



18)



19)



20)



**ОТВЕТЫ**

об. **меньше**

1. \_\_\_\_\_

2. \_\_\_\_\_

3. \_\_\_\_\_

4. \_\_\_\_\_

5. \_\_\_\_\_

6. \_\_\_\_\_

7. \_\_\_\_\_

8. \_\_\_\_\_

9. \_\_\_\_\_

10. \_\_\_\_\_

11. \_\_\_\_\_

12. \_\_\_\_\_

13. \_\_\_\_\_

14. \_\_\_\_\_

15. \_\_\_\_\_

16. \_\_\_\_\_

17. \_\_\_\_\_


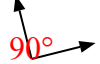
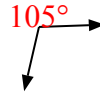



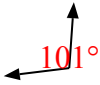

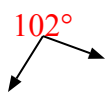

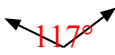




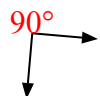


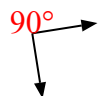


18. \_\_\_\_\_

19. \_\_\_\_\_

20. \_\_\_\_\_



Определите отношение угла, больше, меньше или равно 90.

об) 	1) 	2) 
3) 	4) 	5) 
6) 	7) 	8) 
9) 	10) 	11) 
12) 	13) 	14) 
15) 	16) 	17) 
18) 	19) 	20) 

**Ответы**

- об. меньше
- 1. равно
- 2. больше
- 3. меньше
- 4. равно
- 5. меньше
- 6. больше
- 7. равно
- 8. больше
- 9. меньше
- 10. больше
- 11. равно
- 12. больше
- 13. меньше
- 14. меньше
- 15. равно
- 16. больше
- 17. больше
- 18. равно
- 19. равно
- 20. равно