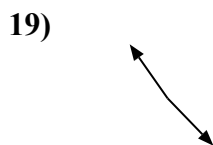
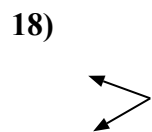
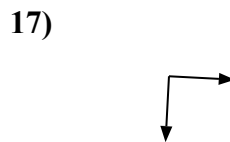
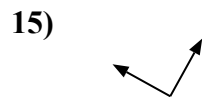
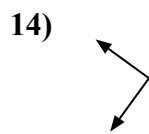
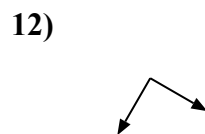
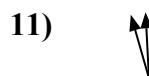
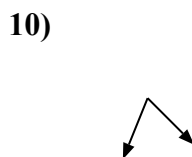
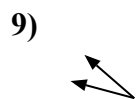
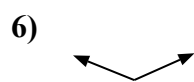
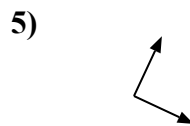
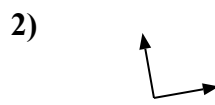
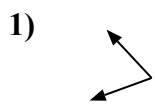




Определите отношение угла, больше, меньше или равно 90.



Отвѣты

об. больше

1. _____

2. _____

3. _____

4. _____

5. _____

6. _____

7. _____

8. _____

9. _____

10. _____

11. _____

12. _____

13. _____

14. _____

15. _____

16. _____

17. _____

18. _____

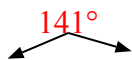
19. _____

20. _____



Определите отношение угла, больше, меньше или равно 90.

об)



1)



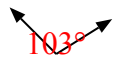
2)



Ответы

об. больше

3)



4)



5)



1. меньше

2. равно

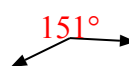
6)



7)



8)



3. больше

4. равно

5. равно

6. больше

7. больше

9)



10)



11)



8. больше

9. меньше

10. меньше

11. меньше

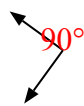
12)



13)



14)



12. равно

13. меньше

14. равно

15)



16)



17)



15. равно

16. больше

18)



19)



20)



17. равно

18. меньше

19. больше

20. меньше