


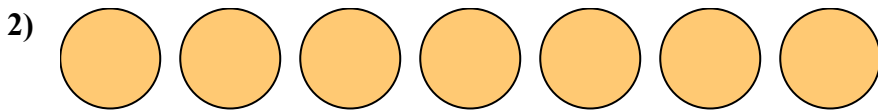


Запишите заштрихованную сумму дробью.


ОТВЕТЫ



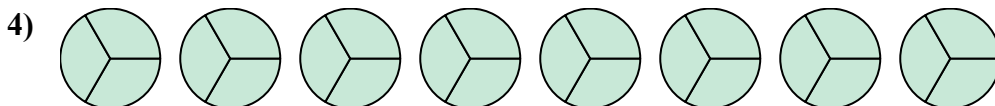
1. \_\_\_\_\_



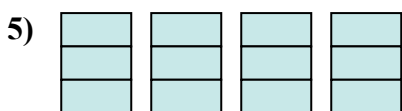
2. \_\_\_\_\_



3. \_\_\_\_\_



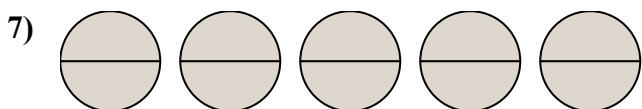
4. \_\_\_\_\_



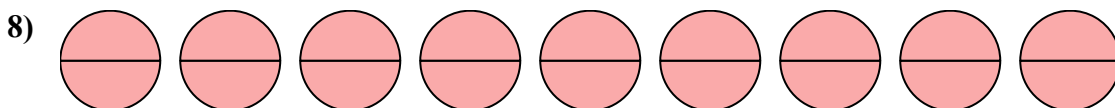
5. \_\_\_\_\_




6. \_\_\_\_\_



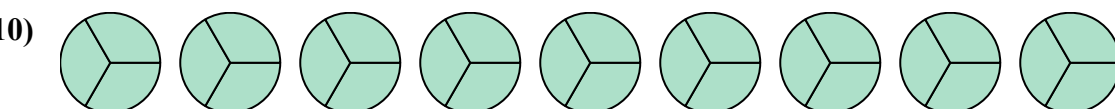
7. \_\_\_\_\_



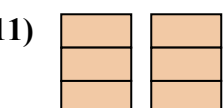
8. \_\_\_\_\_



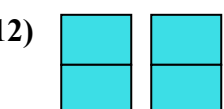
9. \_\_\_\_\_



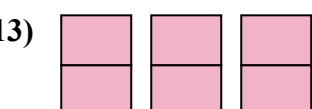
10. \_\_\_\_\_



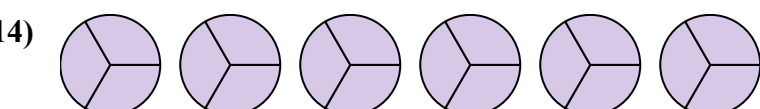
11. \_\_\_\_\_



12. \_\_\_\_\_



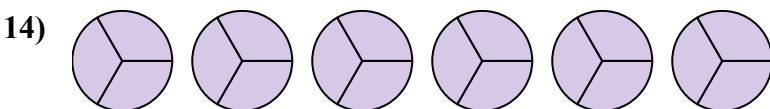
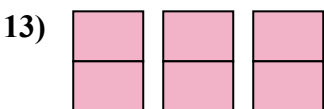
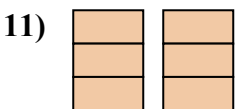
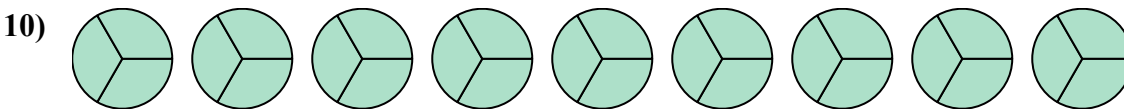

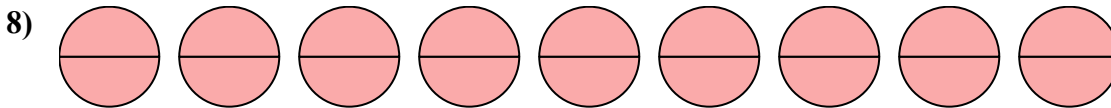
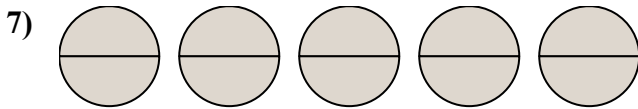
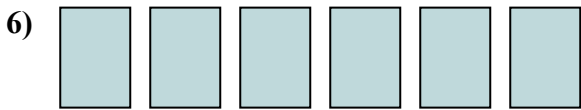
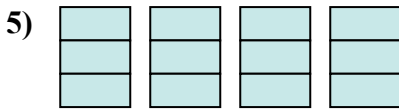
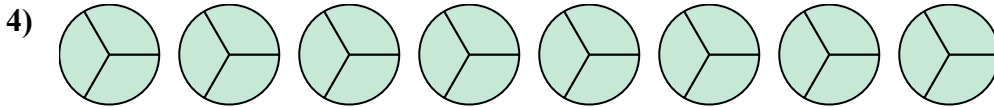

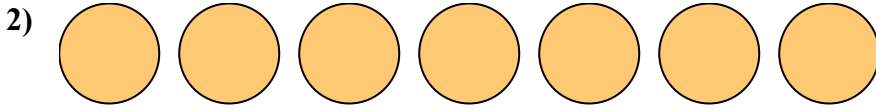

13. \_\_\_\_\_



14. \_\_\_\_\_



Запишите заштрихованную сумму дробью.

**Ответы**

1.  $\frac{12}{2}$

2.  $\frac{7}{1}$

3.  $\frac{4}{1}$

4.  $\frac{24}{3}$

5.  $\frac{12}{3}$

6.  $\frac{6}{1}$

7.  $\frac{10}{2}$

8.  $\frac{18}{2}$

9.  $\frac{3}{1}$

10.  $\frac{27}{3}$

11.  $\frac{6}{3}$

12.  $\frac{4}{2}$

13.  $\frac{6}{2}$

14.  $\frac{18}{3}$