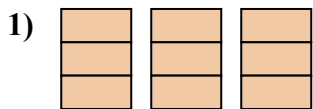


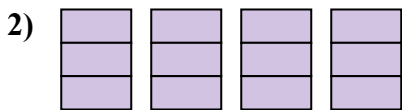


Запишите заштрихованную сумму дробью.

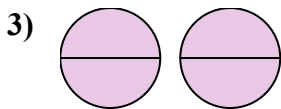
**ОТВЕТЫ**



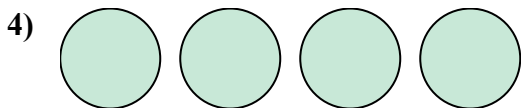
1. \_\_\_\_\_



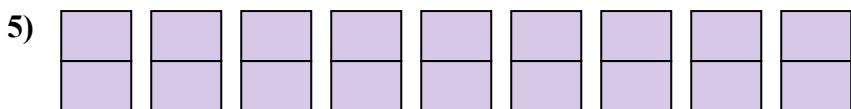
2. \_\_\_\_\_



3. \_\_\_\_\_



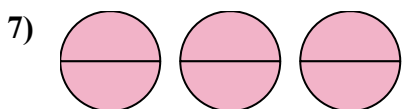
5. \_\_\_\_\_



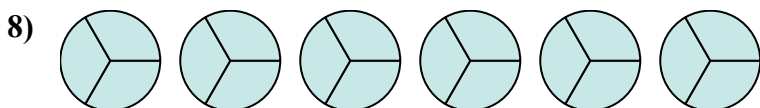
6. \_\_\_\_\_



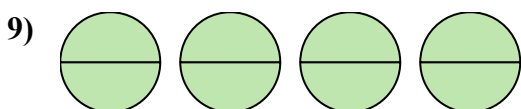
7. \_\_\_\_\_




8. \_\_\_\_\_



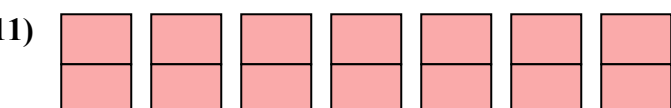
9. \_\_\_\_\_



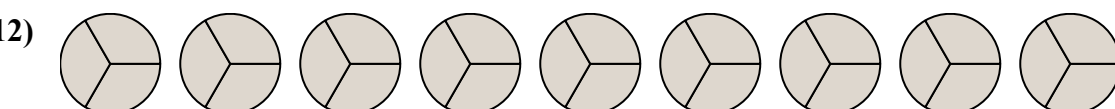
10. \_\_\_\_\_



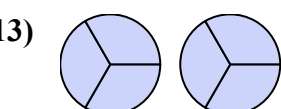
11. \_\_\_\_\_



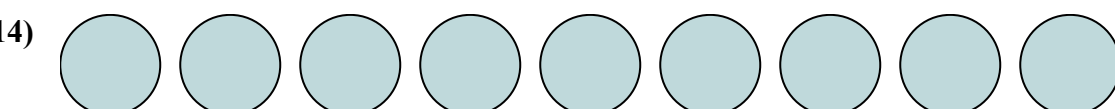
12. \_\_\_\_\_



13. \_\_\_\_\_

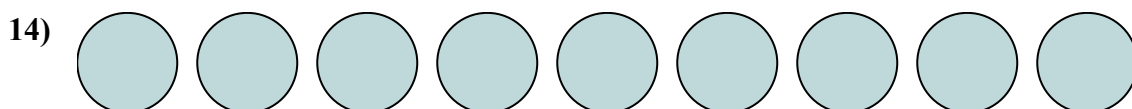
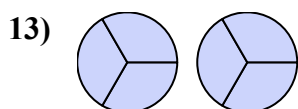
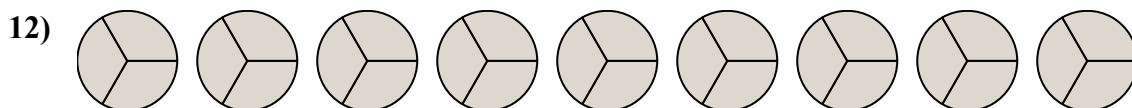
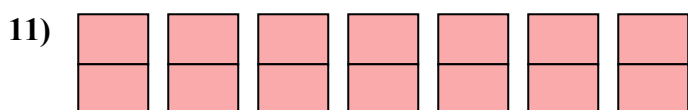

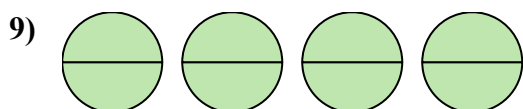
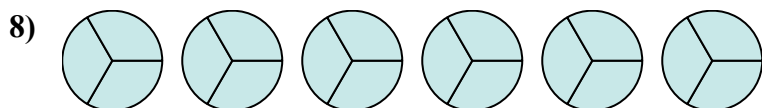
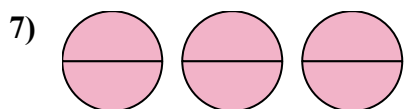
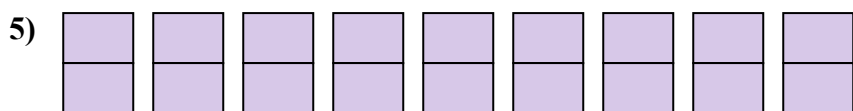
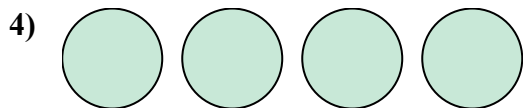
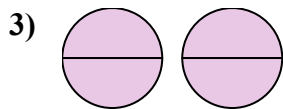
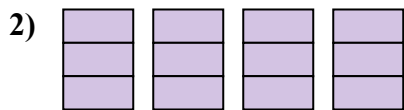
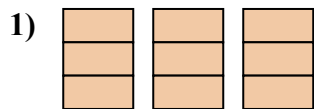


14. \_\_\_\_\_





Запишите заштрихованную сумму дробей.

**Ответы**

1.  $\frac{9}{3}$

2.  $\frac{12}{3}$

3.  $\frac{4}{2}$

4.  $\frac{4}{1}$

5.  $\frac{18}{2}$

6.  $\frac{6}{1}$

7.  $\frac{6}{2}$

8.  $\frac{18}{3}$

9.  $\frac{8}{2}$

10.  $\frac{2}{1}$

11.  $\frac{14}{2}$

12.  $\frac{27}{3}$

13.  $\frac{6}{3}$

14.  $\frac{9}{1}$