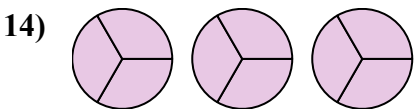
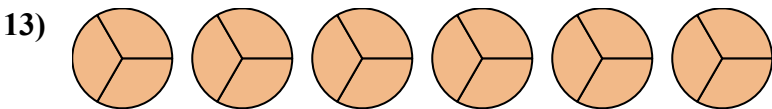

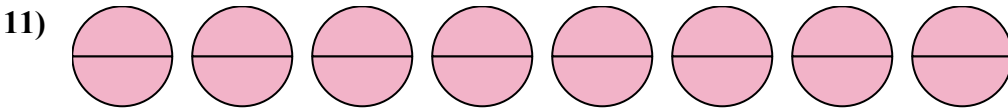
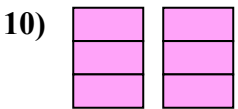
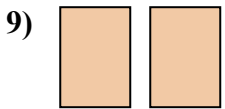
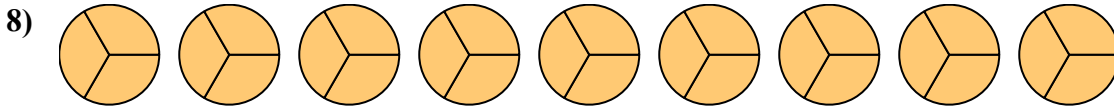
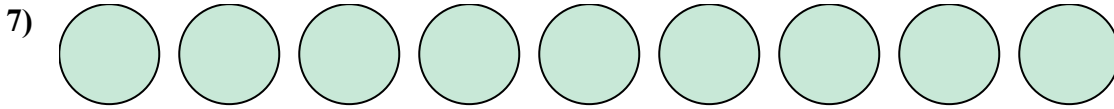
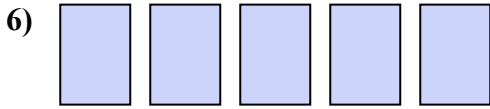

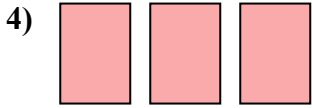
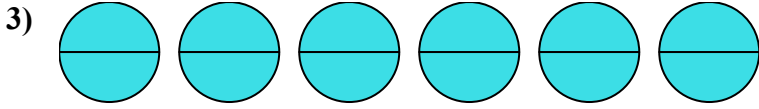
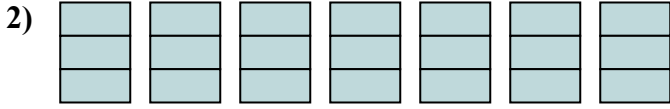
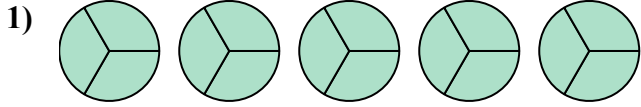




Запишите заштрихованную сумму дробью.



Ответы

1. _____

2. _____

3. _____

4. _____

5. _____

6. _____

7. _____

8. _____

9. _____

10. _____

11. _____

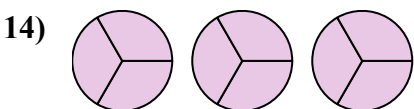
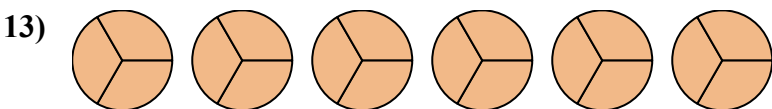

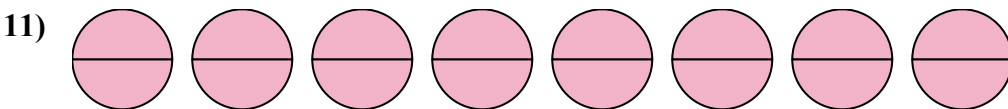
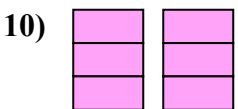
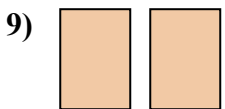
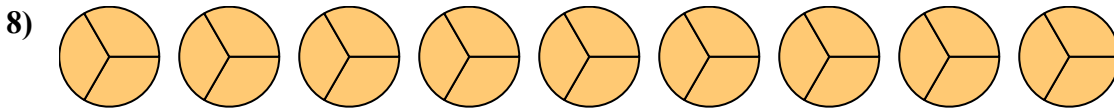
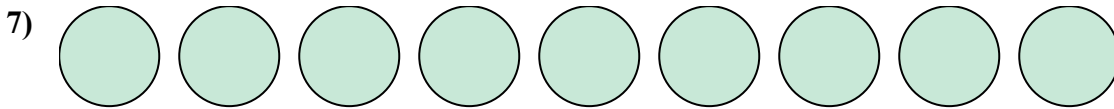
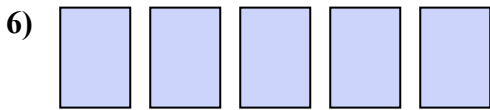

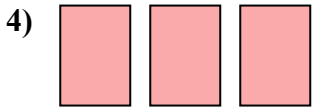
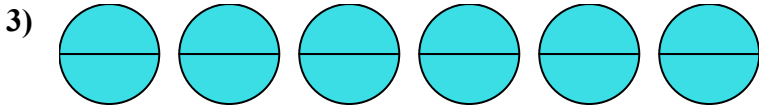
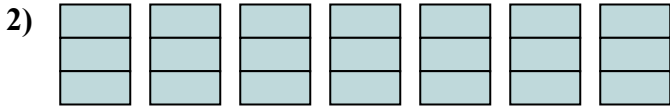
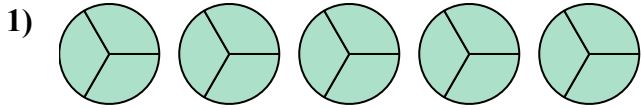
12. _____

13. _____

14. _____



Запишите заштрихованную сумму дробью.



Отвѣты

1. $\frac{15}{3}$

2. $\frac{21}{3}$

3. $\frac{12}{2}$

4. $\frac{3}{1}$

5. $\frac{4}{2}$

6. $\frac{5}{1}$

7. $\frac{9}{1}$

8. $\frac{27}{3}$

9. $\frac{2}{1}$

10. $\frac{6}{3}$

11. $\frac{16}{2}$

12. $\frac{4}{1}$

13. $\frac{18}{3}$

14. $\frac{9}{3}$