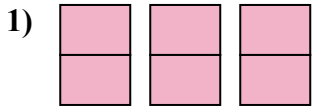


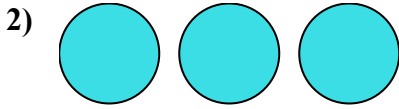


Запишите заштрихованную сумму дробью.

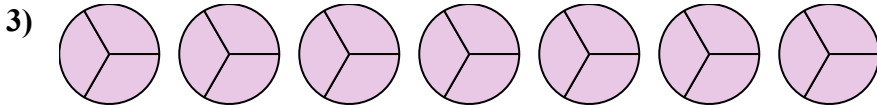
ОТВЕТЫ



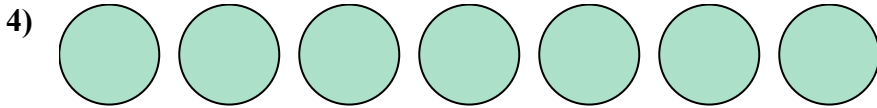
1. _____



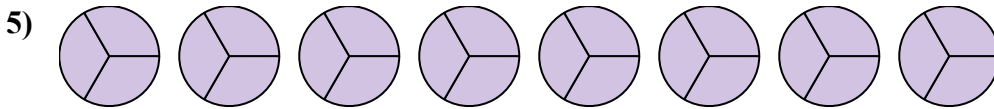
2. _____




3. _____



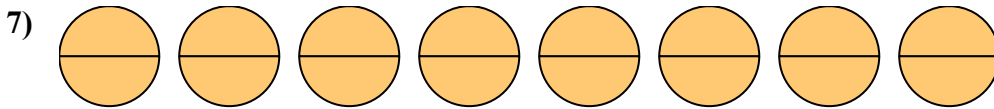
4. _____



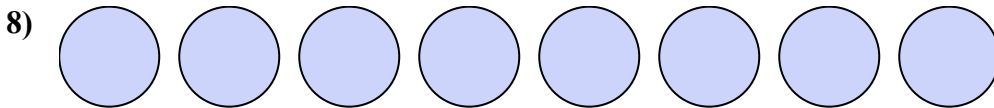
5. _____



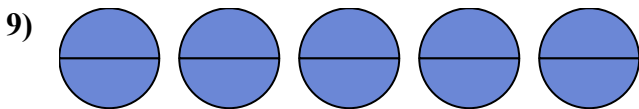
6. _____



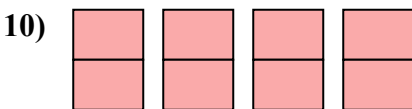
7. _____



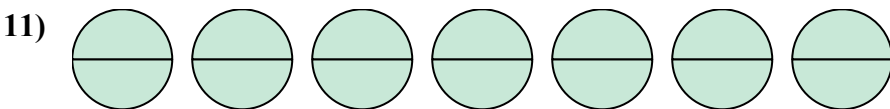
8. _____



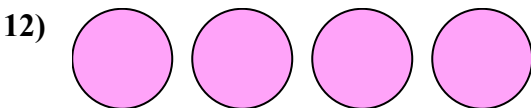
9. _____



10. _____



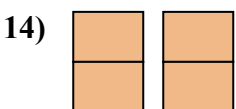
11. _____



12. _____



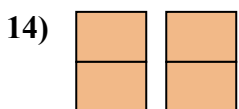
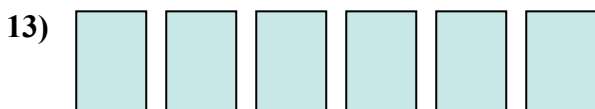
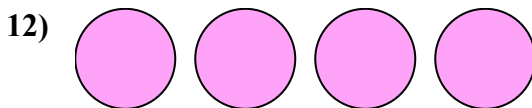
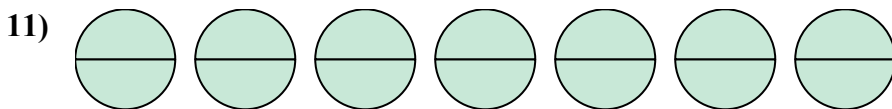
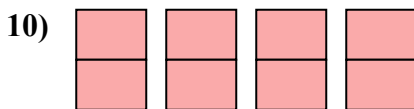
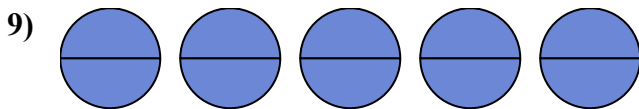
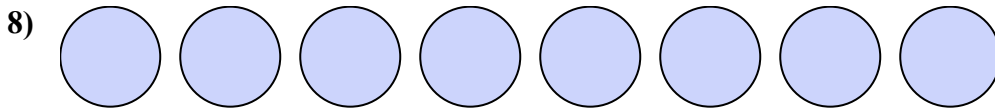
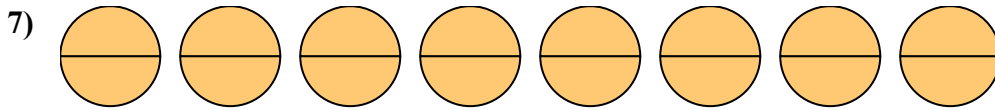

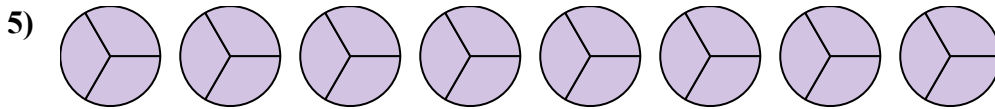
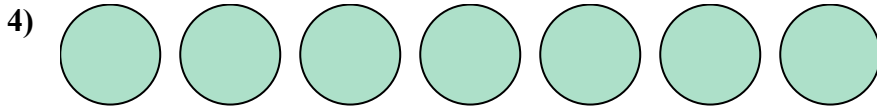
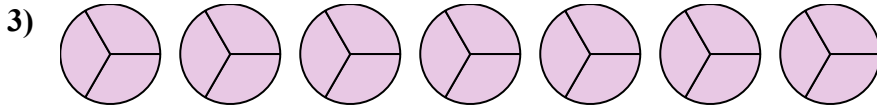

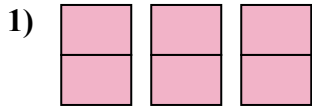
13. _____



14. _____



Запишите заштрихованную сумму дробей.

Ответы

1. $\frac{6}{2}$

2. $\frac{3}{1}$

3. $\frac{21}{3}$

4. $\frac{7}{1}$

5. $\frac{24}{3}$

6. $\frac{12}{3}$

7. $\frac{16}{2}$

8. $\frac{8}{1}$

9. $\frac{10}{2}$

10. $\frac{8}{2}$

11. $\frac{14}{2}$

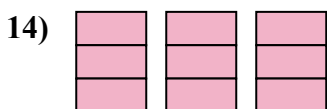
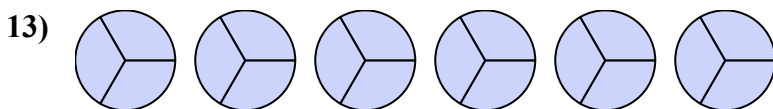
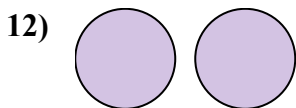
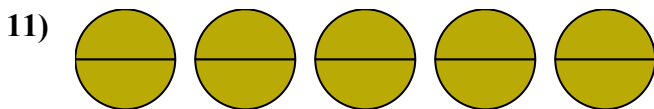
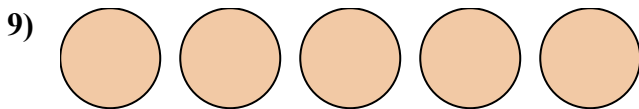
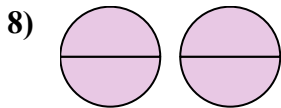
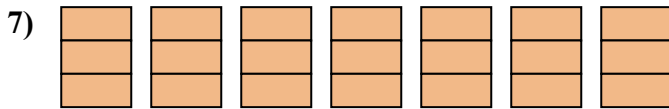
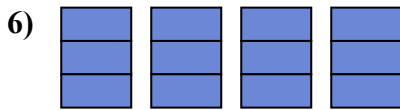
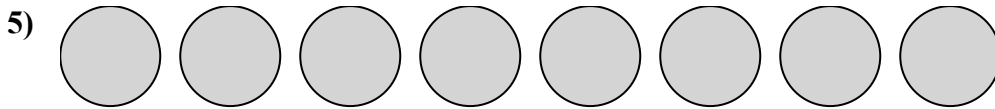
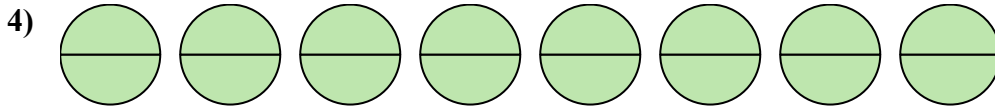

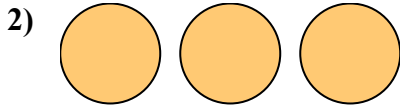
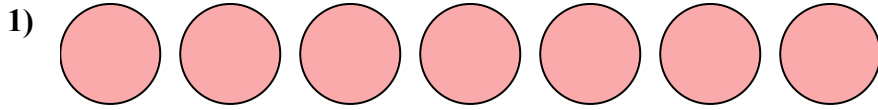
12. $\frac{4}{1}$

13. $\frac{6}{1}$

14. $\frac{4}{2}$



Запишите заштрихованную сумму дробью.



ОТВЕТЫ

1. _____

2. _____

3. _____

4. _____

5. _____

6. _____

7. _____

8. _____

9. _____

10. _____

11. _____

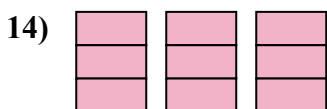
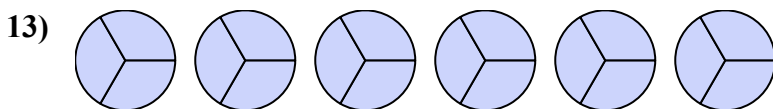
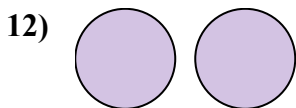
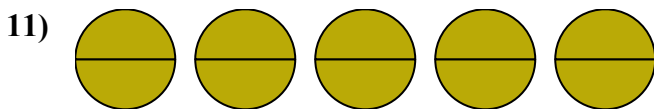
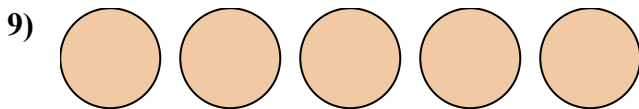
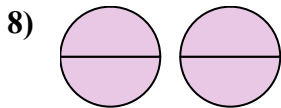
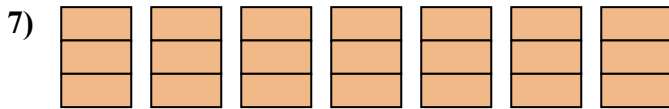
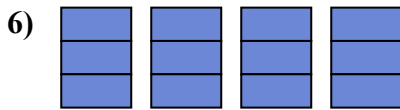
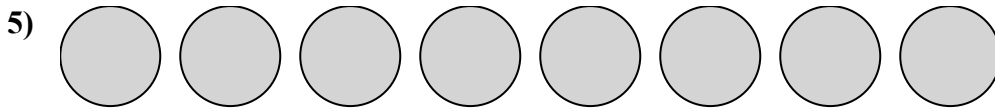
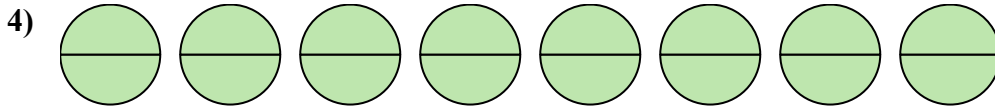

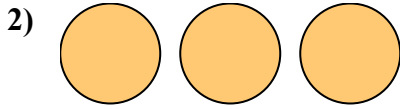
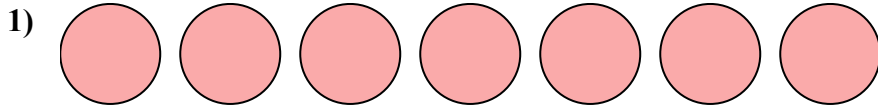
12. _____

13. _____

14. _____



Запишите заштрихованную сумму дробью.

**Отвeты**

1. $\frac{7}{1}$

2. $\frac{3}{1}$

3. $\frac{6}{1}$

4. $\frac{16}{2}$

5. $\frac{8}{1}$

6. $\frac{12}{3}$

7. $\frac{21}{3}$

8. $\frac{4}{2}$

9. $\frac{5}{1}$

10. $\frac{4}{1}$

11. $\frac{10}{2}$

12. $\frac{2}{1}$

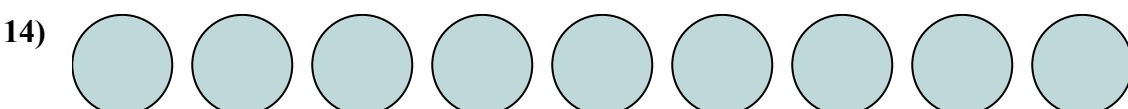
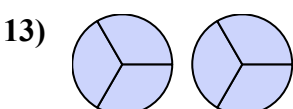
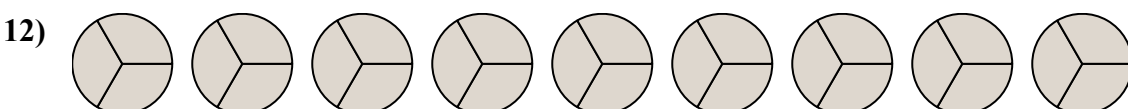
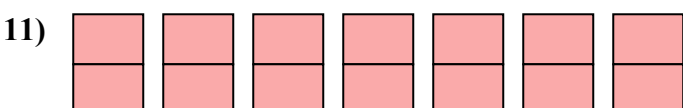

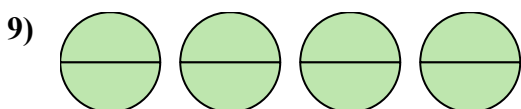
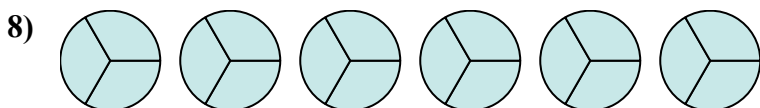
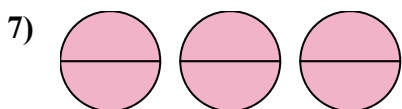
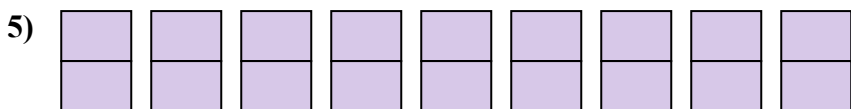
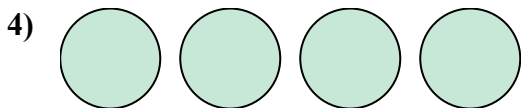
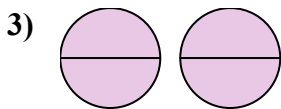
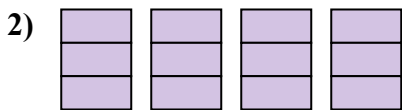
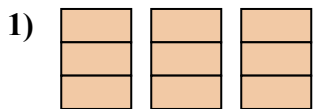
13. $\frac{18}{3}$

14. $\frac{9}{3}$



Запишите заштрихованную сумму дробью.

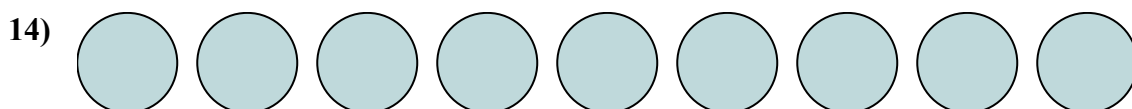
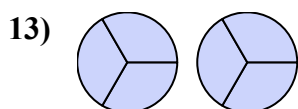
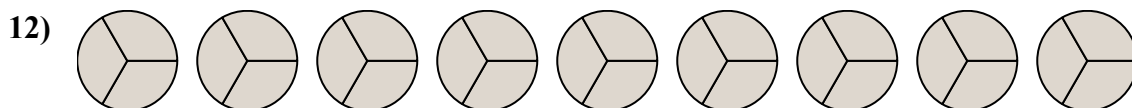
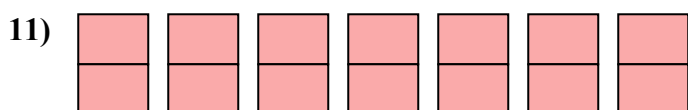
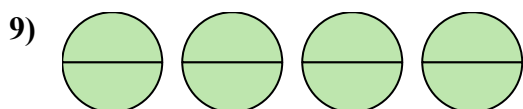
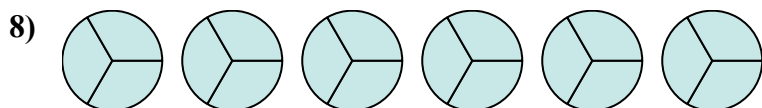
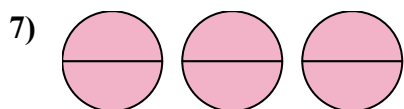
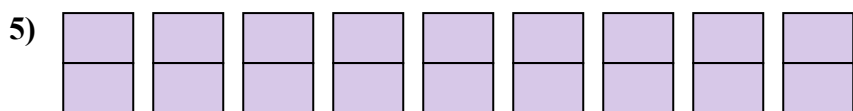
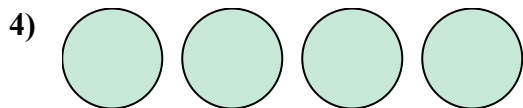
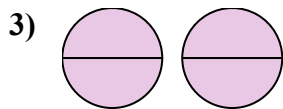
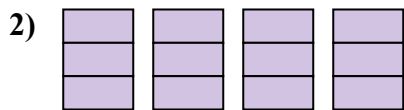
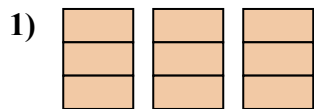
Ответы



1. _____
2. _____
3. _____
4. _____
5. _____
6. _____
7. _____
8. _____
9. _____
10. _____
11. _____
12. _____
13. _____
14. _____



Запишите заштрихованную сумму дробей.

**Отвѣты**

1. $\frac{9}{3}$

2. $\frac{12}{3}$

3. $\frac{4}{2}$

4. $\frac{4}{1}$

5. $\frac{18}{2}$

6. $\frac{6}{1}$

7. $\frac{6}{2}$

8. $\frac{18}{3}$

9. $\frac{8}{2}$

10. $\frac{2}{1}$

11. $\frac{14}{2}$

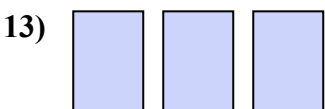
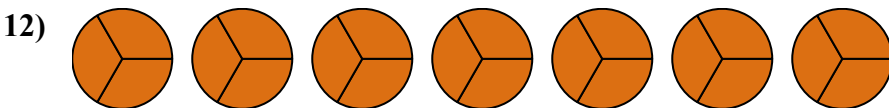
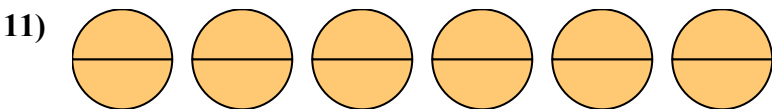
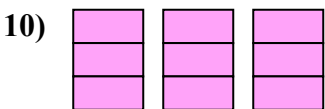
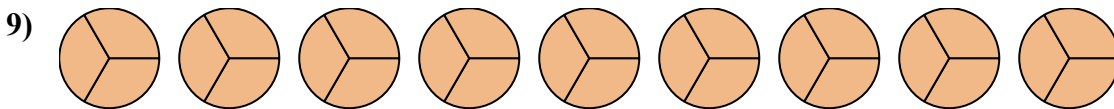
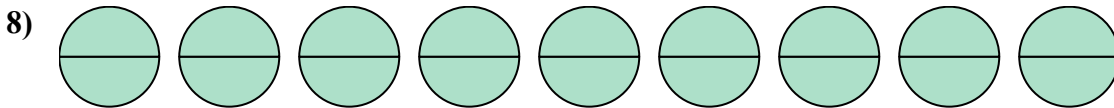
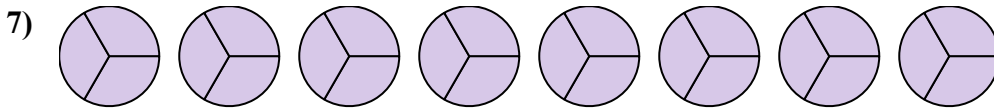
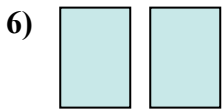
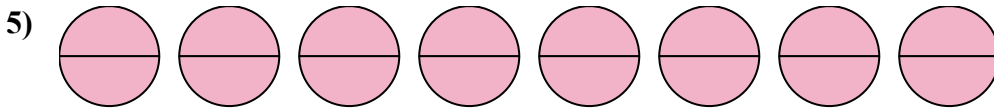

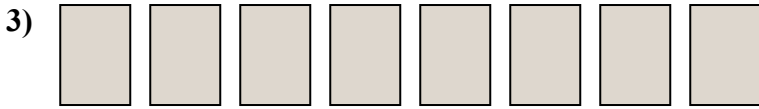
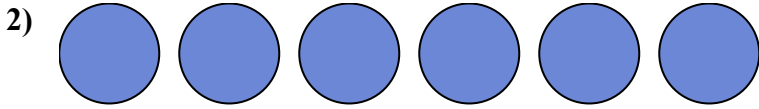
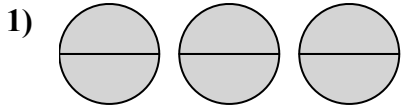
12. $\frac{27}{3}$

13. $\frac{6}{3}$

14. $\frac{9}{1}$



Запишите заштрихованную сумму дробей.



Ответы

1. _____

2. _____

3. _____

4. _____

5. _____

6. _____

7. _____

8. _____

9. _____

10. _____

11. _____

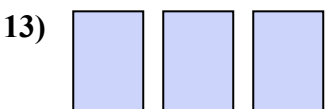
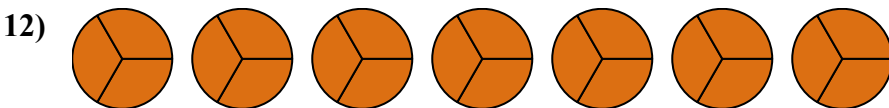
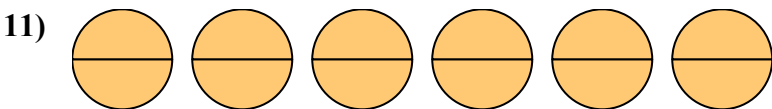
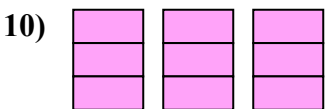
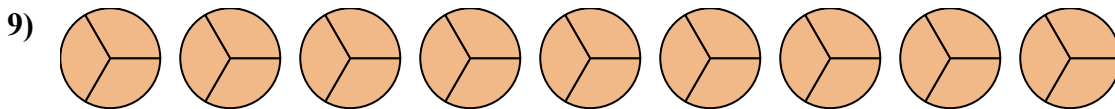
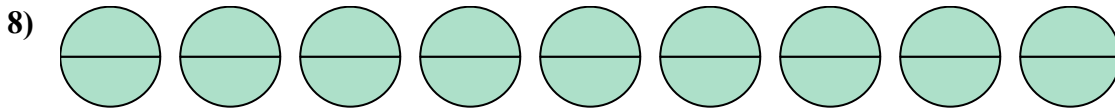
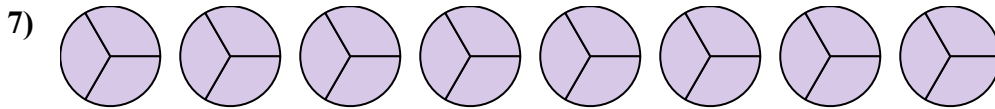
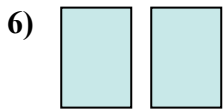
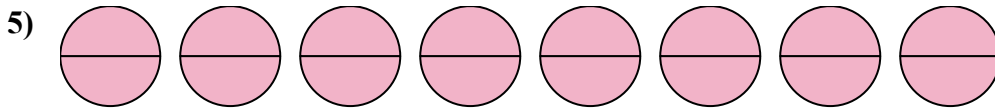

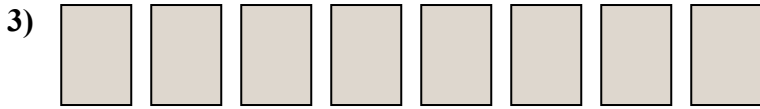
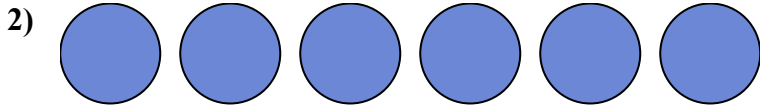
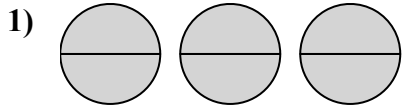
12. _____

13. _____

14. _____



Запишите заштрихованную сумму дробей.



Ответы

1. $\frac{6}{2}$

2. $\frac{6}{1}$

3. $\frac{8}{1}$

4. $\frac{4}{1}$

5. $\frac{16}{2}$

6. $\frac{2}{1}$

7. $\frac{24}{3}$

8. $\frac{18}{2}$

9. $\frac{27}{3}$

10. $\frac{9}{3}$

11. $\frac{12}{2}$

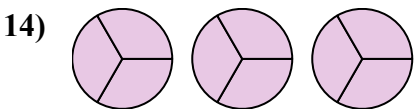
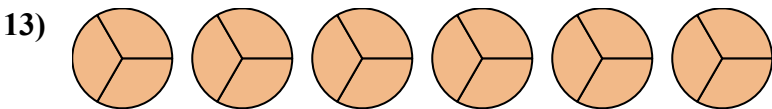

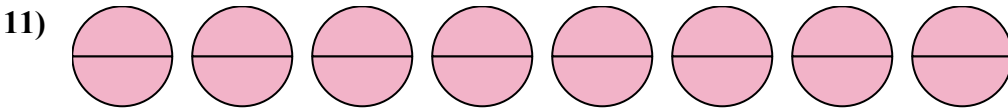
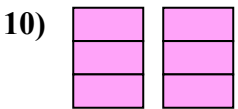
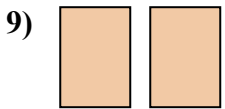
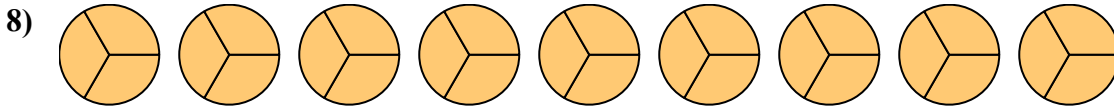
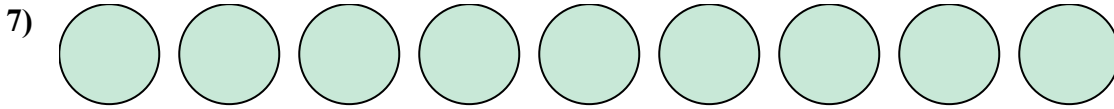
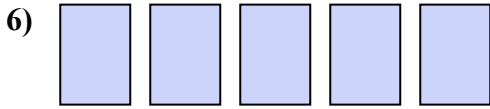

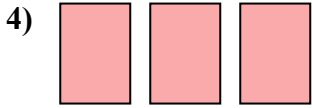
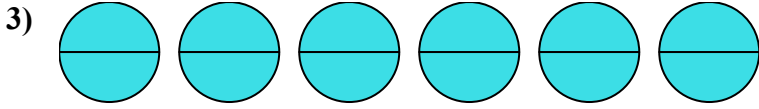
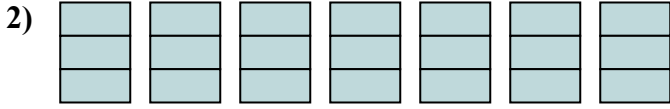
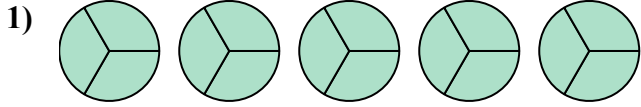
12. $\frac{21}{3}$

13. $\frac{3}{1}$

14. $\frac{6}{3}$



Запишите заштрихованную сумму дробью.



Ответы

1. _____

2. _____

3. _____

4. _____

5. _____

6. _____

7. _____

8. _____

9. _____

10. _____

11. _____

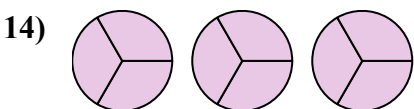
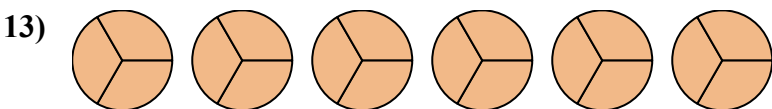

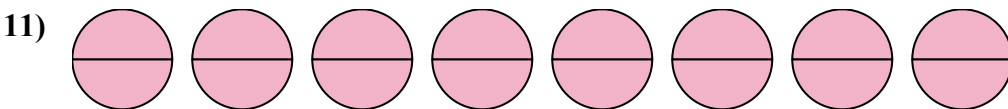
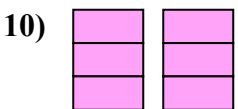
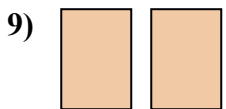
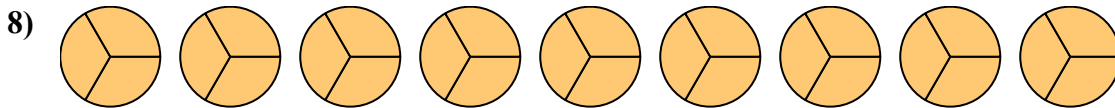
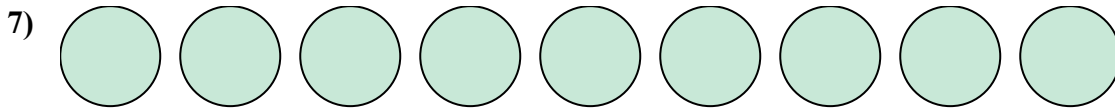
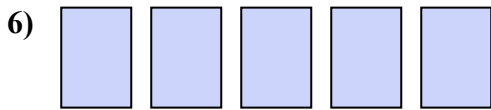

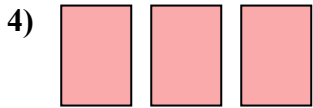
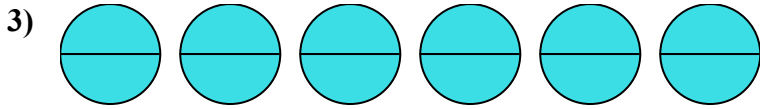
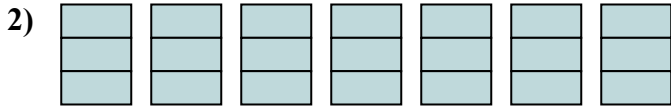
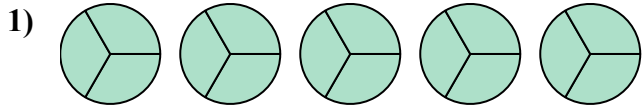
12. _____

13. _____

14. _____



Запишите заштрихованную сумму дробью.



Отвѣты

1. $\frac{15}{3}$

2. $\frac{21}{3}$

3. $\frac{12}{2}$

4. $\frac{3}{1}$

5. $\frac{4}{2}$

6. $\frac{5}{1}$

7. $\frac{9}{1}$

8. $\frac{27}{3}$

9. $\frac{2}{1}$

10. $\frac{6}{3}$

11. $\frac{16}{2}$

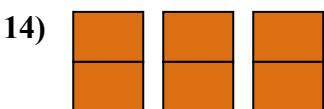
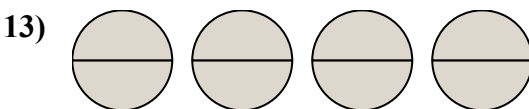
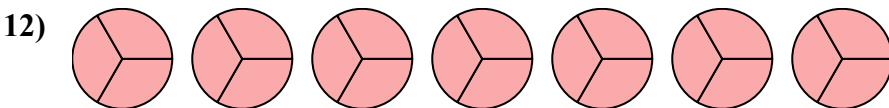
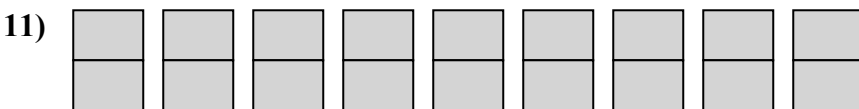
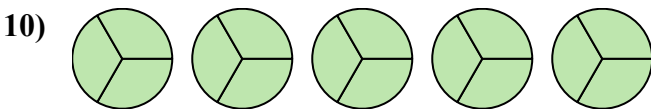
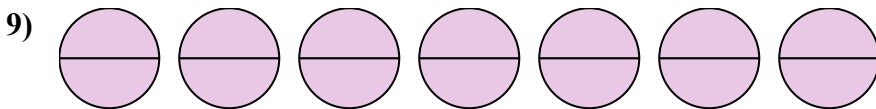
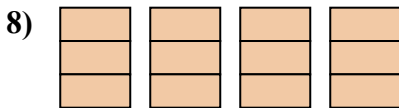
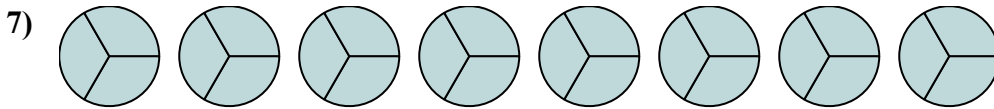
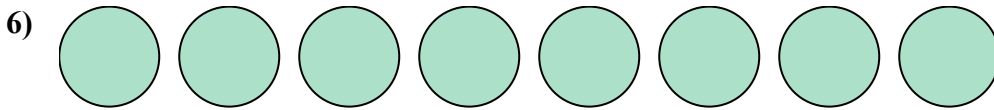
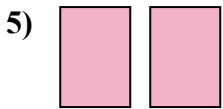

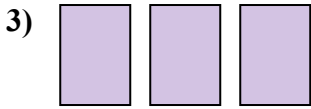
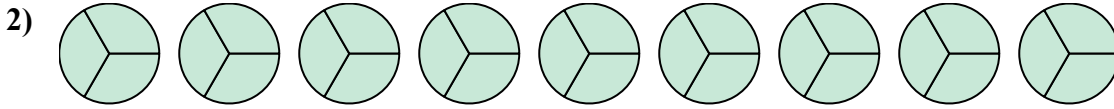
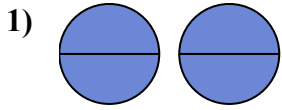
12. $\frac{4}{1}$

13. $\frac{18}{3}$

14. $\frac{9}{3}$



Запишите заштрихованную сумму дробью.



Ответы

1. _____

2. _____

3. _____

4. _____

5. _____

6. _____

7. _____

8. _____

9. _____

10. _____

11. _____

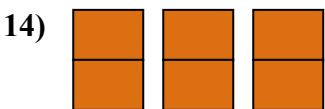
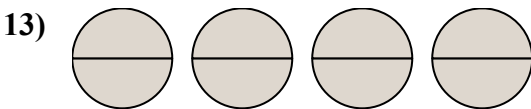
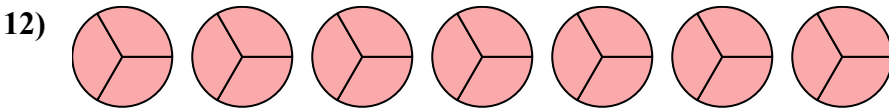
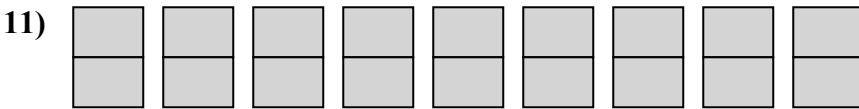
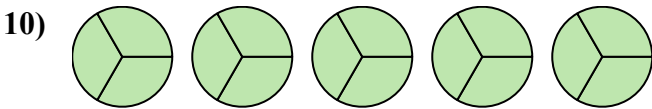
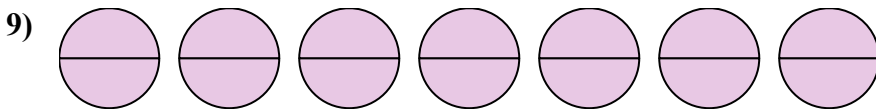
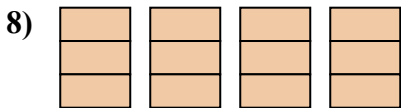
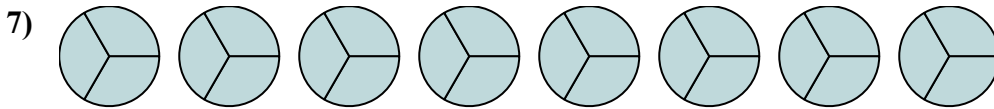
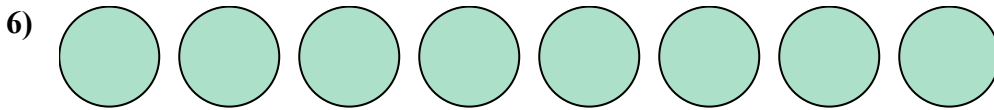
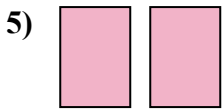

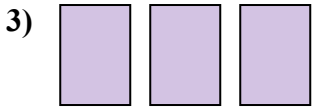
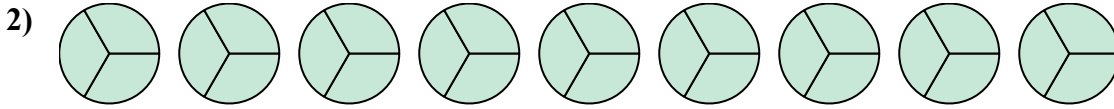
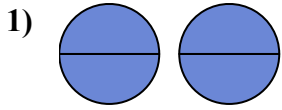
12. _____

13. _____

14. _____



Запишите заштрихованную сумму дробью.

**Ответы**

1. $\frac{4}{2}$

2. $\frac{27}{3}$

3. $\frac{3}{1}$

4. $\frac{7}{1}$

5. $\frac{2}{1}$

6. $\frac{8}{1}$

7. $\frac{24}{3}$

8. $\frac{12}{3}$

9. $\frac{14}{2}$

10. $\frac{15}{3}$

11. $\frac{18}{2}$

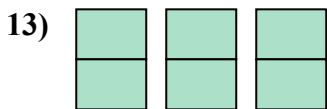
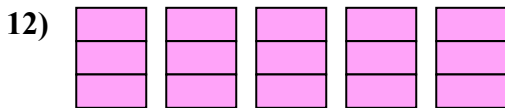
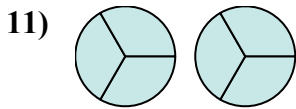
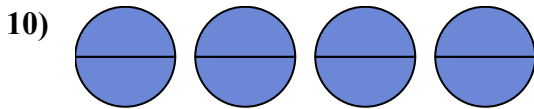
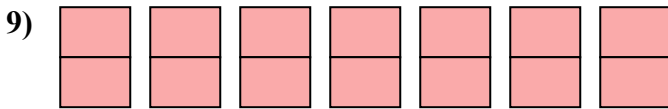
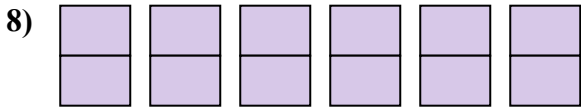
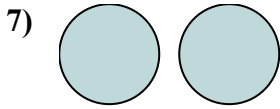
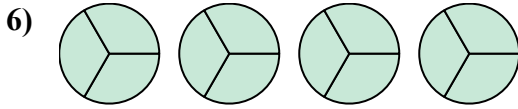
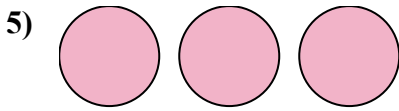

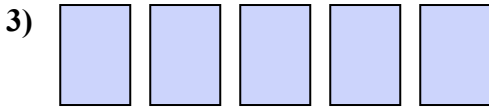
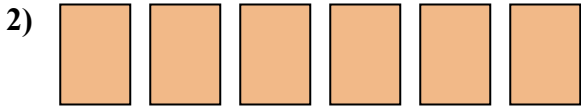
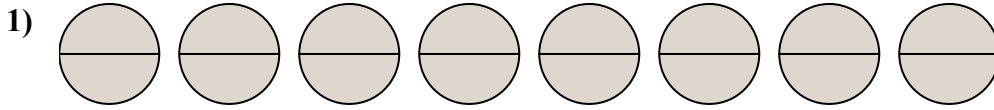
12. $\frac{21}{3}$

13. $\frac{8}{2}$

14. $\frac{6}{2}$



Запишите заштрихованную сумму дробей.

Ответы

1. _____

2. _____

3. _____

4. _____

5. _____

6. _____

7. _____

8. _____

9. _____

10. _____

11. _____

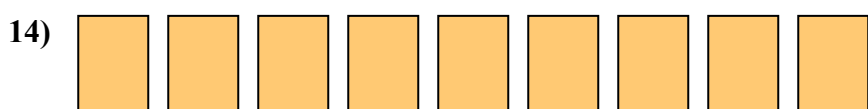
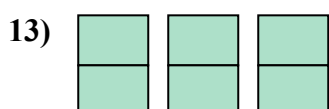
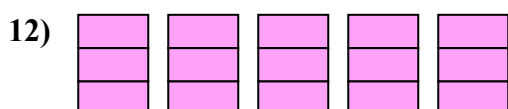
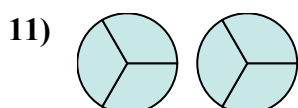
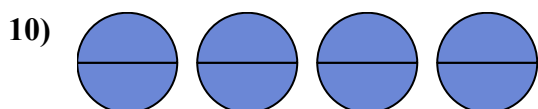
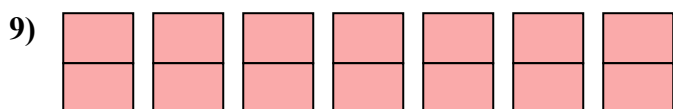
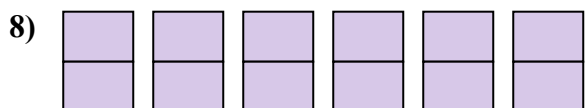
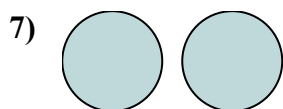
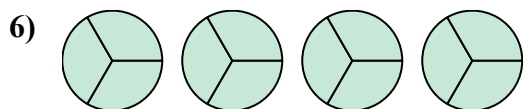
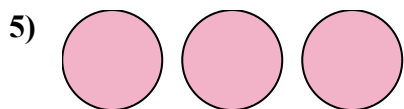
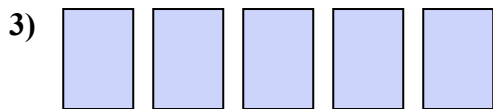
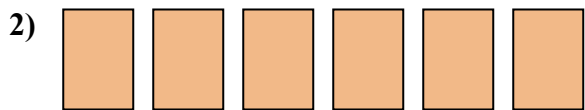
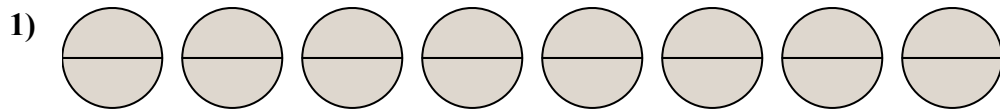
12. _____

13. _____

14. _____



Запишите заштрихованную сумму дробей.

**Ответы**

1. $\frac{16}{2}$

2. $\frac{6}{1}$

3. $\frac{5}{1}$

4. $\frac{4}{1}$

5. $\frac{3}{1}$

6. $\frac{12}{3}$

7. $\frac{2}{1}$

8. $\frac{12}{2}$

9. $\frac{14}{2}$

10. $\frac{8}{2}$

11. $\frac{6}{3}$

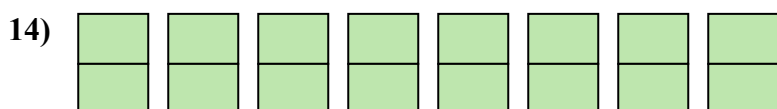
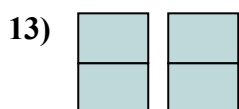
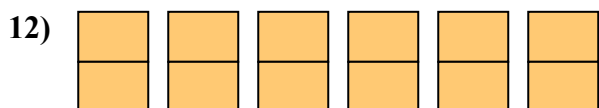
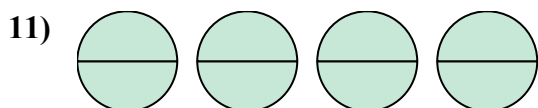
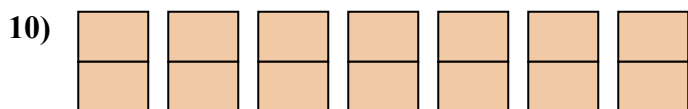
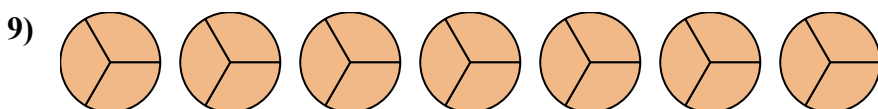
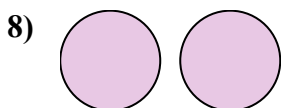
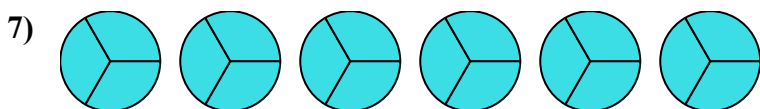
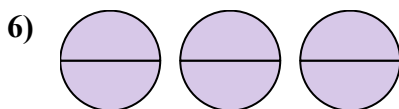
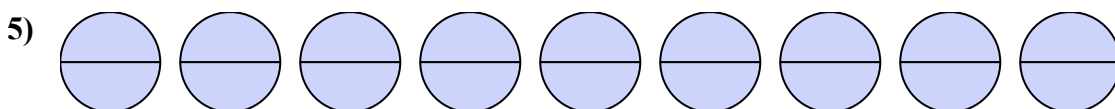
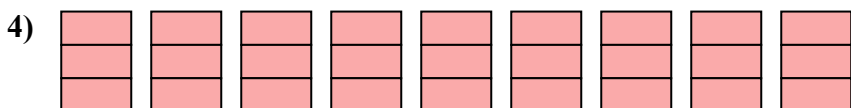
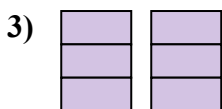
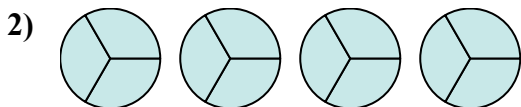
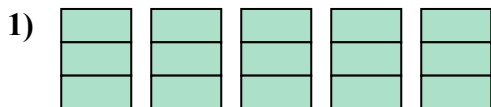
12. $\frac{15}{3}$

13. $\frac{6}{2}$

14. $\frac{9}{1}$



Запишите заштрихованную сумму дробью.



ОТВЕТЫ

1. _____

2. _____

3. _____

4. _____

5. _____

6. _____

7. _____

8. _____

9. _____

10. _____

11. _____

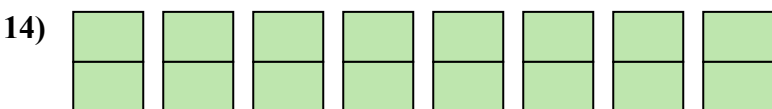
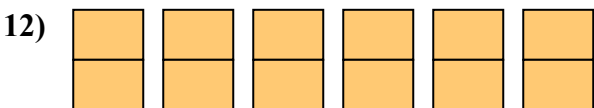
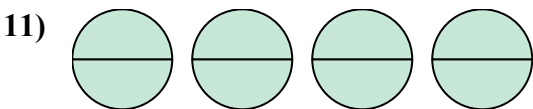
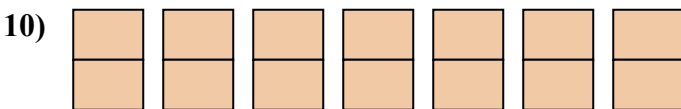
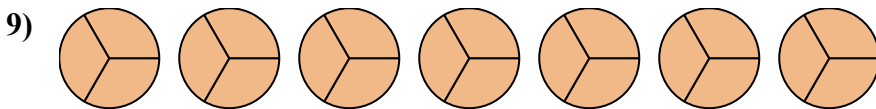
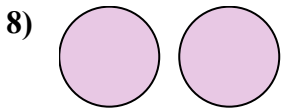
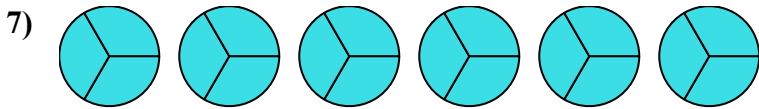
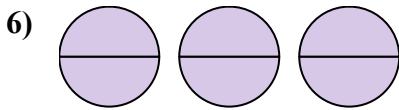
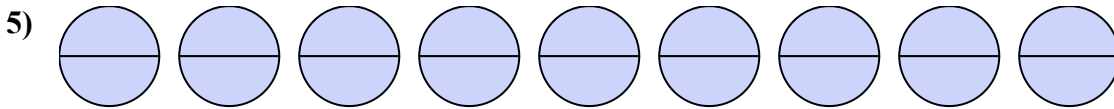
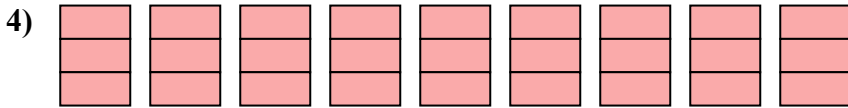
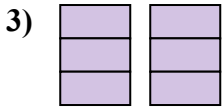
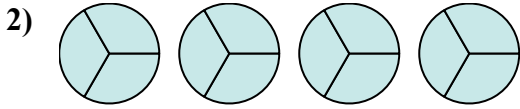
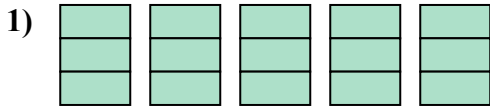
12. _____

13. _____

14. _____



Запишите заштрихованную сумму дробей.

**Отвѣты**

1. $\frac{15}{3}$

2. $\frac{12}{3}$

3. $\frac{6}{3}$

4. $\frac{27}{3}$

5. $\frac{18}{2}$

6. $\frac{6}{2}$

7. $\frac{18}{3}$

8. $\frac{2}{1}$

9. $\frac{21}{3}$

10. $\frac{14}{2}$

11. $\frac{8}{2}$

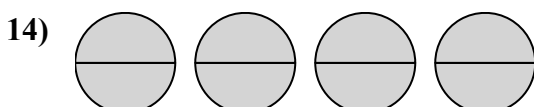
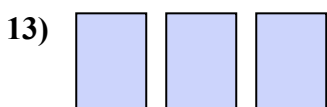
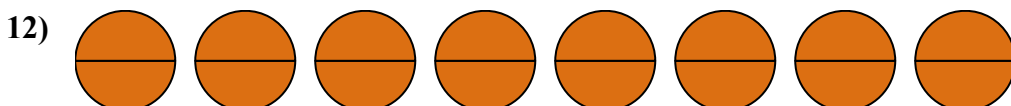
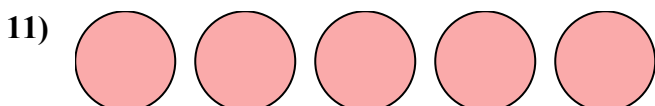
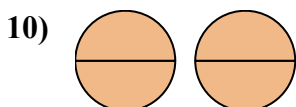
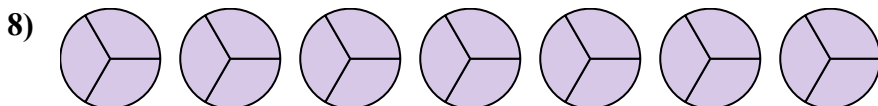
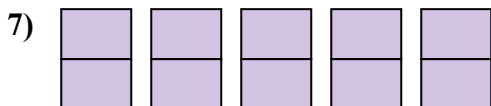
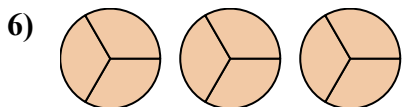
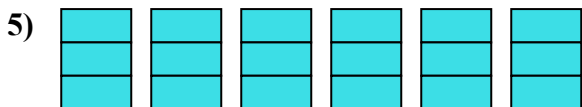
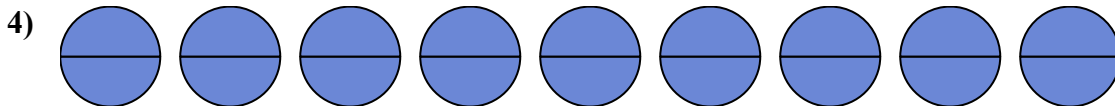
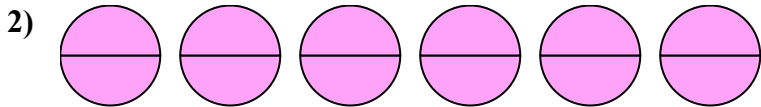
12. $\frac{12}{2}$

13. $\frac{4}{2}$

14. $\frac{16}{2}$



Запишите заштрихованную сумму дробью.



Ответы

1. _____

2. _____

3. _____

4. _____

5. _____

6. _____

7. _____

8. _____

9. _____

10. _____

11. _____

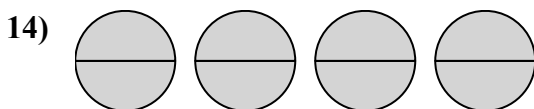
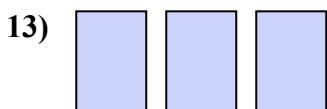
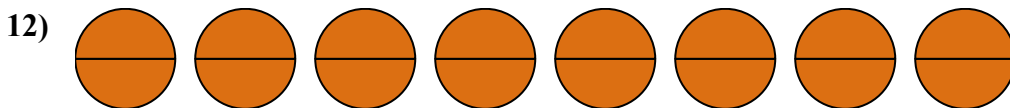
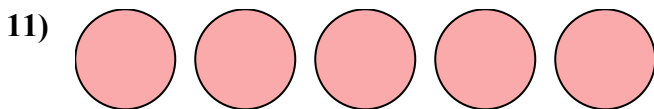
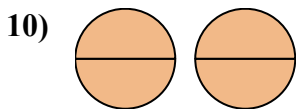
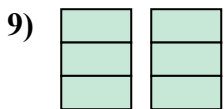
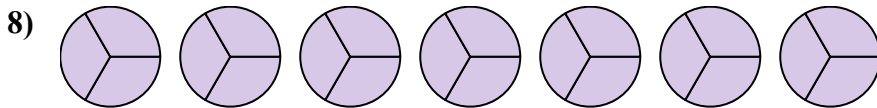
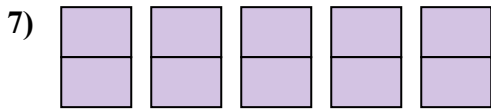
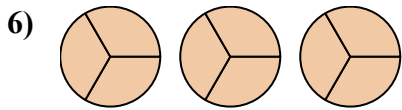
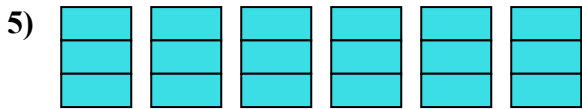
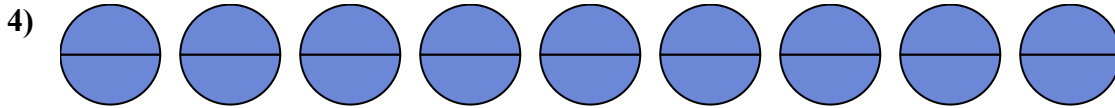
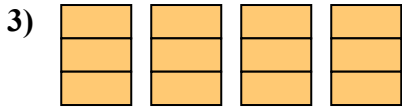
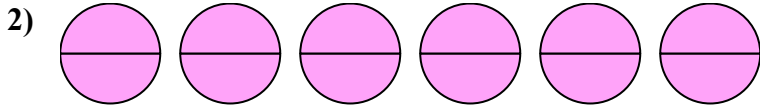
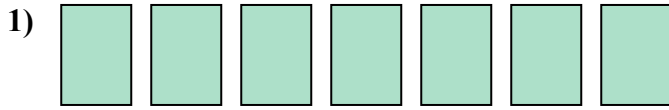
12. _____

13. _____

14. _____



Запишите заштрихованную сумму дробью.

**Ответы**

1. $\frac{7}{1}$

2. $\frac{12}{2}$

3. $\frac{12}{3}$

4. $\frac{18}{2}$

5. $\frac{18}{3}$

6. $\frac{9}{3}$

7. $\frac{10}{2}$

8. $\frac{21}{3}$

9. $\frac{6}{3}$

10. $\frac{4}{2}$

11. $\frac{5}{1}$

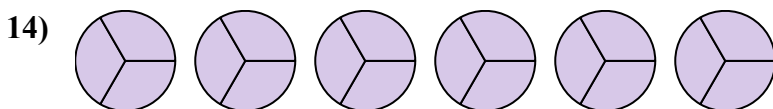
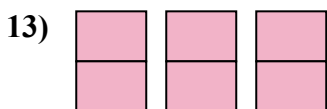
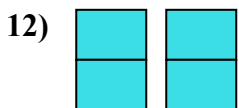
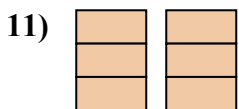
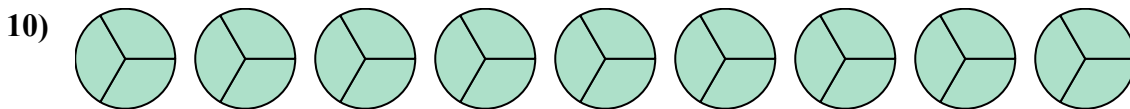

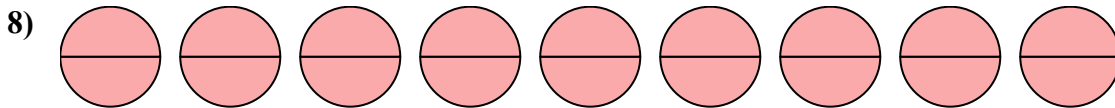
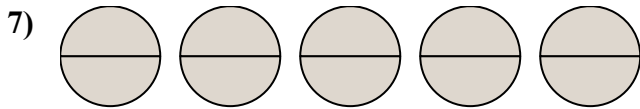
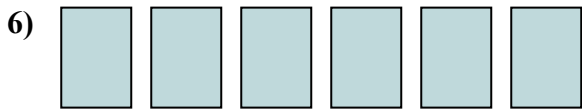
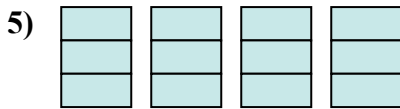
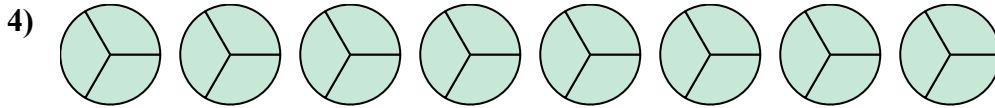

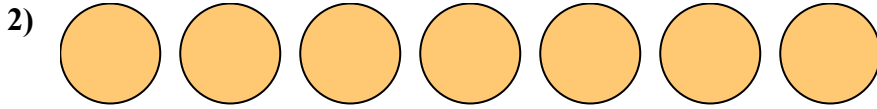

12. $\frac{16}{2}$

13. $\frac{3}{1}$

14. $\frac{8}{2}$



Запишите заштрихованную сумму дробью.

Ответы

1. _____

2. _____

3. _____

4. _____

5. _____

6. _____

7. _____

8. _____

9. _____

10. _____

11. _____

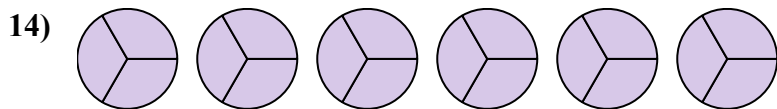
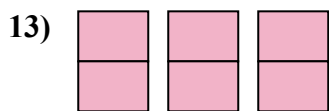
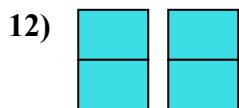
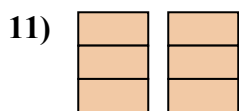
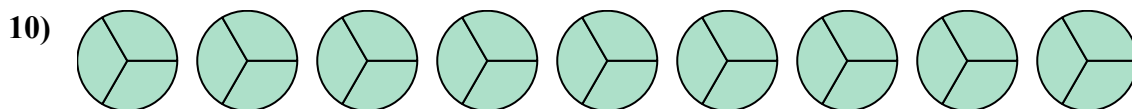

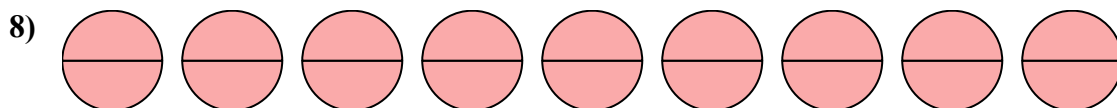
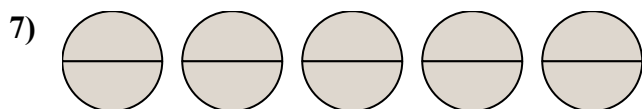
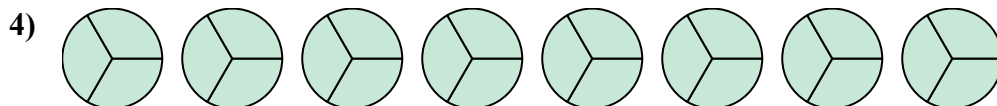

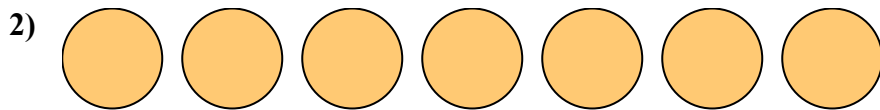

12. _____

13. _____

14. _____



Запишите заштрихованную сумму дробью.

**Ответы**

1. $\frac{12}{2}$

2. $\frac{7}{1}$

3. $\frac{4}{1}$

4. $\frac{24}{3}$

5. $\frac{12}{3}$

6. $\frac{6}{1}$

7. $\frac{10}{2}$

8. $\frac{18}{2}$

9. $\frac{3}{1}$

10. $\frac{27}{3}$

11. $\frac{6}{3}$

12. $\frac{4}{2}$

13. $\frac{6}{2}$

14. $\frac{18}{3}$