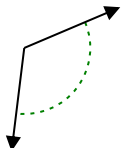




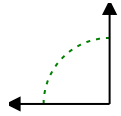
Определите угол- острый, тупой, прямой или развернутый.

ОТВЕТЫ

об)



1)



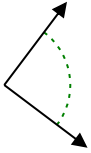
2)



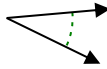
об.

тупой

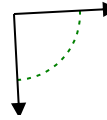
3)



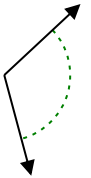
4)



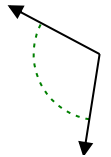
5)



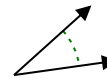
6)



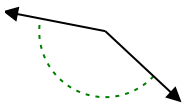
7)



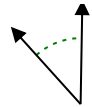
8)



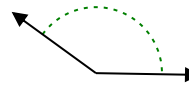
9)



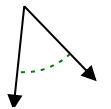
10)



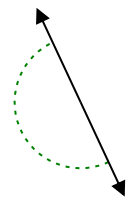
11)



12)



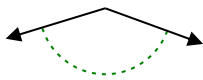
13)



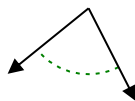
14)



15)



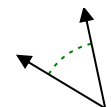
16)



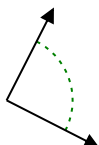
17)



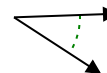
18)



19)



20)



1.

2.

3.

4.

5.

6.

7.

8.

9.

10.

11.

12.

13.

14.

15.

16.

17.

18.

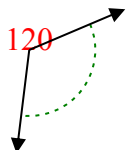
19.

20.

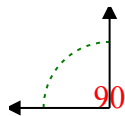


Определите угол- острый, тупой, прямой или развернутый.

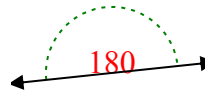
об)



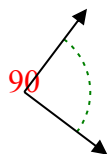
1)



2)



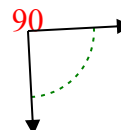
3)



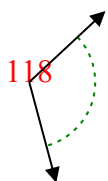
4)



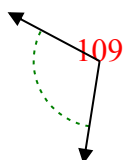
5)



6)



7)



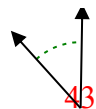
8)



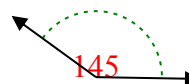
9)



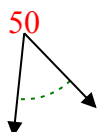
10)



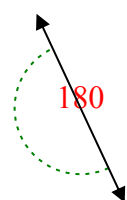
11)



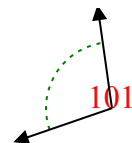
12)



13)



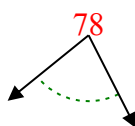
14)



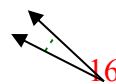
15)



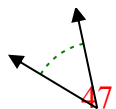
16)



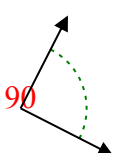
17)



18)



19)



20)



Ответы

об. тупой

1. прямой

2. развернутый

3. прямой

4. острый

5. прямой

6. тупой

7. тупой

8. острый

9. тупой

10. острый

11. тупой

12. острый

13. развернутый

14. тупой

15. тупой

16. острый

17. острый

18. острый

19. прямой

20. острый

1-10	95	90	85	80	75	70	65	60	55	50
11-20	45	40	35	30	25	20	15	10	5	0