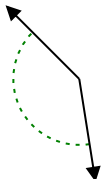




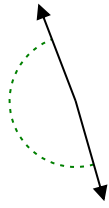
Определите угол- острый, тупой, прямой или развернутый.

ОТВЕТЫ

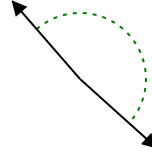
об)



1)

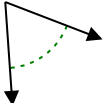


2)

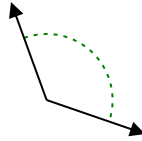


об. **тупой**

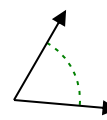
3)



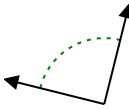
4)



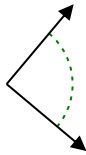
5)



6)



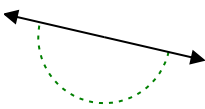
7)



8)



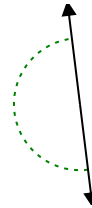
9)



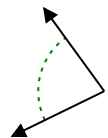
10)



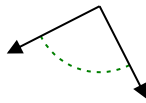
11)



12)



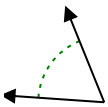
13)



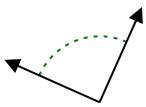
14)



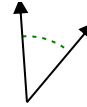
15)



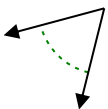
16)



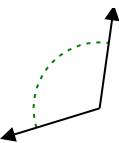
17)



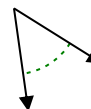
18)



19)



20)



1. _____

2. _____

3. _____

4. _____

5. _____

6. _____

7. _____

8. _____

9. _____

10. _____

11. _____

12. _____

13. _____

14. _____

15. _____

16. _____

17. _____


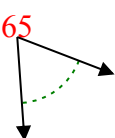
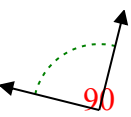
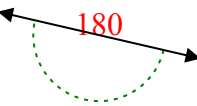

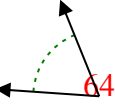
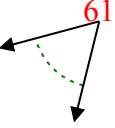
18. _____

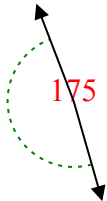
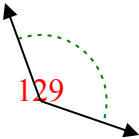
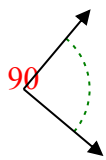

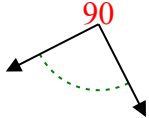
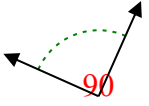
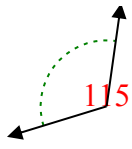
19. _____

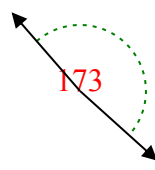
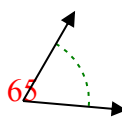



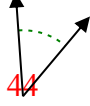
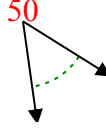
20. _____



Определите угол- острый, тупой, прямой или развернутый.

- об)  144
- 3)  65
- 6)  90
- 9)  180
- 12)  80
- 15)  64
- 18)  61

- 1)  175
- 4)  129
- 7)  90
- 10)  29
- 13)  90
- 16)  90
- 19)  115

- 2)  173
- 5)  62
- 8)  171
- 11)  180
- 14)  121
- 17)  44
- 20)  50

ОТВЕТЫ

- об. тупой
- 1. тупой
- 2. тупой
- 3. острый
- 4. тупой
- 5. острый
- 6. прямой
- 7. прямой
- 8. тупой
- 9. развернутый
- 10. острый
- 11. развернутый
- 12. острый
- 13. прямой
- 14. тупой
- 15. острый
- 16. прямой
- 17. острый
- 18. острый
- 19. тупой
- 20. острый