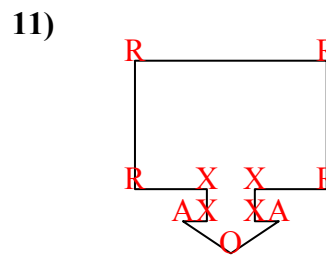
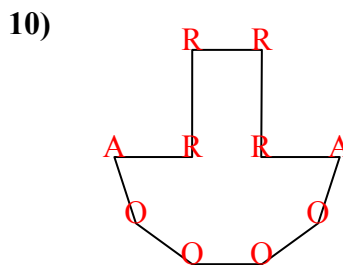
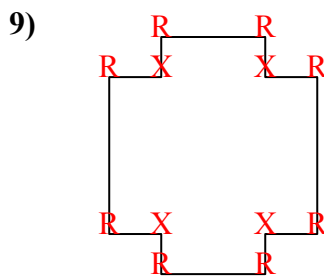
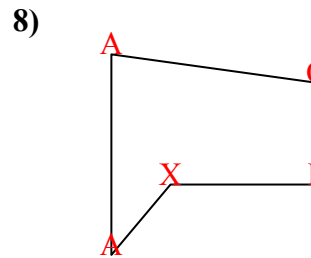
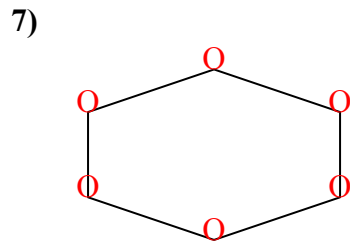
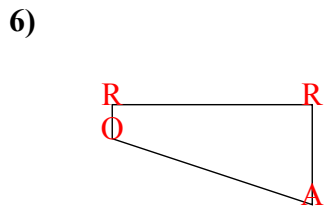
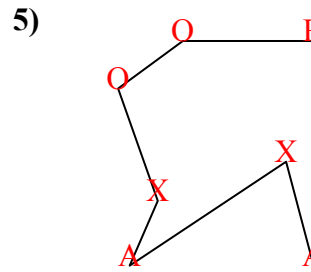
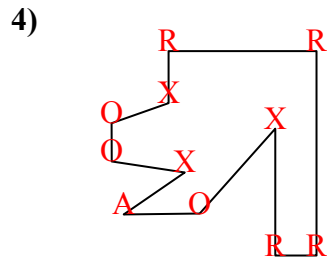
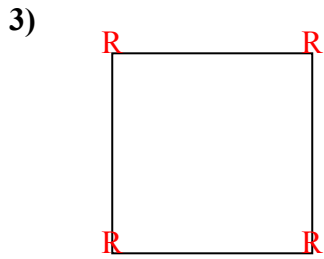
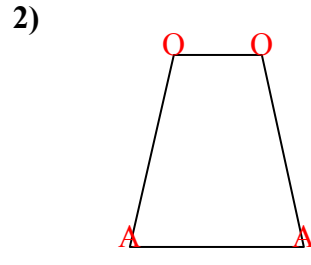
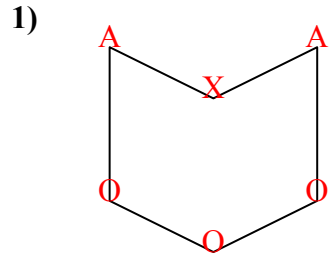
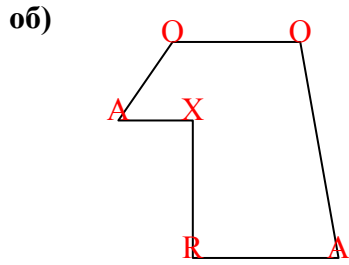




Определите количество острых, тупых и прямых углов внутри каждой фигуры.

ОТВЕТЫ



об.	<u>2</u>	<u>2</u>	<u>1</u>	<u>1</u>
1.	<u>2</u>	<u>3</u>	<u>0</u>	<u>1</u>
2.	<u>2</u>	<u>2</u>	<u>0</u>	<u>0</u>
3.	<u>0</u>	<u>0</u>	<u>4</u>	<u>0</u>
4.	<u>1</u>	<u>3</u>	<u>4</u>	<u>3</u>
5.	<u>2</u>	<u>2</u>	<u>1</u>	<u>2</u>
6.	<u>1</u>	<u>1</u>	<u>2</u>	<u>0</u>
7.	<u>0</u>	<u>0</u>	<u>6</u>	<u>0</u>
8.	<u>2</u>	<u>1</u>	<u>1</u>	<u>1</u>
9.	<u>0</u>	<u>0</u>	<u>8</u>	<u>4</u>
10.	<u>2</u>	<u>4</u>	<u>4</u>	<u>0</u>
11.	<u>2</u>	<u>1</u>	<u>4</u>	<u>4</u>