



Вычислите угол круга относительно точки (0,0).

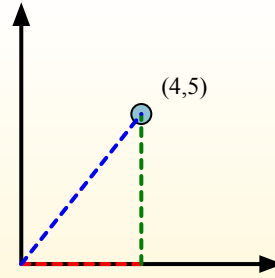
Primero encuentra la pendiente.

$$(y_2 - y_1) \div (x_2 - x_1) = m$$

$$(5 - 0) \div (4 - 0) = 1.25$$

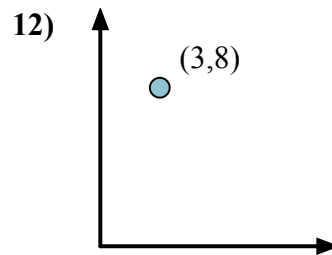
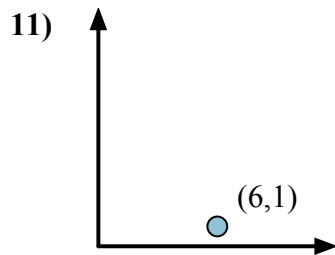
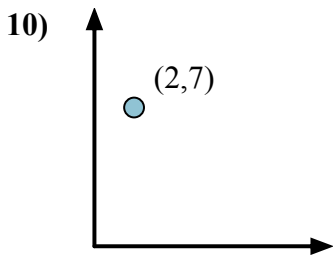
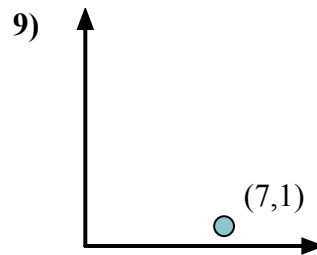
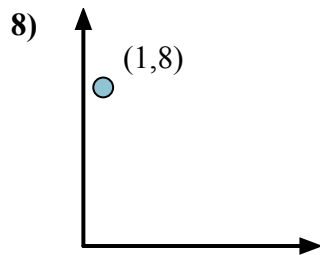
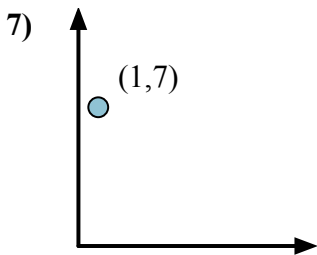
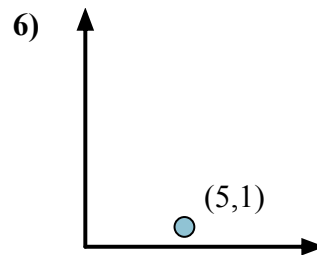
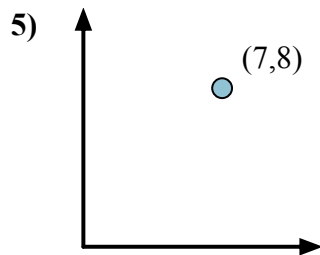
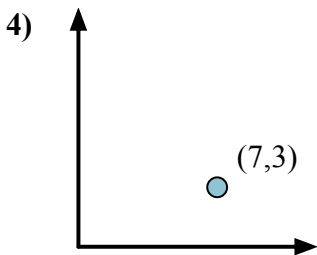
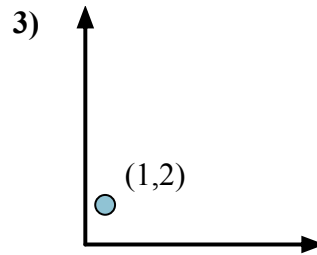
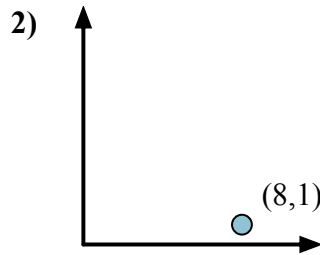
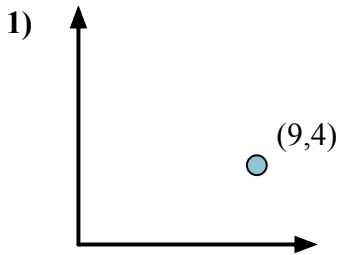
Em seguida, encontre o arco da tangente (também conhecido como tangente inversa) da inclinação.

$$\arctan(1.25) = 51.34^\circ$$



Ответы

1. _____
2. _____
3. _____
4. _____
5. _____
6. _____
7. _____
8. _____
9. _____
10. _____
11. _____
12. _____





Вычислите угол круга относительно точки (0,0).

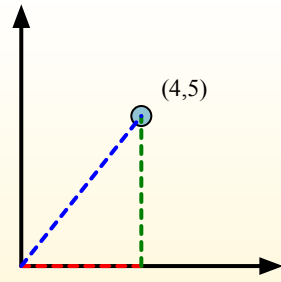
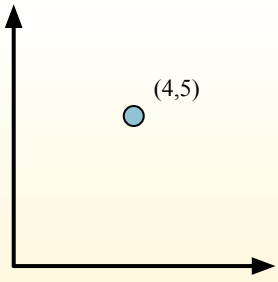
Primero encuentra la pendiente.

$$(y_2 - y_1) \div (x_2 - x_1) = m$$

$$(5 - 0) \div (4 - 0) = 1.25$$

Em seguida, encontre o arco da tangente (também conhecido como tangente inversa) da inclinação.

$$\arctan(1.25) = 51.34^\circ$$



Ответы

1. 23,96
2. 7,13
3. 63,43
4. 23,20
5. 48,81
6. 11,31
7. 81,87
8. 82,87
9. 8,13
10. 74,05
11. 9,46
12. 69,44

