



Вычислите угол круга относительно точки (0,0).

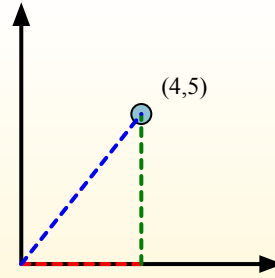
Primero encuentra la pendiente.

$$(y_2 - y_1) \div (x_2 - x_1) = m$$

$$(5 - 0) \div (4 - 0) = 1.25$$

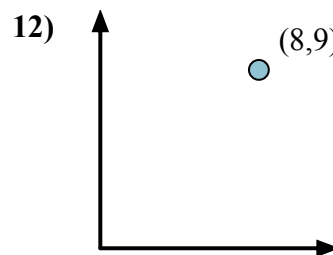
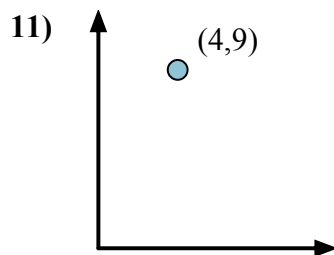
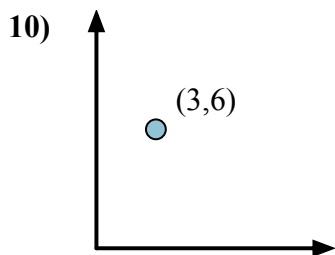
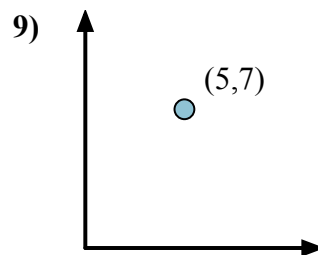
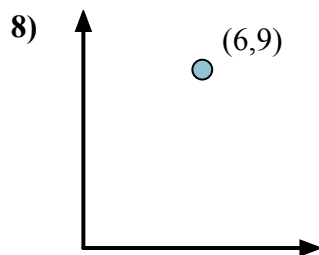
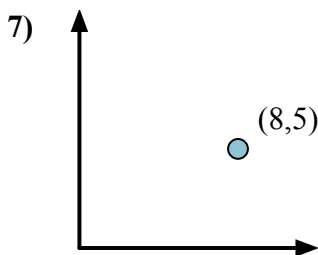
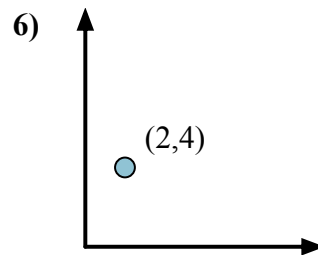
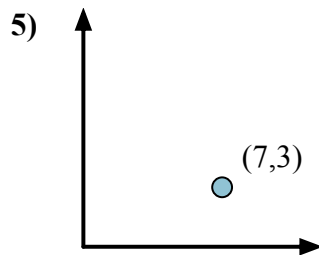
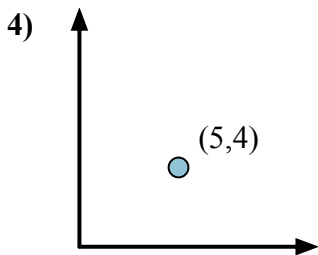
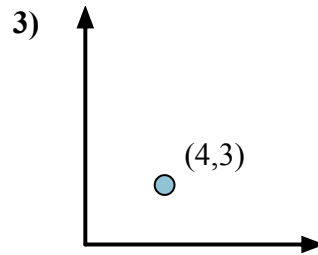
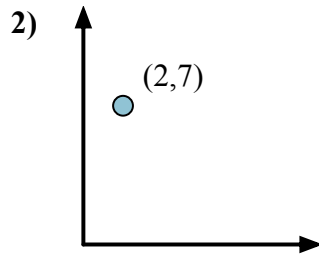
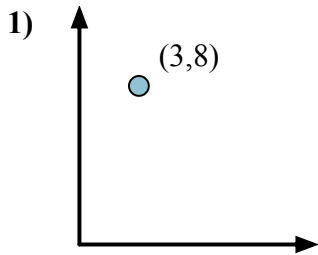
Em seguida, encontre o arco da tangente (também conhecido como tangente inversa) da inclinação.

$$\arctan(1.25) = 51.34^\circ$$



**Ответы**

1. \_\_\_\_\_
2. \_\_\_\_\_
3. \_\_\_\_\_
4. \_\_\_\_\_
5. \_\_\_\_\_
6. \_\_\_\_\_
7. \_\_\_\_\_
8. \_\_\_\_\_
9. \_\_\_\_\_
10. \_\_\_\_\_
11. \_\_\_\_\_
12. \_\_\_\_\_





Вычислите угол круга относительно точки (0,0).

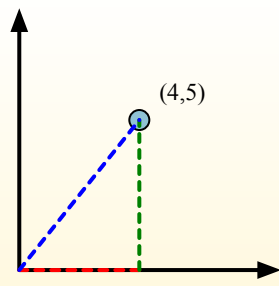
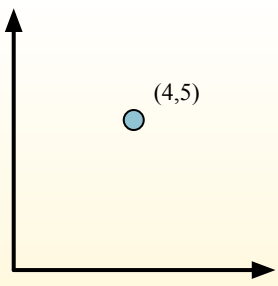
Primero encuentra la pendiente.

$$(y_2 - y_1) \div (x_2 - x_1) = m$$

$$(5 - 0) \div (4 - 0) = 1.25$$

Em seguida, encontre o arco da tangente (também conhecido como tangente inversa) da inclinação.

$$\arctan(1.25) = 51.34^\circ$$



**Ответы**

1. 69,44
2. 74,05
3. 36,87
4. 38,66
5. 23,20
6. 63,43
7. 32,01
8. 56,31
9. 54,46
10. 63,43
11. 66,04
12. 48,37

