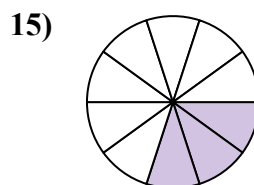
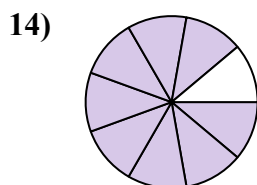
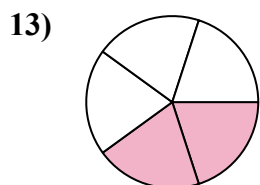
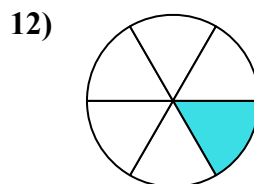
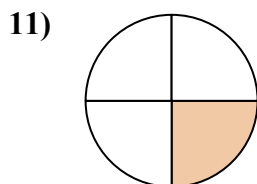
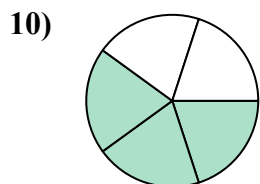
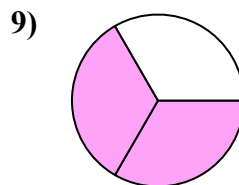
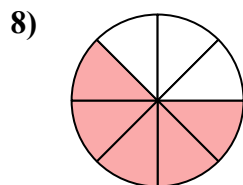
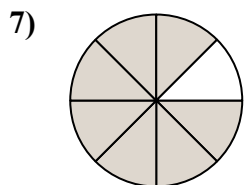
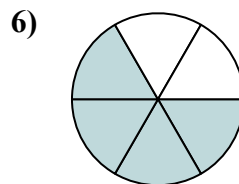
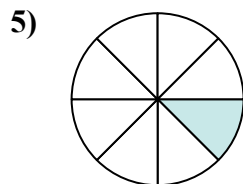
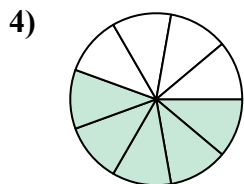
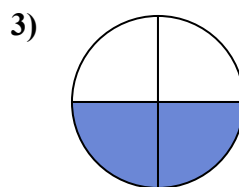
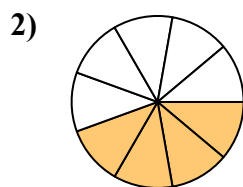
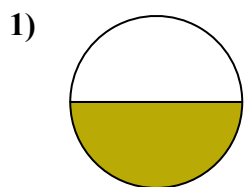




Найдите угол (градусы) закрашенной части круга



Ответы

1. _____

2. _____

3. _____

4. _____

5. _____

6. _____

7. _____

8. _____

9. _____

10. _____

11. _____

12. _____

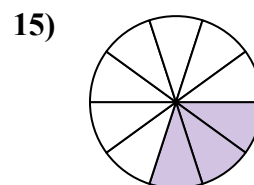
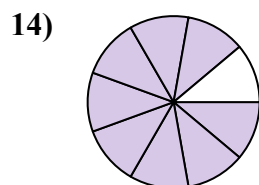
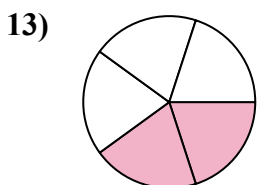
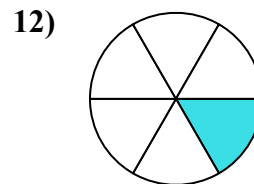
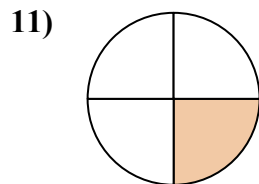
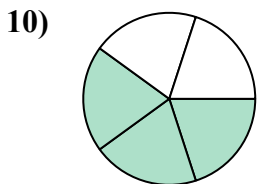
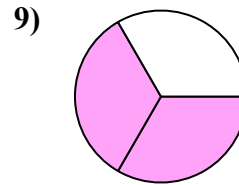
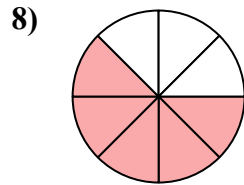
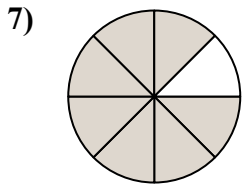
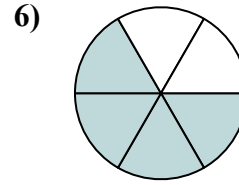
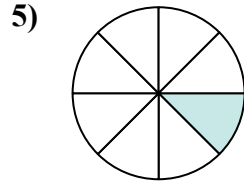
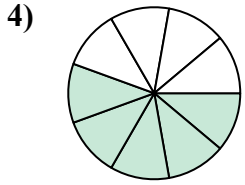
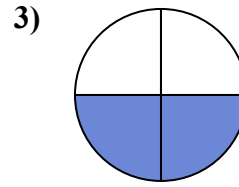
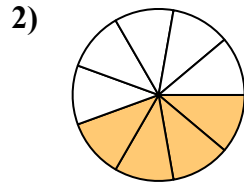
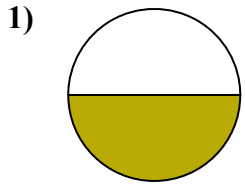
13. _____

14. _____

15. _____



Найдите угол (градусы) закрашенной части круга



ОТВЕТЫ

1. 180

2. 160

3. 180

4. 200

5. 45

6. 240

7. 315

8. 225

9. 240

10. 216

11. 90

12. 60

13. 144

14. 320

15. 108

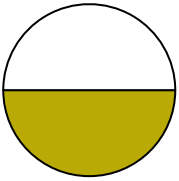


Найдите угол (градусы) закрашенной части круга

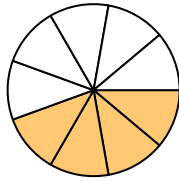
ОТВЕТЫ

90	200	240	60	160
216	315	180	45	225
240	180			

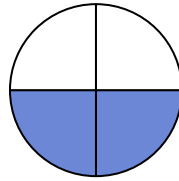
1)



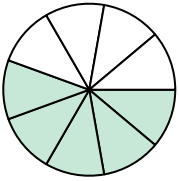
2)



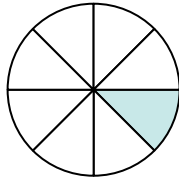
3)



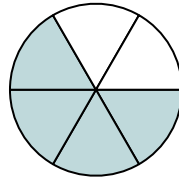
4)



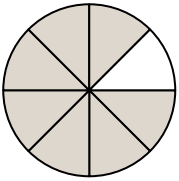
5)



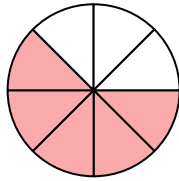
6)



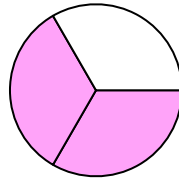
7)



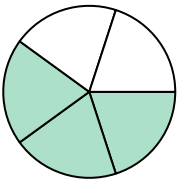
8)



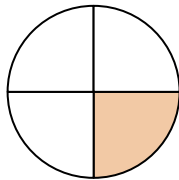
9)



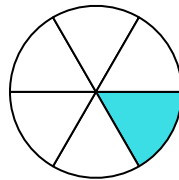
10)



11)



12)



1. _____
2. _____
3. _____
4. _____
5. _____
6. _____
7. _____
8. _____
9. _____
10. _____
11. _____
12. _____