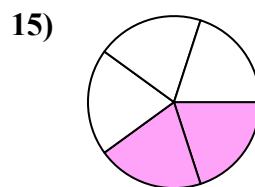
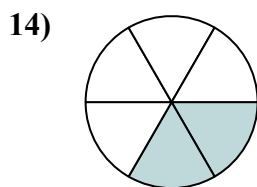
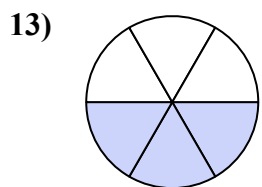
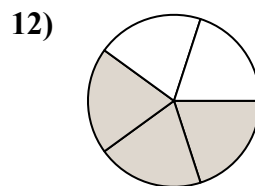
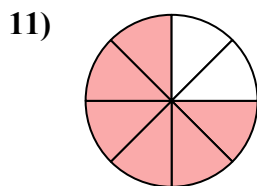
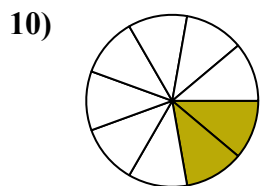
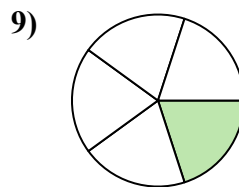
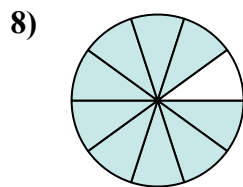
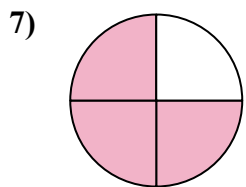
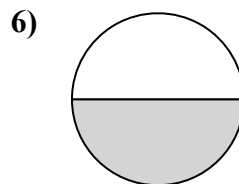
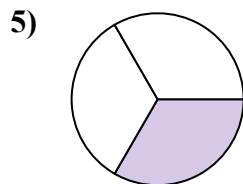
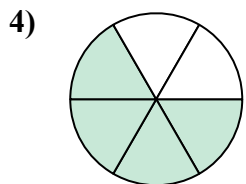
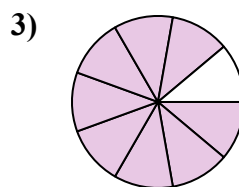
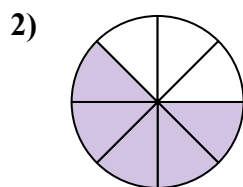
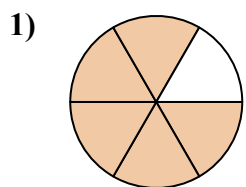




Найдите угол (градусы) закрашенной части круга

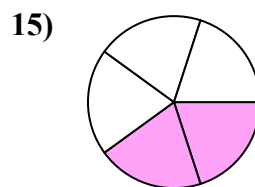
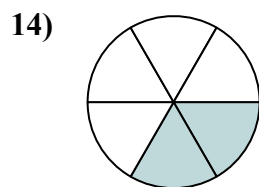
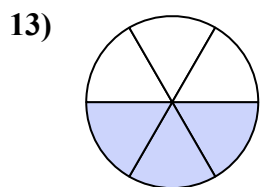
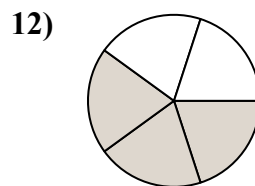
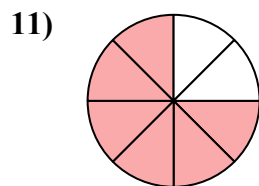
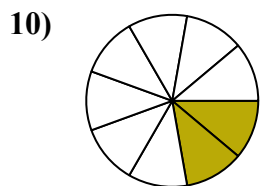
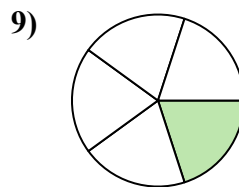
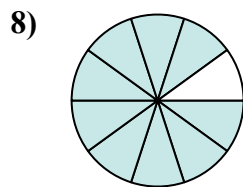
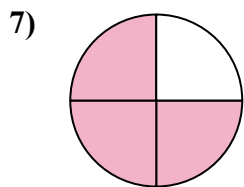
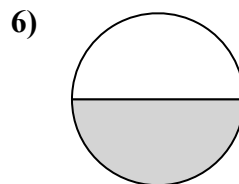
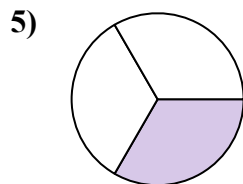
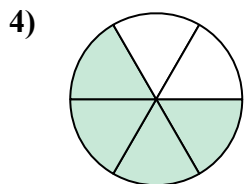
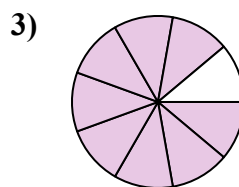
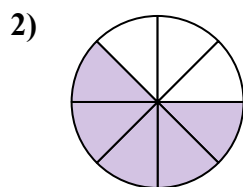
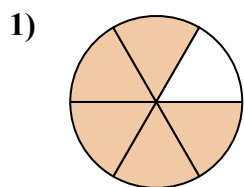


Ответы

1. _____
2. _____
3. _____
4. _____
5. _____
6. _____
7. _____
8. _____
9. _____
10. _____
11. _____
12. _____
13. _____
14. _____
15. _____



Найдите угол (градусы) закрашенной части круга

**ОТВЕТЫ**1. 3002. 2253. 3204. 2405. 1206. 1807. 2708. 3249. 7210. 8011. 27012. 21613. 18014. 12015. 144



Найдите угол (градусы) закрашенной части круга

ОТВЕТЫ

270

180

216

72

320

80

240

225

300

120

270

324

1. _____

2. _____

3. _____

4. _____

5. _____

6. _____

7. _____

8. _____

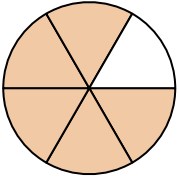
9. _____

10. _____

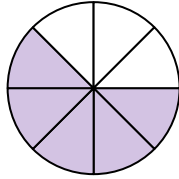
11. _____

12. _____

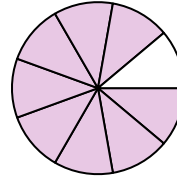
1)



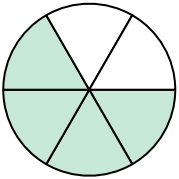
2)



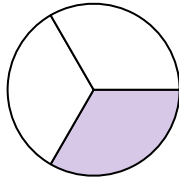
3)



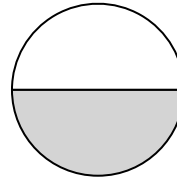
4)



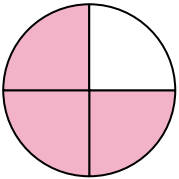
5)



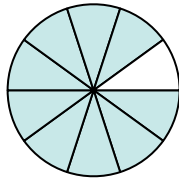
6)



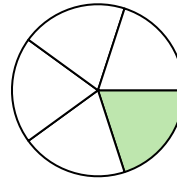
7)



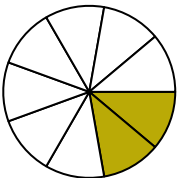
8)



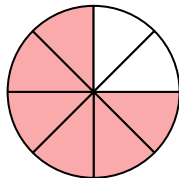
9)



10)



11)



12)

