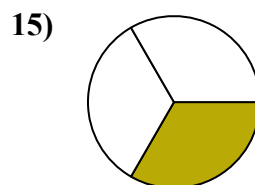
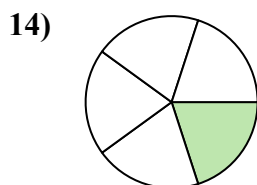
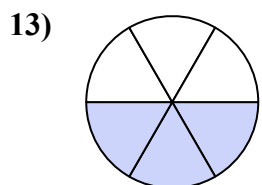
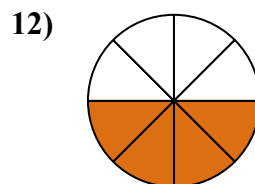
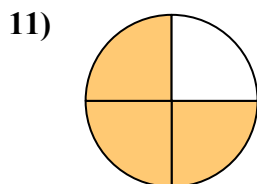
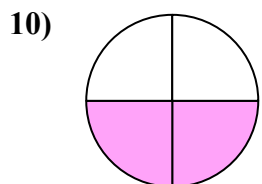
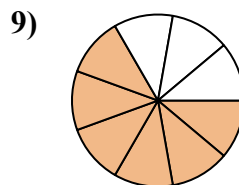
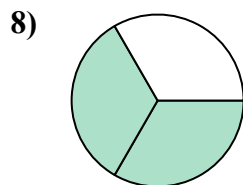
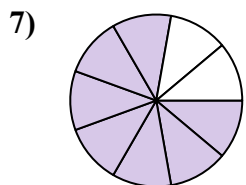
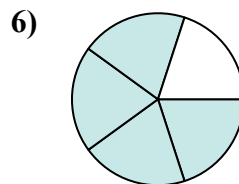
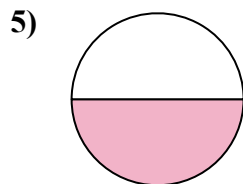
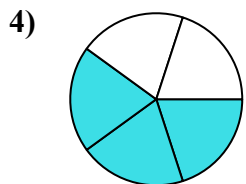
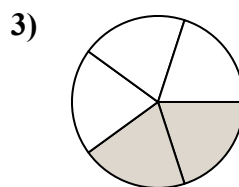
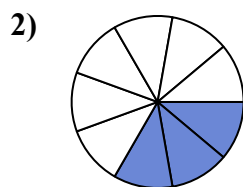
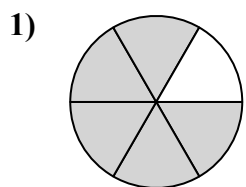




Найдите угол (градусы) закрашенной части круга

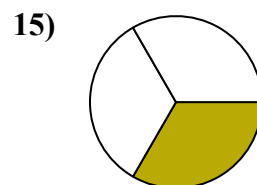
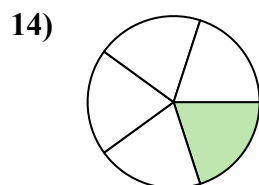
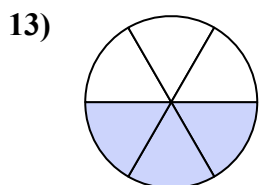
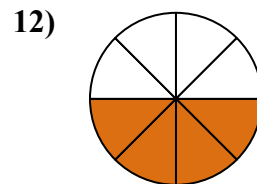
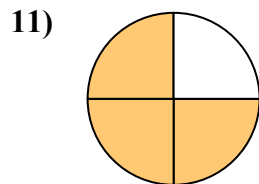
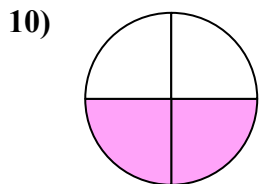
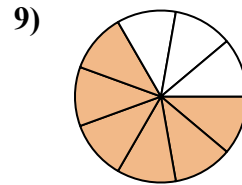
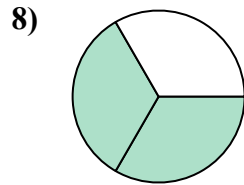
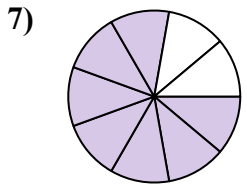
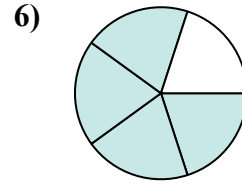
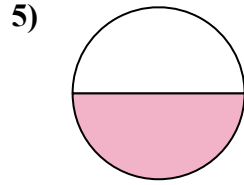
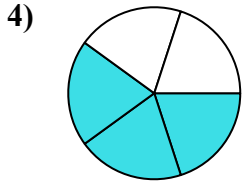
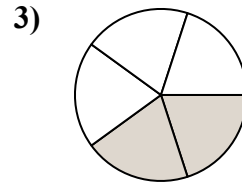
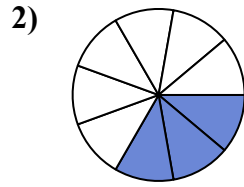
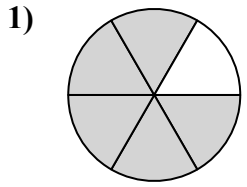


Ответы

- 1. _____
- 2. _____
- 3. _____
- 4. _____
- 5. _____
- 6. _____
- 7. _____
- 8. _____
- 9. _____
- 10. _____
- 11. _____
- 12. _____
- 13. _____
- 14. _____
- 15. _____



Найдите угол (градусы) закрашенной части круга



ОТВЕТЫ

1. 300

2. 120

3. 144

4. 216

5. 180

6. 288

7. 280

8. 240

9. 240

10. 180

11. 270

12. 180

13. 180

14. 72

15. 120



Найдите угол (градусы) закрашенной части круга

ОТВЕТЫ

240

180

180

240

270

120

144

288

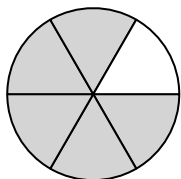
280

300

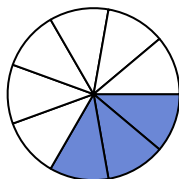
216

180

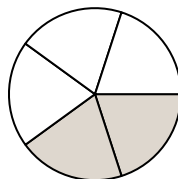
1)



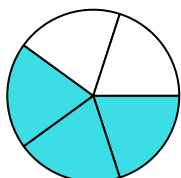
2)



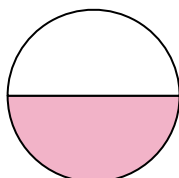
3)



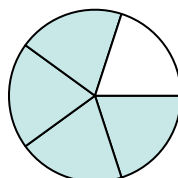
4)



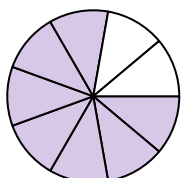
5)



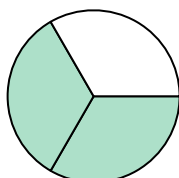
6)



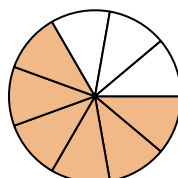
7)



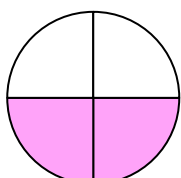
8)



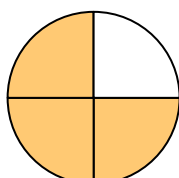
9)



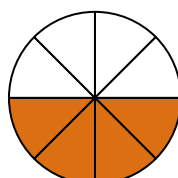
10)



11)



12)



1. _____

2. _____

3. _____

4. _____

5. _____

6. _____

7. _____

8. _____

9. _____

10. _____

11. _____

12. _____