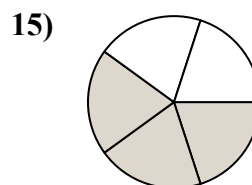
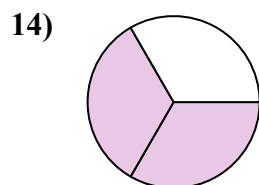
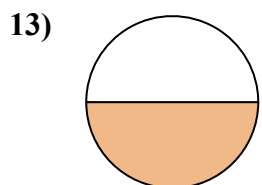
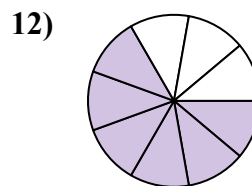
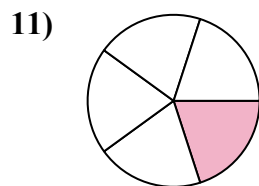
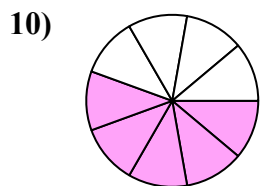
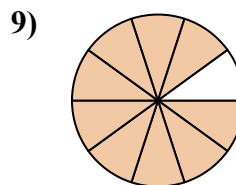
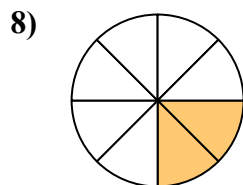
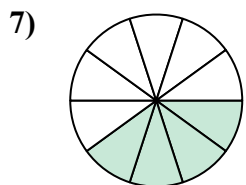
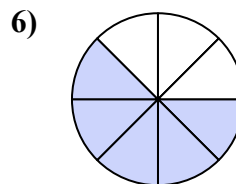
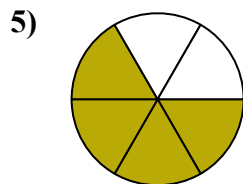
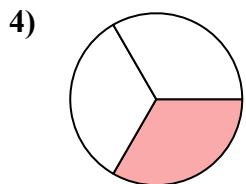
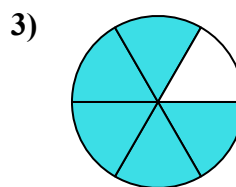
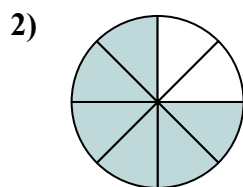
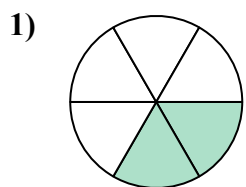




Найдите угол (градусы) закрашенной части круга

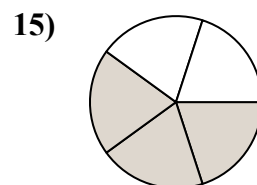
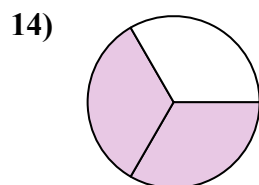
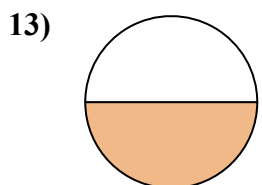
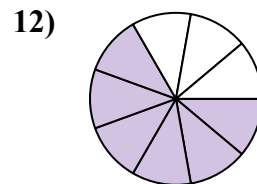
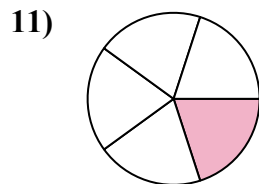
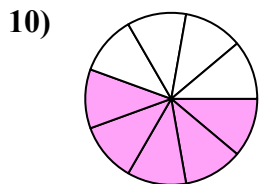
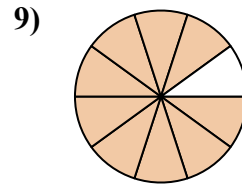
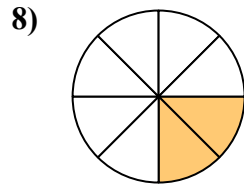
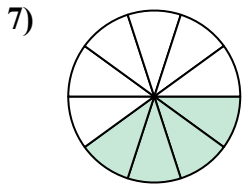
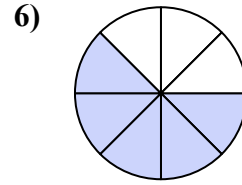
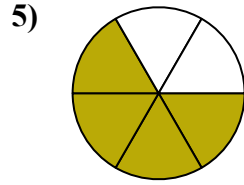
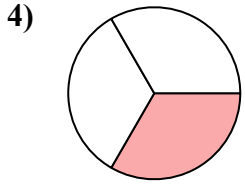
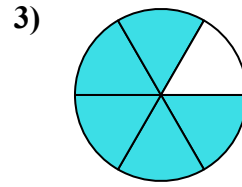
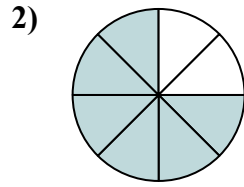
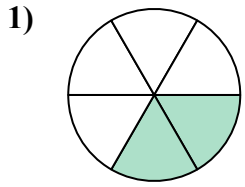


Отвѣты

1. _____
2. _____
3. _____
4. _____
5. _____
6. _____
7. _____
8. _____
9. _____
10. _____
11. _____
12. _____
13. _____
14. _____
15. _____



Найдите угол (градусы) закрашенной части круга



ОТВЕТЫ

1. 120

2. 270

3. 300

4. 120

5. 240

6. 225

7. 144

8. 90

9. 324

10. 200

11. 72

12. 240

13. 180

14. 240

15. 216



Найдите угол (градусы) закрашенной части круга

ОТВЕТЫ

144

120

120

270

200

240

240

90

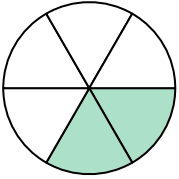
72

225

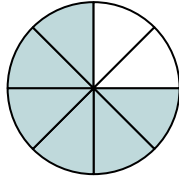
324

300

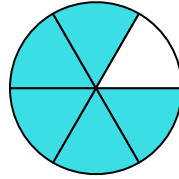
1)



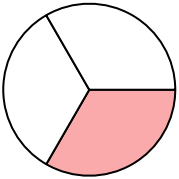
2)



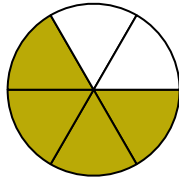
3)



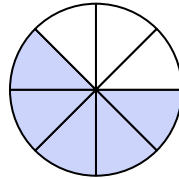
4)



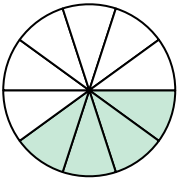
5)



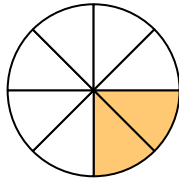
6)



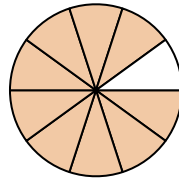
7)



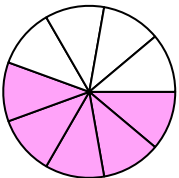
8)



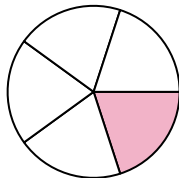
9)



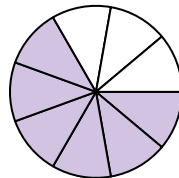
10)



11)



12)



1. _____
2. _____
3. _____
4. _____
5. _____
6. _____
7. _____
8. _____
9. _____
10. _____
11. _____
12. _____