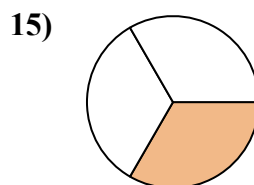
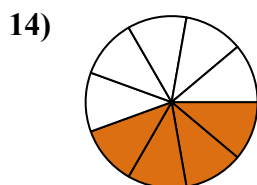
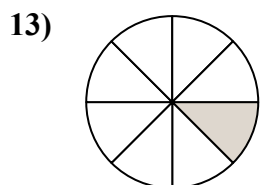
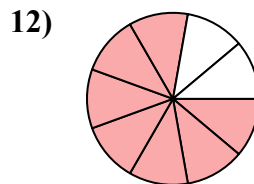
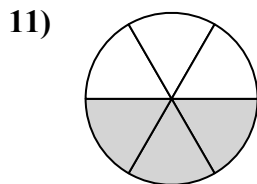
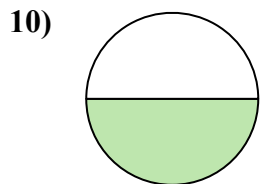
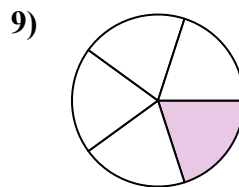
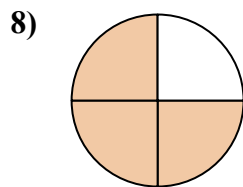
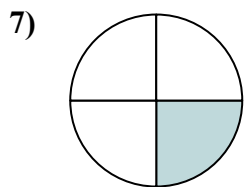
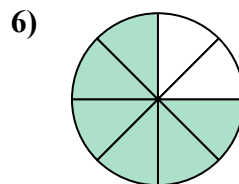
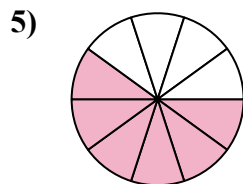
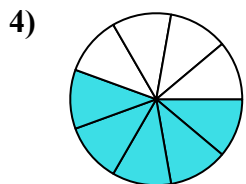
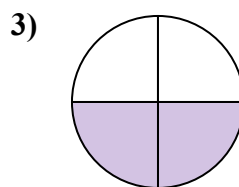
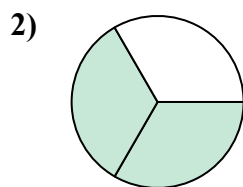
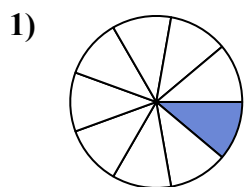




Найдите угол (градусы) закрашенной части круга

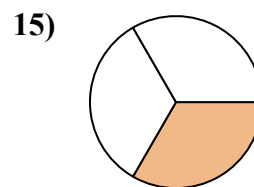
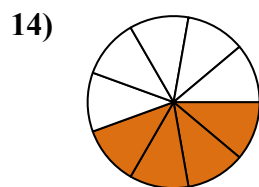
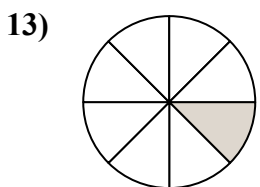
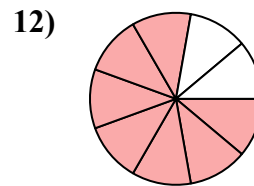
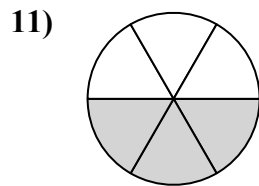
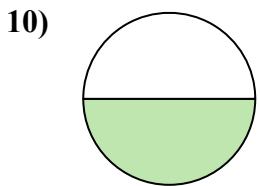
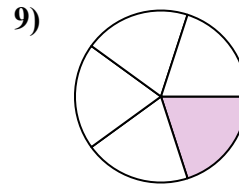
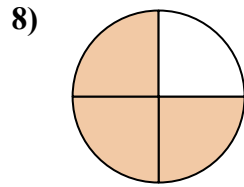
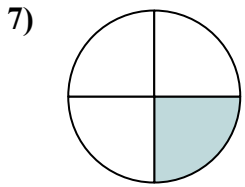
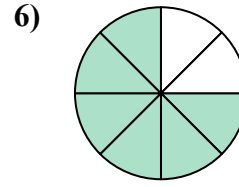
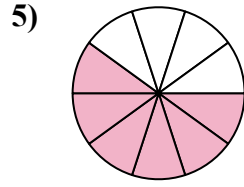
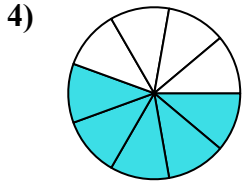
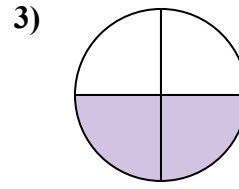
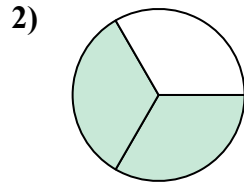
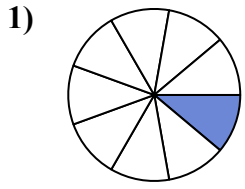


Ответы

1. _____
2. _____
3. _____
4. _____
5. _____
6. _____
7. _____
8. _____
9. _____
10. _____
11. _____
12. _____
13. _____
14. _____
15. _____



Найдите угол (градусы) закрашенной части круга



ОТВЕТЫ

1. 40

2. 240

3. 180

4. 200

5. 216

6. 270

7. 90

8. 270

9. 72

10. 180

11. 180

12. 280

13. 45

14. 160

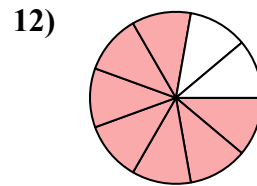
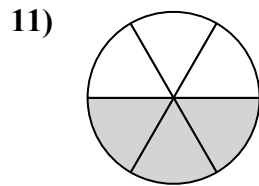
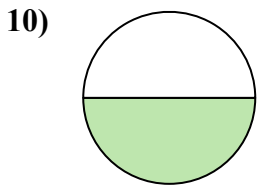
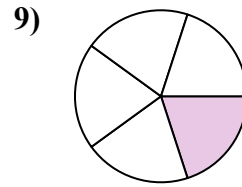
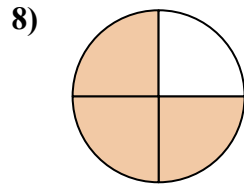
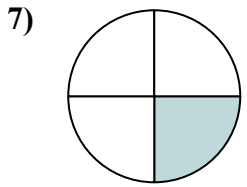
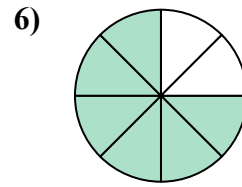
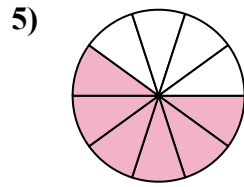
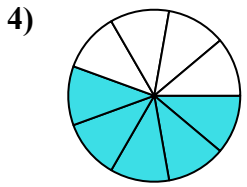
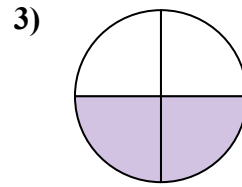
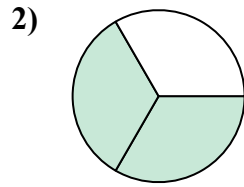
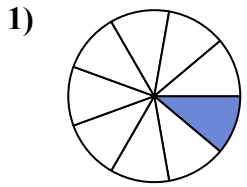
15. 120



Найдите угол (градусы) закрашенной части круга

180	180	216	270	240
180	200	72	40	270
280	90			

ОТВЕТЫ



1. _____
2. _____
3. _____
4. _____
5. _____
6. _____
7. _____
8. _____
9. _____
10. _____
11. _____
12. _____