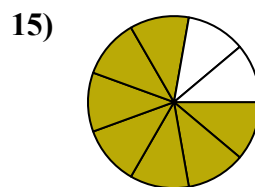
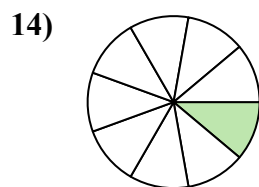
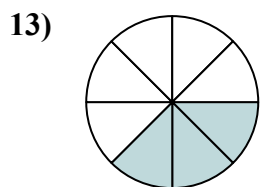
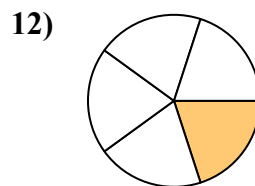
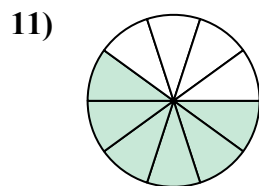
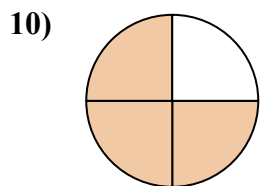
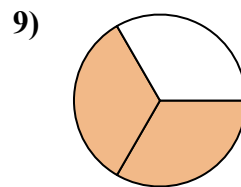
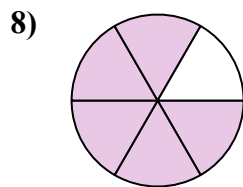
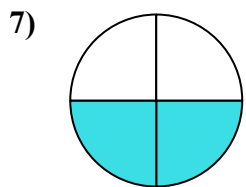
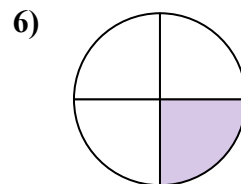
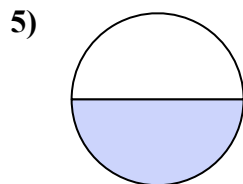
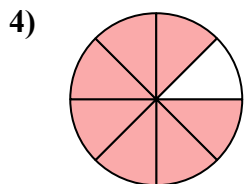
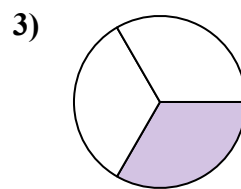
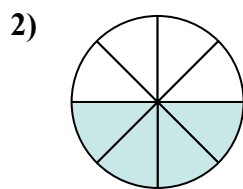
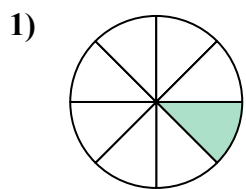




Найдите угол (градусы) закрашенной части круга

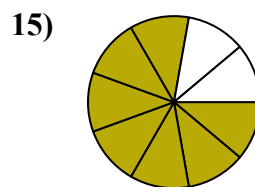
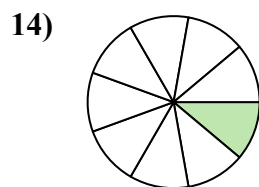
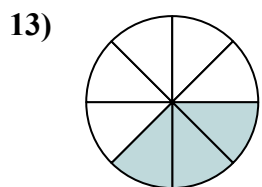
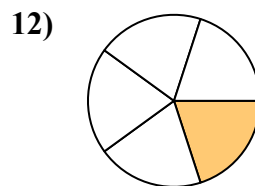
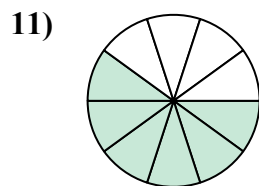
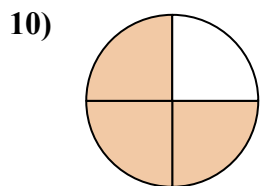
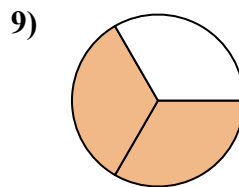
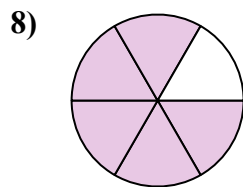
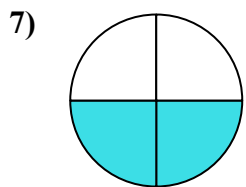
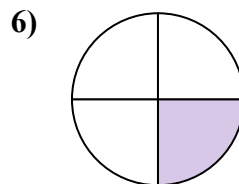
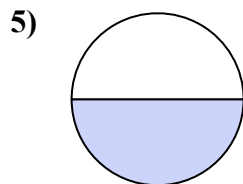
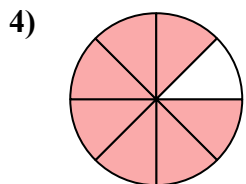
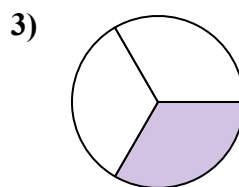
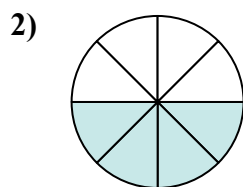
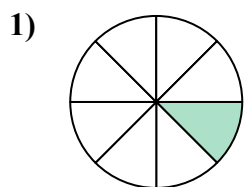


Отвeты

1. _____
2. _____
3. _____
4. _____
5. _____
6. _____
7. _____
8. _____
9. _____
10. _____
11. _____
12. _____
13. _____
14. _____
15. _____



Найдите угол (градусы) закрашенной части круга

**ОТВЕТЫ**1. 452. 1803. 1204. 3155. 1806. 907. 1808. 3009. 24010. 27011. 21612. 7213. 13514. 4015. 280

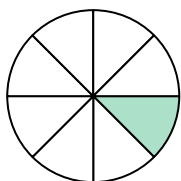


Найдите угол (градусы) закрашенной части круга

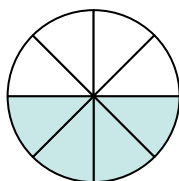
ОТВЕТЫ

90	216	45	180	180
300	240	270	120	315
180	72			

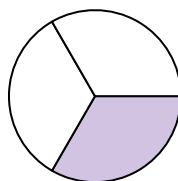
1)



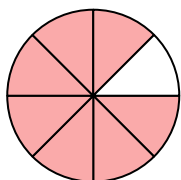
2)



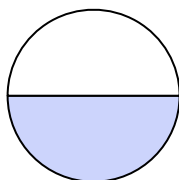
3)



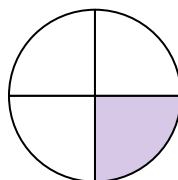
4)



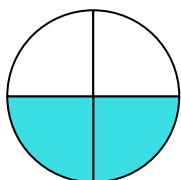
5)



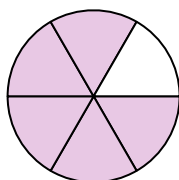
6)



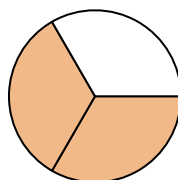
7)



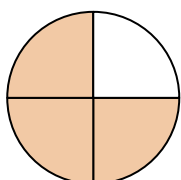
8)



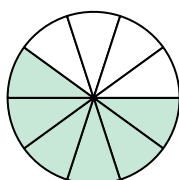
9)



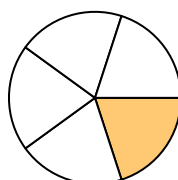
10)



11)



12)



1. _____
2. _____
3. _____
4. _____
5. _____
6. _____
7. _____
8. _____
9. _____
10. _____
11. _____
12. _____