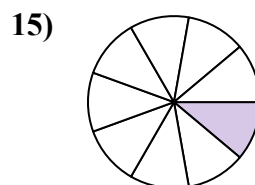
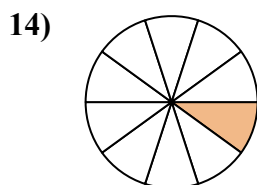
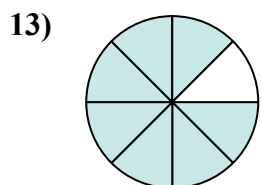
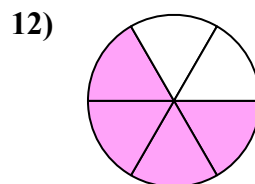
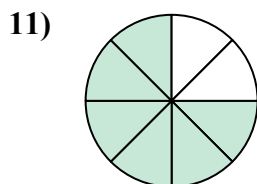
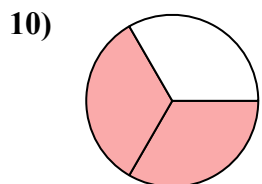
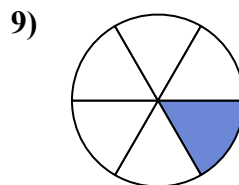
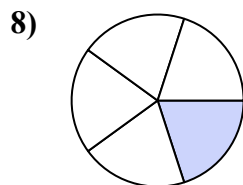
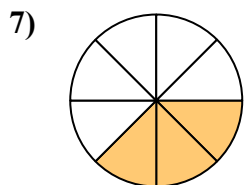
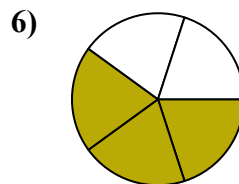
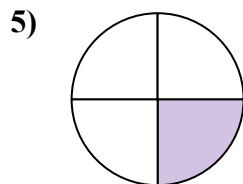
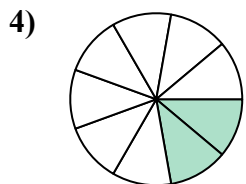
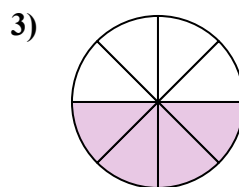
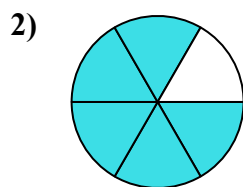
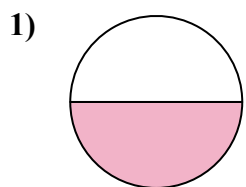




Найдите угол (градусы) закрашенной части круга

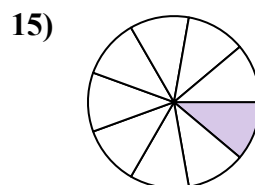
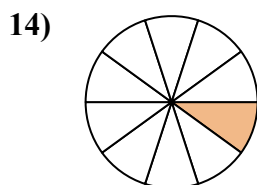
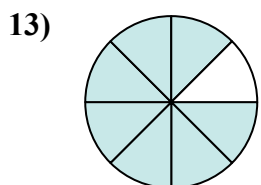
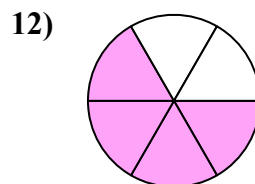
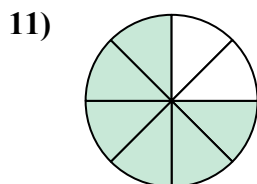
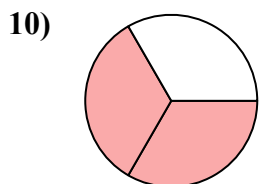
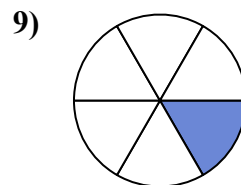
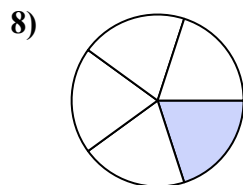
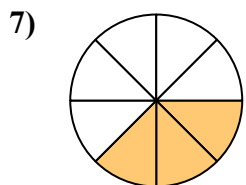
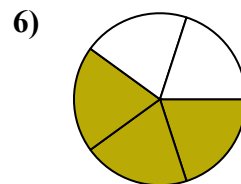
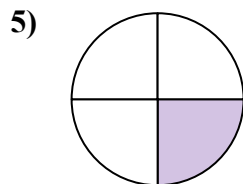
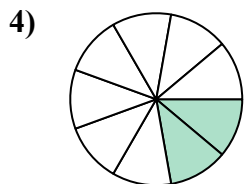
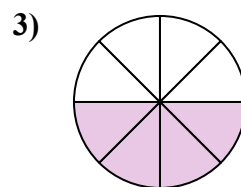
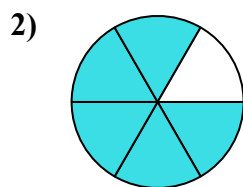
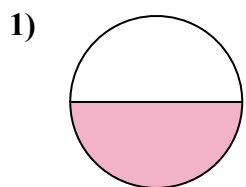


Ответы

1. _____
2. _____
3. _____
4. _____
5. _____
6. _____
7. _____
8. _____
9. _____
10. _____
11. _____
12. _____
13. _____
14. _____
15. _____



Найдите угол (градусы) закрашенной части круга



ОТВЕТЫ

1. 180

2. 300

3. 180

4. 80

5. 90

6. 216

7. 135

8. 72

9. 60

10. 240

11. 270

12. 240

13. 315

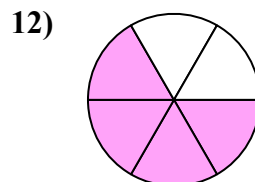
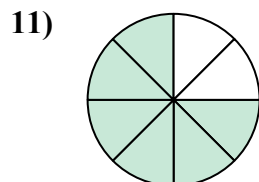
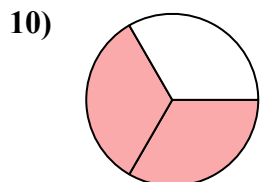
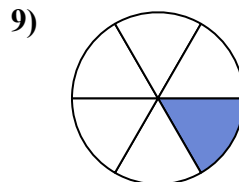
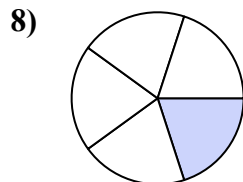
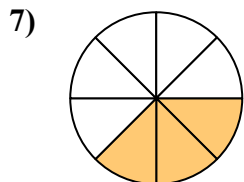
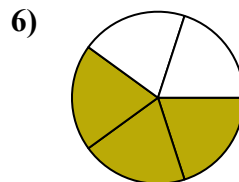
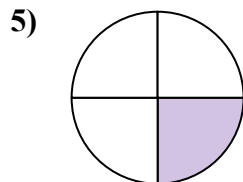
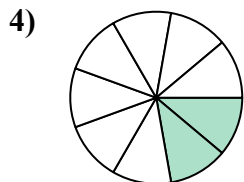
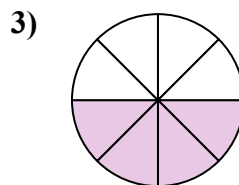
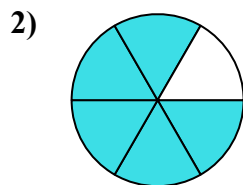
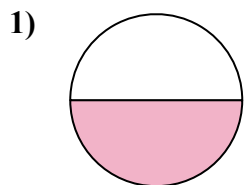
14. 36

15. 40



Найдите угол (градусы) закрашенной части круга

135	72	80	60	90
216	270	240	180	180
240	300			

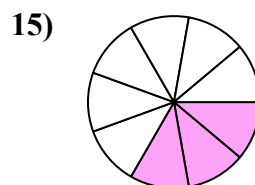
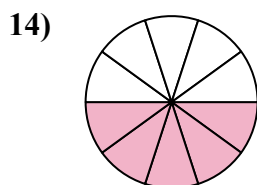
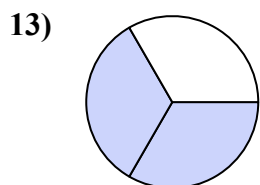
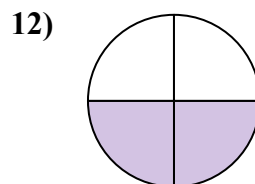
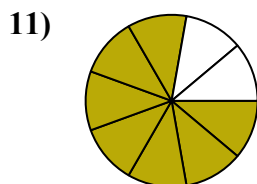
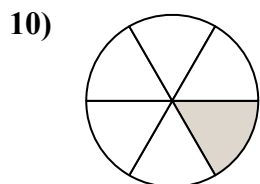
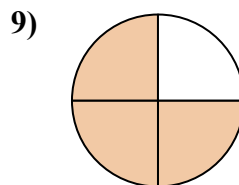
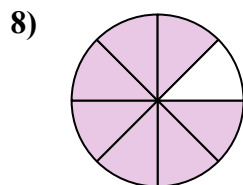
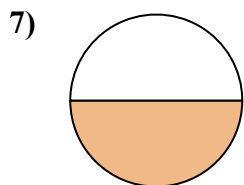
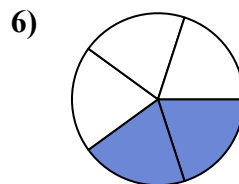
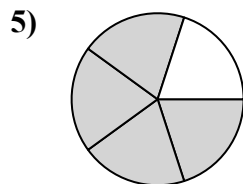
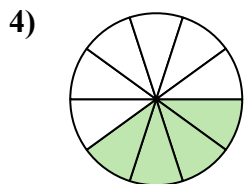
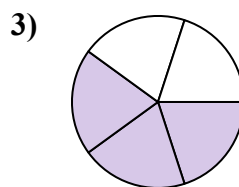
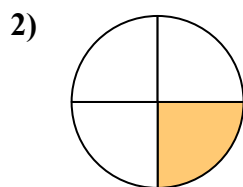
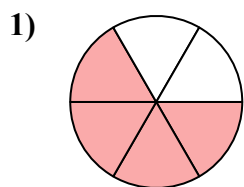


ОТВЕТЫ

1. _____
2. _____
3. _____
4. _____
5. _____
6. _____
7. _____
8. _____
9. _____
10. _____
11. _____
12. _____



Найдите угол (градусы) закрашенной части круга

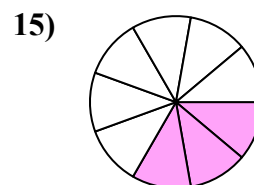
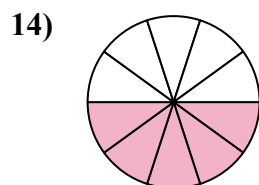
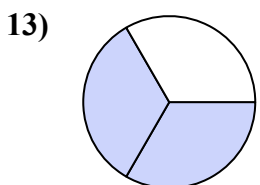
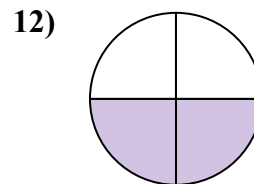
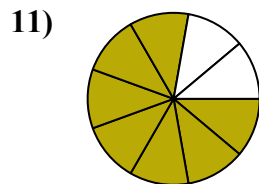
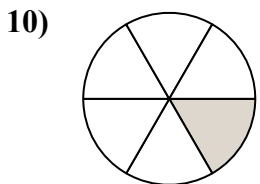
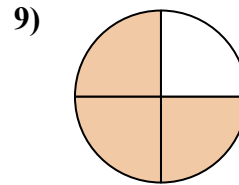
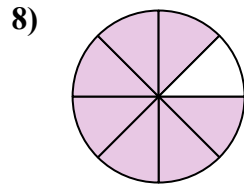
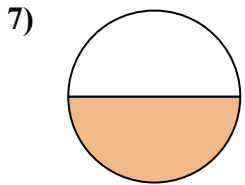
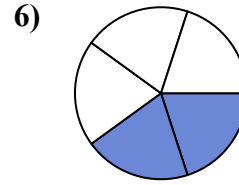
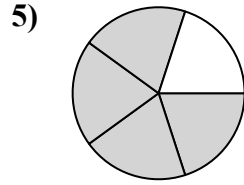
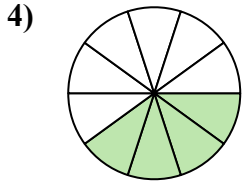
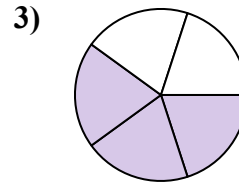
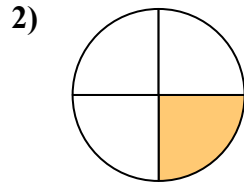
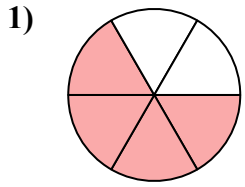


Ответы

1. _____
2. _____
3. _____
4. _____
5. _____
6. _____
7. _____
8. _____
9. _____
10. _____
11. _____
12. _____
13. _____
14. _____
15. _____



Найдите угол (градусы) закрашенной части круга



ОТВЕТЫ

1. 240

2. 90

3. 216

4. 144

5. 288

6. 144

7. 180

8. 315

9. 270

10. 60

11. 280

12. 180

13. 240

14. 180

15. 120



Найдите угол (градусы) закрашенной части круга

288

216

315

144

280

60

90

240

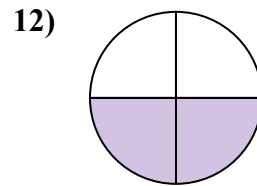
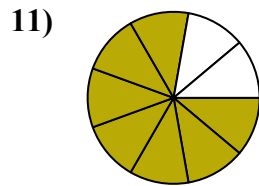
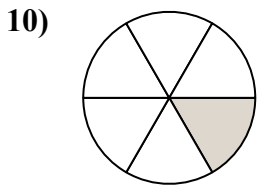
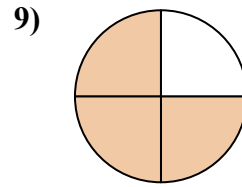
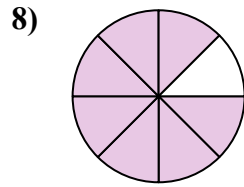
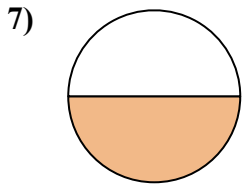
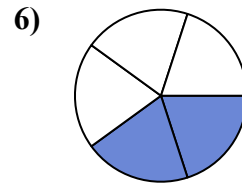
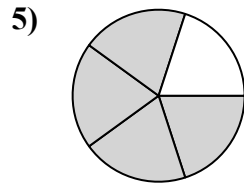
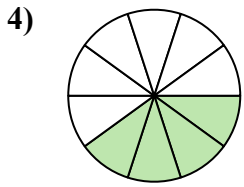
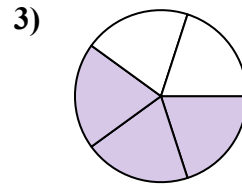
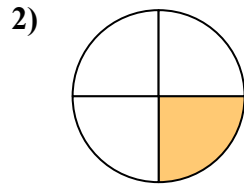
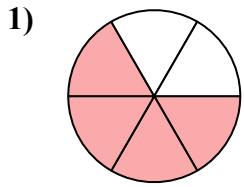
144

270

180

180

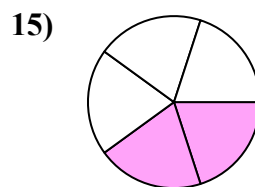
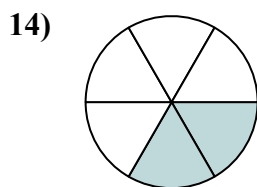
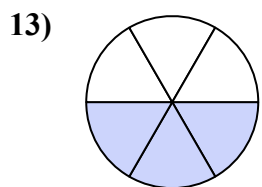
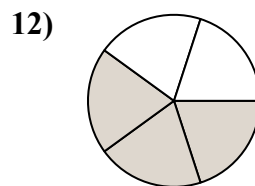
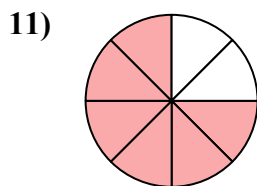
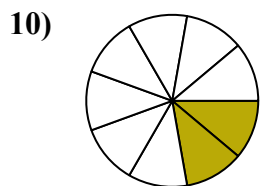
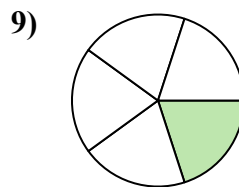
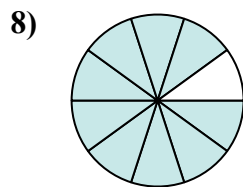
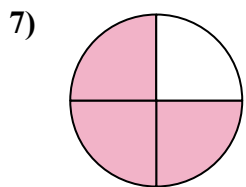
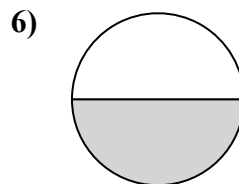
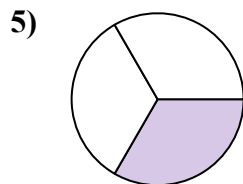
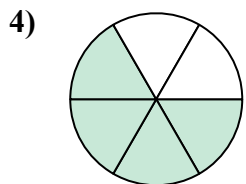
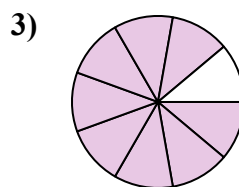
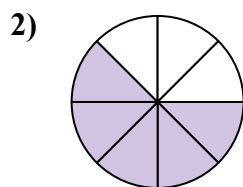
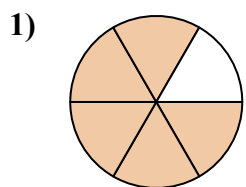
ОТВЕТЫ



1. _____
2. _____
3. _____
4. _____
5. _____
6. _____
7. _____
8. _____
9. _____
10. _____
11. _____
12. _____



Найдите угол (градусы) закрашенной части круга

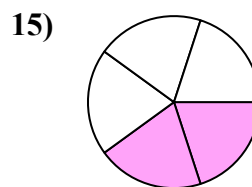
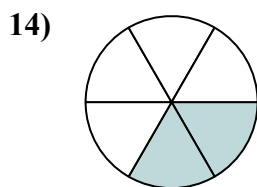
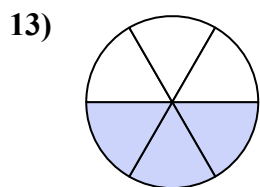
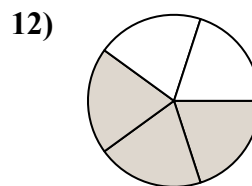
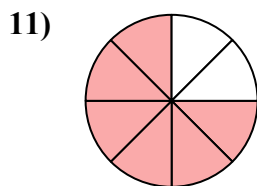
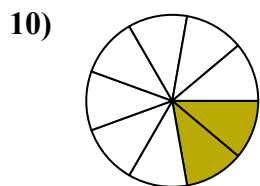
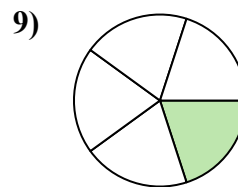
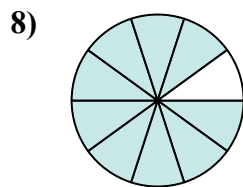
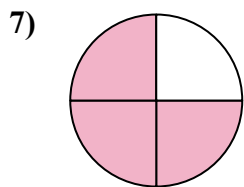
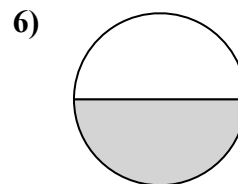
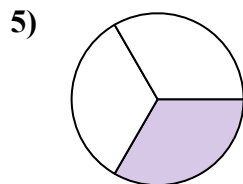
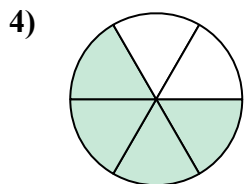
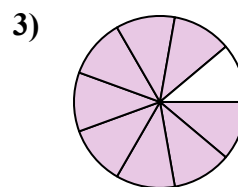
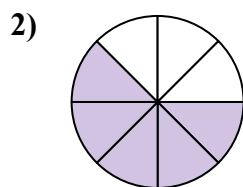
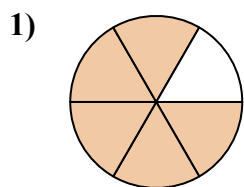


Отвeты

1. _____
2. _____
3. _____
4. _____
5. _____
6. _____
7. _____
8. _____
9. _____
10. _____
11. _____
12. _____
13. _____
14. _____
15. _____



Найдите угол (градусы) закрашенной части круга



ОТВЕТЫ

1. 300

2. 225

3. 320

4. 240

5. 120

6. 180

7. 270

8. 324

9. 72

10. 80

11. 270

12. 216

13. 180

14. 120

15. 144



Найдите угол (градусы) закрашенной части круга

ОТВЕТЫ

270

180

216

72

320

80

240

225

300

120

270

324

1. _____

2. _____

3. _____

4. _____

5. _____

6. _____

7. _____

8. _____

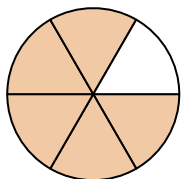
9. _____

10. _____

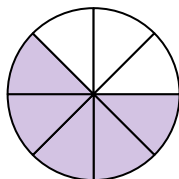
11. _____

12. _____

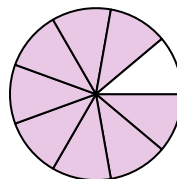
1)



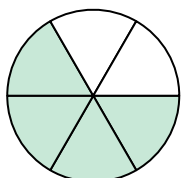
2)



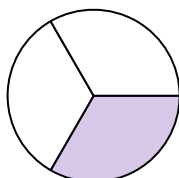
3)



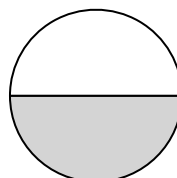
4)



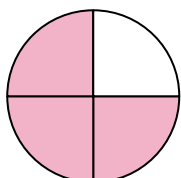
5)



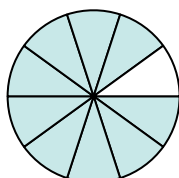
6)



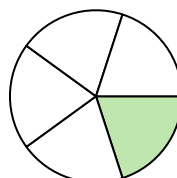
7)



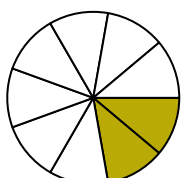
8)



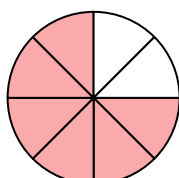
9)



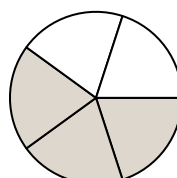
10)



11)

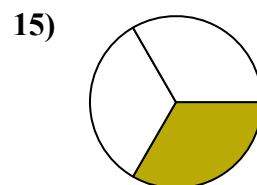
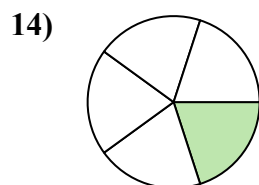
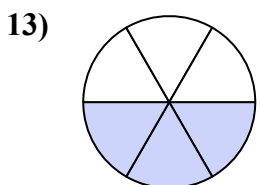
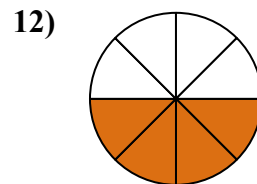
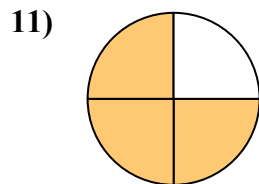
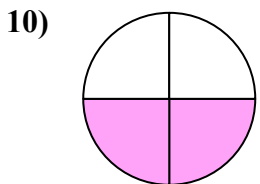
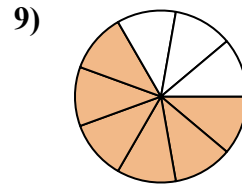
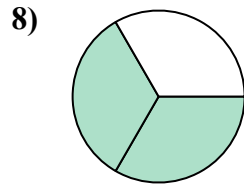
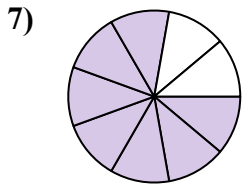
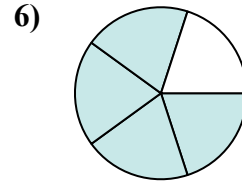
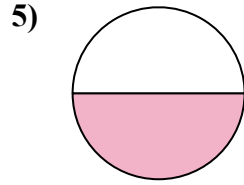
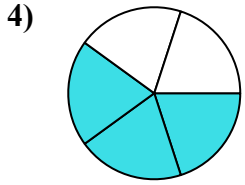
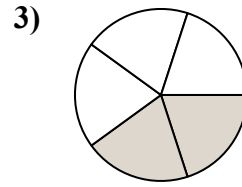
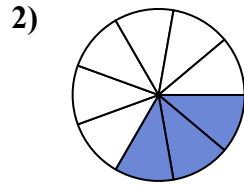
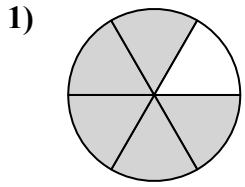


12)





Найдите угол (градусы) закрашенной части круга

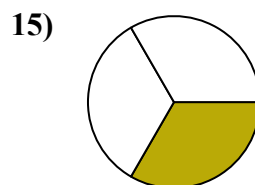
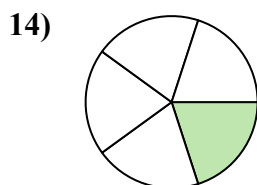
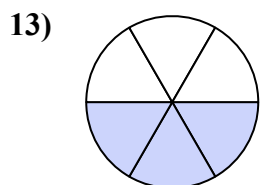
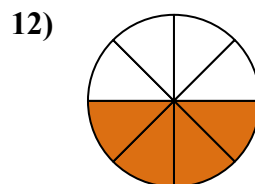
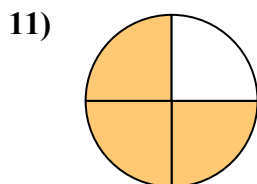
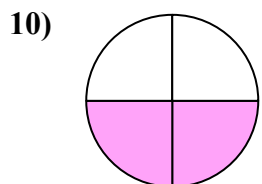
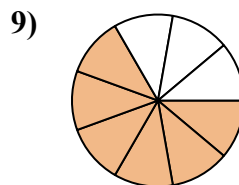
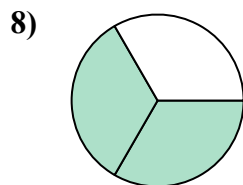
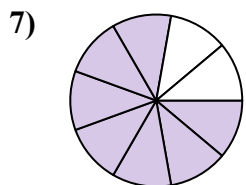
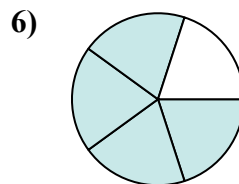
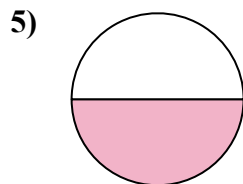
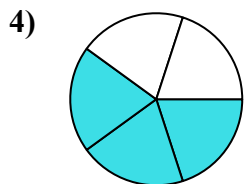
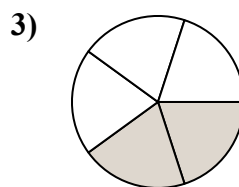
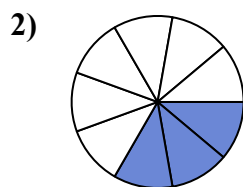
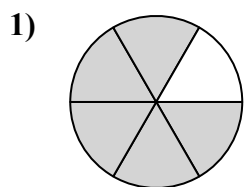


Ответы

1. _____
2. _____
3. _____
4. _____
5. _____
6. _____
7. _____
8. _____
9. _____
10. _____
11. _____
12. _____
13. _____
14. _____
15. _____



Найдите угол (градусы) закрашенной части круга



ОТВЕТЫ

1. 300

2. 120

3. 144

4. 216

5. 180

6. 288

7. 280

8. 240

9. 240

10. 180

11. 270

12. 180

13. 180

14. 72

15. 120



Найдите угол (градусы) закрашенной части круга

240

180

180

240

270

120

144

288

280

300

216

180

ОТВЕТЫ

1. _____

2. _____

3. _____

4. _____

5. _____

6. _____

7. _____

8. _____

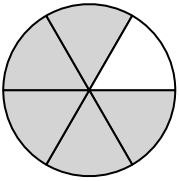
9. _____

10. _____

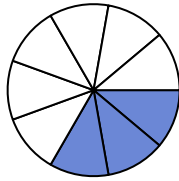
11. _____

12. _____

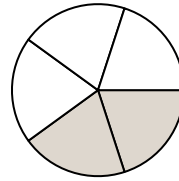
1)



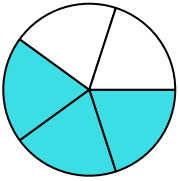
2)



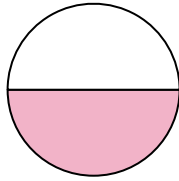
3)



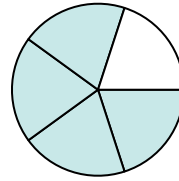
4)



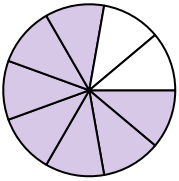
5)



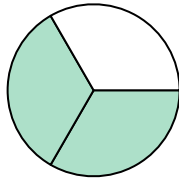
6)



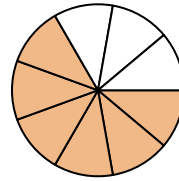
7)



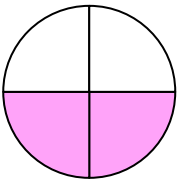
8)



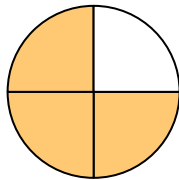
9)



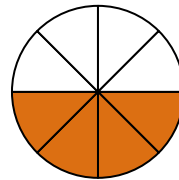
10)



11)

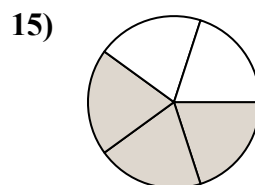
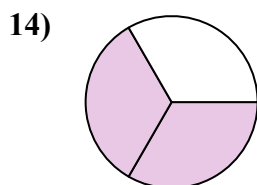
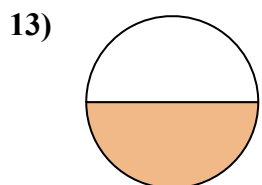
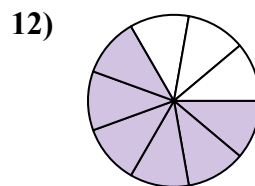
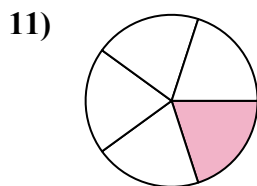
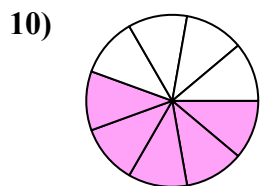
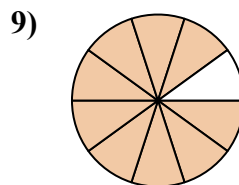
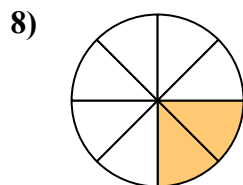
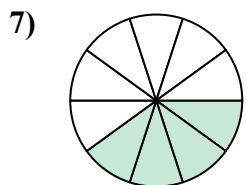
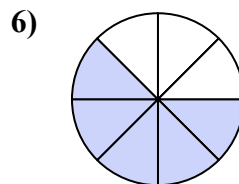
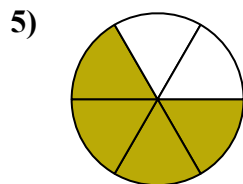
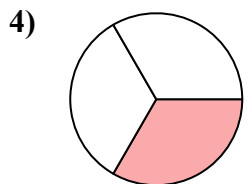
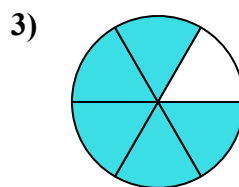
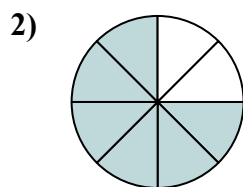
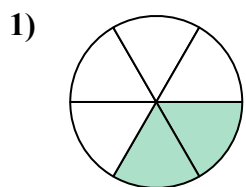


12)





Найдите угол (градусы) закрашенной части круга

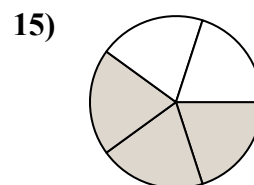
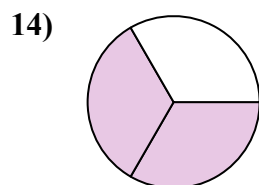
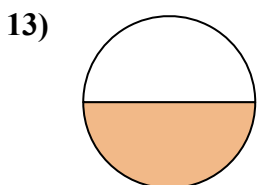
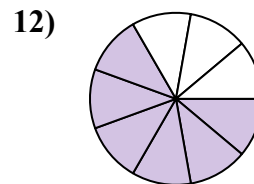
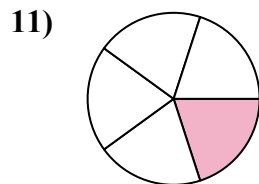
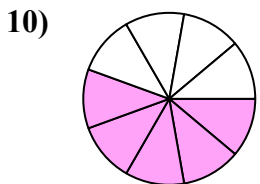
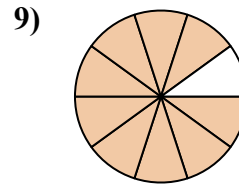
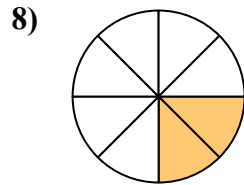
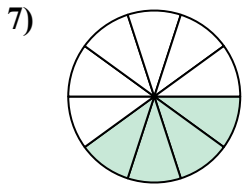
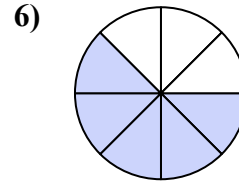
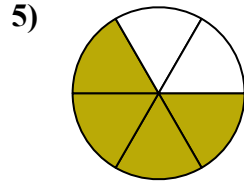
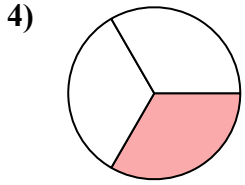
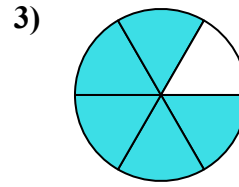
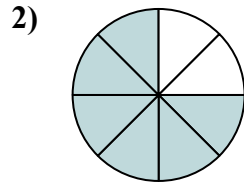
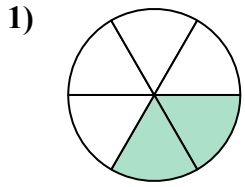


ОТВЕТЫ

1. _____
2. _____
3. _____
4. _____
5. _____
6. _____
7. _____
8. _____
9. _____
10. _____
11. _____
12. _____
13. _____
14. _____
15. _____



Найдите угол (градусы) закрашенной части круга



ОТВЕТЫ

1. 120
2. 270
3. 300
4. 120
5. 240
6. 225
7. 144
8. 90
9. 324
10. 200
11. 72
12. 240
13. 180
14. 240
15. 216



Найдите угол (градусы) закрашенной части круга

ОТВЕТЫ

144

120

120

270

200

240

240

90

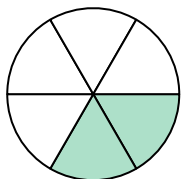
72

225

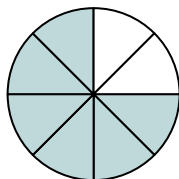
324

300

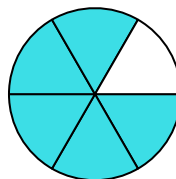
1)



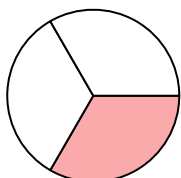
2)



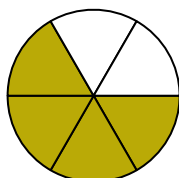
3)



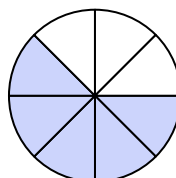
4)



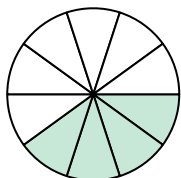
5)



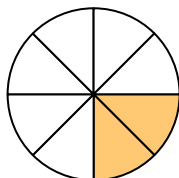
6)



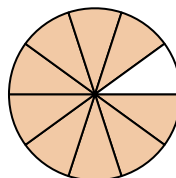
7)



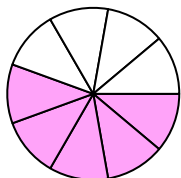
8)



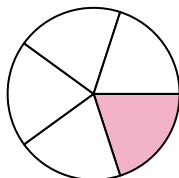
9)



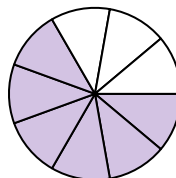
10)



11)



12)



1. _____

2. _____

3. _____

4. _____

5. _____

6. _____

7. _____

8. _____

9. _____

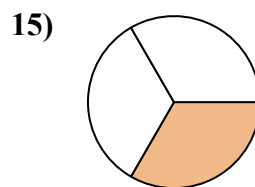
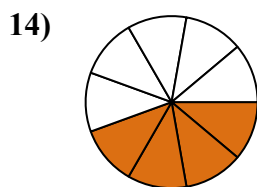
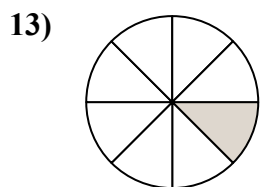
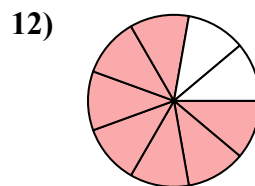
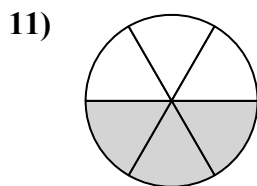
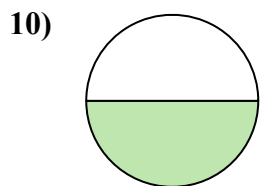
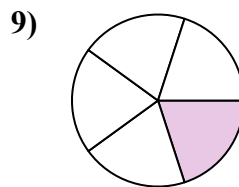
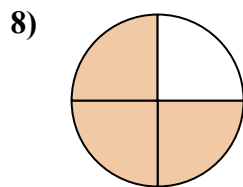
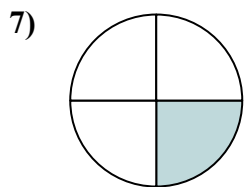
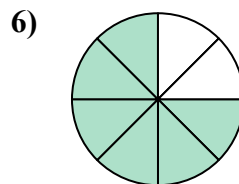
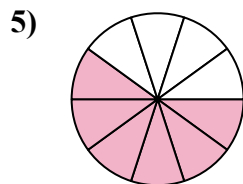
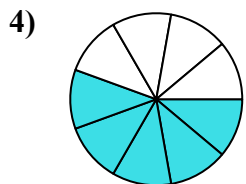
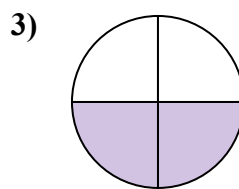
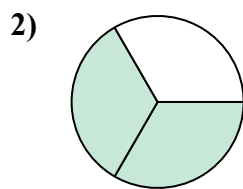
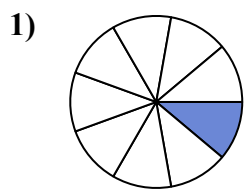
10. _____

11. _____

12. _____



Найдите угол (градусы) закрашенной части круга



Ответы

1. _____

2. _____

3. _____

4. _____

5. _____

6. _____

7. _____

8. _____

9. _____

10. _____

11. _____

12. _____

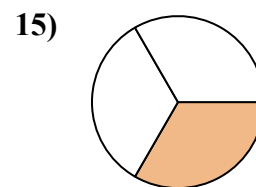
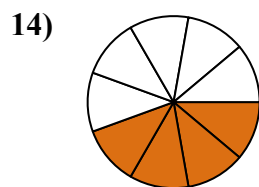
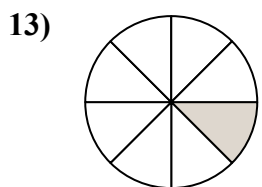
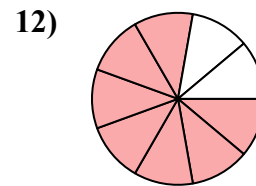
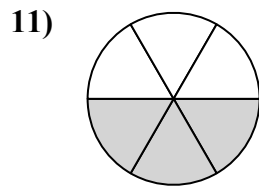
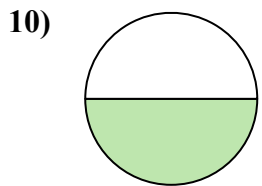
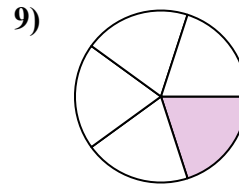
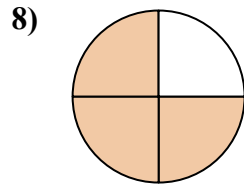
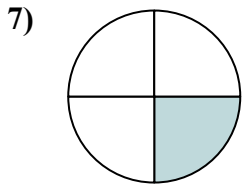
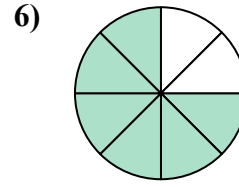
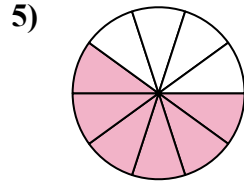
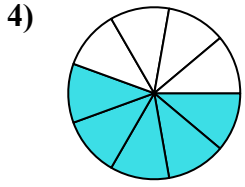
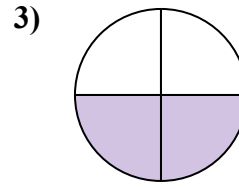
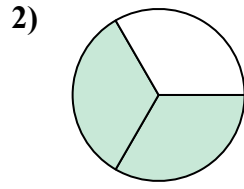
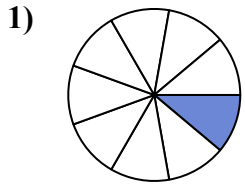
13. _____

14. _____

15. _____



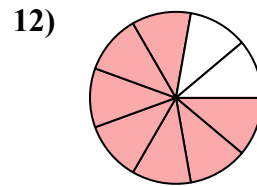
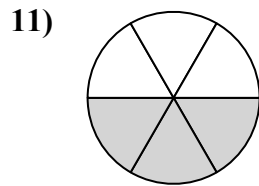
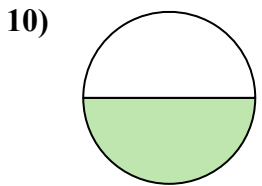
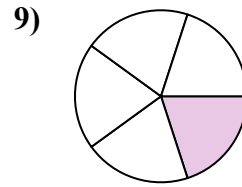
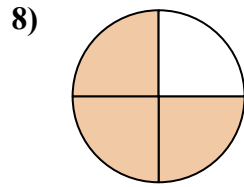
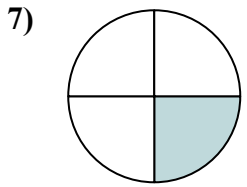
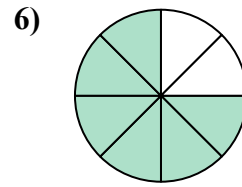
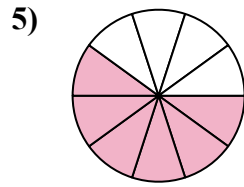
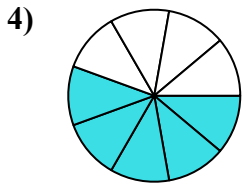
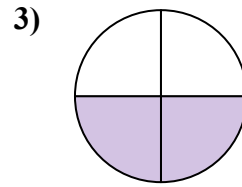
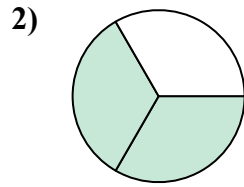
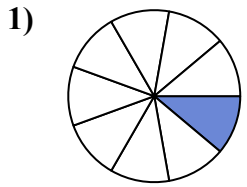
Найдите угол (градусы) закрашенной части круга

**Отвeты**1. 402. 2403. 1804. 2005. 2166. 2707. 908. 2709. 7210. 18011. 18012. 28013. 4514. 16015. 120



Найдите угол (градусы) закрашенной части круга

180	180	216	270	240
180	200	72	40	270
280	90			

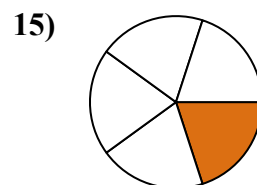
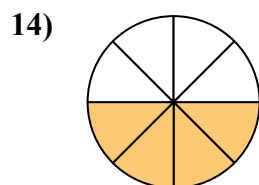
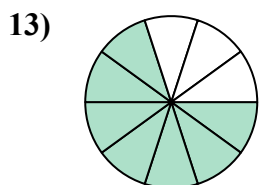
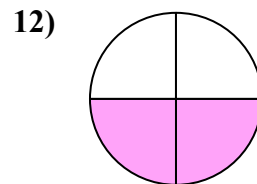
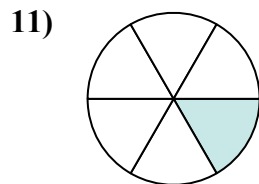
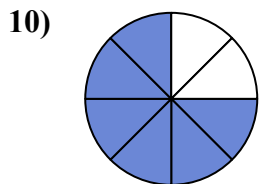
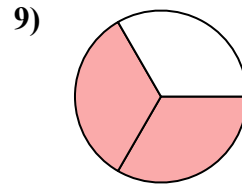
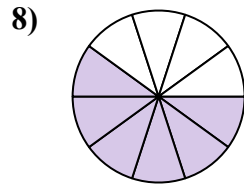
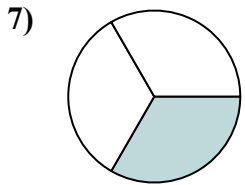
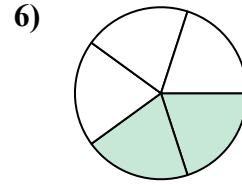
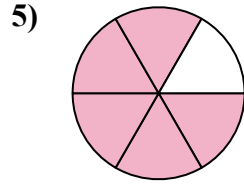
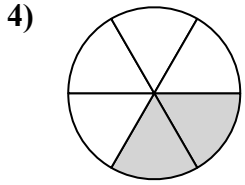
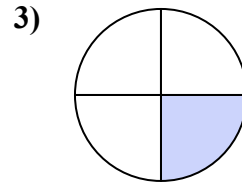
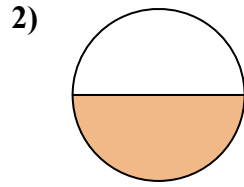
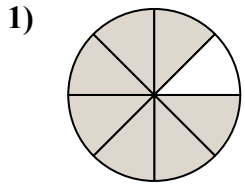


ОТВЕТЫ

1. _____
2. _____
3. _____
4. _____
5. _____
6. _____
7. _____
8. _____
9. _____
10. _____
11. _____
12. _____



Найдите угол (градусы) закрашенной части круга

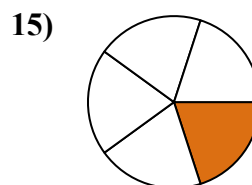
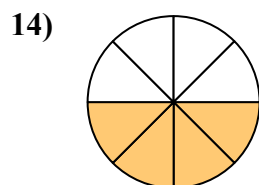
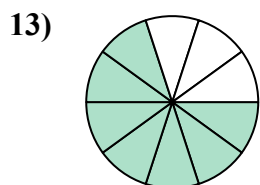
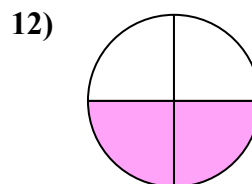
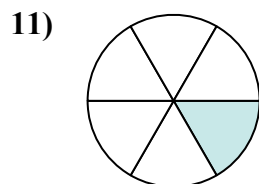
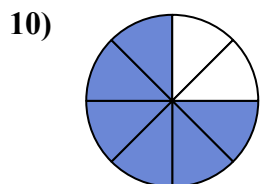
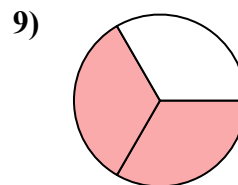
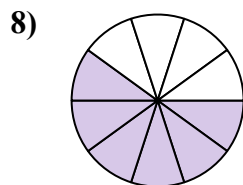
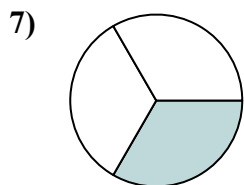
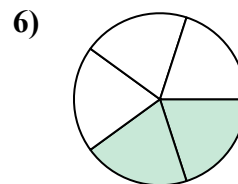
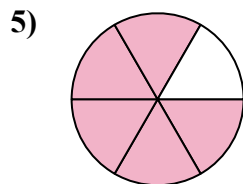
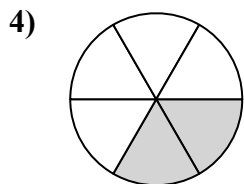
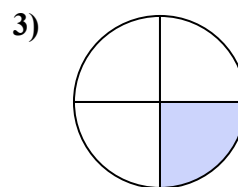
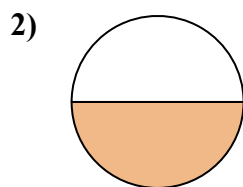
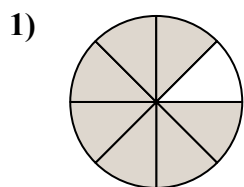


Ответы

1. _____
2. _____
3. _____
4. _____
5. _____
6. _____
7. _____
8. _____
9. _____
10. _____
11. _____
12. _____
13. _____
14. _____
15. _____



Найдите угол (градусы) закрашенной части круга



ОТВЕТЫ

1. 315

2. 180

3. 90

4. 120

5. 300

6. 144

7. 120

8. 216

9. 240

10. 270

11. 60

12. 180

13. 252

14. 180

15. 72



Найдите угол (градусы) закрашенной части круга

Отвeты

120

270

90

216

315

180

180

144

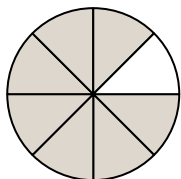
240

300

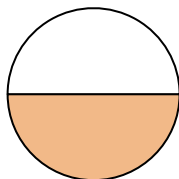
120

60

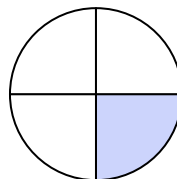
1)



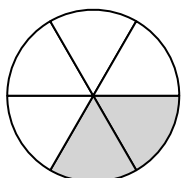
2)



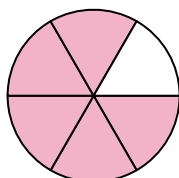
3)



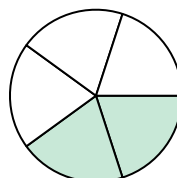
4)



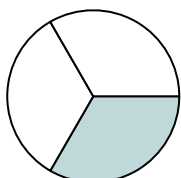
5)



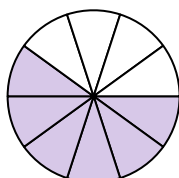
6)



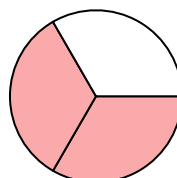
7)



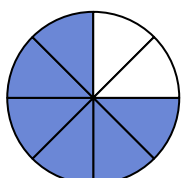
8)



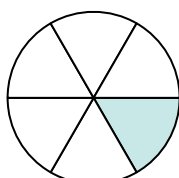
9)



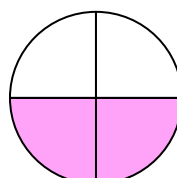
10)



11)



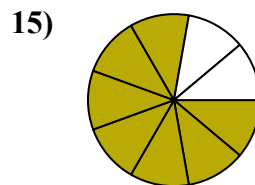
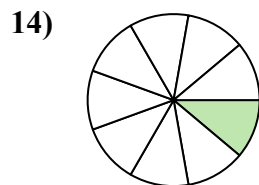
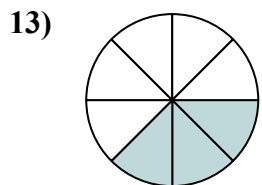
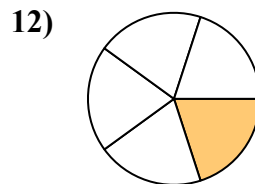
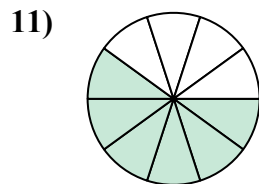
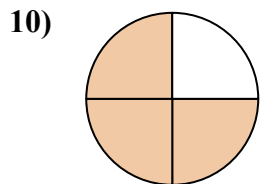
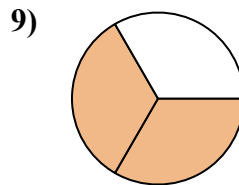
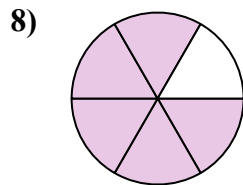
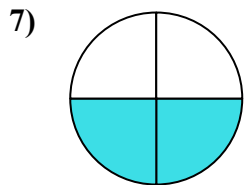
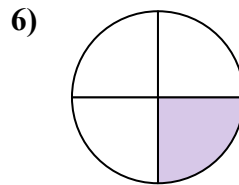
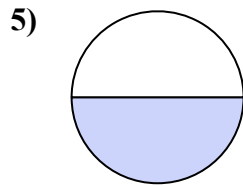
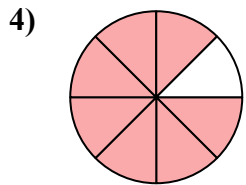
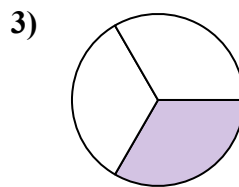
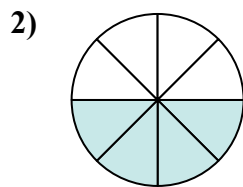
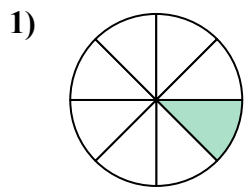
12)



- 1. _____
- 2. _____
- 3. _____
- 4. _____
- 5. _____
- 6. _____
- 7. _____
- 8. _____
- 9. _____
- 10. _____
- 11. _____
- 12. _____



Найдите угол (градусы) закрашенной части круга

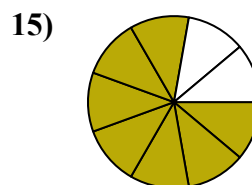
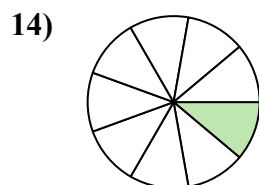
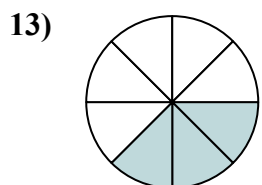
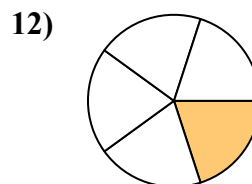
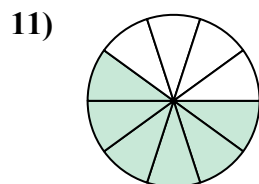
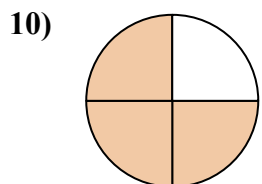
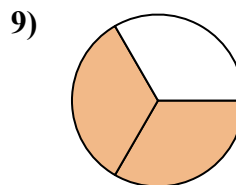
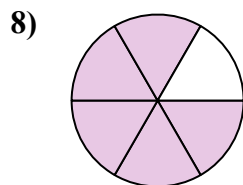
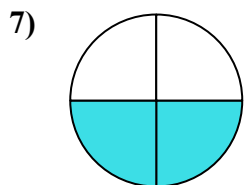
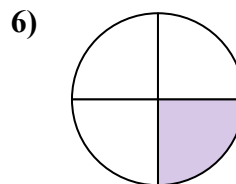
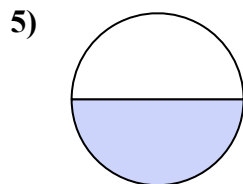
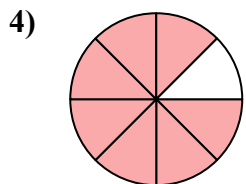
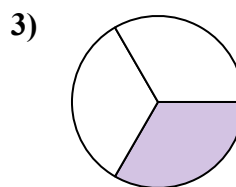
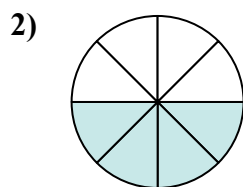
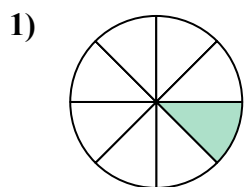


Ответы

1. _____
2. _____
3. _____
4. _____
5. _____
6. _____
7. _____
8. _____
9. _____
10. _____
11. _____
12. _____
13. _____
14. _____
15. _____



Найдите угол (градусы) закрашенной части круга



ОТВЕТЫ

1. 45

2. 180

3. 120

4. 315

5. 180

6. 90

7. 180

8. 300

9. 240

10. 270

11. 216

12. 72

13. 135

14. 40

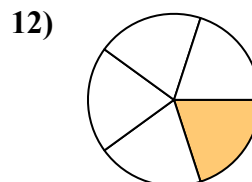
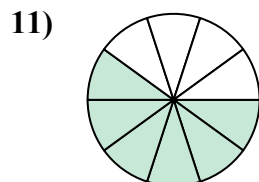
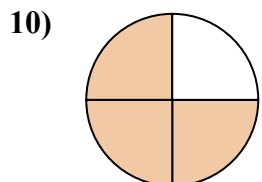
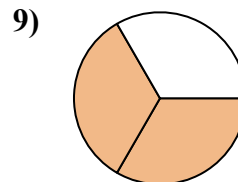
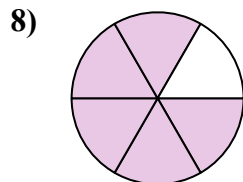
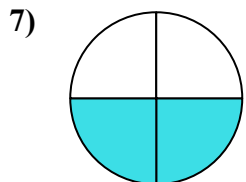
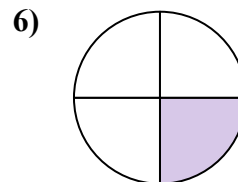
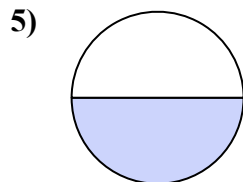
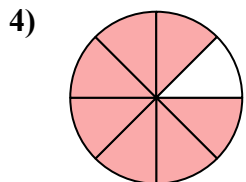
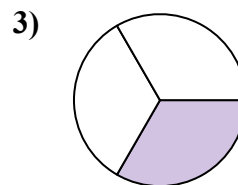
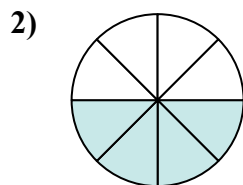
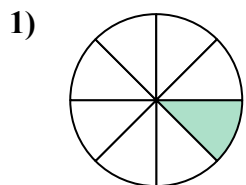
15. 280



Найдите угол (градусы) закрашенной части круга

ОТВЕТЫ

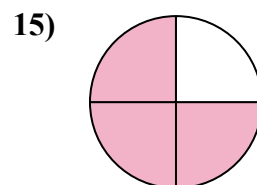
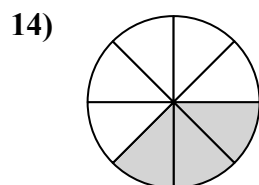
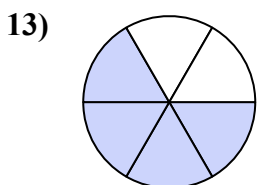
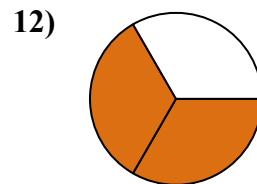
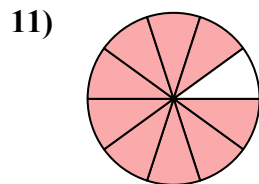
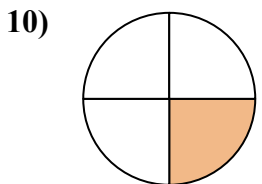
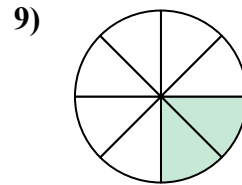
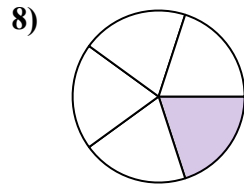
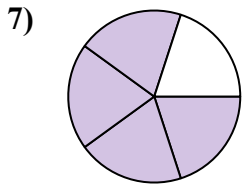
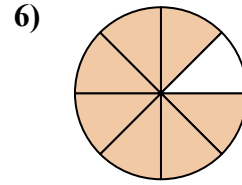
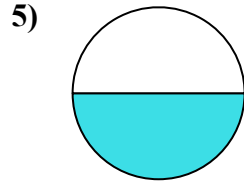
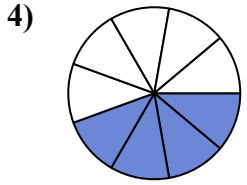
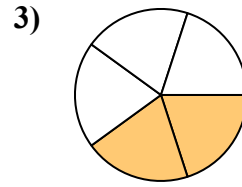
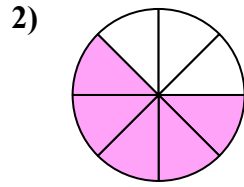
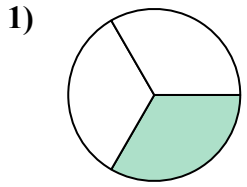
90	216	45	180	180
300	240	270	120	315
180	72			



1. _____
2. _____
3. _____
4. _____
5. _____
6. _____
7. _____
8. _____
9. _____
10. _____
11. _____
12. _____



Найдите угол (градусы) закрашенной части круга



Ответы

1. _____

2. _____

3. _____

4. _____

5. _____

6. _____

7. _____

8. _____

9. _____

10. _____

11. _____

12. _____

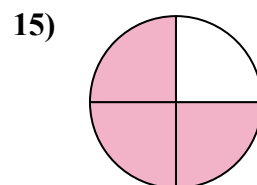
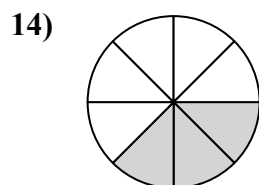
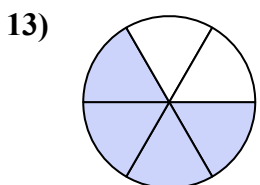
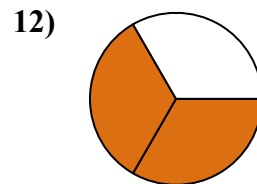
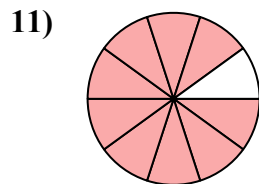
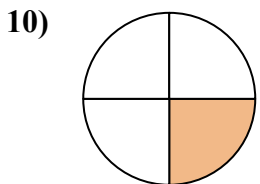
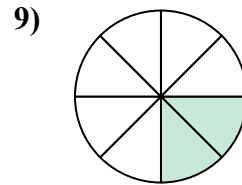
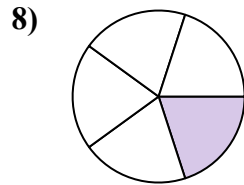
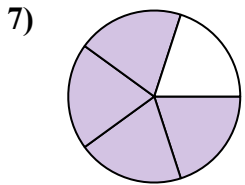
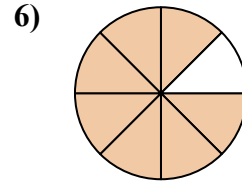
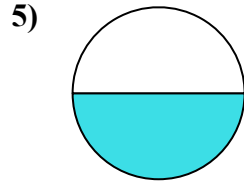
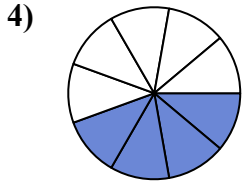
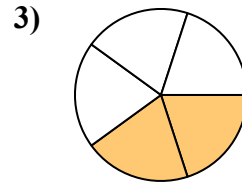
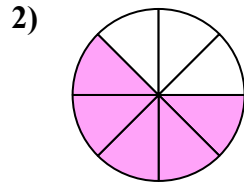
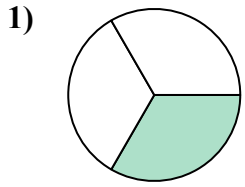
13. _____

14. _____

15. _____



Найдите угол (градусы) закрашенной части круга



ОТВЕТЫ

1. 120

2. 225

3. 144

4. 160

5. 180

6. 315

7. 288

8. 72

9. 90

10. 90

11. 324

12. 240

13. 240

14. 135

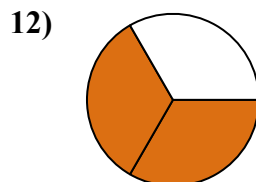
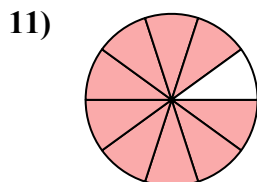
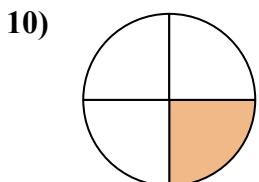
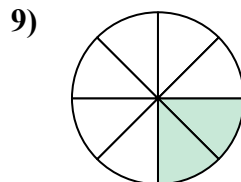
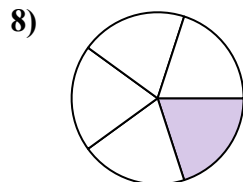
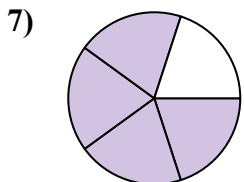
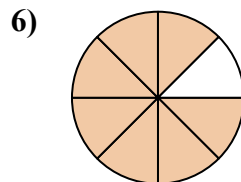
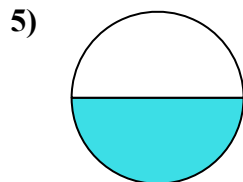
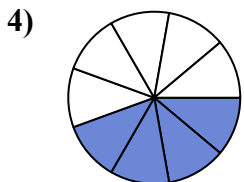
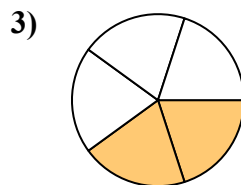
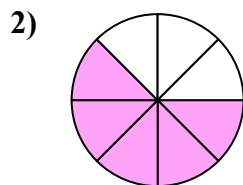
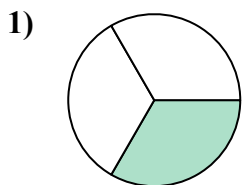
15. 270



Найдите угол (градусы) закрашенной части круга

315	120	240	72	90
225	324	160	180	288
90	144			

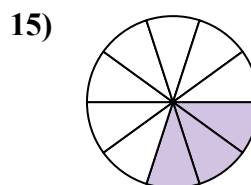
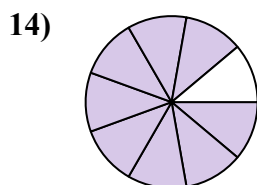
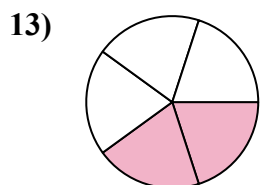
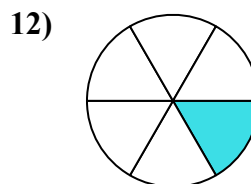
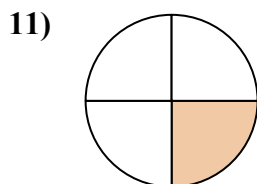
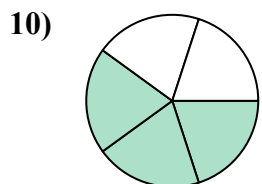
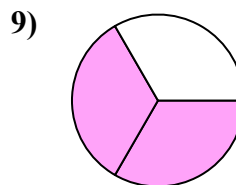
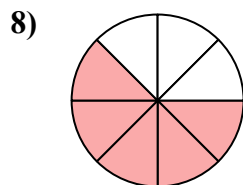
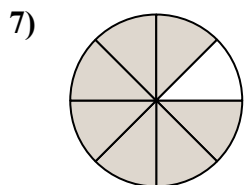
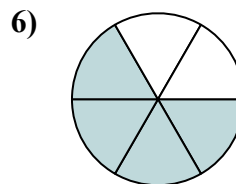
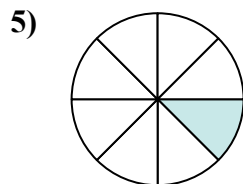
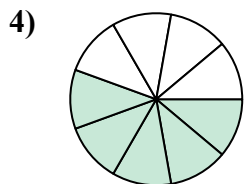
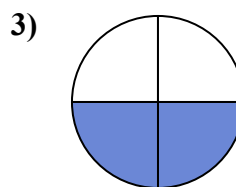
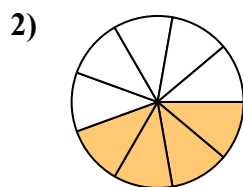
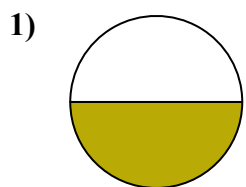
ОТВЕТЫ



1. _____
2. _____
3. _____
4. _____
5. _____
6. _____
7. _____
8. _____
9. _____
10. _____
11. _____
12. _____



Найдите угол (градусы) закрашенной части круга

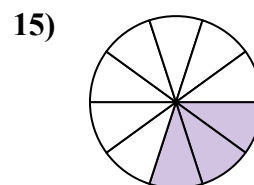
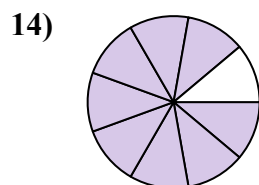
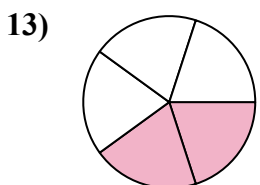
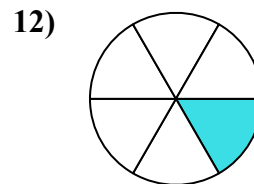
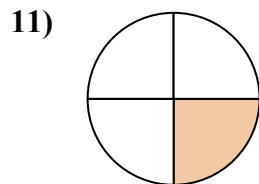
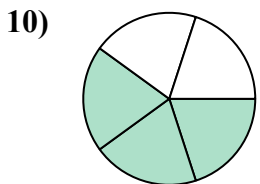
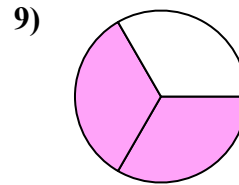
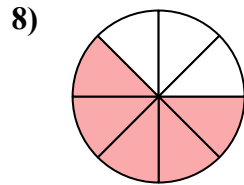
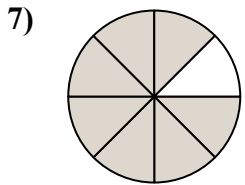
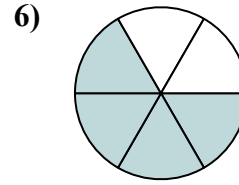
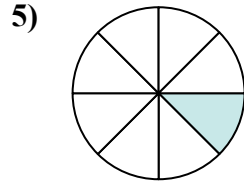
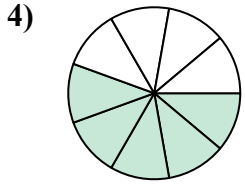
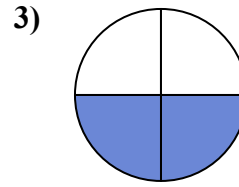
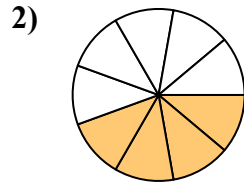
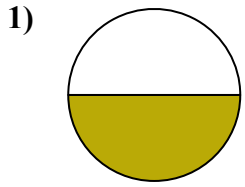


Ответы

1. _____
2. _____
3. _____
4. _____
5. _____
6. _____
7. _____
8. _____
9. _____
10. _____
11. _____
12. _____
13. _____
14. _____
15. _____



Найдите угол (градусы) закрашенной части круга



ОТВЕТЫ

1. 180

2. 160

3. 180

4. 200

5. 45

6. 240

7. 315

8. 225

9. 240

10. 216

11. 90

12. 60

13. 144

14. 320

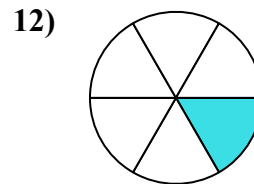
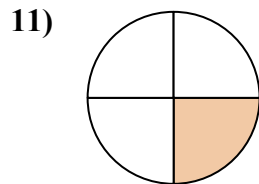
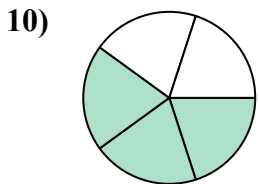
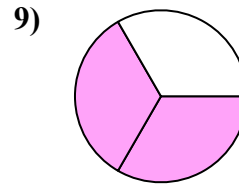
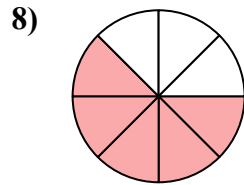
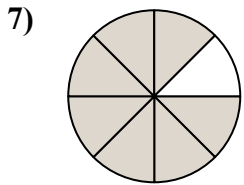
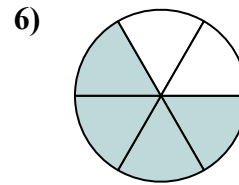
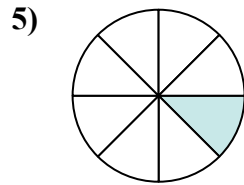
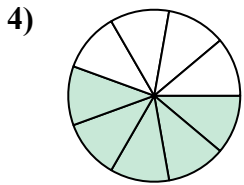
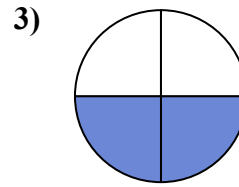
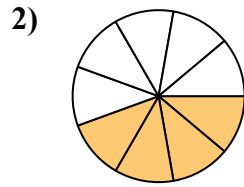
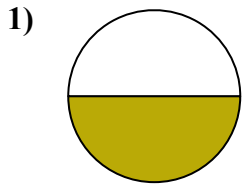
15. 108



Найдите угол (градусы) закрашенной части круга

ОТВЕТЫ

90	200	240	60	160
216	315	180	45	225
240	180			



1. _____
2. _____
3. _____
4. _____
5. _____
6. _____
7. _____
8. _____
9. _____
10. _____
11. _____
12. _____