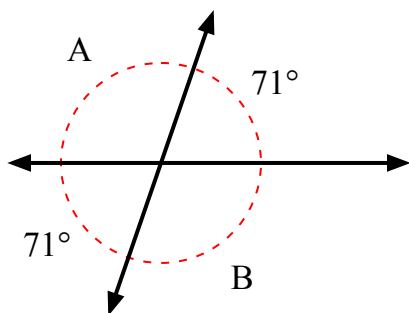


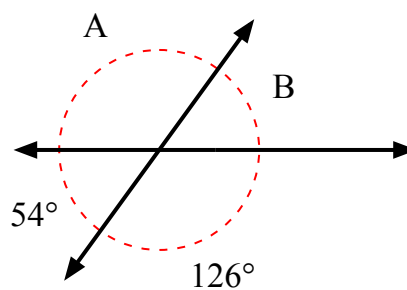


Найдите значение угла «А» и угла «В».

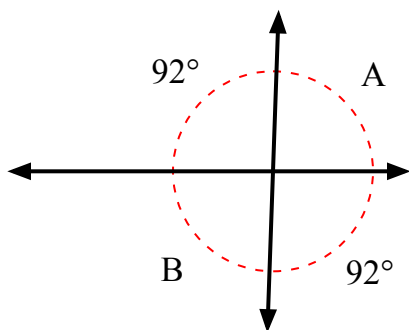
1)



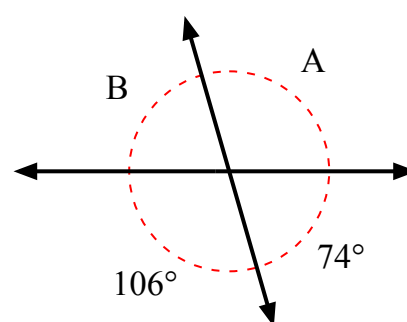
2)



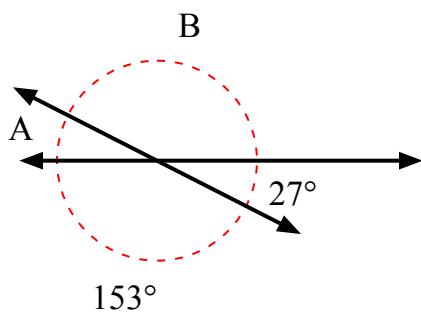
3)



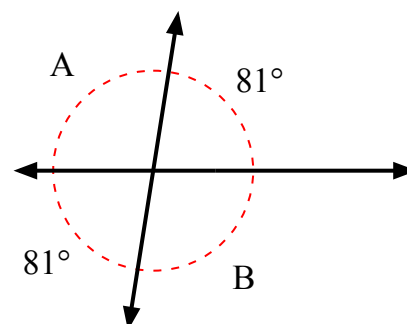
4)



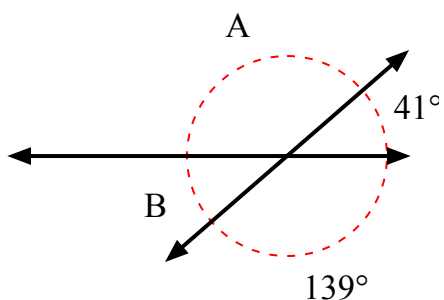
5)



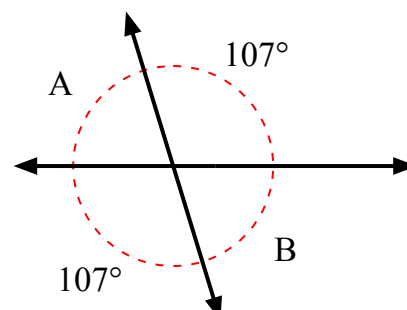
6)



7)



8)

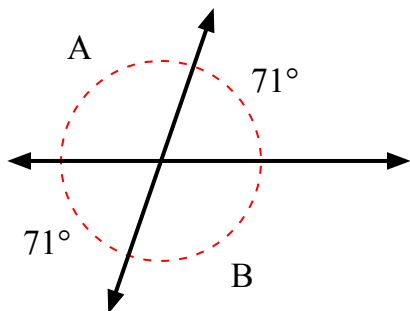
ОТВЕТЫ

1. \_\_\_\_\_
2. \_\_\_\_\_
3. \_\_\_\_\_
4. \_\_\_\_\_
5. \_\_\_\_\_
6. \_\_\_\_\_
7. \_\_\_\_\_
8. \_\_\_\_\_

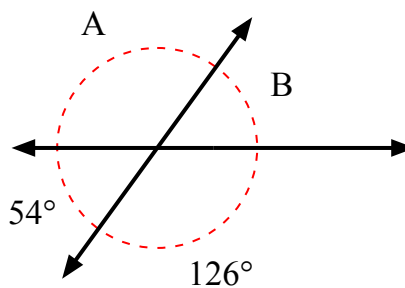


Найдите значение угла «А» и угла «В».

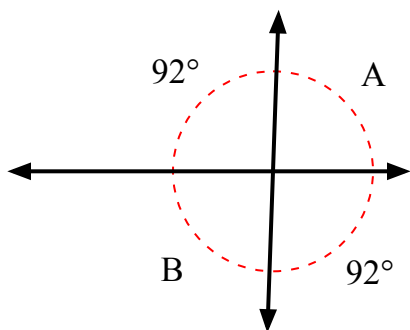
1)



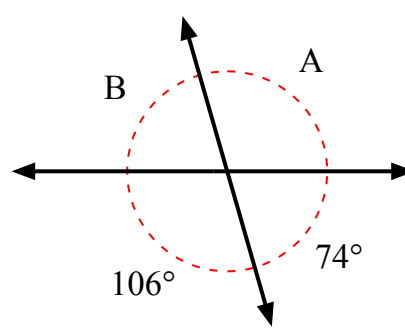
2)



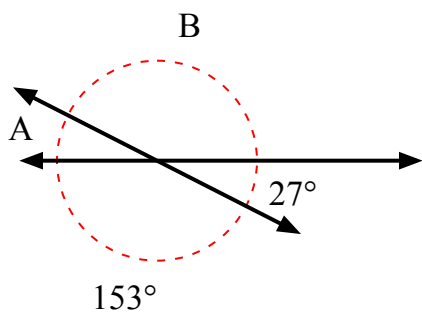
3)



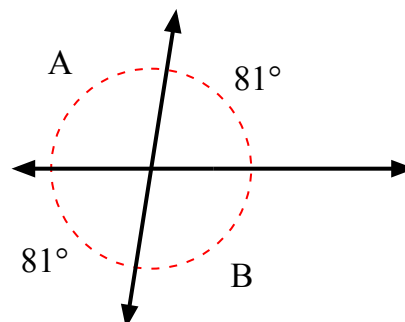
4)



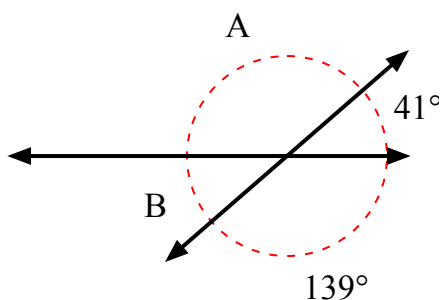
5)



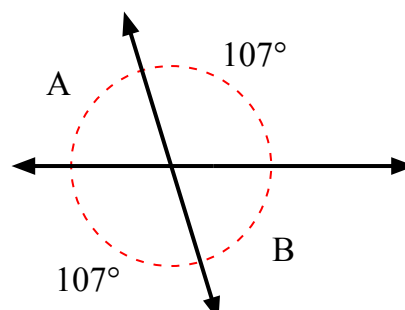
6)



7)



8)

ОТВЕТЫ

1.	<b>109°</b>	<b>109°</b>
2.	<b>126°</b>	<b>54°</b>
3.	<b>88°</b>	<b>88°</b>
4.	<b>106°</b>	<b>74°</b>
5.	<b>27°</b>	<b>153°</b>
6.	<b>99°</b>	<b>99°</b>
7.	<b>139°</b>	<b>41°</b>
8.	<b>73°</b>	<b>73°</b>