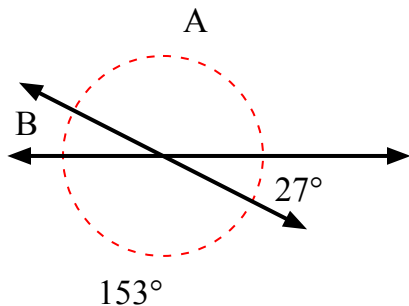


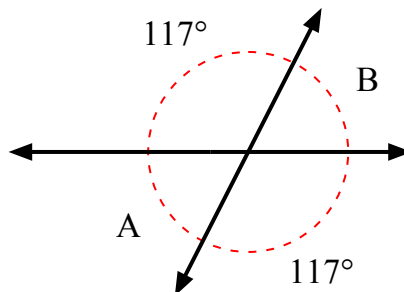


Найдите значение угла «А» и угла «В».

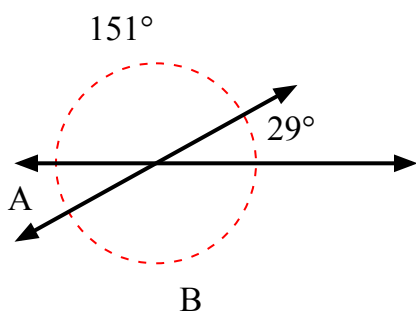
1)



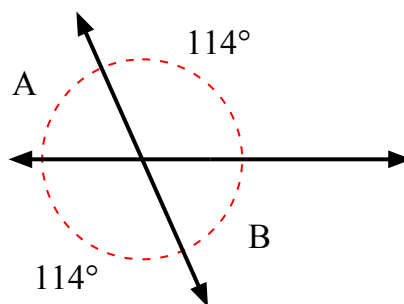
2)



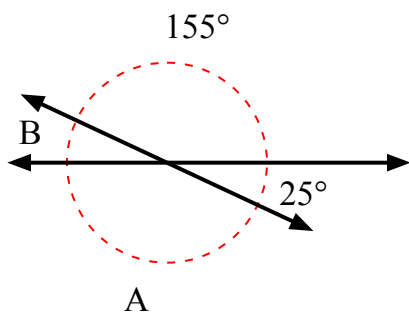
3)



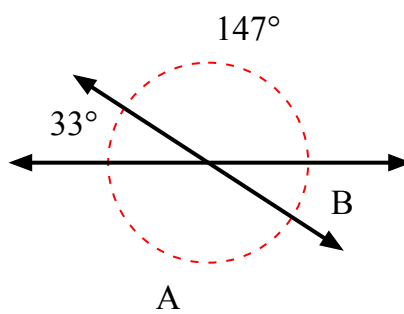
4)



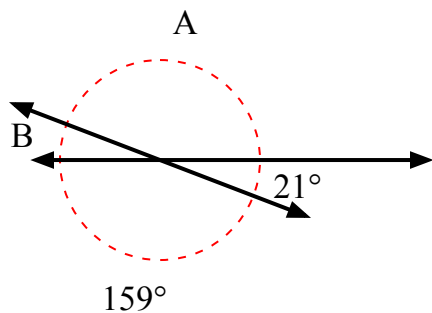
5)



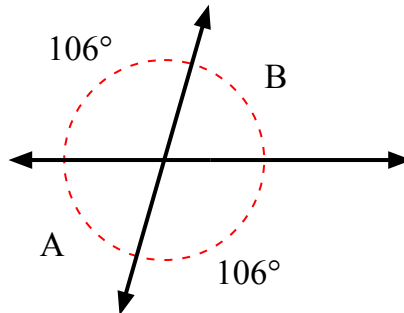
6)



7)



8)

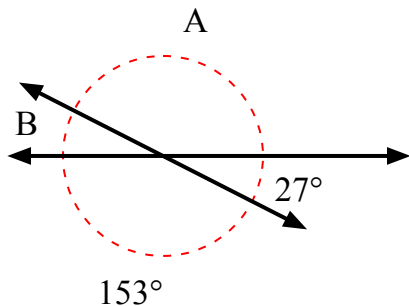
ОТВЕТЫ

1. \_\_\_\_\_
2. \_\_\_\_\_
3. \_\_\_\_\_
4. \_\_\_\_\_
5. \_\_\_\_\_
6. \_\_\_\_\_
7. \_\_\_\_\_
8. \_\_\_\_\_

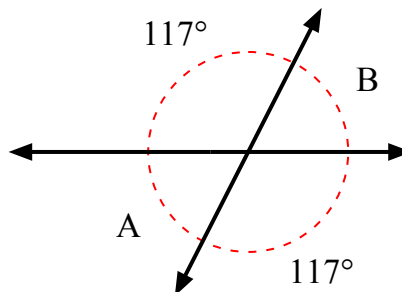


Найдите значение угла «А» и угла «В».

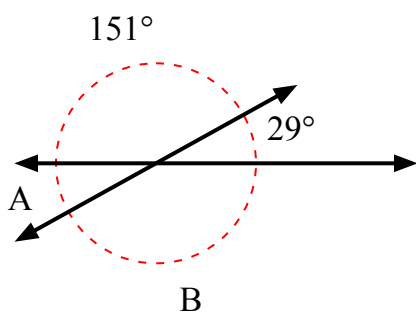
1)



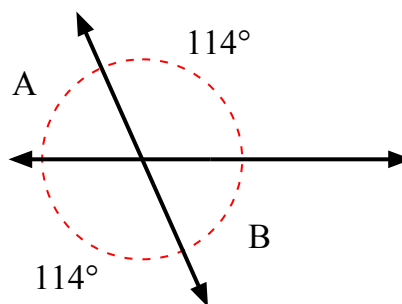
2)



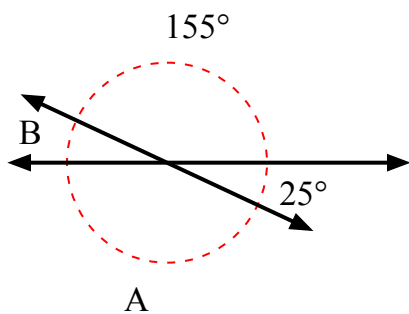
3)



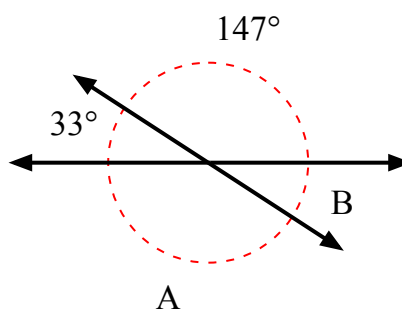
4)



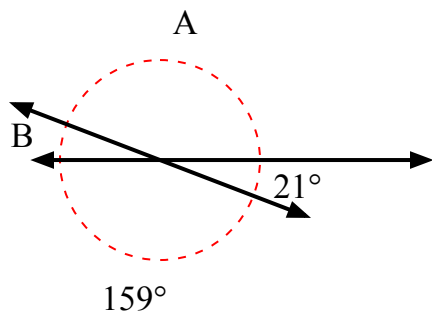
5)



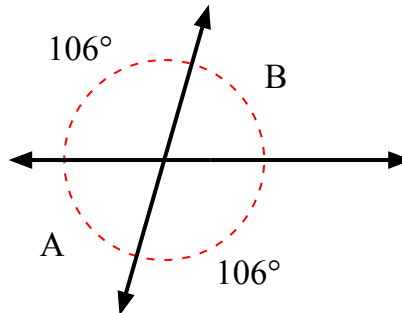
6)



7)



8)

**ОТВЕТЫ**

1.	<b>153°</b>	<b>27°</b>
2.	<b>63°</b>	<b>63°</b>
3.	<b>29°</b>	<b>151°</b>
4.	<b>66°</b>	<b>66°</b>
5.	<b>155°</b>	<b>25°</b>
6.	<b>147°</b>	<b>33°</b>
7.	<b>159°</b>	<b>21°</b>
8.	<b>74°</b>	<b>74°</b>