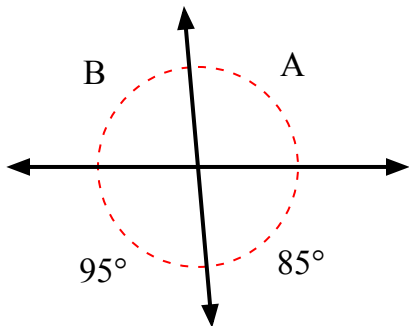


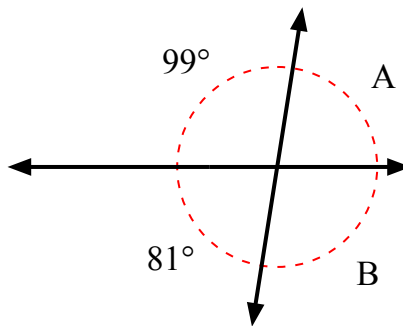


Найдите значение угла «А» и угла «В».

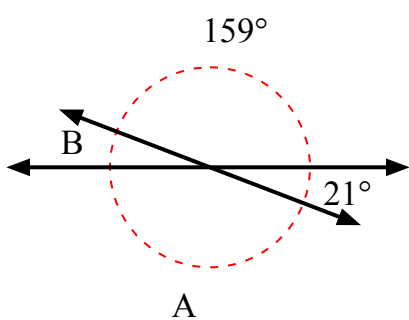
1)



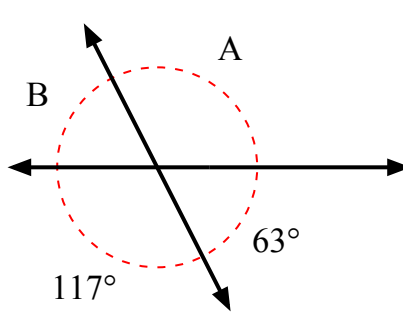
2)



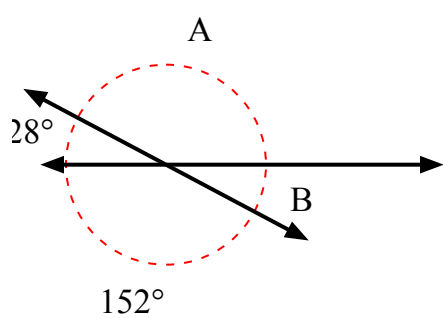
3)



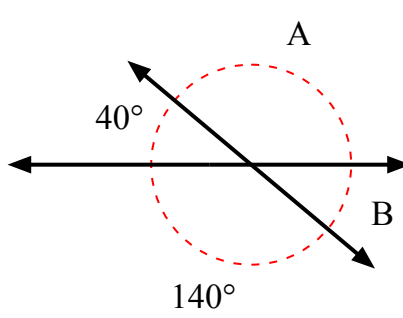
4)



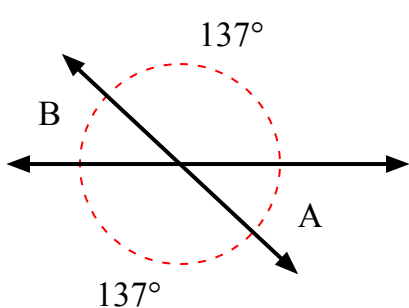
5)



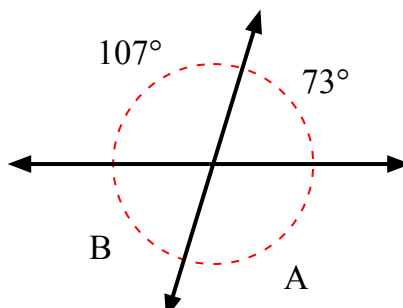
6)



7)



8)



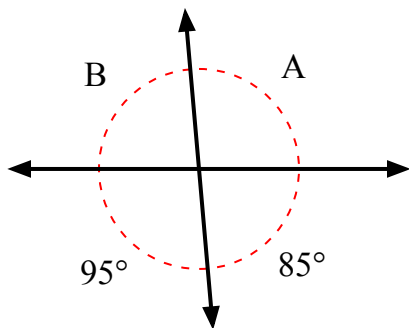
ОТВЕТЫ

1. _____
2. _____
3. _____
4. _____
5. _____
6. _____
7. _____
8. _____

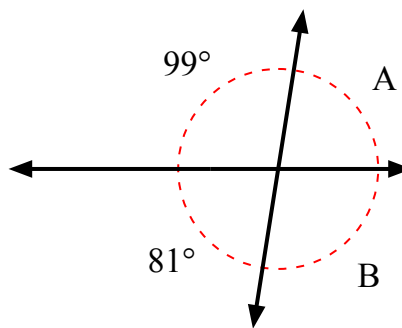


Найдите значение угла «А» и угла «В».

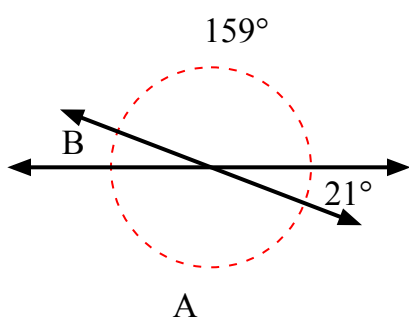
1)



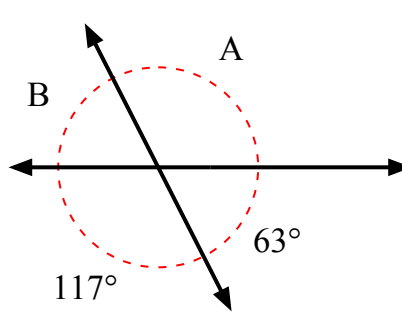
2)



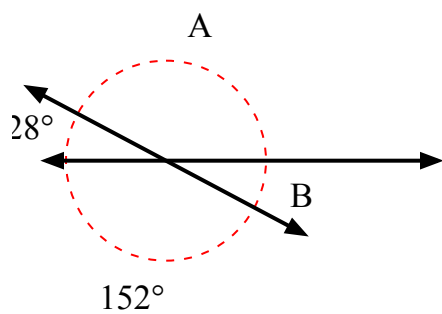
3)



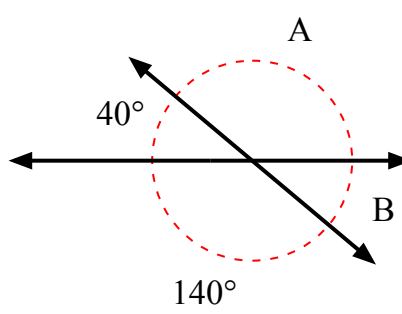
4)



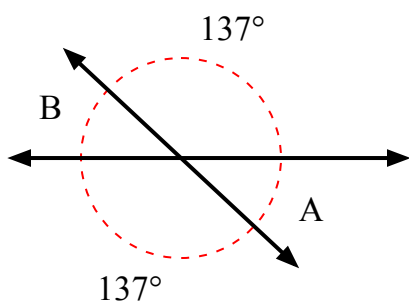
5)



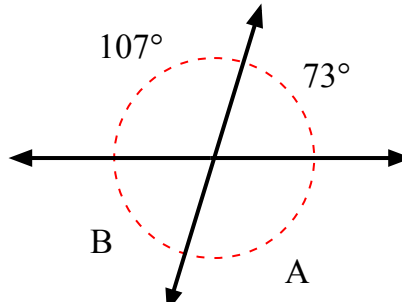
6)



7)



8)

ОТВЕТЫ

1.	<u>95°</u>	<u>85°</u>
2.	<u>81°</u>	<u>99°</u>
3.	<u>159°</u>	<u>21°</u>
4.	<u>117°</u>	<u>63°</u>
5.	<u>152°</u>	<u>28°</u>
6.	<u>140°</u>	<u>40°</u>
7.	<u>43°</u>	<u>43°</u>
8.	<u>107°</u>	<u>73°</u>