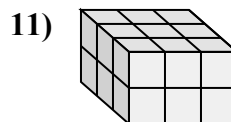
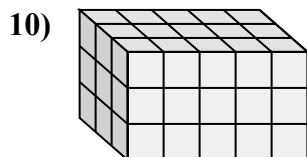
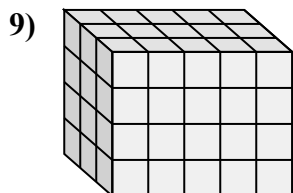
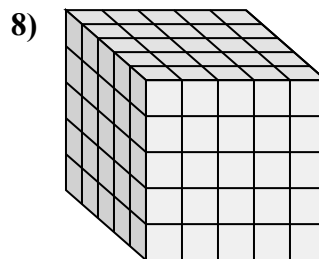
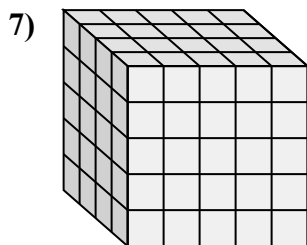
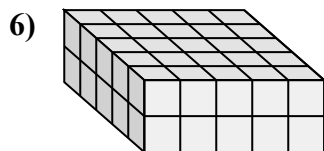
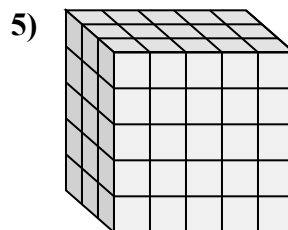
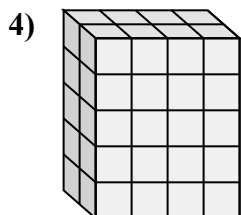
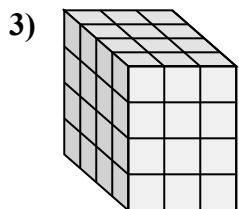
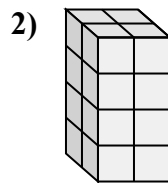
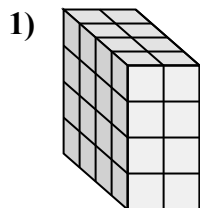
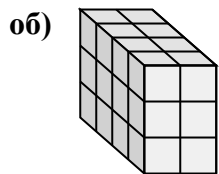




Сопоставьте каждую проблему с уравнением, которое могло бы ее представить.

Ответьте с пропущенным термином и буквой.

**ОТВЕТЫ**об. D, 41. I, 42. E, 23. K, 44. B, 25. J, 36. H, 507. G, 58. L, 59. A, 510. F, 511. C, 3

A. $3 \times \underline{\quad} \times 4 = 60$

B. $\underline{\quad} \times 4 \times 5 = 40$

C. $3 \times \underline{\quad} \times 2 = 18$

D. $\underline{\quad} \times 2 \times 3 = 24$

E. $\underline{\quad} \times 2 \times 4 = 16$

F. $3 \times \underline{\quad} \times 3 = 45$

G. $4 \times \underline{\quad} \times 5 = 100$

H. $5 \times 5 \times 2 = \underline{\quad}$

I. $4 \times 2 \times \underline{\quad} = 32$

J. $\underline{\quad} \times 5 \times 5 = 75$

K. $4 \times 3 \times \underline{\quad} = 48$

L. $5 \times 5 \times \underline{\quad} = 125$

