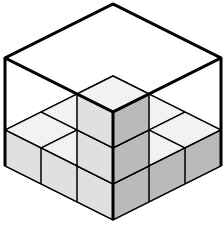


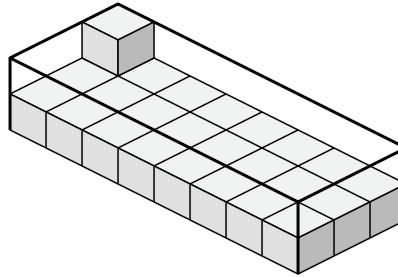


Создайте выражение для определения объема каждой коробки.

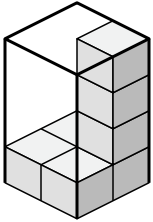
1)



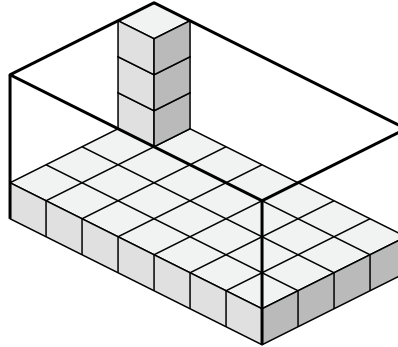
2)



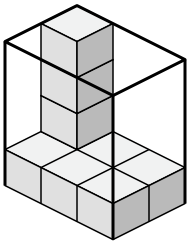
3)



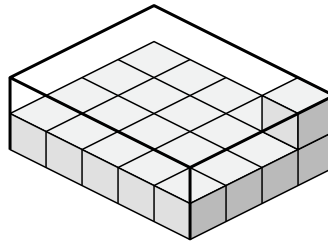
4)



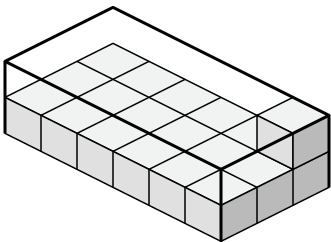
5)



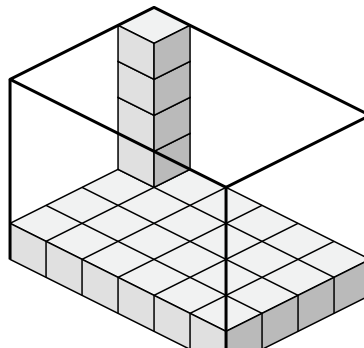
6)



7)



8)



Ответы

1. _____

2. _____

3. _____

4. _____

5. _____

6. _____

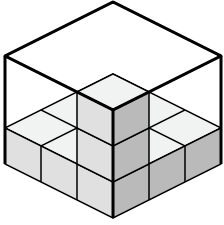
7. _____

8. _____

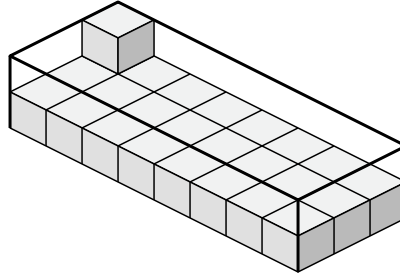


Создайте выражение для определения объема каждой коробки.

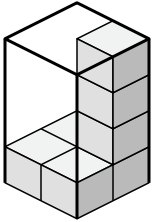
1)



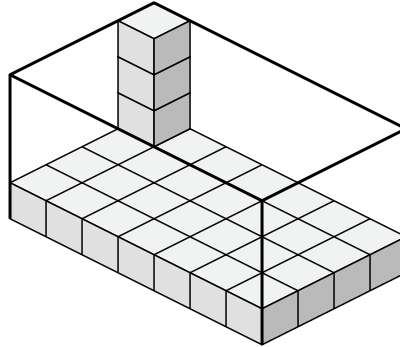
2)



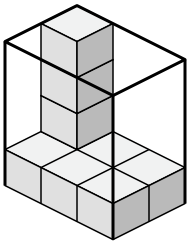
3)



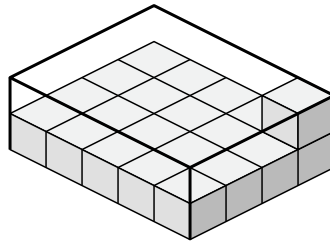
4)



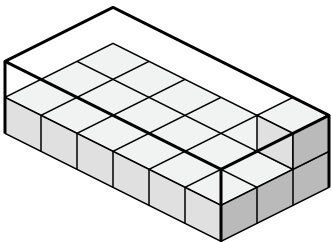
5)



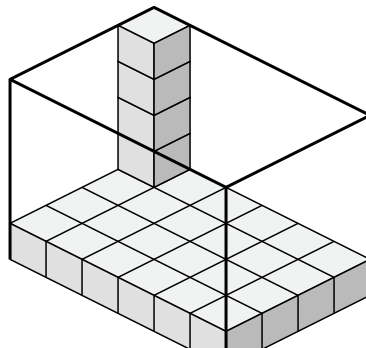
6)



7)



8)

**Ответы**1. 3×3×32. 8×3×23. 2×2×44. 7×4×45. 3×2×46. 5×4×27. 6×3×28. 6×4×5