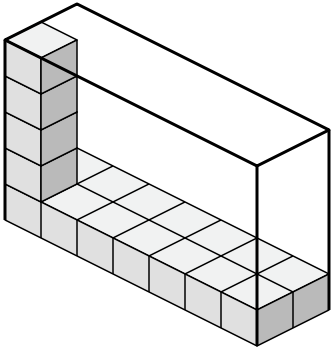


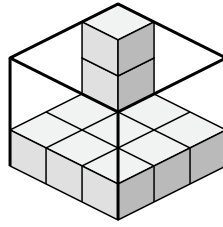


Создайте выражение для определения объема каждой коробки.

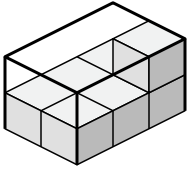
1)



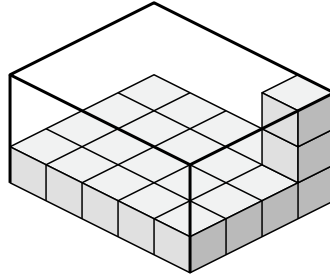
2)



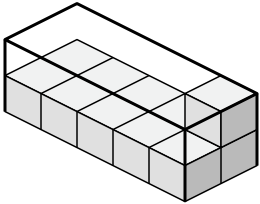
3)



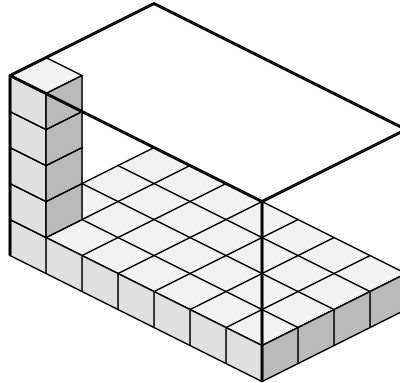
4)



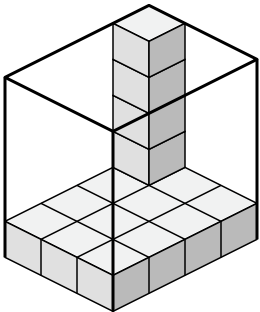
5)



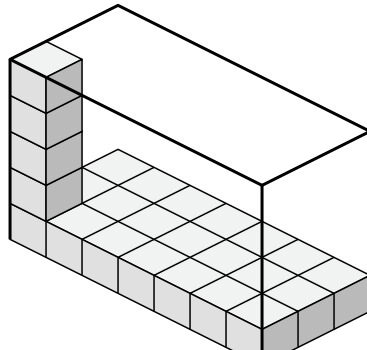
6)



7)



8)



Ответы

1. \_\_\_\_\_

2. \_\_\_\_\_

3. \_\_\_\_\_

4. \_\_\_\_\_

5. \_\_\_\_\_

6. \_\_\_\_\_

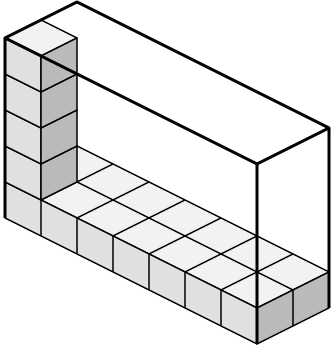
7. \_\_\_\_\_

8. \_\_\_\_\_

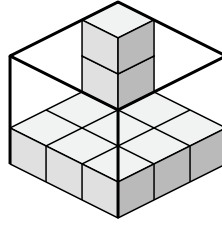


Создайте выражение для определения объема каждой коробки.

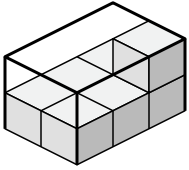
1)



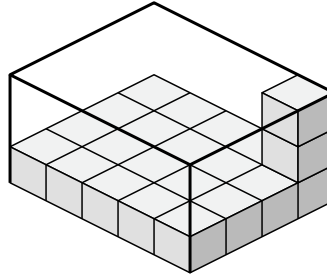
2)



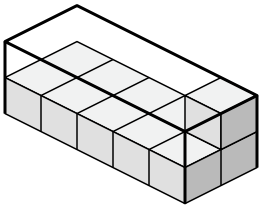
3)



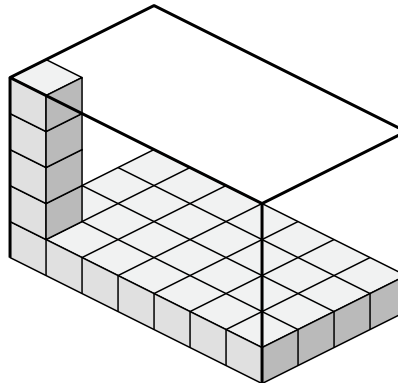
4)



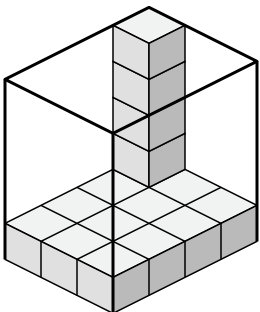
5)



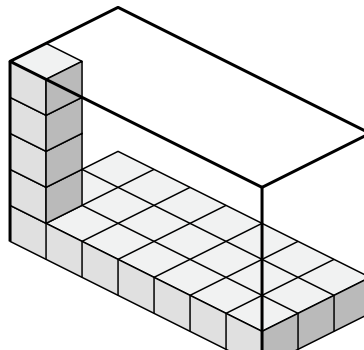
6)



7)



8)

**Ответы**1. 7×2×52. 3×3×33. 2×3×24. 5×4×35. 5×2×26. 7×4×57. 3×4×58. 7×3×5