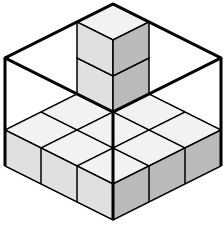




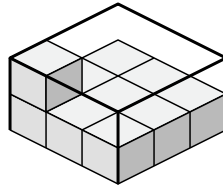
Создайте выражение для определения объема каждой коробки.

Ответы

1)



2)



1. _____

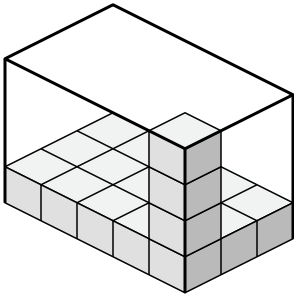
2. _____

3. _____

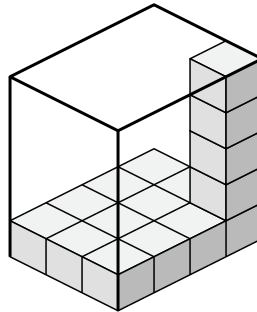
4. _____

5. _____

3)



4)

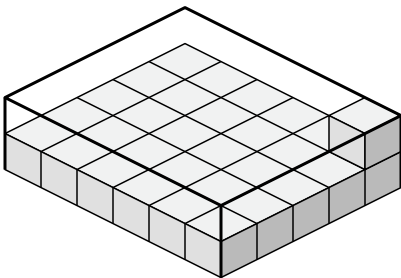


6. _____

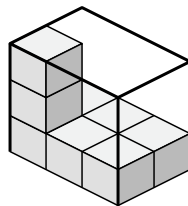
7. _____

8. _____

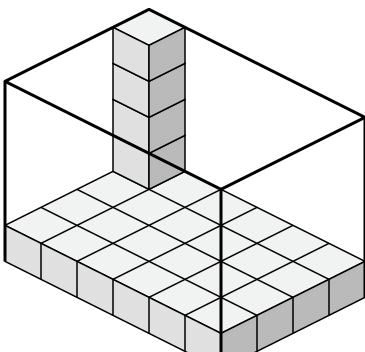
5)



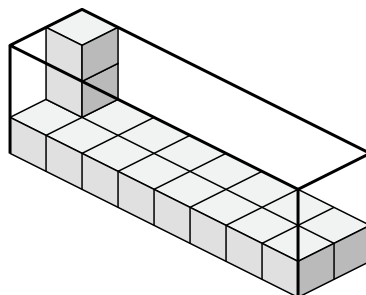
6)



7)



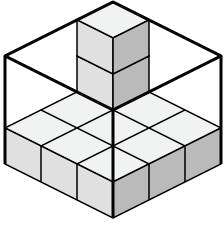
8)



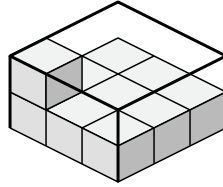


Создайте выражение для определения объема каждой коробки.

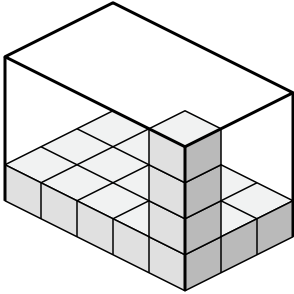
1)



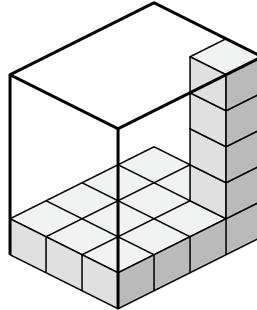
2)



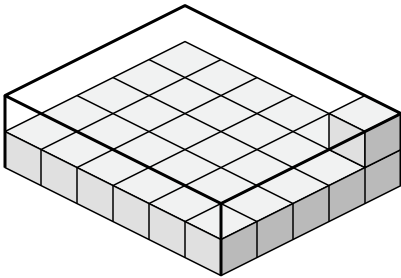
3)



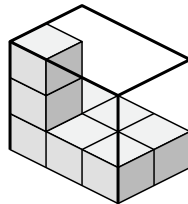
4)



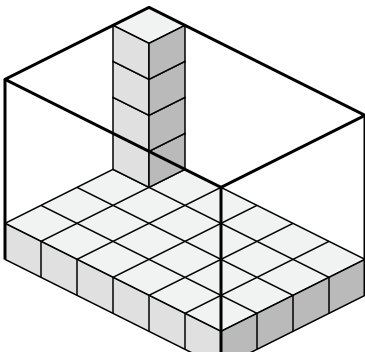
5)



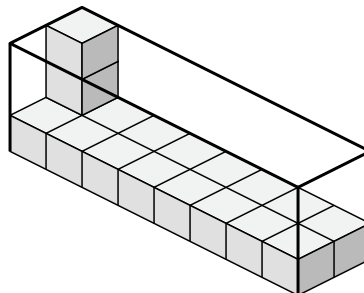
6)



7)



8)

**Ответы**1. 3×3×32. 3×3×23. 5×3×44. 3×4×55. 6×5×26. 3×2×37. 6×4×58. 8×2×3