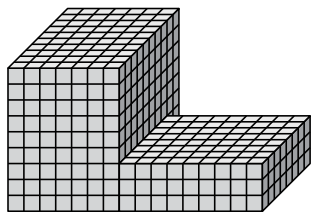




Найдите общий объем каждой фигуры. Размеры указаны в сантиметрах (без учета масштаба).

ОТВЕТЫ

1)



1. _____

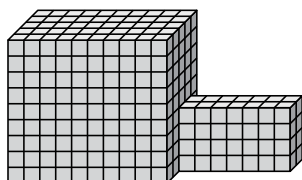
2. _____

3. _____

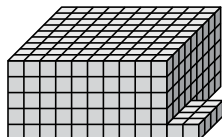
4. _____

5. _____

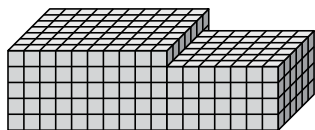
2)



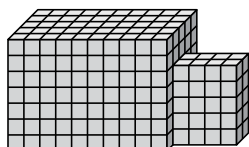
3)



4)



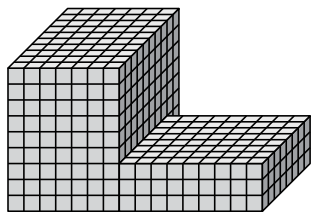
5)





Найдите общий объем каждой фигуры. Размеры указаны в сантиметрах (без учета масштаба).

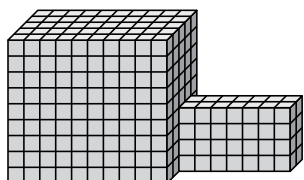
1)



$$7 \times 10 \times 9 = 630$$

$$9 \times 8 \times 3 = 216$$

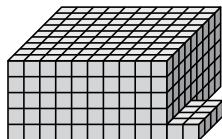
2)



$$10 \times 5 \times 9 = 450$$

$$7 \times 2 \times 4 = 56$$

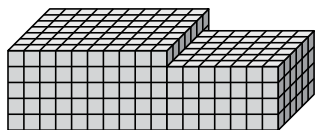
3)



$$10 \times 9 \times 5 = 450$$

$$2 \times 4 \times 1 = 8$$

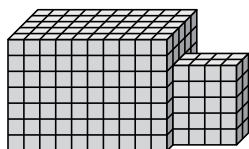
4)



$$10 \times 7 \times 5 = 350$$

$$7 \times 6 \times 4 = 168$$

5)



$$10 \times 5 \times 7 = 350$$

$$4 \times 2 \times 5 = 40$$

ОТВЕТЫ

1. 846 cm³

2. 506 cm³

3. 458 cm³

4. 518 cm³

5. 390 cm³