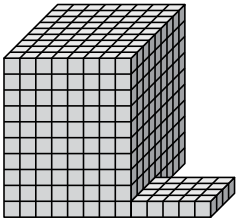


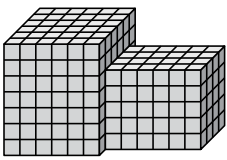


Найдите общий объем каждой фигуры. Размеры указаны в сантиметрах (без учета масштаба).

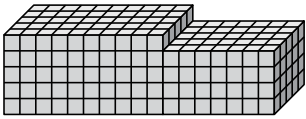
1)



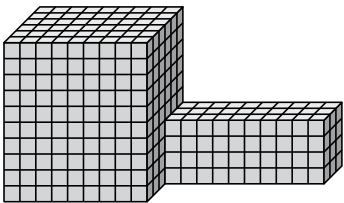
2)



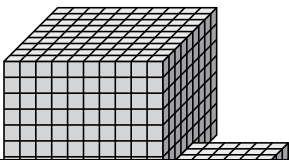
3)



4)



5)



Ответы

1. _____

2. _____

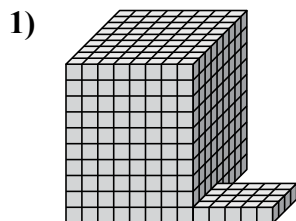
3. _____

4. _____


5. _____



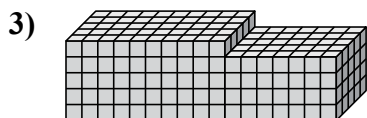
Найдите общий объем каждой фигуры. Размеры указаны в сантиметрах (без учета масштаба).



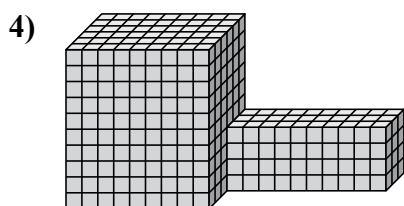
$$8 \times 9 \times 10 = 720$$
$$5 \times 4 \times 1 = 20$$



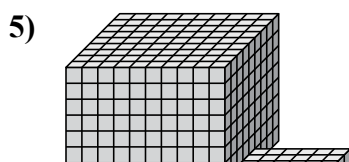
$$6 \times 6 \times 7 = 252$$
$$6 \times 4 \times 5 = 120$$



$$10 \times 5 \times 5 = 250$$
$$7 \times 5 \times 4 = 140$$



$$9 \times 6 \times 10 = 540$$
$$10 \times 3 \times 4 = 120$$



$$10 \times 9 \times 8 = 720$$
$$6 \times 5 \times 1 = 30$$

ОТВЕТЫ

1. 740 cm³

2. 372 cm³

3. 390 cm³

4. 660 cm³

5. 750 cm³