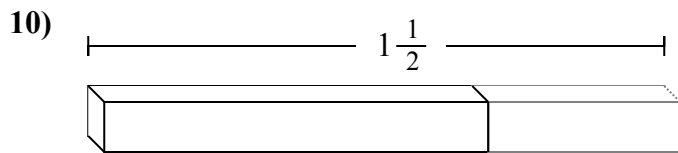
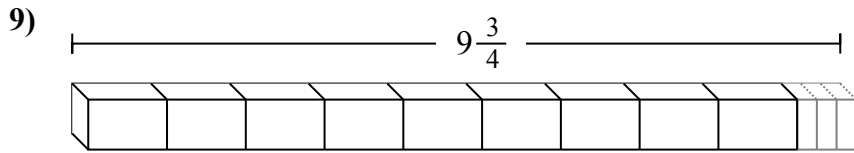
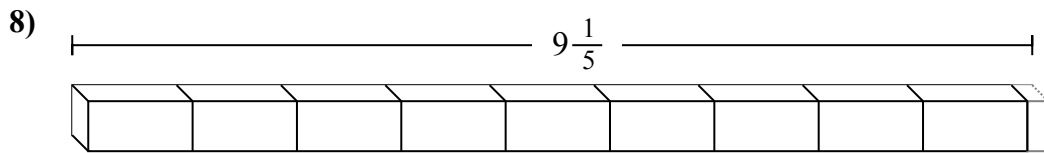
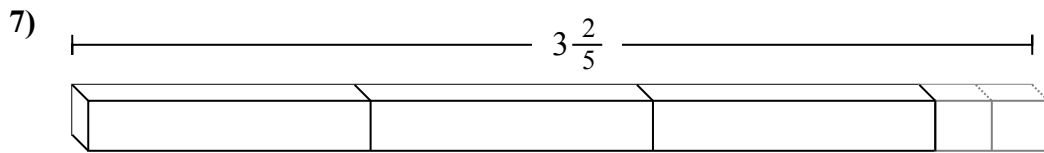
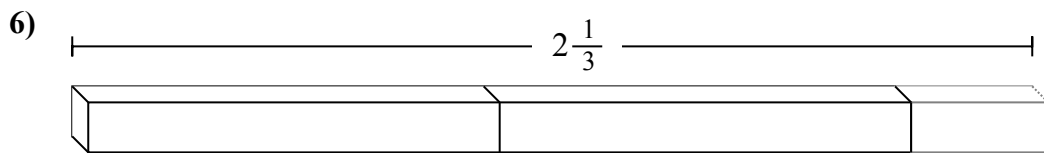
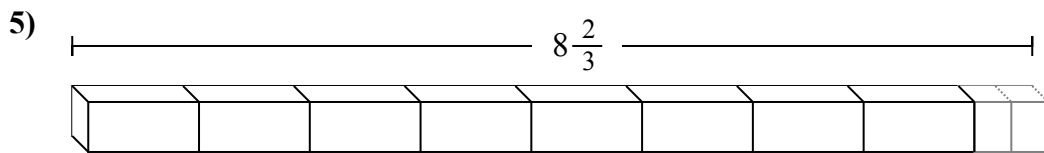
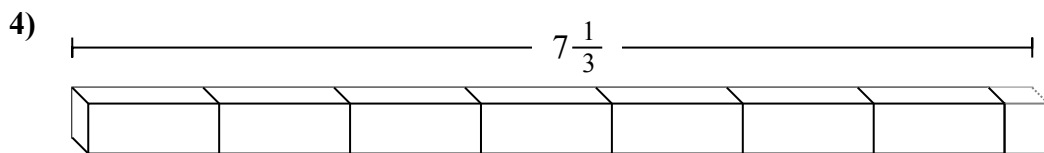
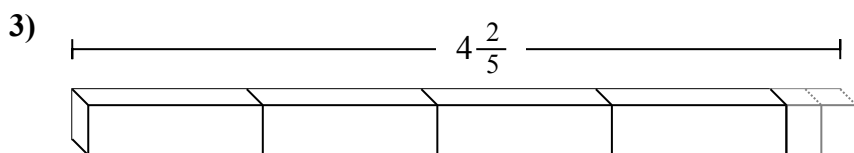
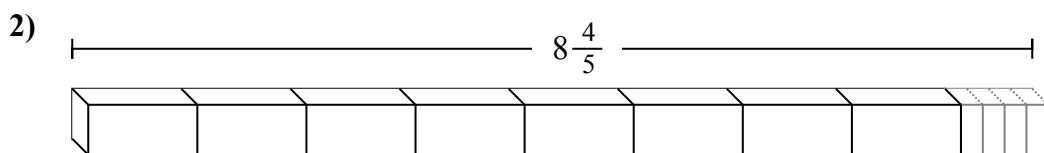
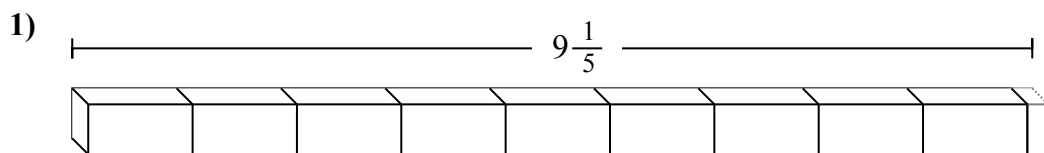
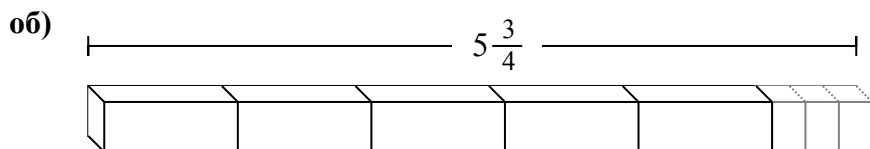




Определите количество малых единиц в задачах.

**Ответы**об. **23**

1. \_\_\_\_\_

2. \_\_\_\_\_

3. \_\_\_\_\_

4. \_\_\_\_\_

5. \_\_\_\_\_

6. \_\_\_\_\_

7. \_\_\_\_\_

8. \_\_\_\_\_

9. \_\_\_\_\_

10. \_\_\_\_\_



Определите количество малых единиц в задачах.

Ответы

об)  $5\frac{3}{4}$

1)  $9\frac{1}{5}$

2)  $8\frac{4}{5}$

3)  $4\frac{2}{5}$

4)  $7\frac{1}{3}$

5)  $8\frac{2}{3}$

6)  $2\frac{1}{3}$

7)  $3\frac{2}{5}$

8)  $9\frac{1}{5}$

9)  $9\frac{3}{4}$

10)  $1\frac{1}{2}$

об. 23

1. 46

2. 44

3. 22

4. 22

5. 26

6. 7

7. 17

8. 46

9. 39

10. 3