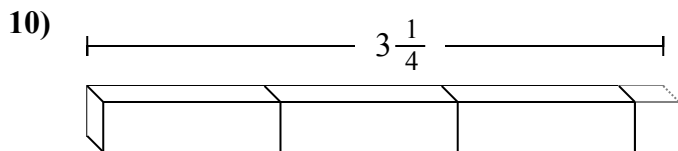
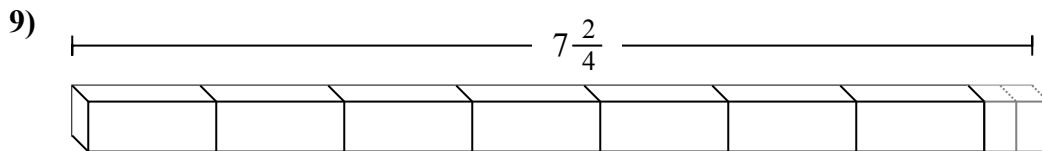
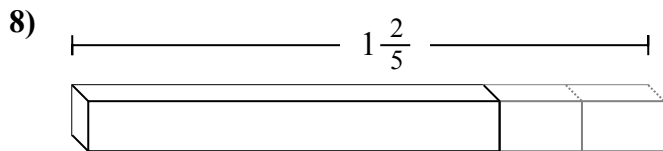
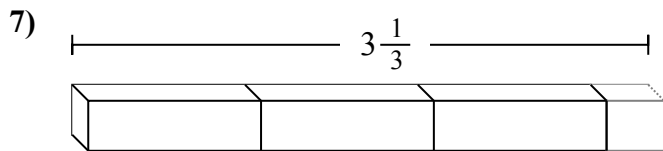
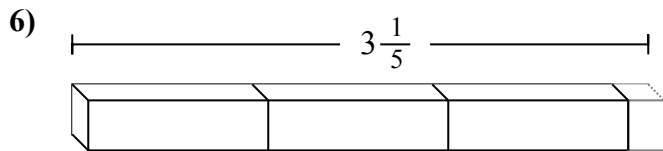
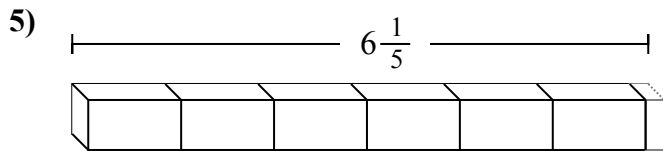
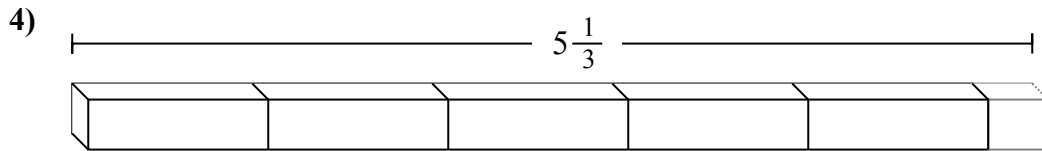
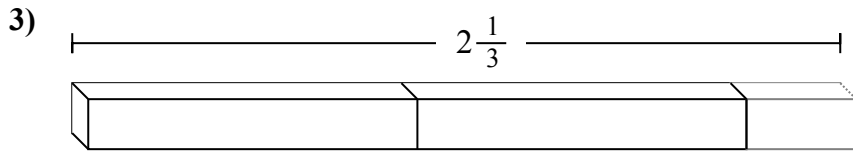
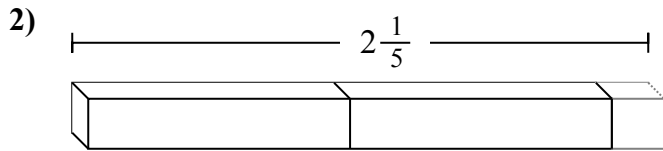
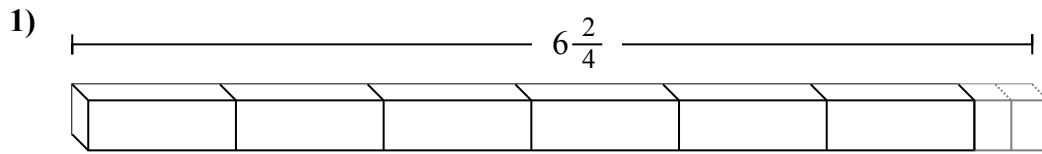
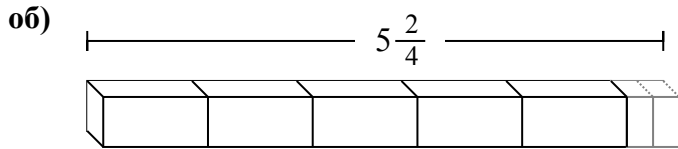




Определите количество малых единиц в задачах.

Ответы



- об. **22**
1. _____
2. _____
3. _____
4. _____
5. _____
6. _____
7. _____
8. _____
9. _____
10. _____



Определите количество малых единиц в задачах.

об) $5\frac{2}{4}$

1) $6\frac{2}{4}$

2) $2\frac{1}{5}$

3) $2\frac{1}{3}$

4) $5\frac{1}{3}$

5) $6\frac{1}{5}$

6) $3\frac{1}{5}$

7) $3\frac{1}{3}$

8) $1\frac{2}{5}$

9) $7\frac{2}{4}$

10) $3\frac{1}{4}$

ОТВЕТЫ

- об. 22
- 1. 26
- 2. 11
- 3. 7
- 4. 16
- 5. 31
- 6. 16
- 7. 10
- 8. 7
- 9. 30
- 10. 13