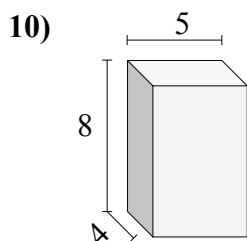
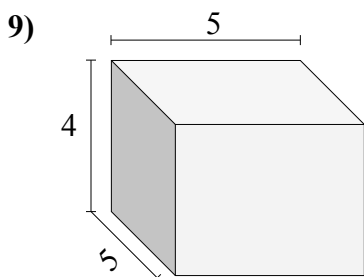
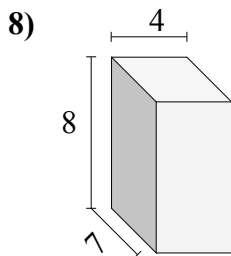
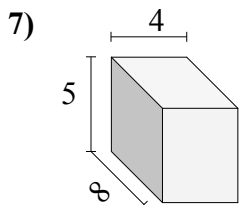
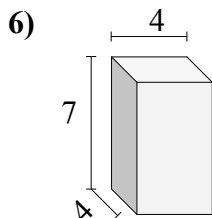
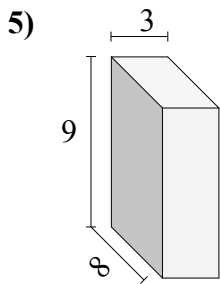
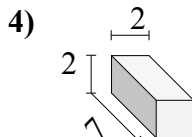
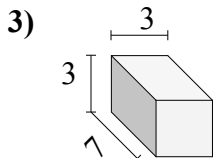
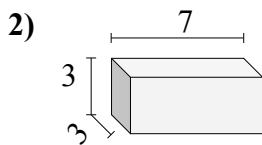
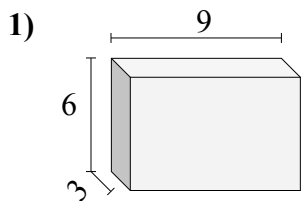




Найдите объем каждого прямоугольного параллелепипеда.

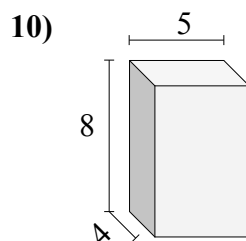
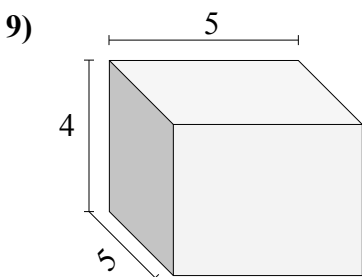
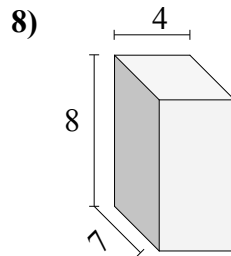
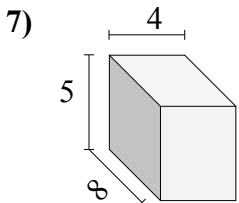
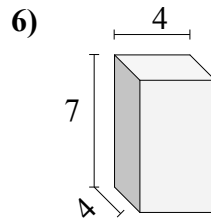
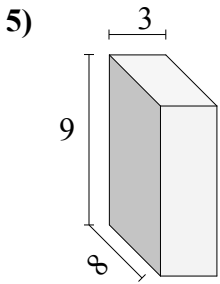
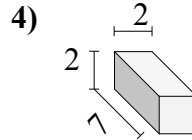
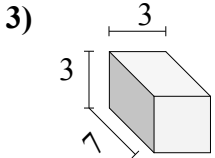
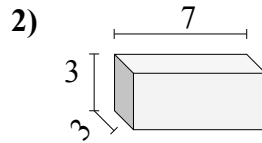
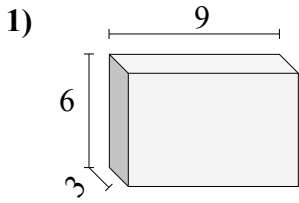


Ответы

- 1. _____
- 2. _____
- 3. _____
- 4. _____
- 5. _____
- 6. _____
- 7. _____
- 8. _____
- 9. _____
- 10. _____



Найдите объем каждого прямоугольного параллелепипеда.

Ответы

1. 162
2. 63
3. 63
4. 28
5. 216
6. 112
7. 160
8. 224
9. 100
10. 160