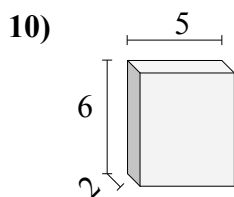
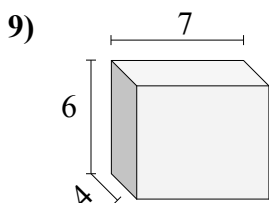
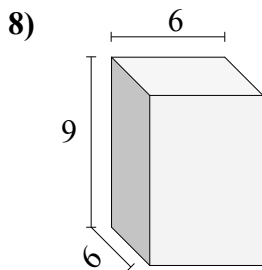
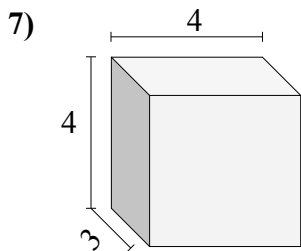
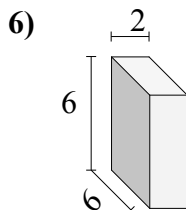
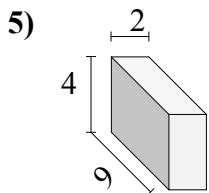
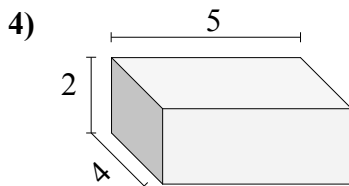
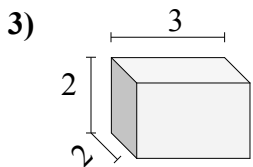
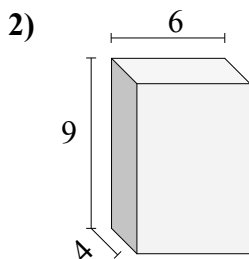
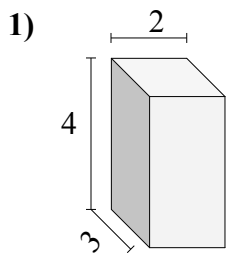




Найдите объем каждого прямоугольного параллелепипеда.

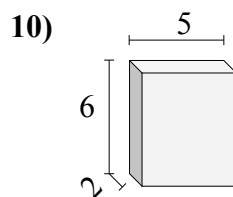
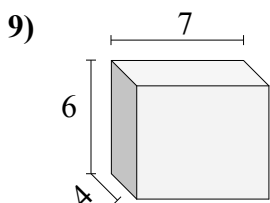
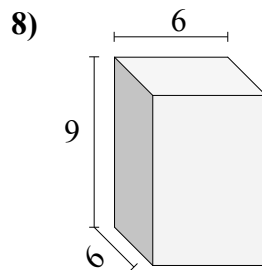
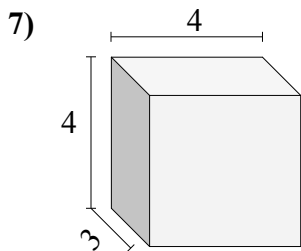
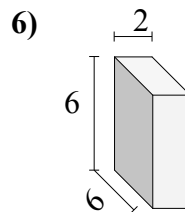
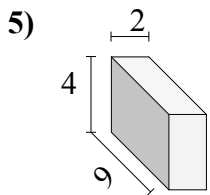
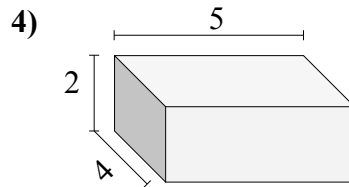
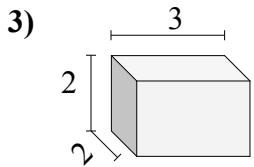
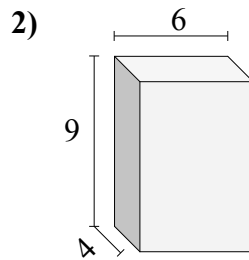
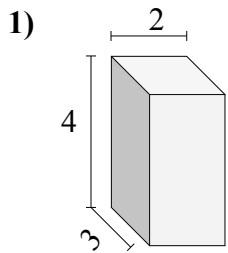


Ответы

- 1. \_\_\_\_\_
- 2. \_\_\_\_\_
- 3. \_\_\_\_\_
- 4. \_\_\_\_\_
- 5. \_\_\_\_\_
- 6. \_\_\_\_\_
- 7. \_\_\_\_\_
- 8. \_\_\_\_\_
- 9. \_\_\_\_\_
- 10. \_\_\_\_\_



Найдите объем каждого прямоугольного параллелепипеда.

**Ответы**1. 242. 2163. 124. 405. 726. 727. 488. 3249. 16810. 60