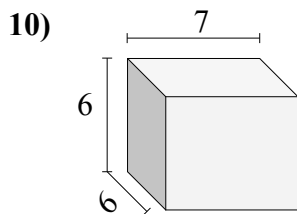
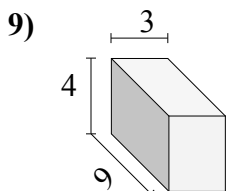
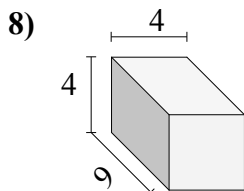
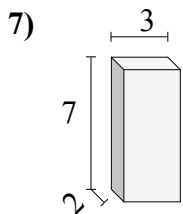
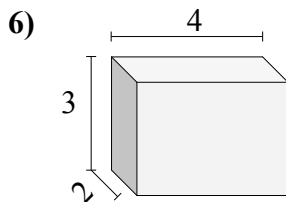
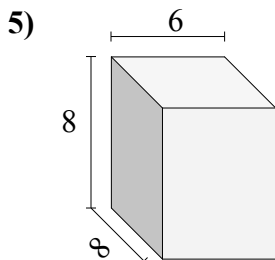
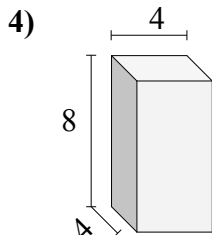
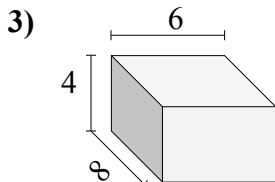
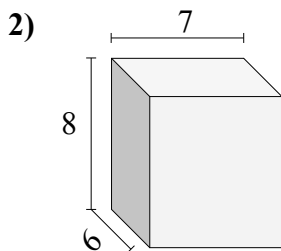
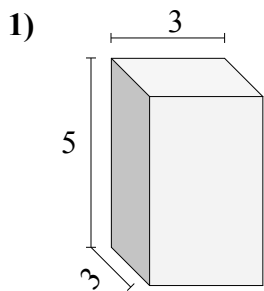




Найдите объем каждого прямоугольного параллелепипеда.

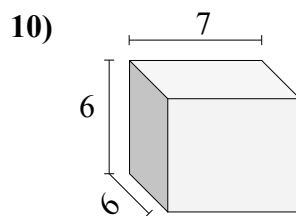
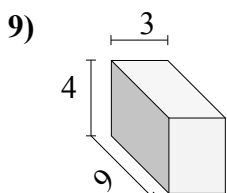
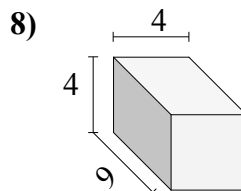
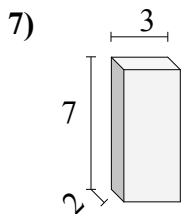
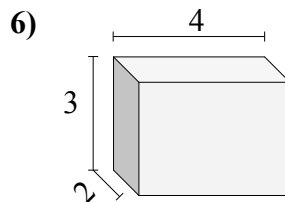
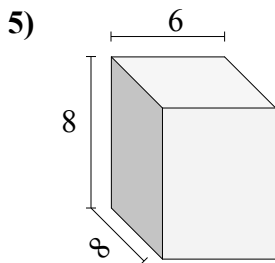
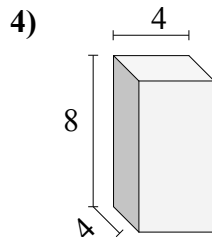
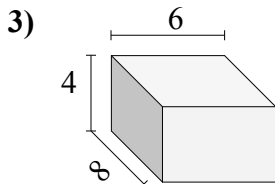
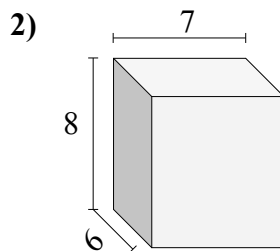
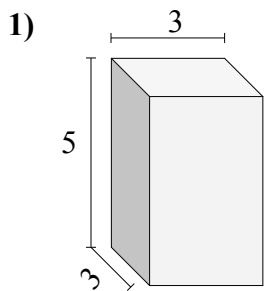


Ответы

- 1. _____
- 2. _____
- 3. _____
- 4. _____
- 5. _____
- 6. _____
- 7. _____
- 8. _____
- 9. _____
- 10. _____



Найдите объем каждого прямоугольного параллелепипеда.

**Ответы**1. 452. 3363. 1924. 1285. 3846. 247. 428. 1449. 10810. 252