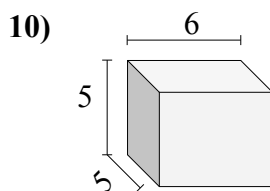
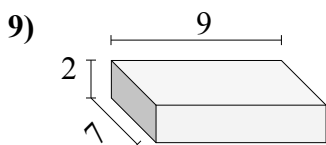
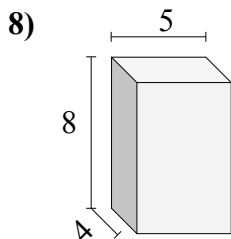
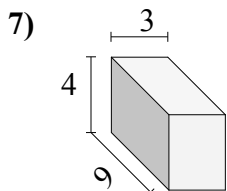
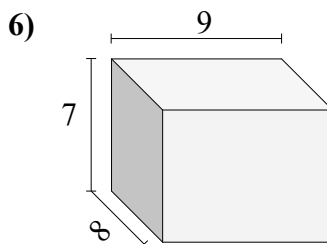
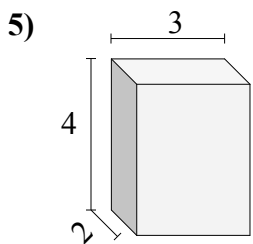
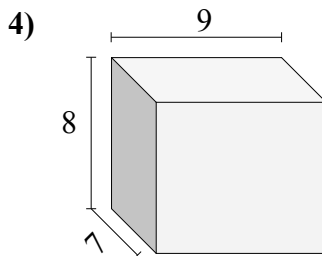
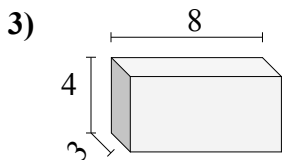
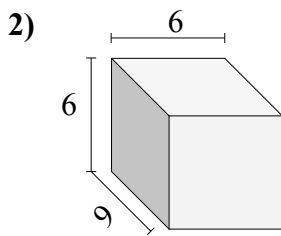
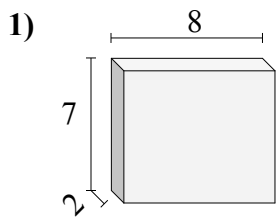




Найдите объем каждого прямоугольного параллелепипеда.

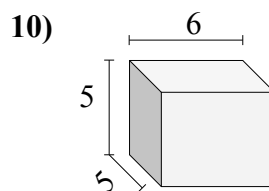
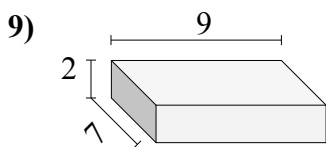
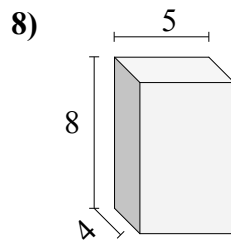
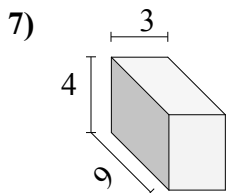
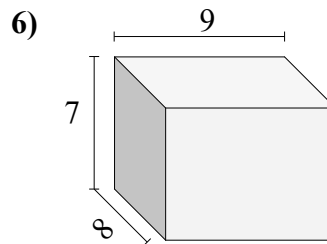
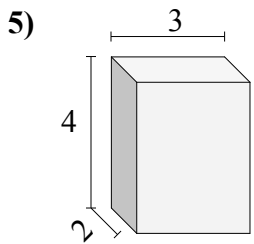
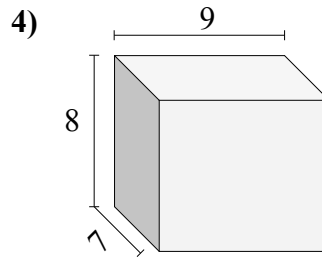
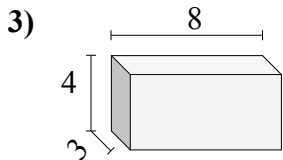
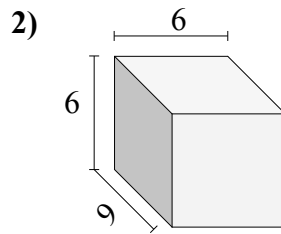
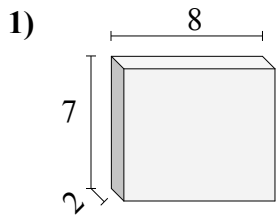


Ответы

- 1. _____
- 2. _____
- 3. _____
- 4. _____
- 5. _____
- 6. _____
- 7. _____
- 8. _____
- 9. _____
- 10. _____



Найдите объем каждого прямоугольного параллелепипеда.

**Ответы**

1. 112
2. 324
3. 96
4. 504
5. 24
6. 504
7. 108
8. 160
9. 126
10. 150