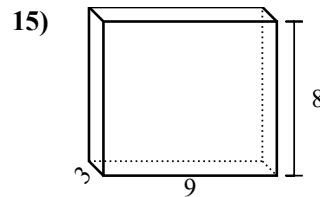
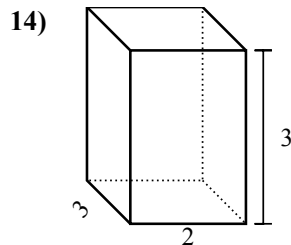
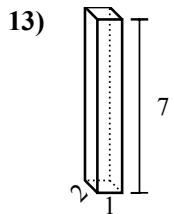
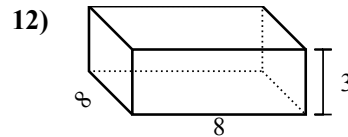
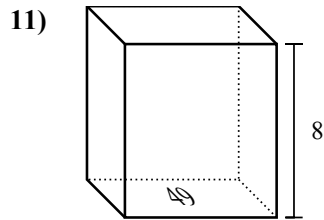
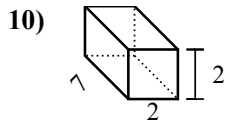
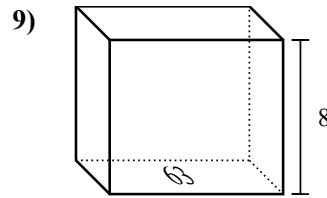
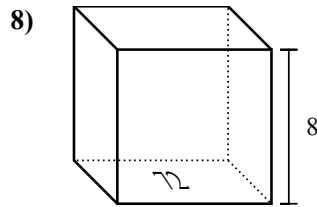
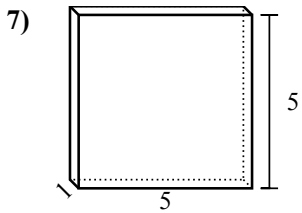
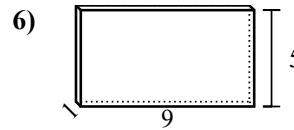
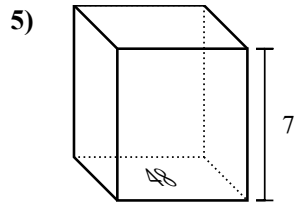
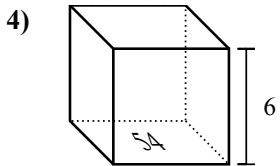
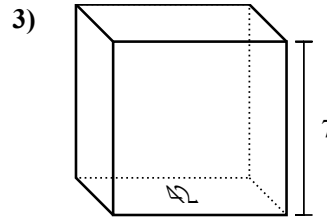
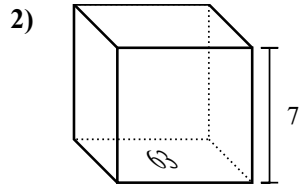
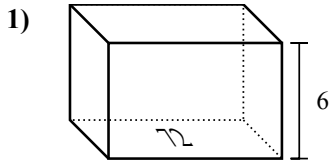


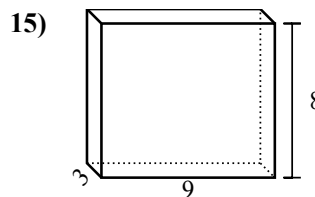
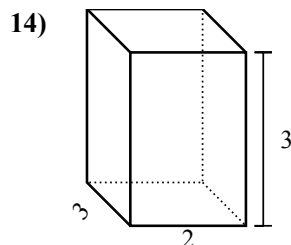
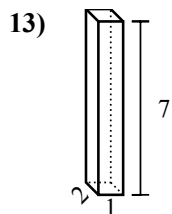
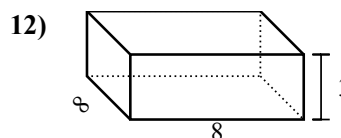
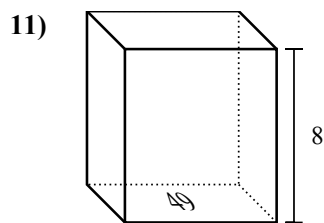
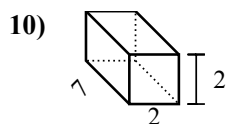
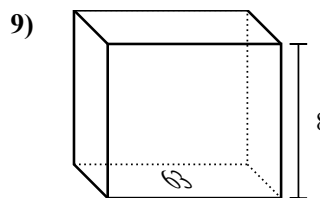
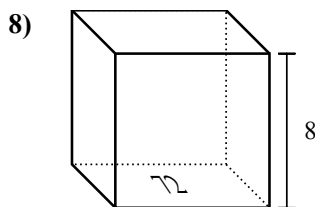
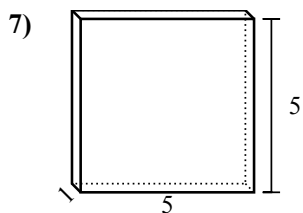
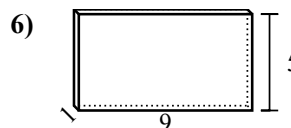
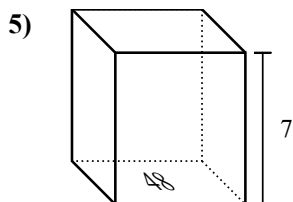
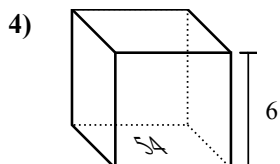
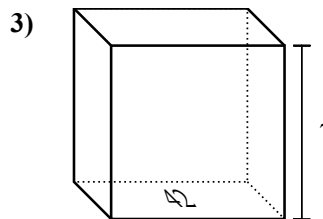
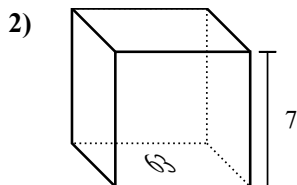
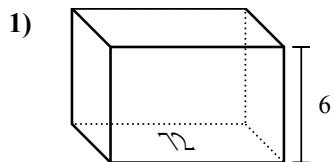


Найдите объем каждой фигуры. Помните, что $V=BH$ и $V=L \times W \times H$

Ответы



1. _____
2. _____
3. _____
4. _____
5. _____
6. _____
7. _____
8. _____
9. _____
10. _____
11. _____
12. _____
13. _____
14. _____
15. _____

Найдите объем каждой фигуры. Помните, что $V=BH$ и $V=L \times W \times H$ **ОТВЕТЫ**1. 432 cm³2. 441 cm³3. 294 cm³4. 324 cm³5. 336 cm³6. 45 cm³7. 25 cm³8. 576 cm³9. 504 cm³10. 28 cm³11. 392 cm³12. 192 cm³13. 14 cm³14. 18 cm³15. 216 cm³