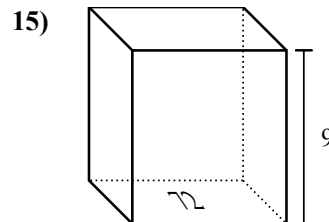
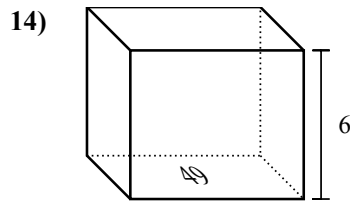
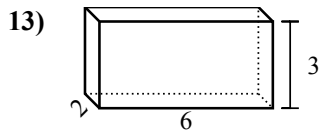
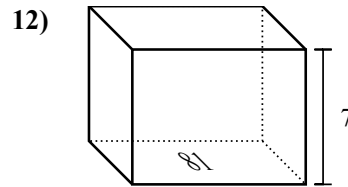
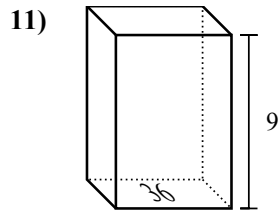
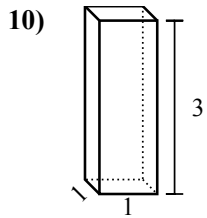
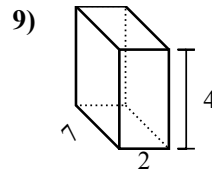
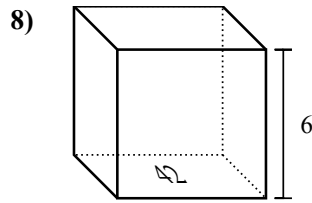
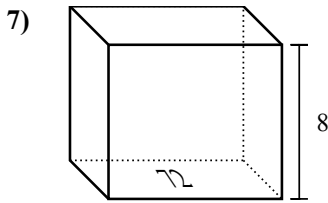
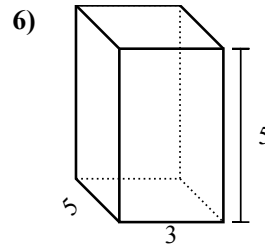
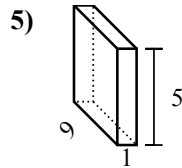
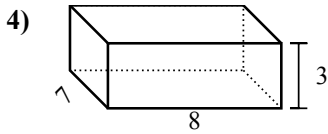
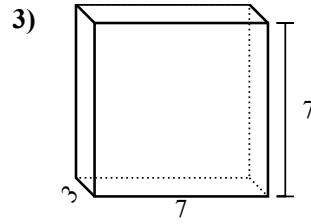
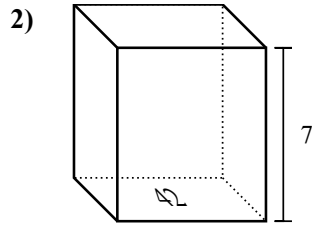
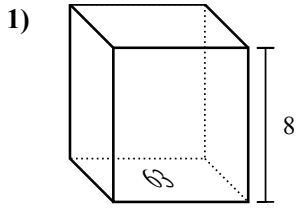


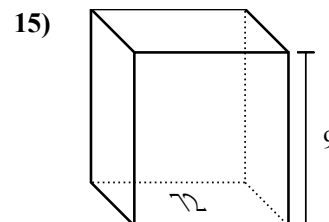
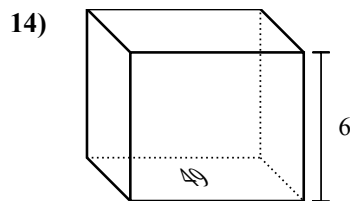
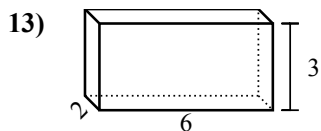
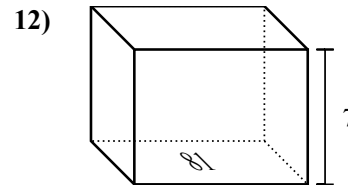
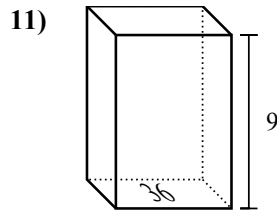
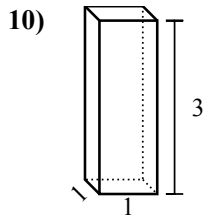
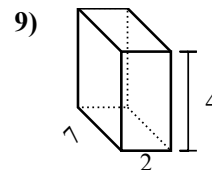
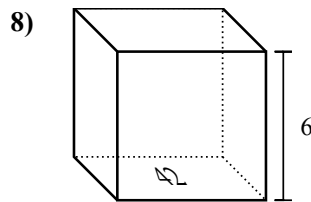
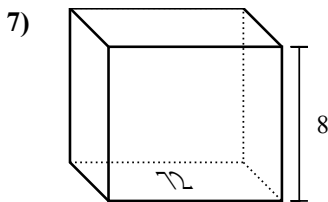
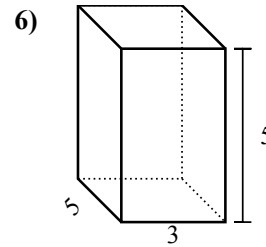
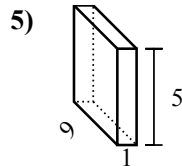
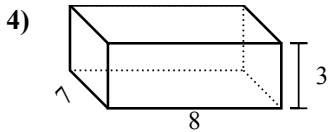
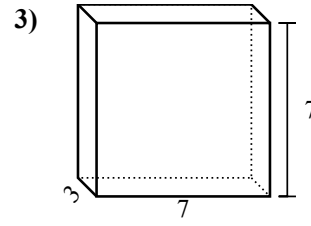
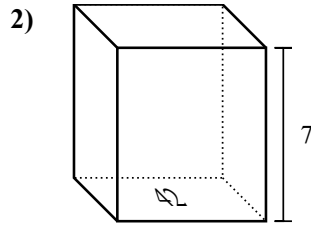
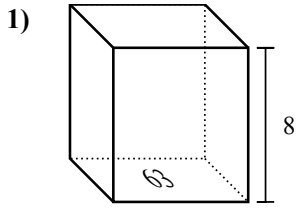


Найдите объем каждой фигуры. Помните, что $V=BH$ и $V=L \times W \times H$

Отвeты



1. _____
2. _____
3. _____
4. _____
5. _____
6. _____
7. _____
8. _____
9. _____
10. _____
11. _____
12. _____
13. _____
14. _____
15. _____

Найдите объем каждой фигуры. Помните, что $V=BH$ и $V=L \times W \times H$ **ОТВЕТЫ**1. **504 cm³**2. **294 cm³**3. **147 cm³**4. **168 cm³**5. **45 cm³**6. **75 cm³**7. **576 cm³**8. **252 cm³**9. **56 cm³**10. **3 cm³**11. **324 cm³**12. **567 cm³**13. **36 cm³**14. **294 cm³**15. **648 cm³**