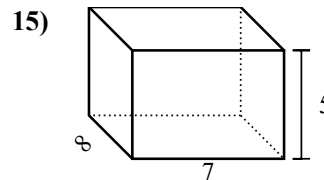
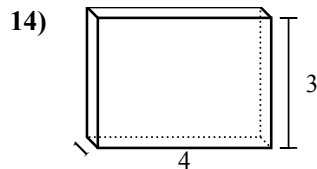
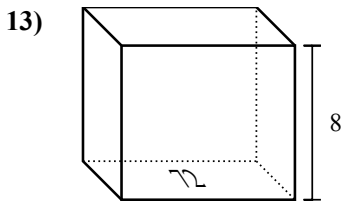
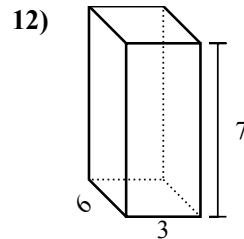
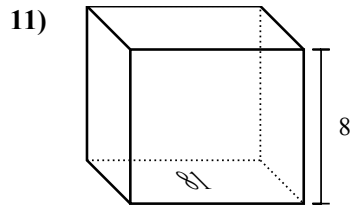
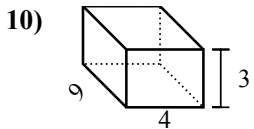
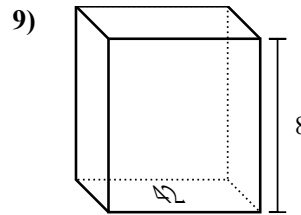
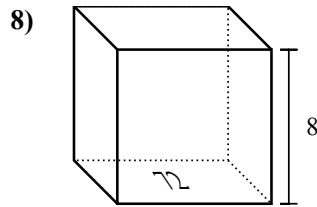
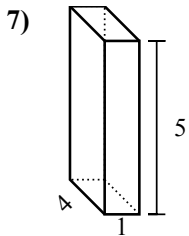
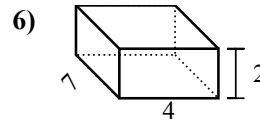
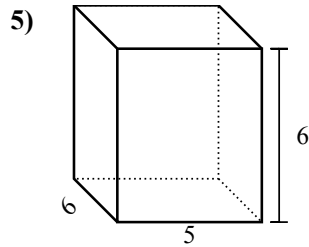
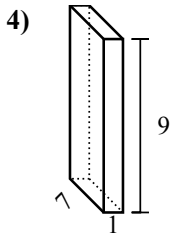
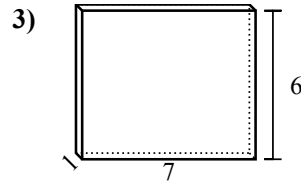
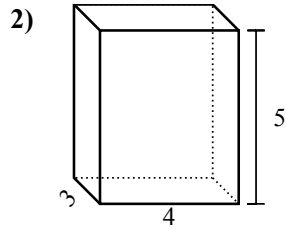
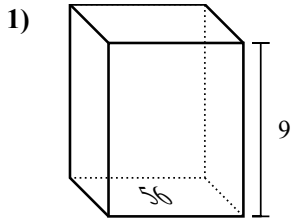




Найдите объем каждой фигуры. Помните, что $V=BH$ и $V=L \times W \times H$

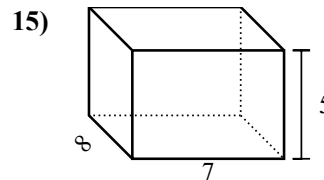
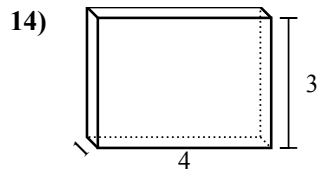
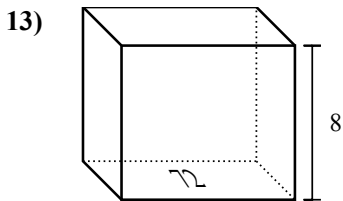
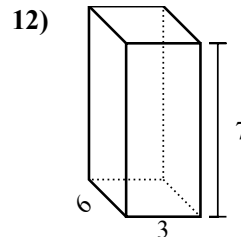
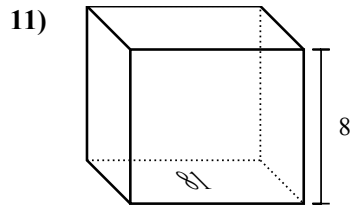
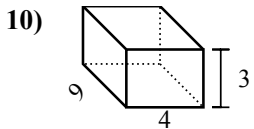
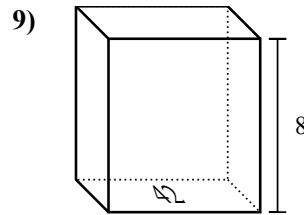
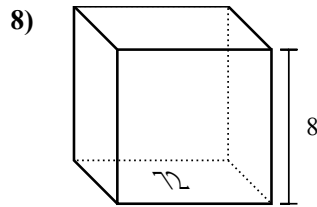
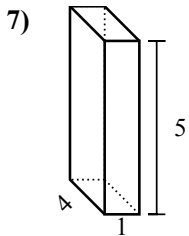
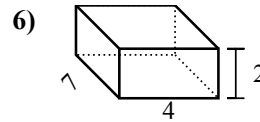
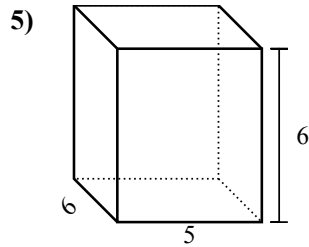
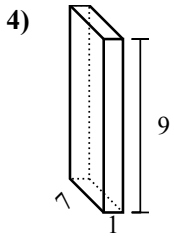
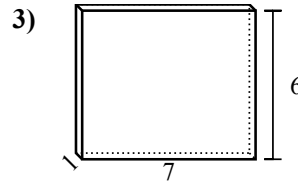
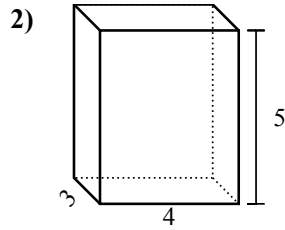
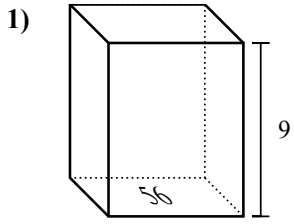
Отвeты



1. _____
2. _____
3. _____
4. _____
5. _____
6. _____
7. _____
8. _____
9. _____
10. _____
11. _____
12. _____
13. _____
14. _____
15. _____



Найдите объем каждой фигуры. Помните, что $V=BH$ и $V=L \times W \times H$



ОТВЕТЫ

1. 504 cm³
2. 60 cm³
3. 42 cm³
4. 63 cm³
5. 180 cm³
6. 56 cm³
7. 20 cm³
8. 576 cm³
9. 336 cm³
10. 108 cm³
11. 648 cm³
12. 126 cm³
13. 576 cm³
14. 12 cm³
15. 280 cm³