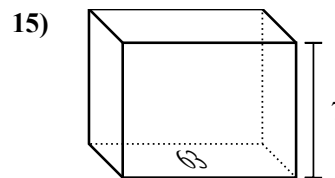
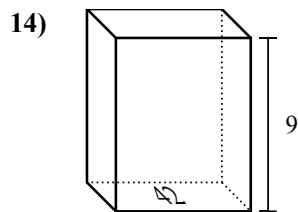
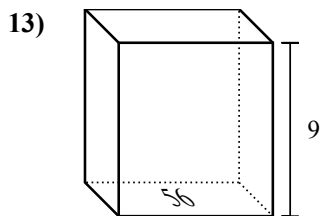
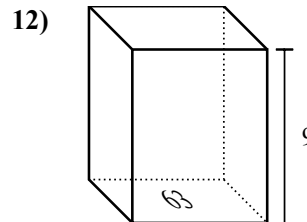
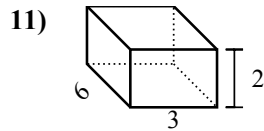
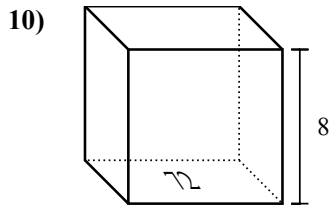
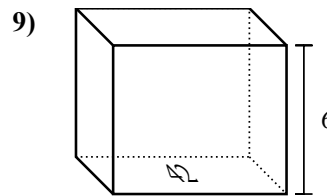
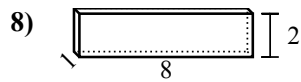
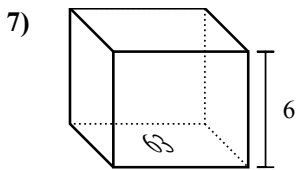
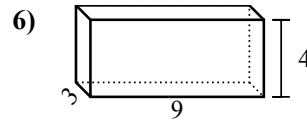
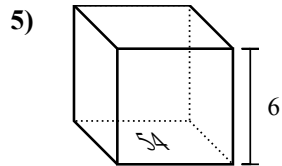
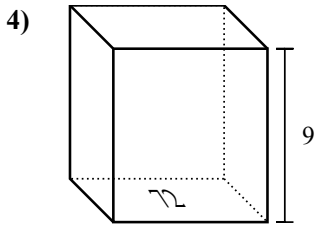
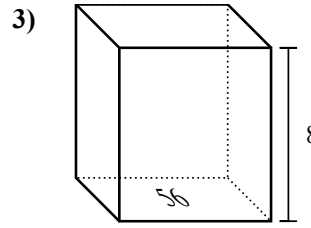
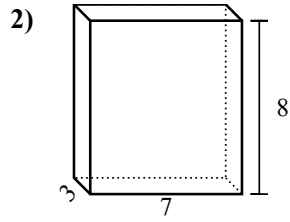
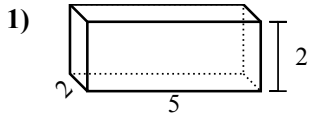


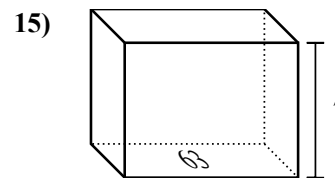
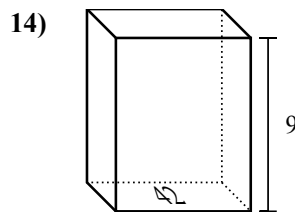
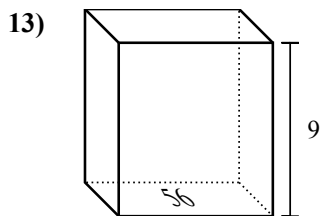
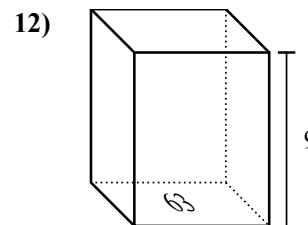
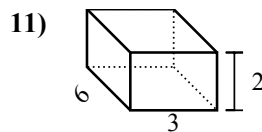
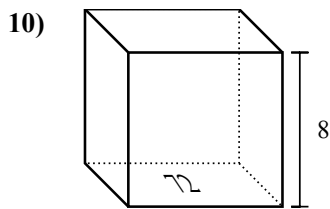
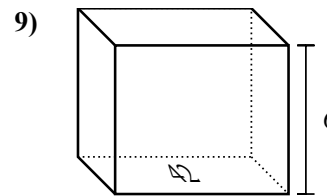
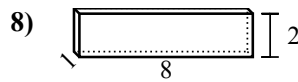
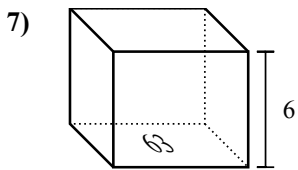
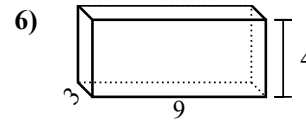
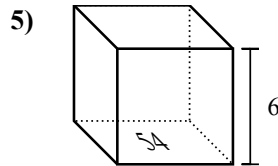
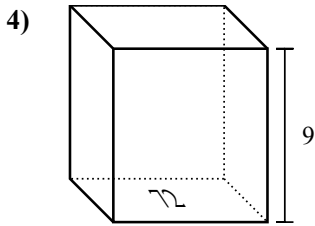
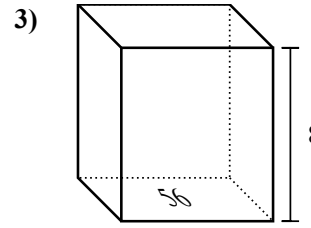
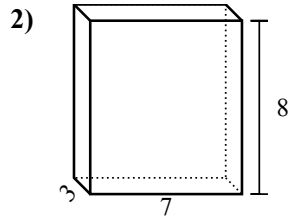
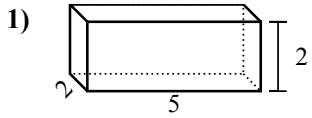


Найдите объем каждой фигуры. Помните, что $V=BH$ и $V=L \times W \times H$



Ответы

1. _____
2. _____
3. _____
4. _____
5. _____
6. _____
7. _____
8. _____
9. _____
10. _____
11. _____
12. _____
13. _____
14. _____
15. _____

Найдите объем каждой фигуры. Помните, что $V=BH$ и $V=L \times W \times H$ **ОТВЕТЫ**1. 20 cm³2. 168 cm³3. 448 cm³4. 648 cm³5. 324 cm³6. 108 cm³7. 378 cm³8. 16 cm³9. 252 cm³10. 576 cm³11. 36 cm³12. 567 cm³13. 504 cm³14. 378 cm³15. 441 cm³