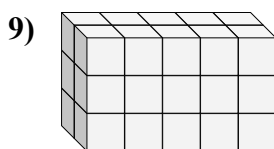
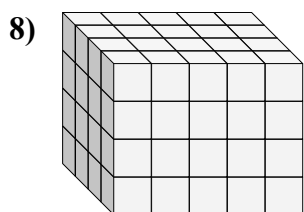
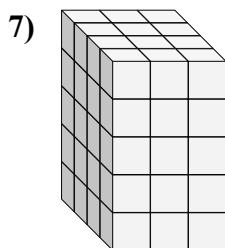
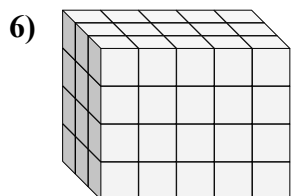
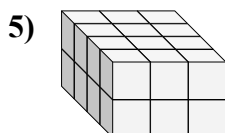
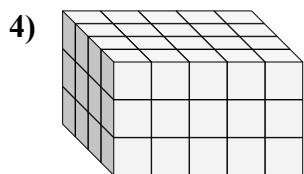
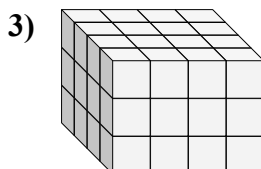
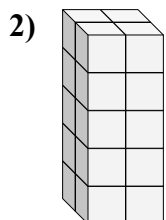
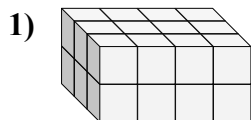
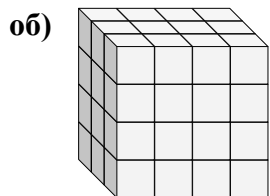




Определите все при измерения параллелепипеда. Затем найдите объем.



ОТВЕТЫ

об. 3 4 4 48

1. _____

2. _____

3. _____

4. _____

5. _____

6. _____

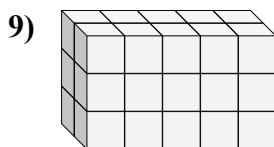
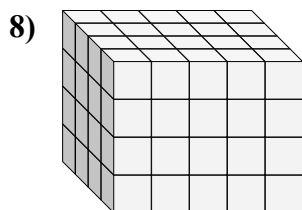
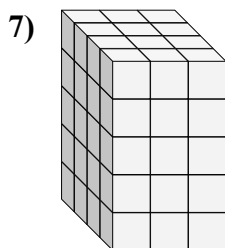
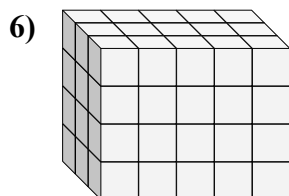
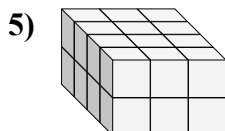
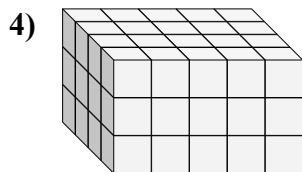
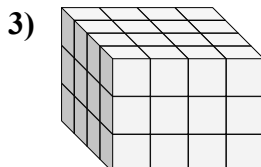
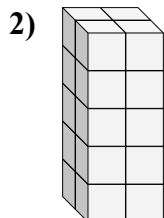
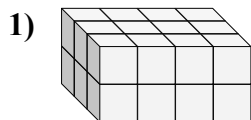
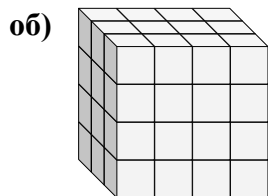
7. _____

8. _____

9. _____



Определите все при измерения параллелепипеда. Затем найдите объем.



ОТВЕТЫ

об.	<u>3</u>	<u>4</u>	<u>4</u>	<u>48</u>
1.	<u>3</u>	<u>4</u>	<u>2</u>	<u>24</u>
2.	<u>2</u>	<u>2</u>	<u>5</u>	<u>20</u>
3.	<u>4</u>	<u>4</u>	<u>3</u>	<u>48</u>
4.	<u>4</u>	<u>5</u>	<u>3</u>	<u>60</u>
5.	<u>4</u>	<u>3</u>	<u>2</u>	<u>24</u>
6.	<u>3</u>	<u>5</u>	<u>4</u>	<u>60</u>
7.	<u>4</u>	<u>3</u>	<u>5</u>	<u>60</u>
8.	<u>4</u>	<u>5</u>	<u>4</u>	<u>80</u>
9.	<u>2</u>	<u>5</u>	<u>3</u>	<u>30</u>