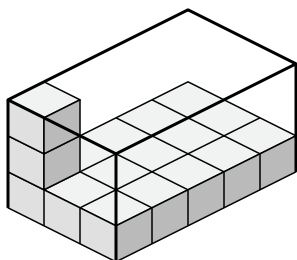




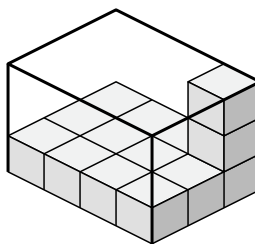
Определите объем каждой коробки. Каждый блок равен 1 кубической единице (и 3).

ОТВЕТЫ

1)



2)



1. _____

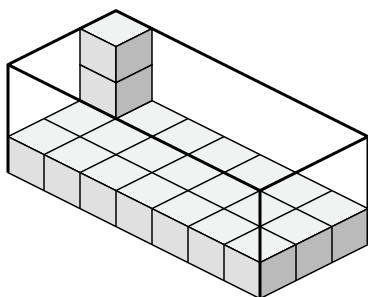
2. _____

3. _____

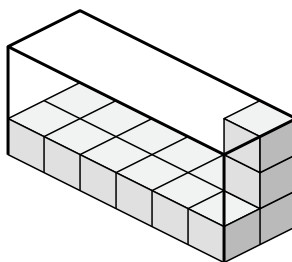
4. _____

5. _____

3)



4)

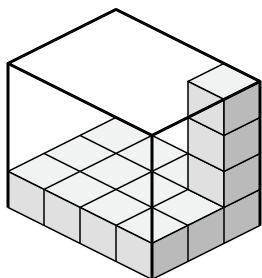


6. _____

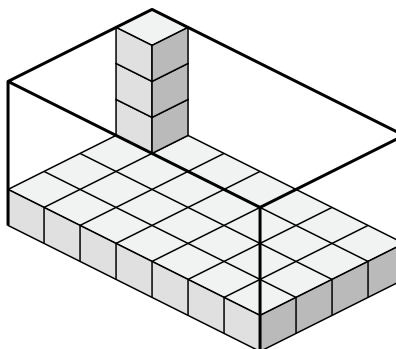
7. _____

8. _____

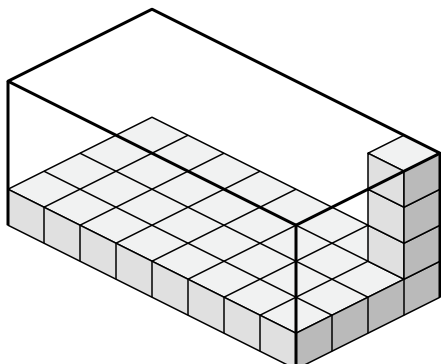
5)



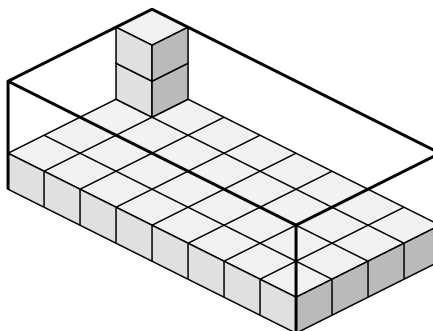
6)



7)



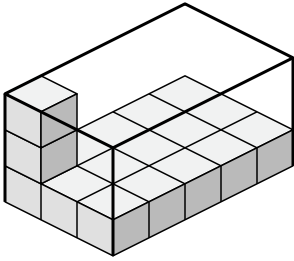
8)



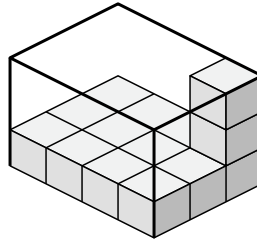


Определите объем каждой коробки. Каждый блок равен 1 кубической единице (u³).

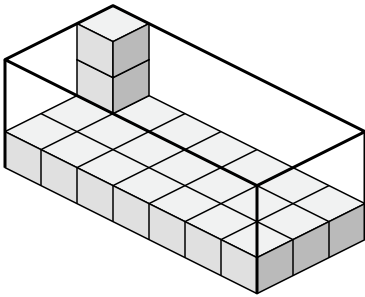
1)



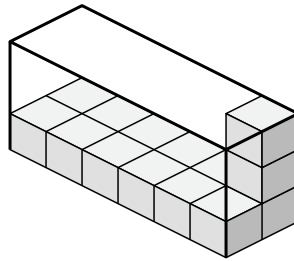
2)



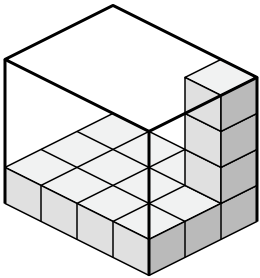
3)



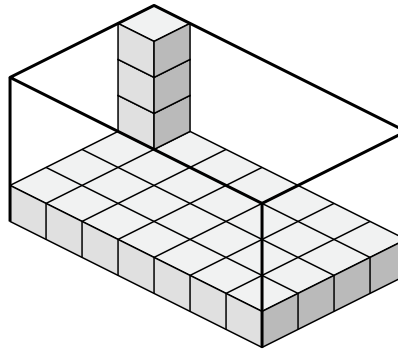
4)



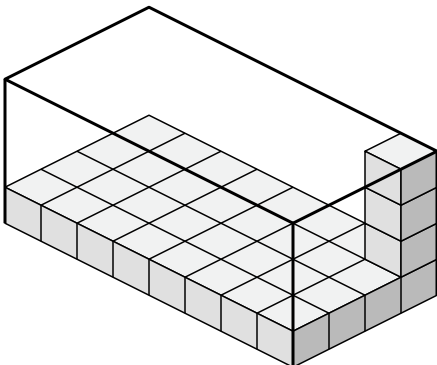
5)



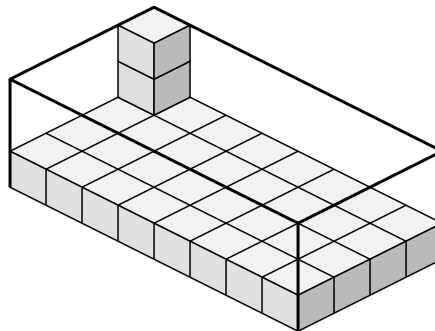
6)



7)



8)



ОТВЕТЫ

1. 45 u³

2. 36 u³

3. 63 u³

4. 36 u³

5. 48 u³

6. 112 u³

7. 128 u³

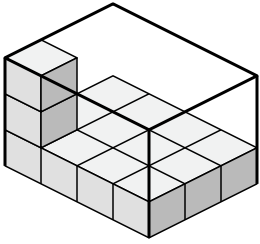
8. 96 u³



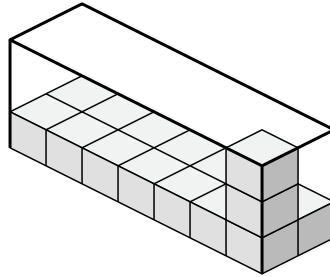
Определите объем каждой коробки. Каждый блок равен 1 кубической единице (и 3).

ОТВЕТЫ

1)



2)



1. _____

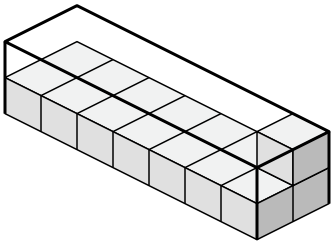
2. _____

3. _____

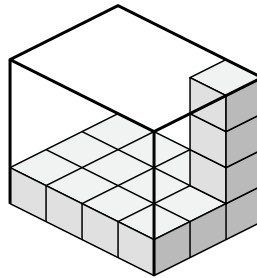
4. _____

5. _____

3)



4)

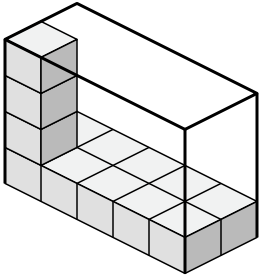


6. _____

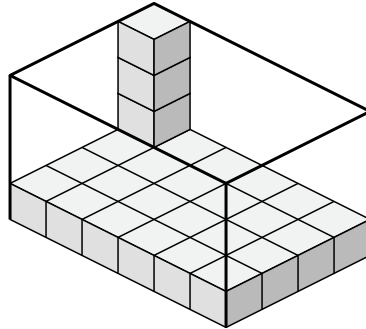
7. _____

8. _____

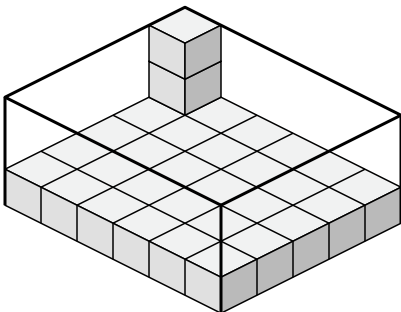
5)



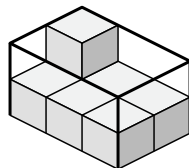
6)



7)



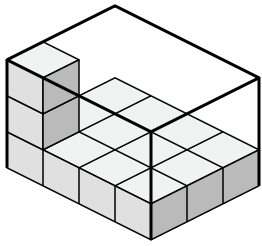
8)



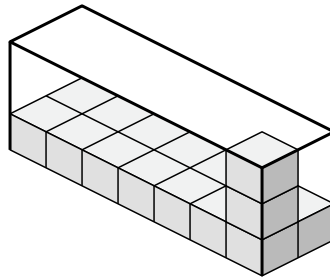


Определите объем каждой коробки. Каждый блок равен 1 кубической единице (u³).

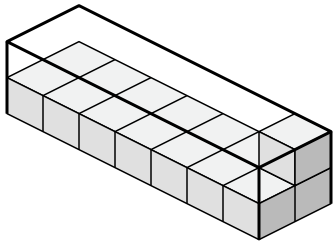
1)



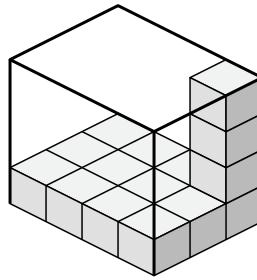
2)



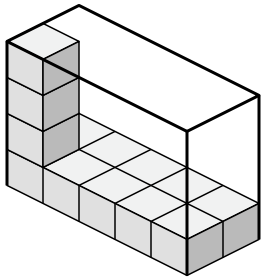
3)



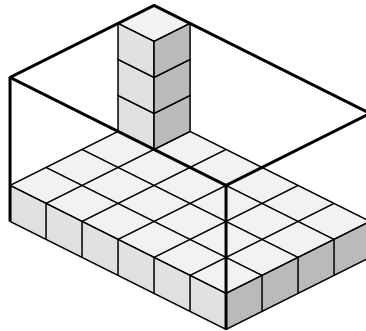
4)



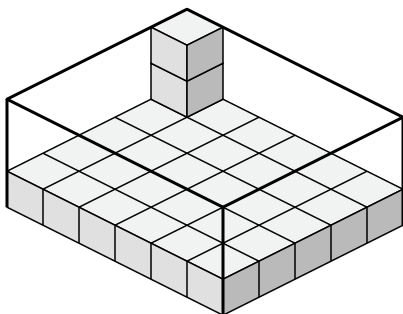
5)



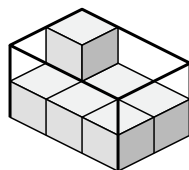
6)



7)



8)



ОТВЕТЫ

1. 36 u³

2. 42 u³

3. 28 u³

4. 48 u³

5. 40 u³

6. 96 u³

7. 90 u³

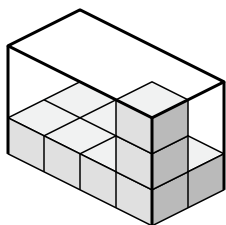
8. 12 u³



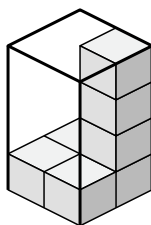
Определите объем каждой коробки. Каждый блок равен 1 кубической единице (и 3).

ОТВЕТЫ

1)



2)



1. _____

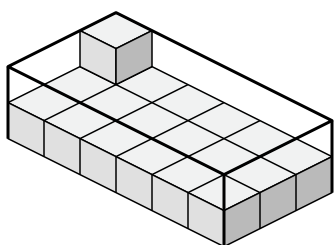
2. _____

3. _____

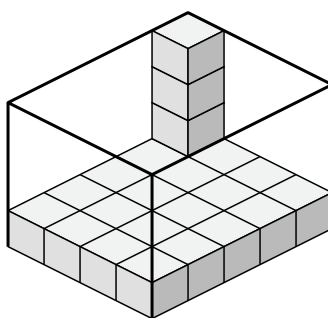
4. _____

5. _____

3)



4)

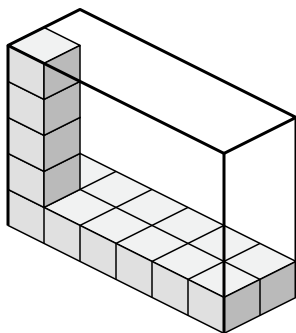


6. _____

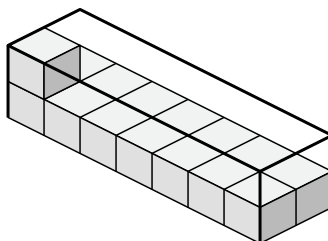
7. _____

8. _____

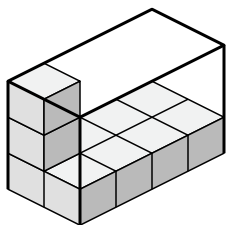
5)



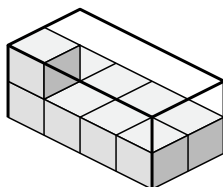
6)



7)

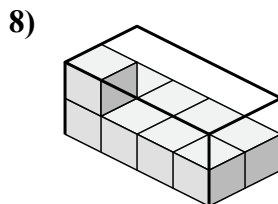
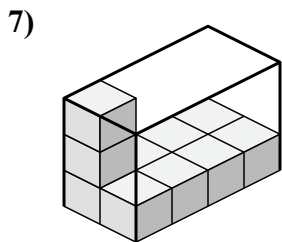
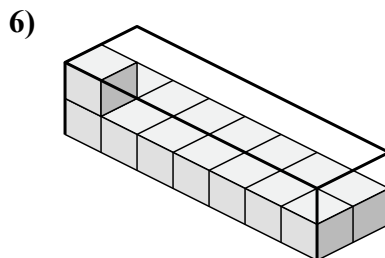
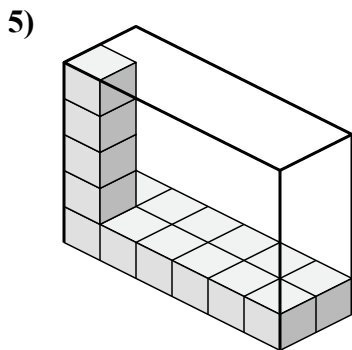
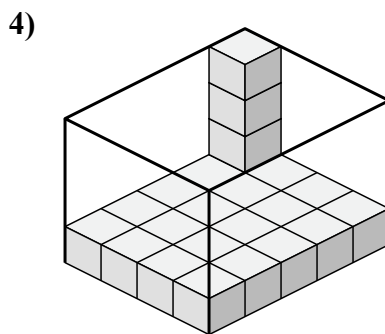
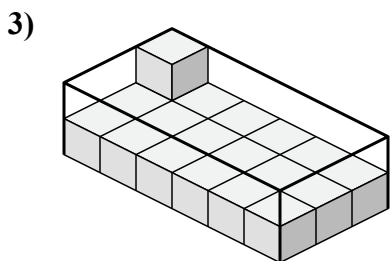
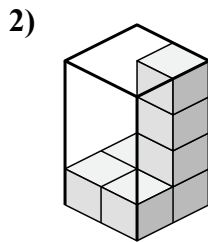
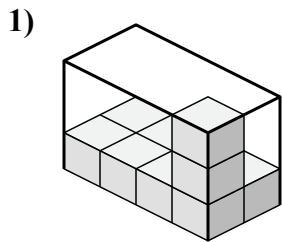


8)





Определите объем каждой коробки. Каждый блок равен 1 кубической единице (u³).



ОТВЕТЫ

1. 24 u³

2. 16 u³

3. 36 u³

4. 80 u³

5. 60 u³

6. 28 u³

7. 24 u³

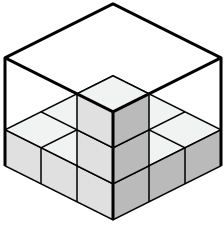
8. 16 u³



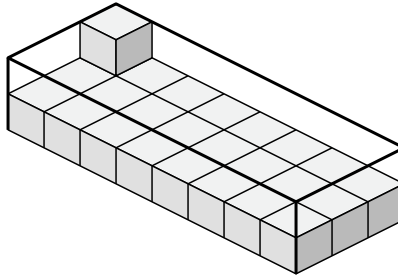
Определите объем каждой коробки. Каждый блок равен 1 кубической единице (и 3).

ОТВЕТЫ

1)



2)



1. _____

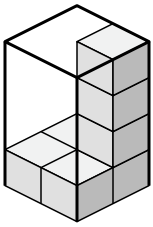
2. _____

3. _____

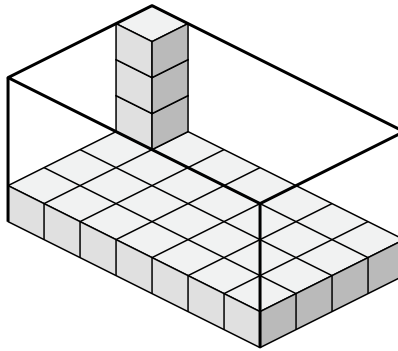
4. _____

5. _____

3)



4)

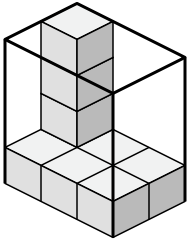


6. _____

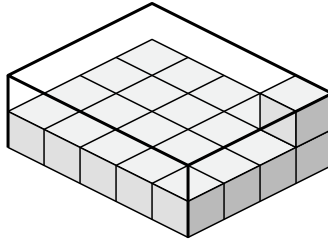
7. _____

8. _____

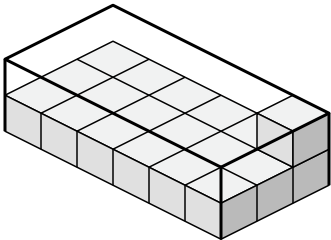
5)



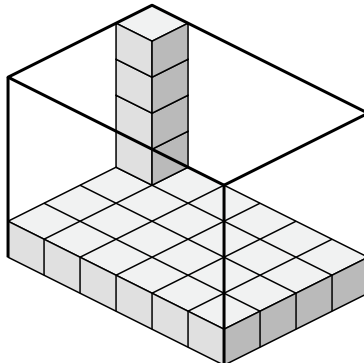
6)



7)



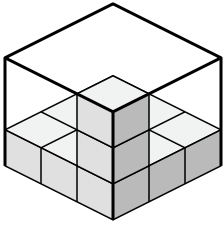
8)



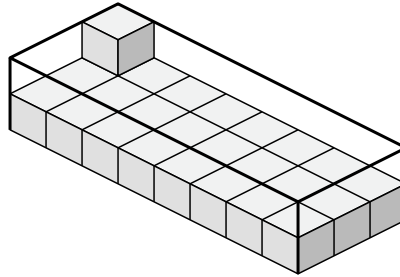


Определите объем каждой коробки. Каждый блок равен 1 кубической единице (u³).

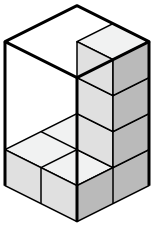
1)



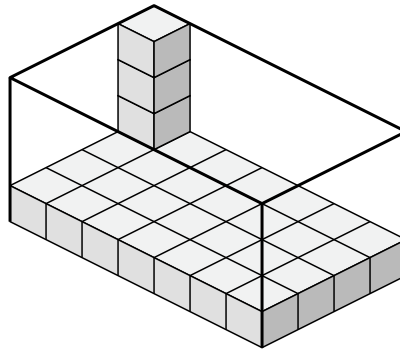
2)



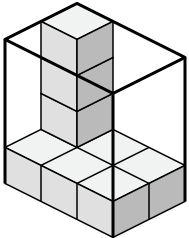
3)



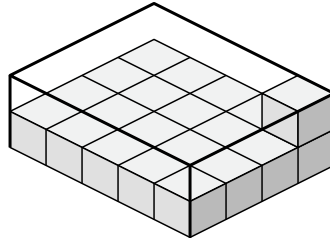
4)



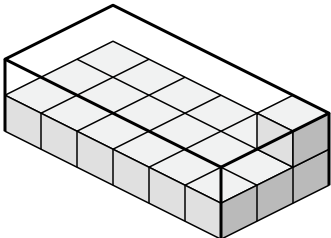
5)



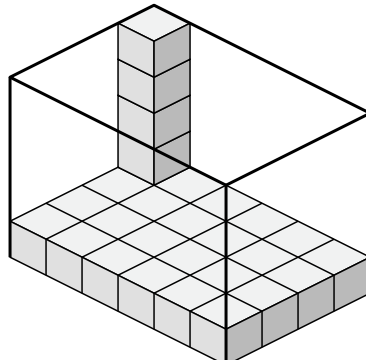
6)



7)



8)



ОТВЕТЫ

1. 27 u³

2. 48 u³

3. 16 u³

4. 112 u³

5. 24 u³

6. 40 u³

7. 36 u³

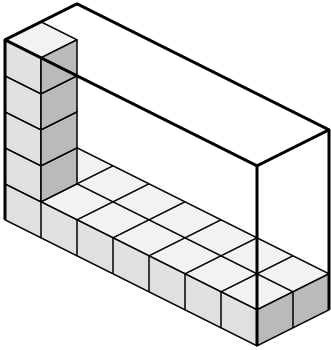
8. 120 u³



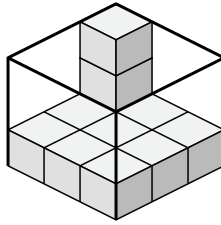
Определите объем каждой коробки. Каждый блок равен 1 кубической единице (и 3).

ОТВЕТЫ

1)



2)



1. _____

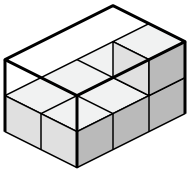
2. _____

3. _____

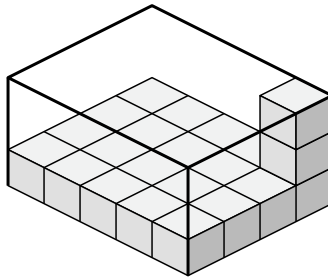
4. _____

5. _____

3)



4)

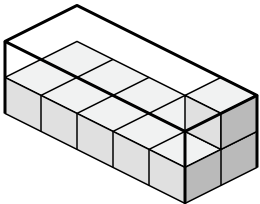


6. _____

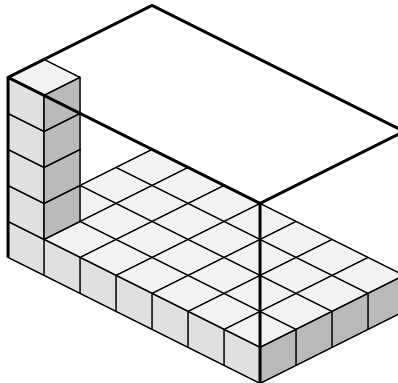
7. _____

8. _____

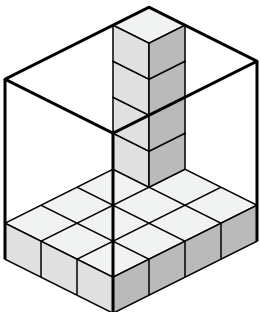
5)



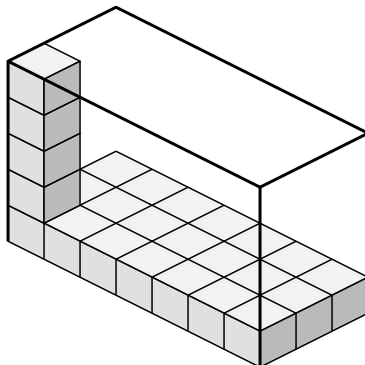
6)



7)



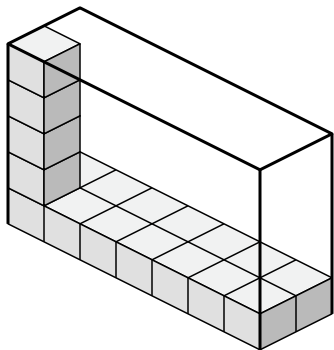
8)



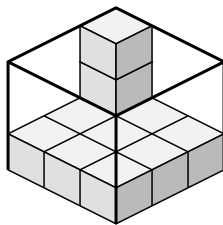


Определите объем каждой коробки. Каждый блок равен 1 кубической единице (u³).

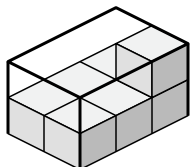
1)



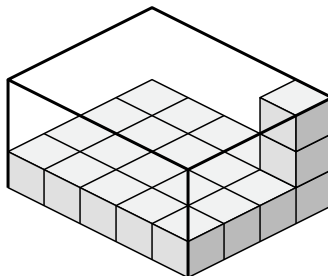
2)



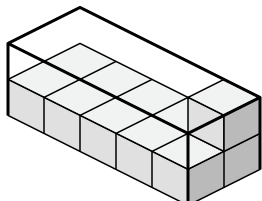
3)



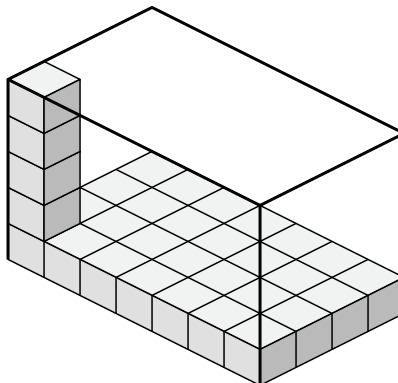
4)



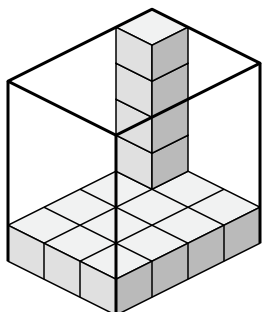
5)



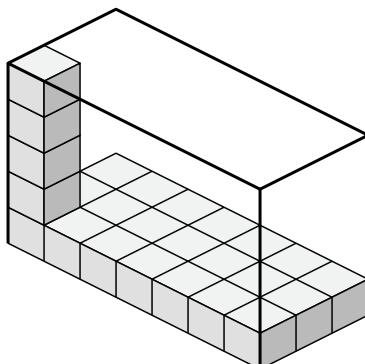
6)



7)



8)



ОТВЕТЫ

1. 70 u³

2. 27 u³

3. 12 u³

4. 60 u³

5. 20 u³

6. 140 u³

7. 60 u³

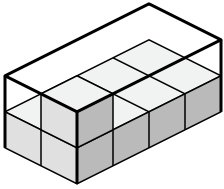
8. 105 u³



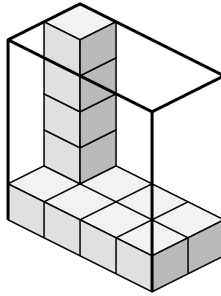
Определите объем каждой коробки. Каждый блок равен 1 кубической единице (и 3).

ОТВЕТЫ

1)



2)



1. _____

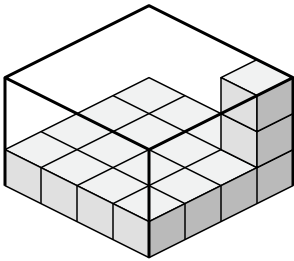
2. _____

3. _____

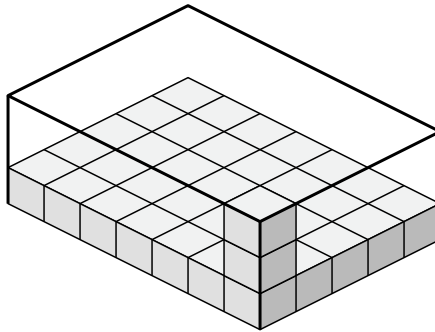
4. _____

5. _____

3)



4)

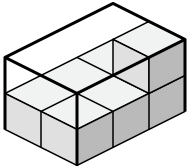


6. _____

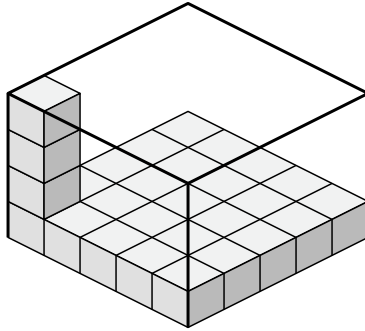
7. _____

8. _____

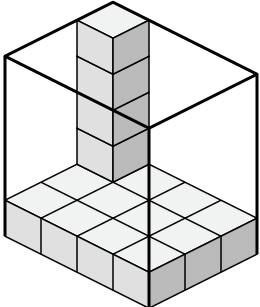
5)



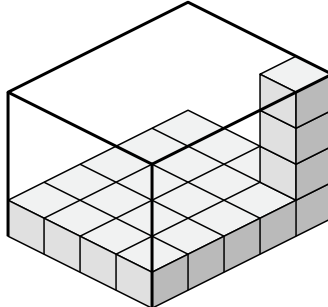
6)



7)



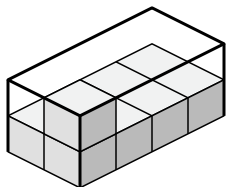
8)



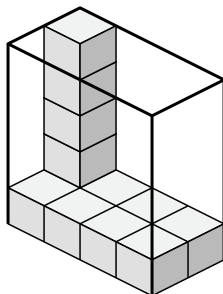


Определите объем каждой коробки. Каждый блок равен 1 кубической единице (u³).

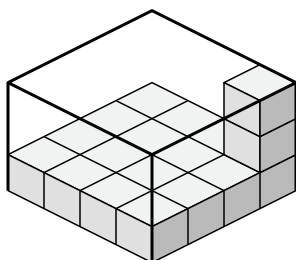
1)



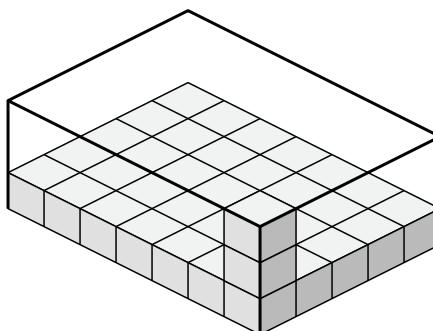
2)



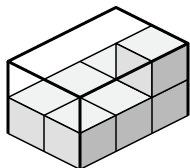
3)



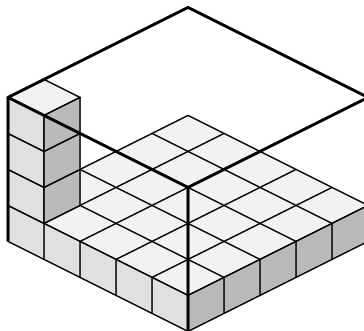
4)



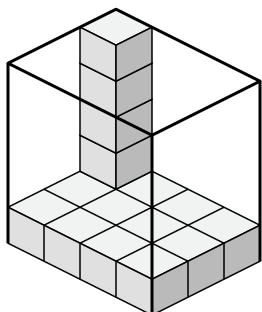
5)



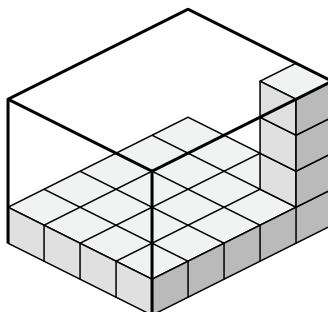
6)



7)



8)



ОТВЕТЫ

1. 16 u³

2. 40 u³

3. 48 u³

4. 105 u³

5. 12 u³

6. 100 u³

7. 60 u³

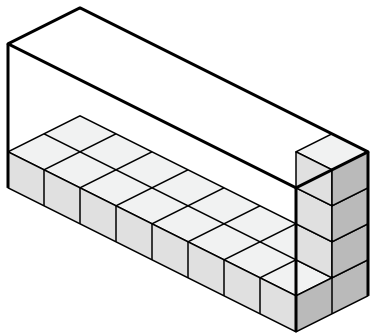
8. 80 u³



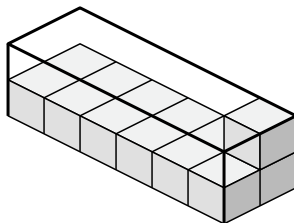
Определите объем каждой коробки. Каждый блок равен 1 кубической единице (и 3).

ОТВЕТЫ

1)



2)



1. _____

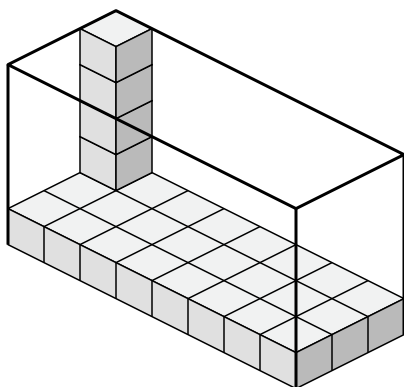
2. _____

3. _____

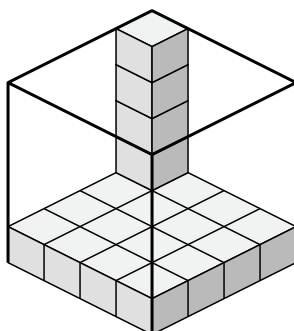
4. _____

5. _____

3)



4)

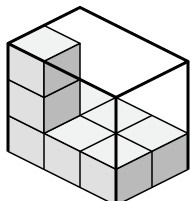


6. _____

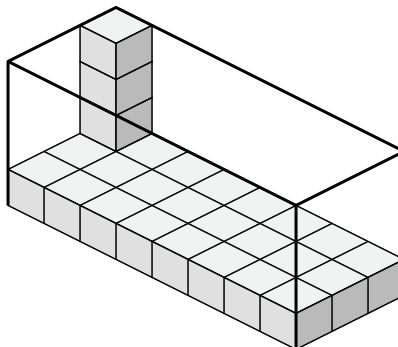
7. _____

8. _____

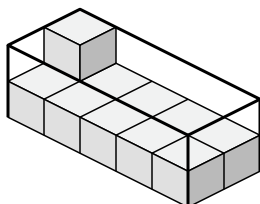
5)



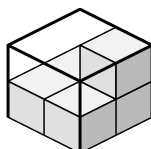
6)



7)



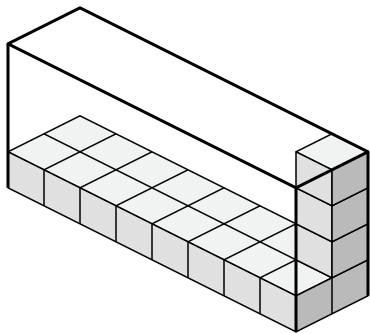
8)



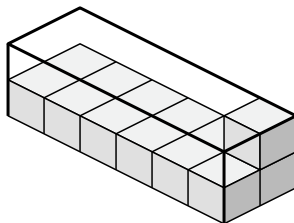


Определите объем каждой коробки. Каждый блок равен 1 кубической единице (u³).

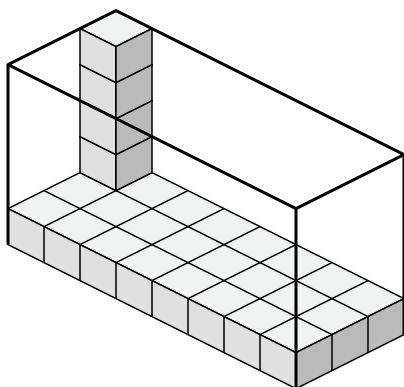
1)



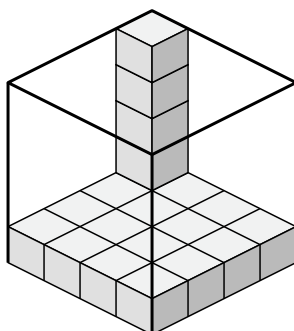
2)



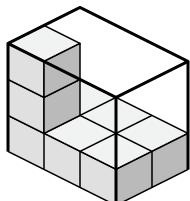
3)



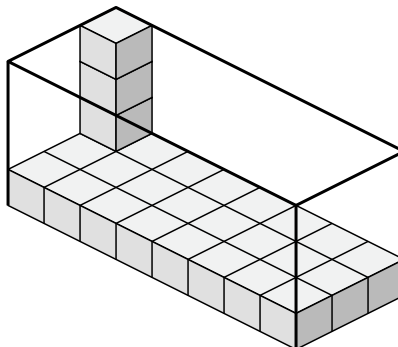
4)



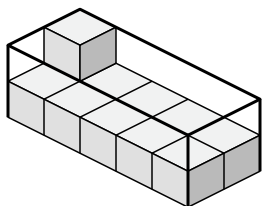
5)



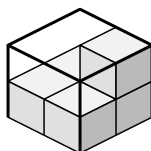
6)



7)



8)



ОТВЕТЫ

1. 64 u³

2. 24 u³

3. 120 u³

4. 80 u³

5. 18 u³

6. 96 u³

7. 20 u³

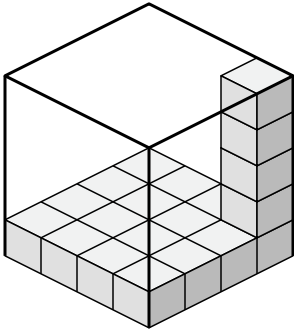
8. 8 u³



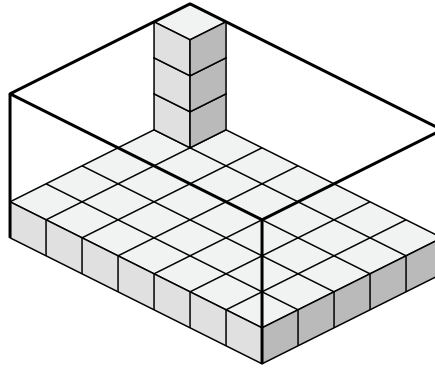
Определите объем каждой коробки. Каждый блок равен 1 кубической единице (и 3).

ОТВЕТЫ

1)



2)



1. _____

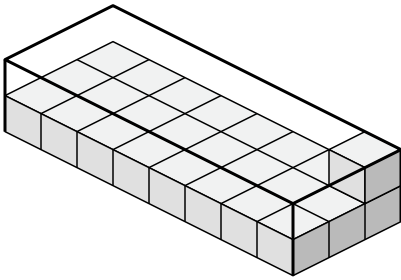
2. _____

3. _____

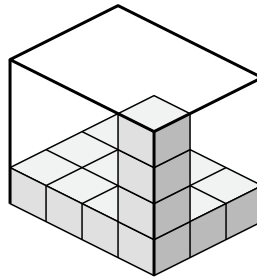
4. _____

5. _____

3)



4)

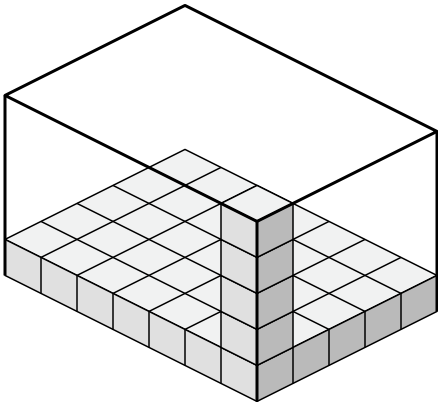


6. _____

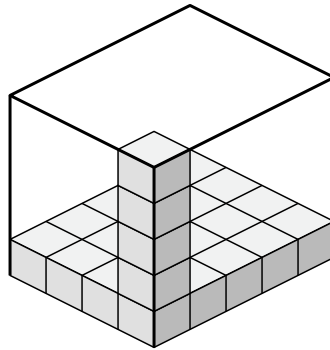
7. _____

8. _____

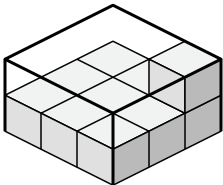
5)



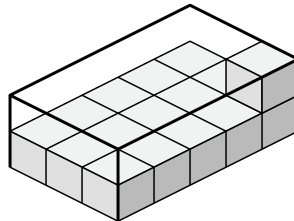
6)



7)



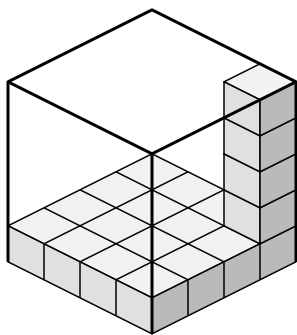
8)



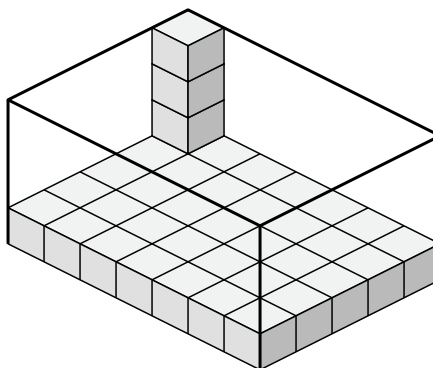


Определите объем каждой коробки. Каждый блок равен 1 кубической единице (u³).

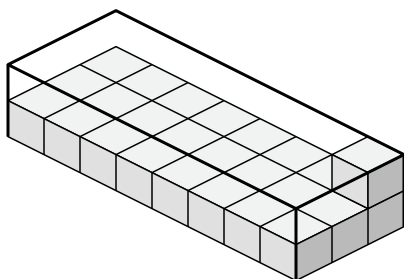
1)



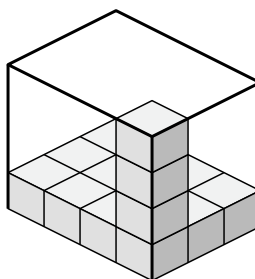
2)



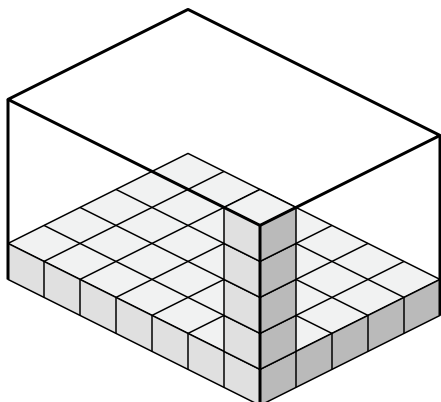
3)



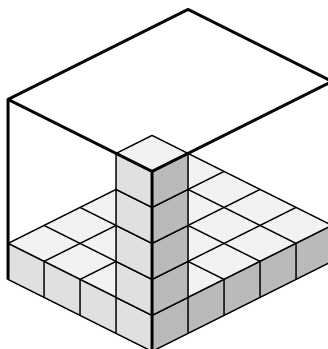
4)



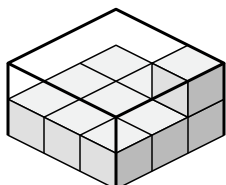
5)



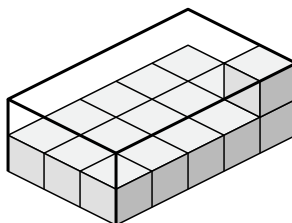
6)



7)



8)



ОТВЕТЫ

1. 80 u³

2. 140 u³

3. 48 u³

4. 48 u³

5. 175 u³

6. 100 u³

7. 18 u³

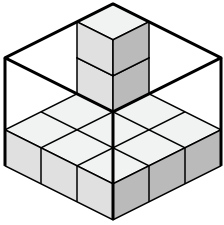
8. 30 u³



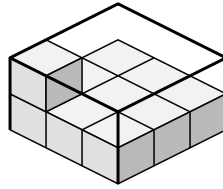
Определите объем каждой коробки. Каждый блок равен 1 кубической единице (и 3).

ОТВЕТЫ

1)



2)



1. _____

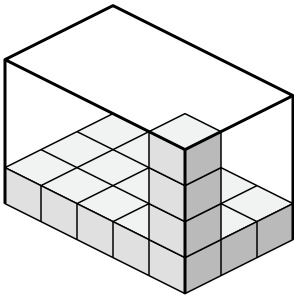
2. _____

3. _____

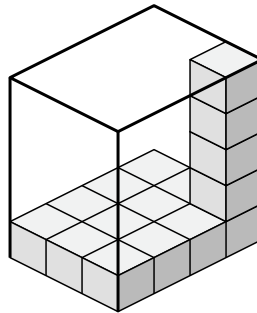
4. _____

5. _____

3)



4)

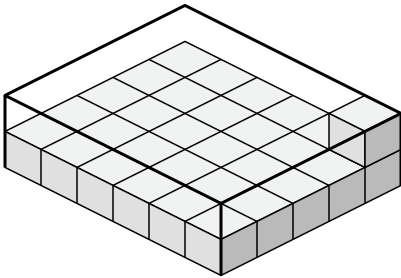


6. _____

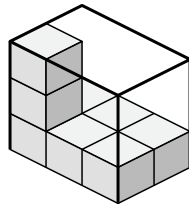
7. _____

8. _____

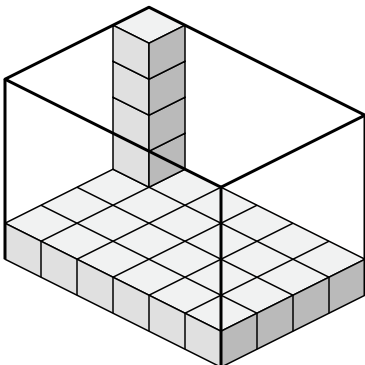
5)



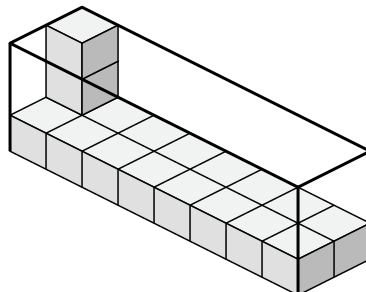
6)



7)



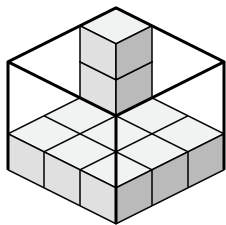
8)



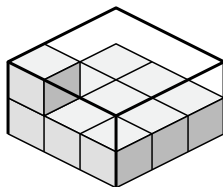


Определите объем каждой коробки. Каждый блок равен 1 кубической единице (u³).

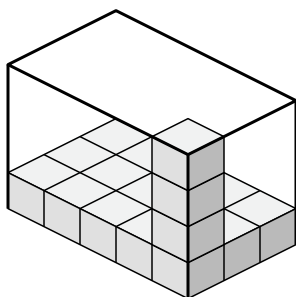
1)



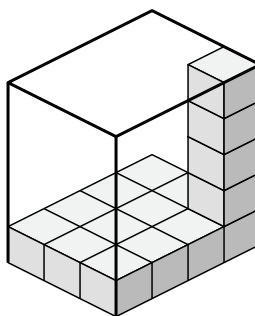
2)



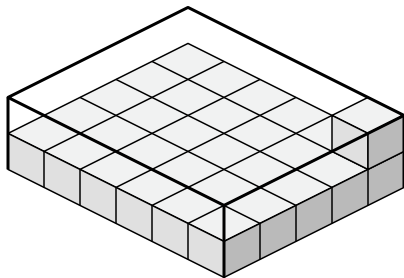
3)



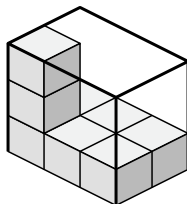
4)



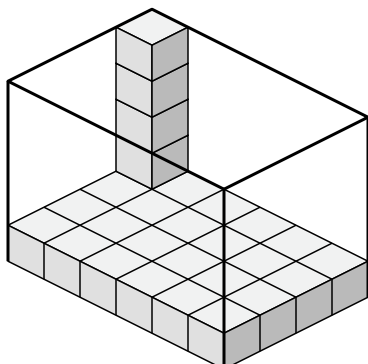
5)



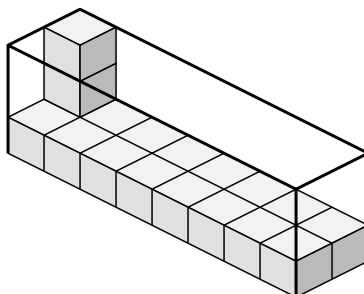
6)



7)



8)



ОТВЕТЫ

1. 27 u³

2. 18 u³

3. 60 u³

4. 60 u³

5. 60 u³

6. 18 u³

7. 120 u³

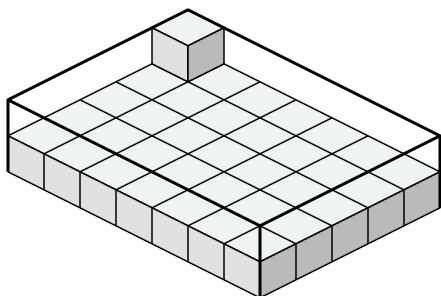
8. 48 u³



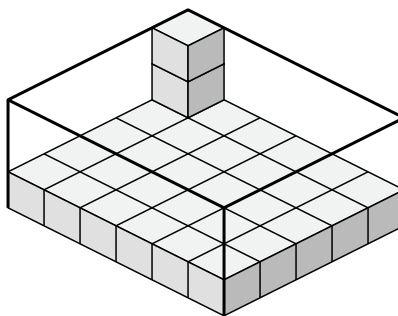
Определите объем каждой коробки. Каждый блок равен 1 кубической единице (и 3).

ОТВЕТЫ

1)



2)



1. _____

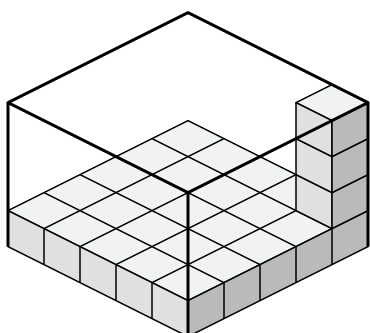
2. _____

3. _____

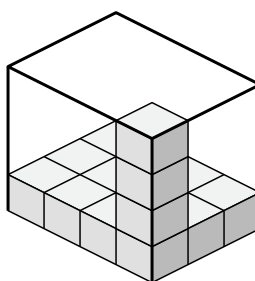
4. _____

5. _____

3)



4)

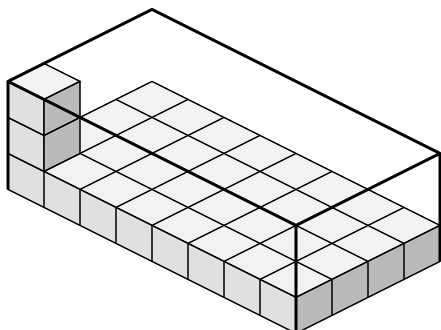


6. _____

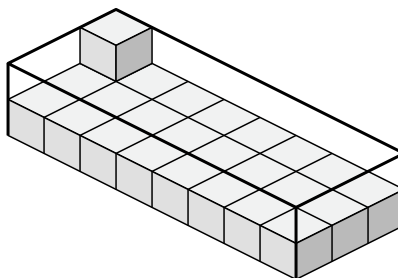
7. _____

8. _____

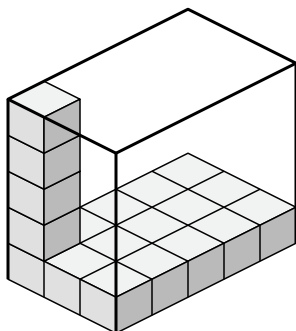
5)



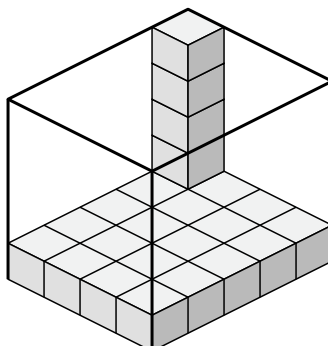
6)



7)



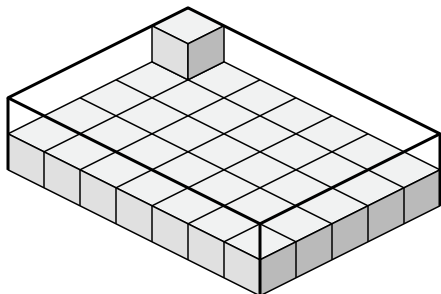
8)



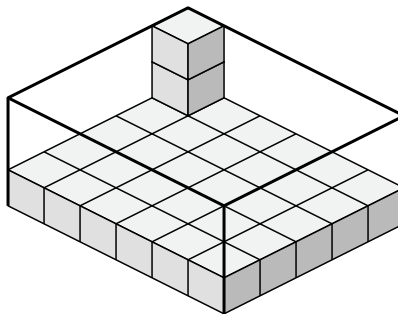


Определите объем каждой коробки. Каждый блок равен 1 кубической единице (u³).

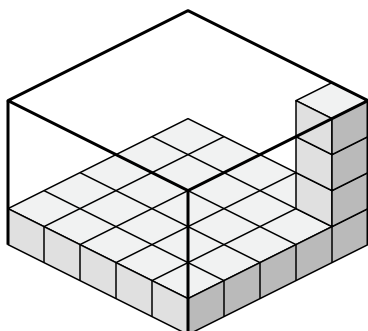
1)



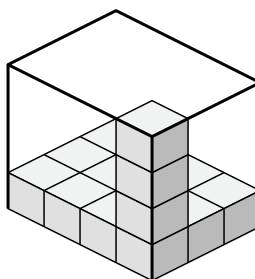
2)



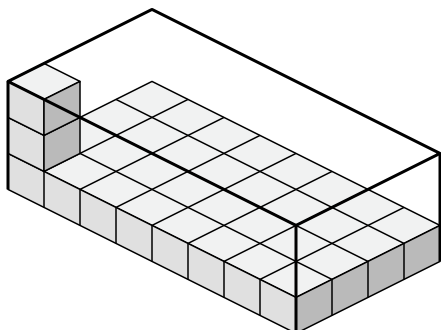
3)



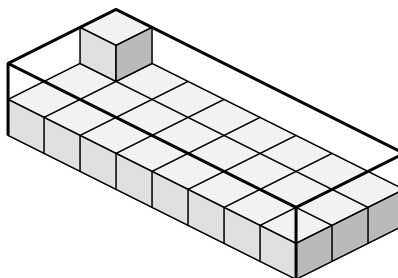
4)



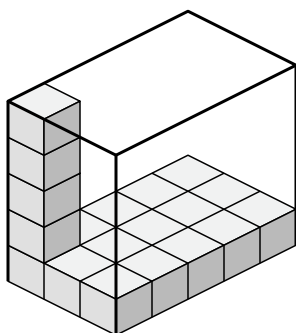
5)



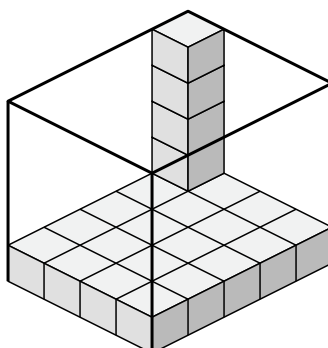
6)



7)



8)



ОТВЕТЫ

1. 70 u³

2. 90 u³

3. 100 u³

4. 48 u³

5. 96 u³

6. 48 u³

7. 75 u³

8. 100 u³