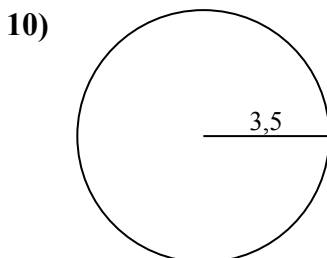
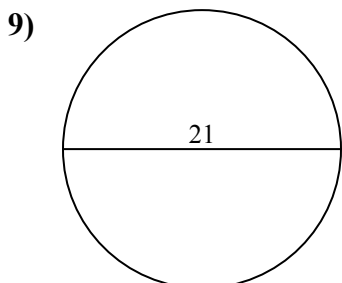
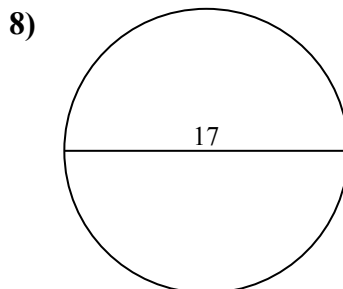
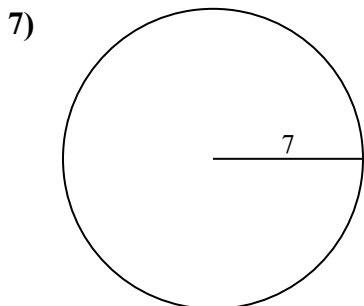
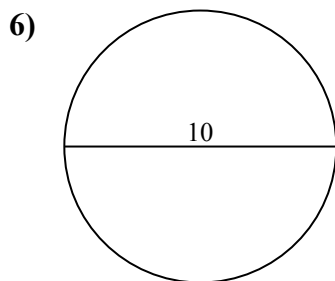
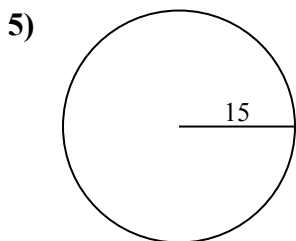
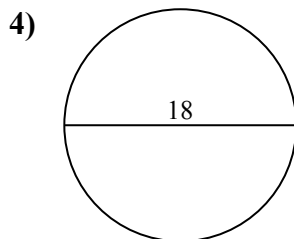
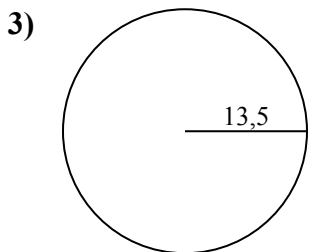
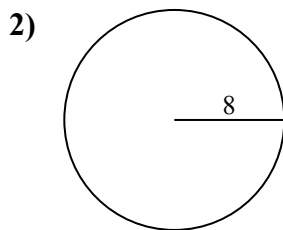
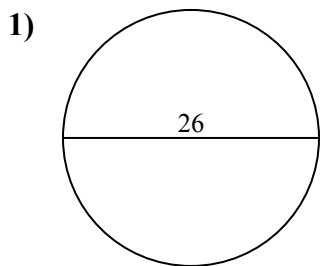




Определите окружность и площадь каждого круга. Круги не являются шкалой.

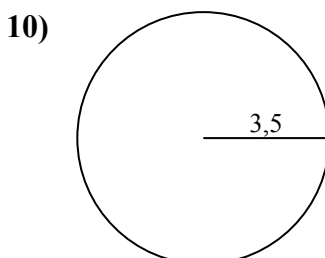
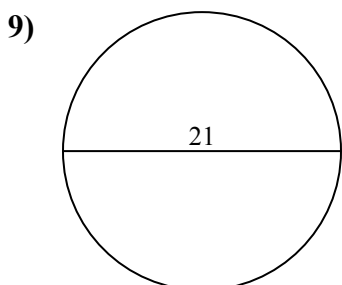
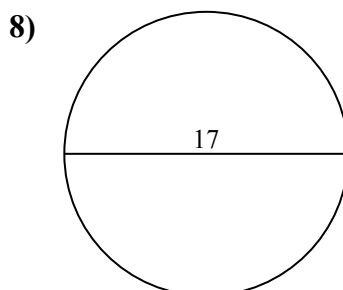
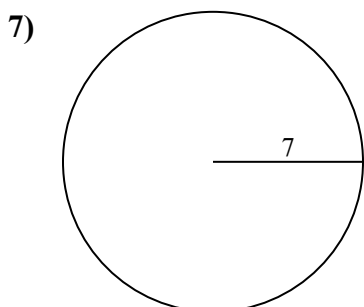
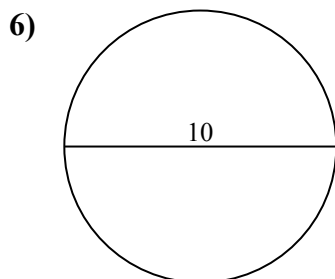
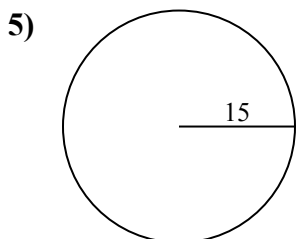
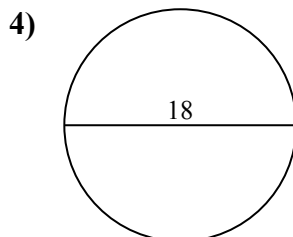
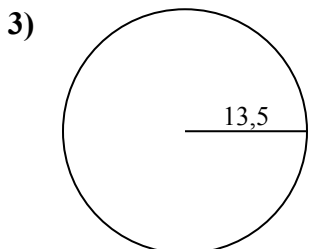
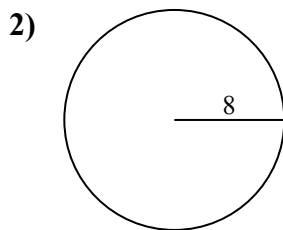
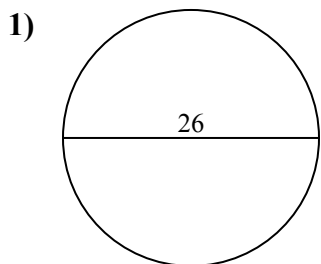
ОТВЕТЫ



| | | |
|-----|-------|-------|
| 1. | _____ | _____ |
| 2. | _____ | _____ |
| 3. | _____ | _____ |
| 4. | _____ | _____ |
| 5. | _____ | _____ |
| 6. | _____ | _____ |
| 7. | _____ | _____ |
| 8. | _____ | _____ |
| 9. | _____ | _____ |
| 10. | _____ | _____ |



Определите окружность и площадь каждого круга. Круги не являются шкалой.

**ОТВЕТЫ**

| | | |
|-----|--------------|-------------|
| 1. | <u>530,9</u> | <u>81,7</u> |
| 2. | <u>201,1</u> | <u>50,3</u> |
| 3. | <u>572,6</u> | <u>84,8</u> |
| 4. | <u>254,5</u> | <u>56,5</u> |
| 5. | <u>706,9</u> | <u>94,2</u> |
| 6. | <u>78,5</u> | <u>31,4</u> |
| 7. | <u>153,9</u> | <u>44</u> |
| 8. | <u>227</u> | <u>53,4</u> |
| 9. | <u>346,4</u> | <u>66</u> |
| 10. | <u>38,5</u> | <u>22</u> |

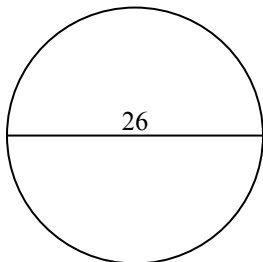


Определите окружность и площадь каждого круга. Круги не являются шкалой.

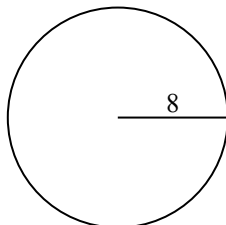
ОТВЕТЫ

| | | | | |
|-------|-------|-------|-------|-------|
| 227 | 346,4 | 530,9 | 201,1 | 706,9 |
| 84,8 | 31,4 | 78,5 | 153,9 | 53,4 |
| 44 | 94,2 | 66 | 254,5 | 56,5 |
| 572,6 | 81,7 | 50,3 | | |

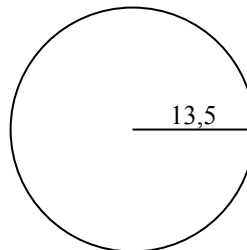
1)



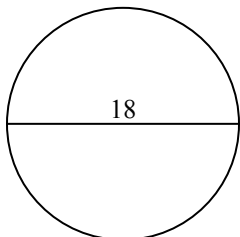
2)



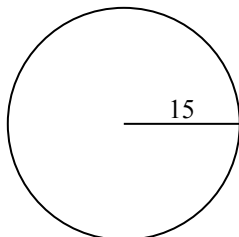
3)



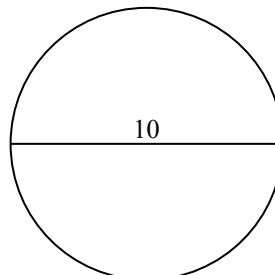
4)



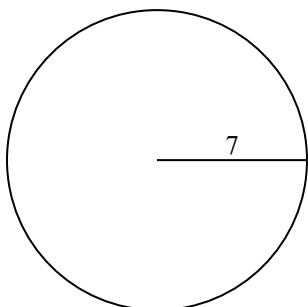
5)



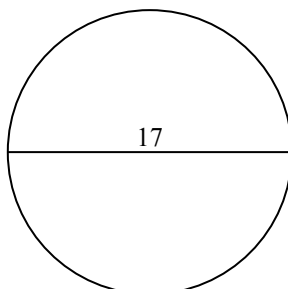
6)



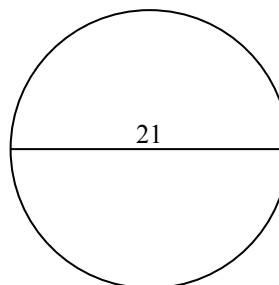
7)



8)



9)



1. _____

2. _____

3. _____

4. _____

5. _____

6. _____

7. _____

8. _____

9. _____