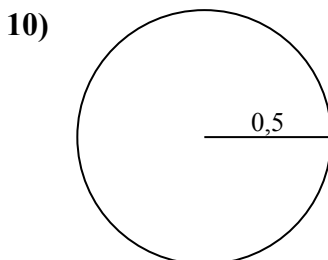
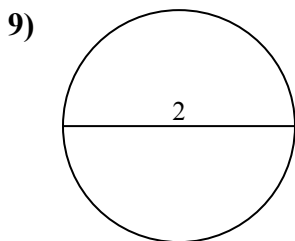
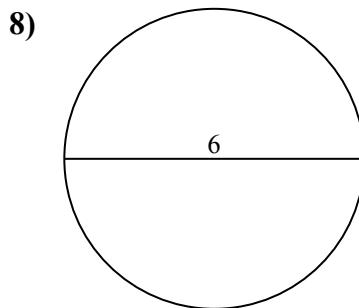
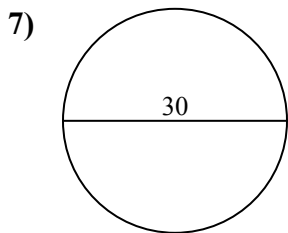
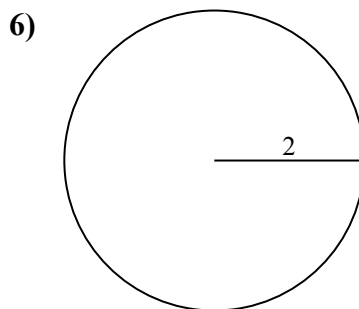
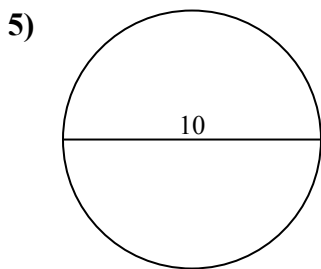
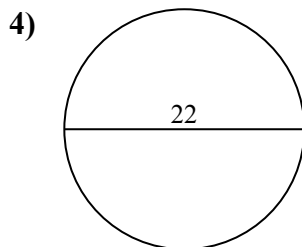
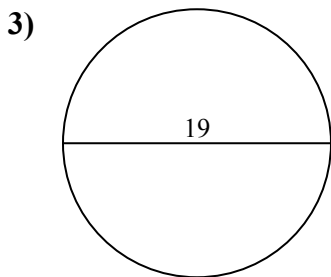
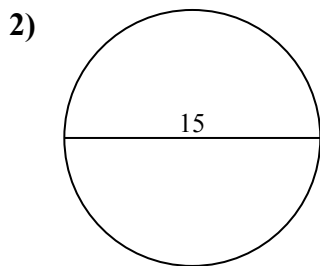
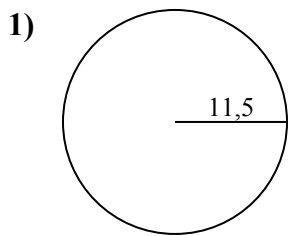




Определите окружность и площадь каждого круга. Круги не являются шкалой.

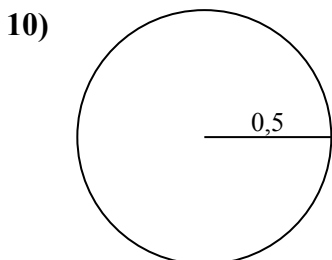
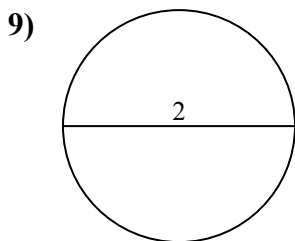
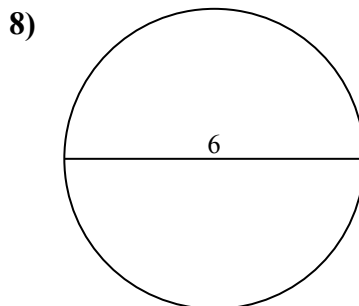
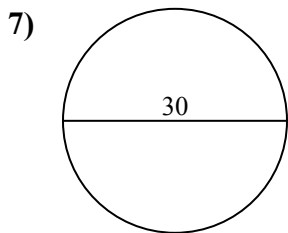
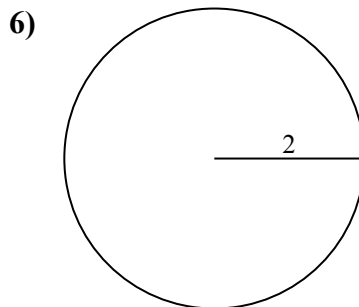
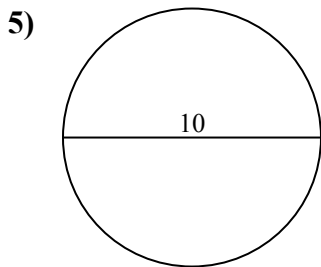
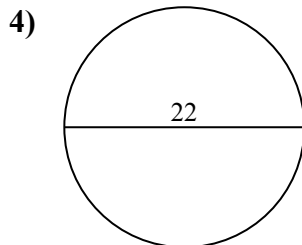
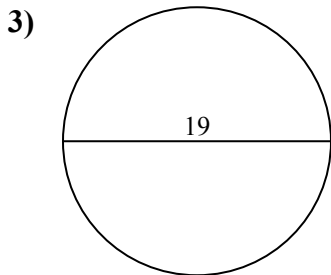
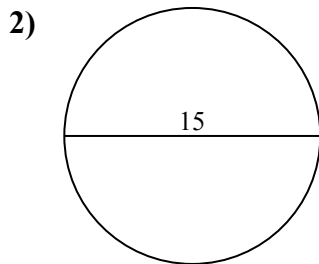
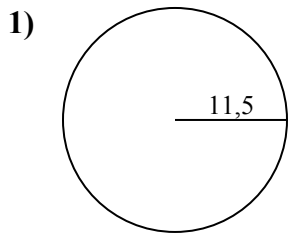


ОТВЕТЫ

- 1. _____
- 2. _____
- 3. _____
- 4. _____
- 5. _____
- 6. _____
- 7. _____
- 8. _____
- 9. _____
- 10. _____



Определите окружность и площадь каждого круга. Круги не являются шкалой.

**ОТВЕТЫ**

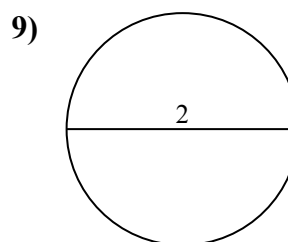
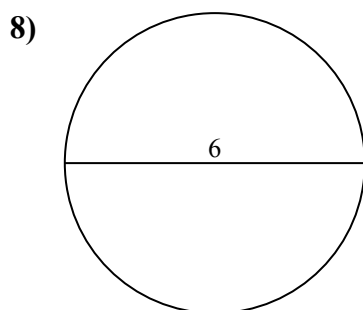
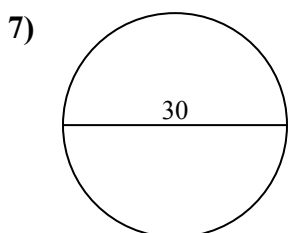
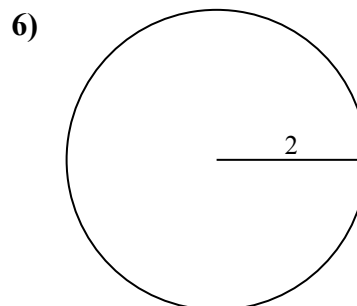
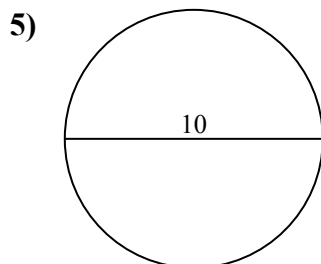
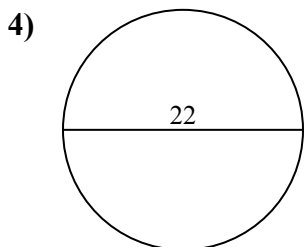
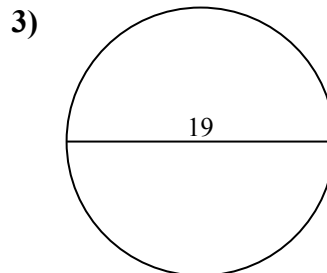
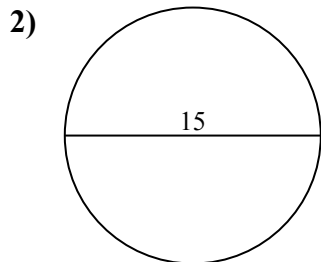
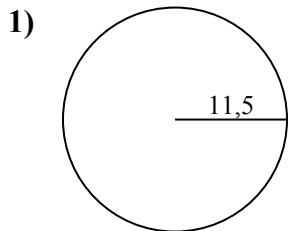
1.	<u>415,5</u>	<u>72,3</u>
2.	<u>176,7</u>	<u>47,1</u>
3.	<u>283,5</u>	<u>59,7</u>
4.	<u>380,1</u>	<u>69,1</u>
5.	<u>78,5</u>	<u>31,4</u>
6.	<u>12,6</u>	<u>12,6</u>
7.	<u>706,9</u>	<u>94,2</u>
8.	<u>28,3</u>	<u>18,8</u>
9.	<u>3,1</u>	<u>6,3</u>
10.	<u>0,8</u>	<u>3,1</u>



Определите окружность и площадь каждого круга. Круги не являются шкалой.

ОТВЕТЫ

72,3	18,8	78,5	6,3	380,1
706,9	12,6	12,6	69,1	415,5
176,7	28,3	94,2	47,1	31,4
283,5	3,1	59,7		



1. _____

2. _____

3. _____

4. _____

5. _____

6. _____

7. _____

8. _____

9. _____