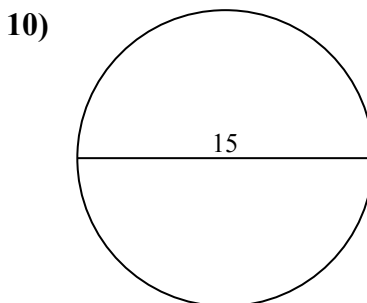
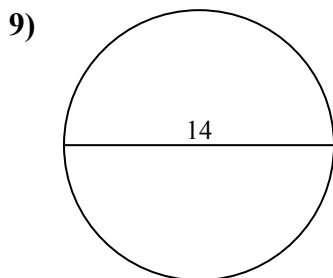
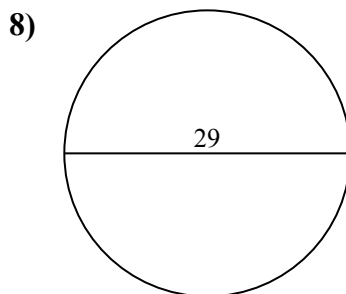
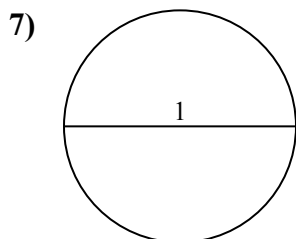
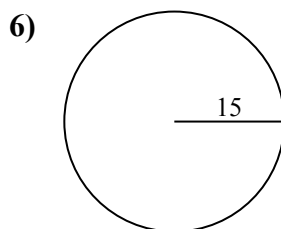
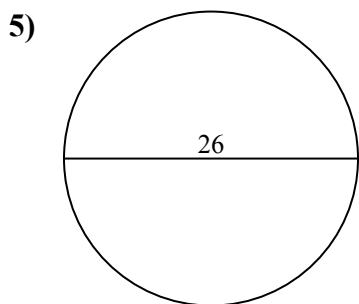
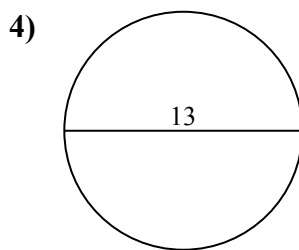
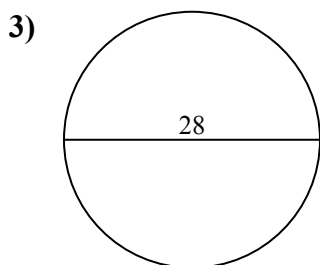
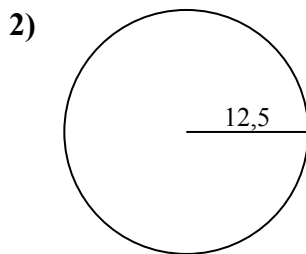
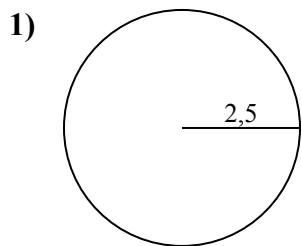




Определите площадь каждого круга. Круги не являются шкалами.

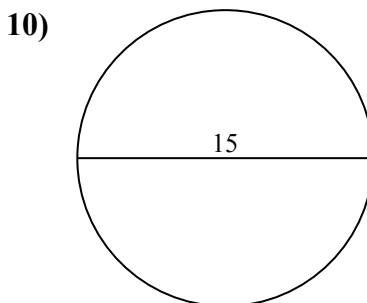
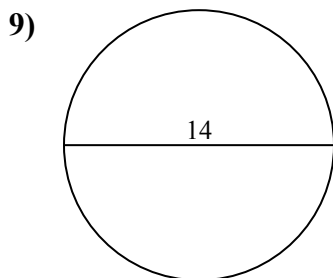
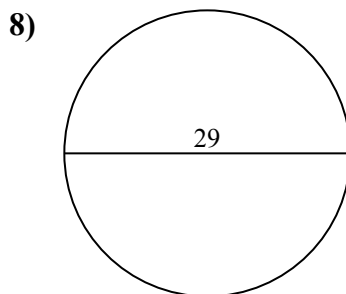
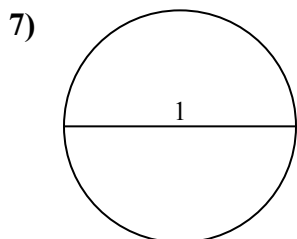
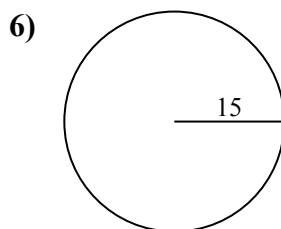
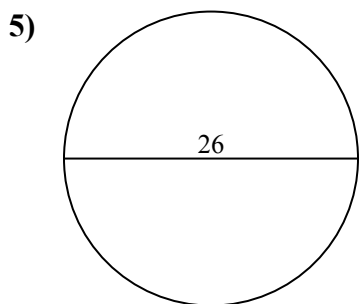
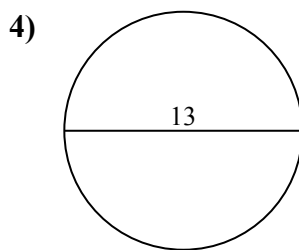
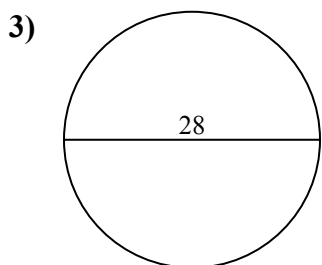
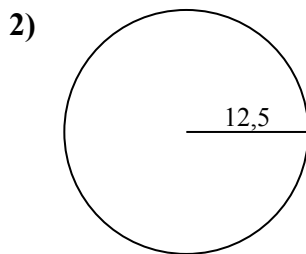
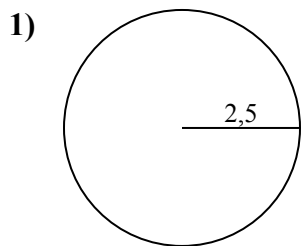
ОТВЕТЫ



- 1. _____
- 2. _____
- 3. _____
- 4. _____
- 5. _____
- 6. _____
- 7. _____
- 8. _____
- 9. _____
- 10. _____



Определите площадь каждого круга. Круги не являются шкалами.



ОТВЕТЫ

1. 19,6

2. 490,9

3. 615,8

4. 132,7

5. 530,9

6. 706,9

7. 0,8

8. 660,5

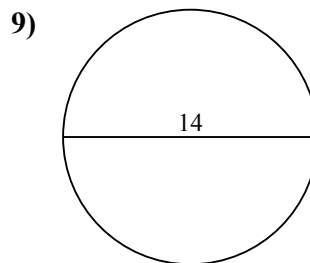
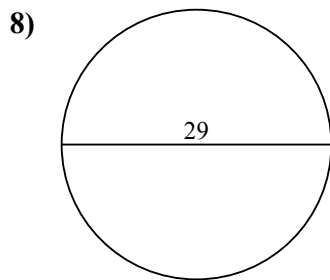
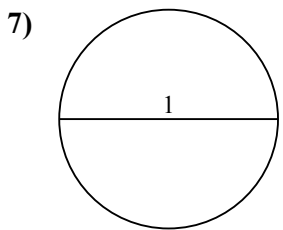
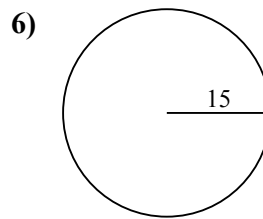
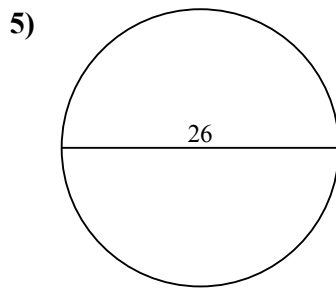
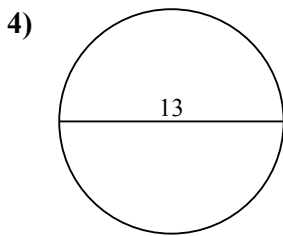
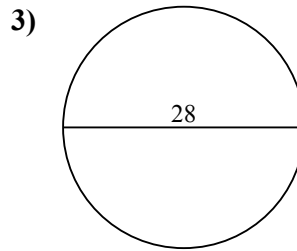
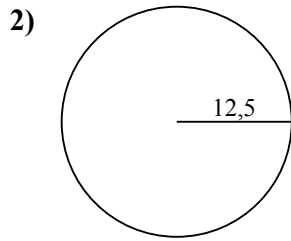
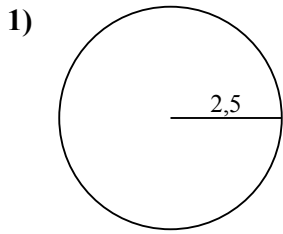
9. 153,9

10. 176,7



Определите площадь каждого круга. Круги не являются шкалами.

| | | | | |
|-------|-------|-------|-------|-------|
| 490,9 | 615,8 | 706,9 | 132,7 | 153,9 |
| 19,6 | 530,9 | 0,8 | 660,5 | |



ОТВЕТЫ

- 1. _____
- 2. _____
- 3. _____
- 4. _____
- 5. _____
- 6. _____
- 7. _____
- 8. _____
- 9. _____