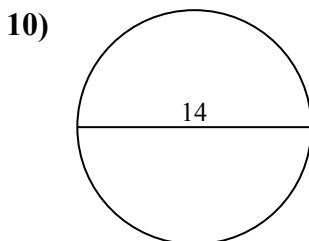
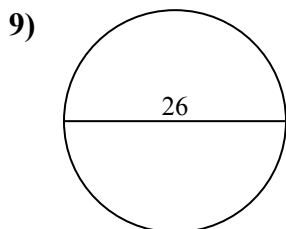
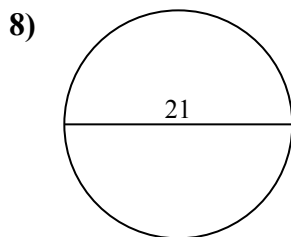
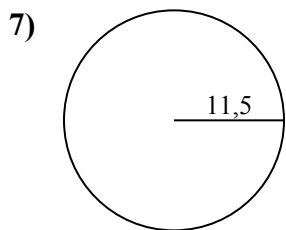
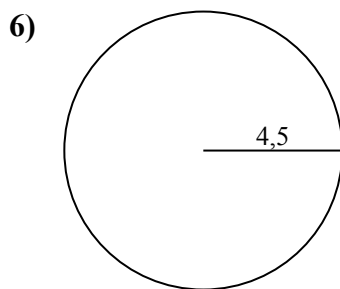
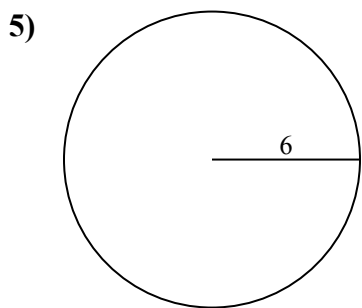
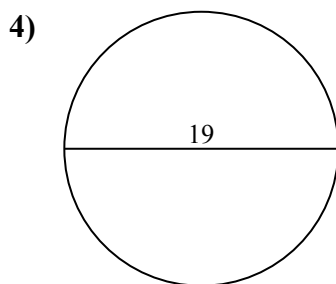
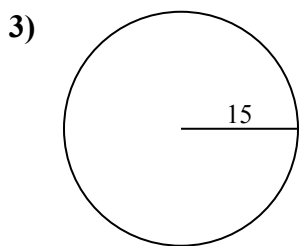
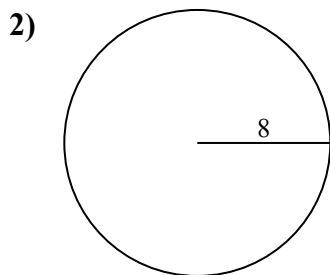
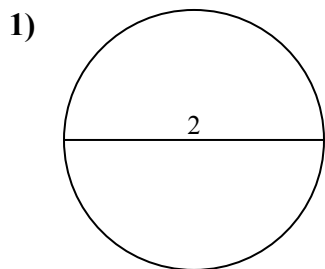




Определите площадь каждого круга. Круги не являются шкалами.

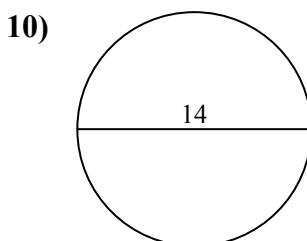
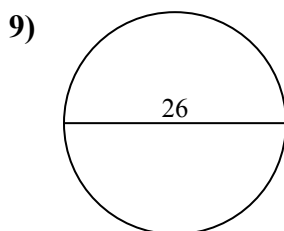
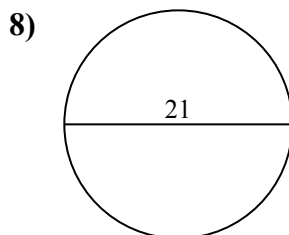
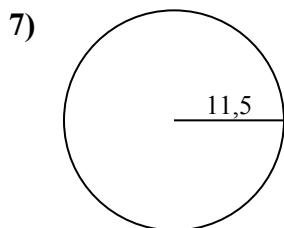
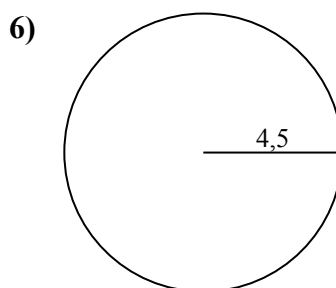
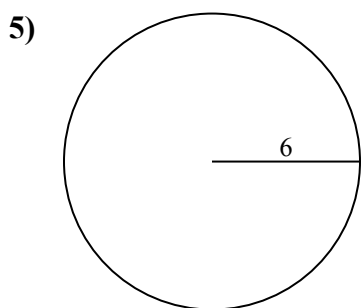
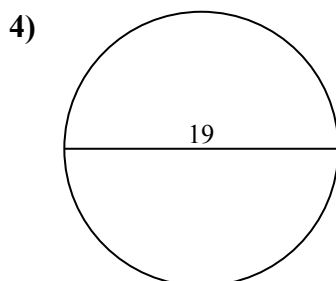
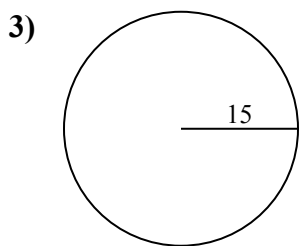
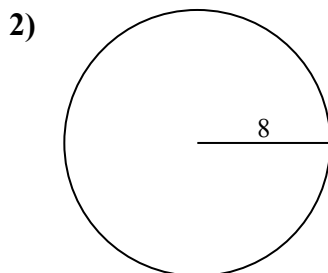
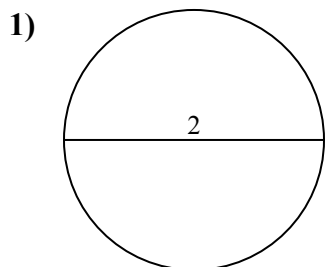
**ОТВЕТЫ**



- 1. \_\_\_\_\_
- 2. \_\_\_\_\_
- 3. \_\_\_\_\_
- 4. \_\_\_\_\_
- 5. \_\_\_\_\_
- 6. \_\_\_\_\_
- 7. \_\_\_\_\_
- 8. \_\_\_\_\_
- 9. \_\_\_\_\_
- 10. \_\_\_\_\_



Определите площадь каждого круга. Круги не являются шкалами.



**ОТВЕТЫ**

1. 3,1

2. 201,1

3. 706,9

4. 283,5

5. 113,1

6. 63,6

7. 415,5

8. 346,4

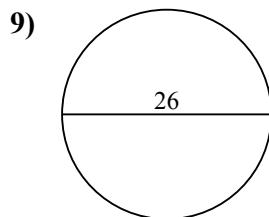
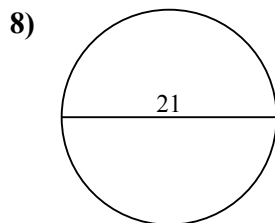
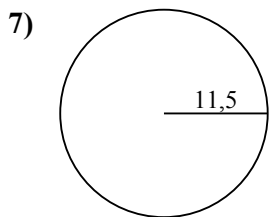
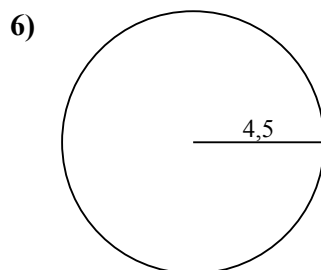
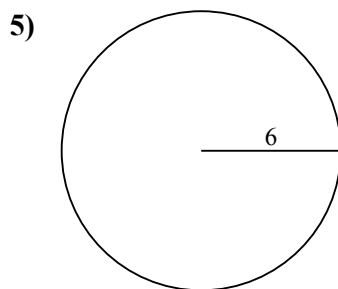
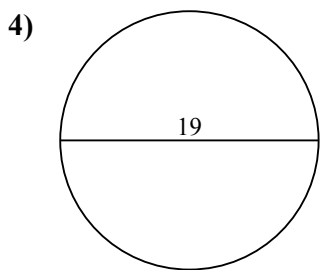
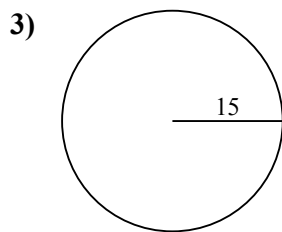
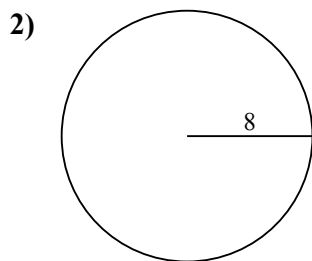
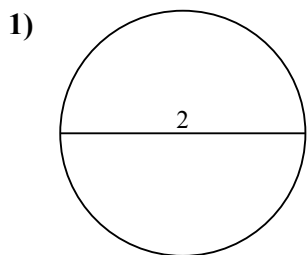
9. 530,9

10. 153,9



Определите площадь каждого круга. Круги не являются шкалами.

201,1	3,1	283,5	346,4	63,6
706,9	113,1	530,9	415,5	



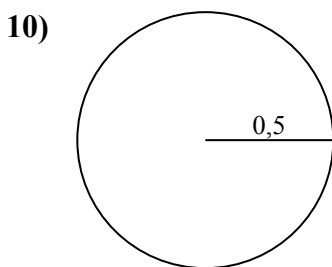
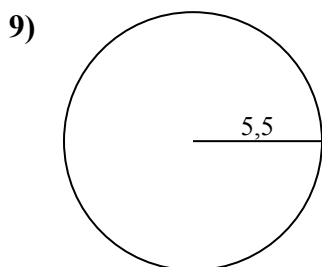
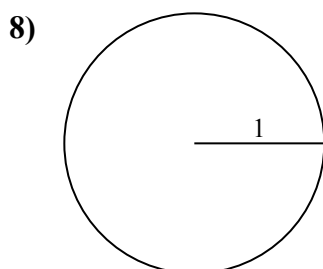
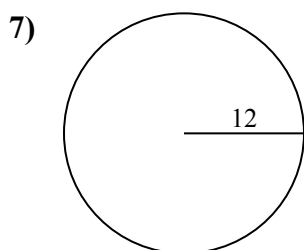
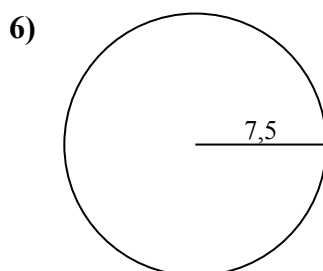
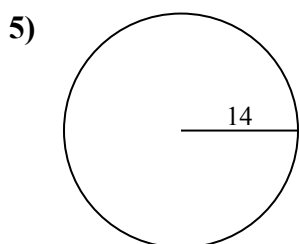
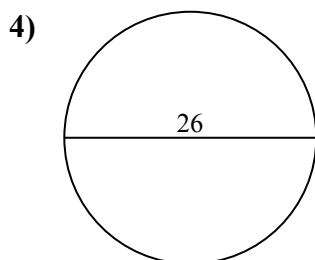
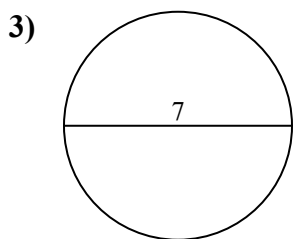
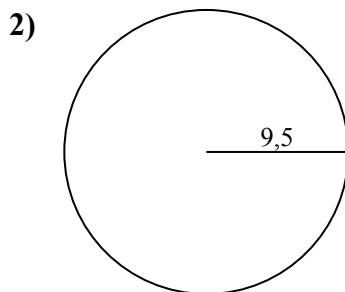
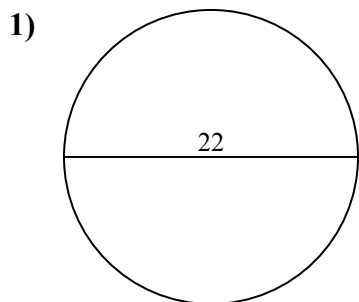
**ОТВЕТЫ**

- 1. \_\_\_\_\_
- 2. \_\_\_\_\_
- 3. \_\_\_\_\_
- 4. \_\_\_\_\_
- 5. \_\_\_\_\_
- 6. \_\_\_\_\_
- 7. \_\_\_\_\_
- 8. \_\_\_\_\_
- 9. \_\_\_\_\_



Определите площадь каждого круга. Круги не являются шкалами.

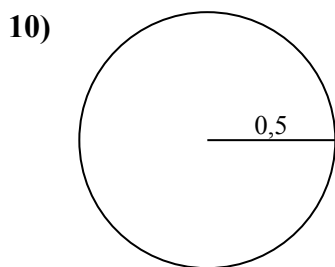
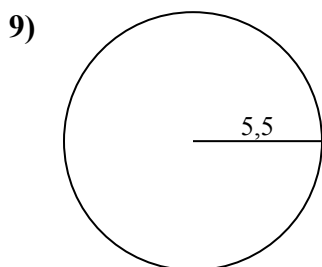
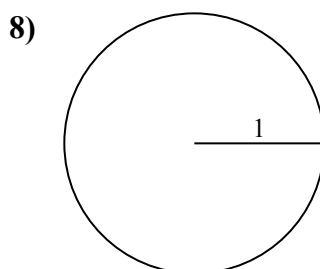
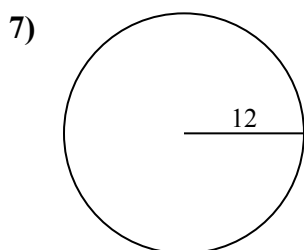
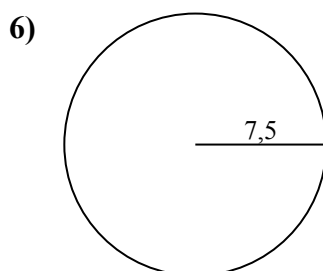
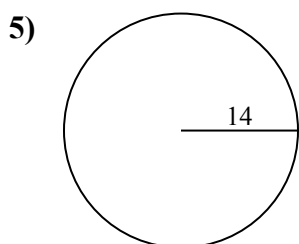
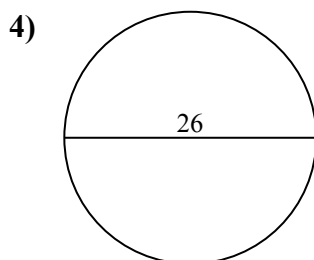
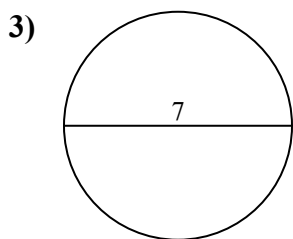
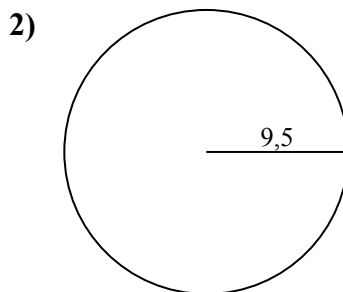
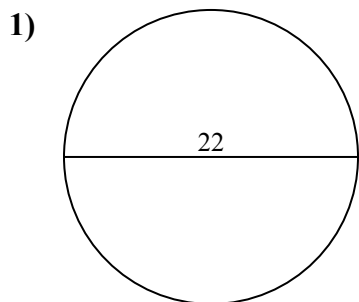
**ОТВЕТЫ**



- 1. \_\_\_\_\_
- 2. \_\_\_\_\_
- 3. \_\_\_\_\_
- 4. \_\_\_\_\_
- 5. \_\_\_\_\_
- 6. \_\_\_\_\_
- 7. \_\_\_\_\_
- 8. \_\_\_\_\_
- 9. \_\_\_\_\_
- 10. \_\_\_\_\_



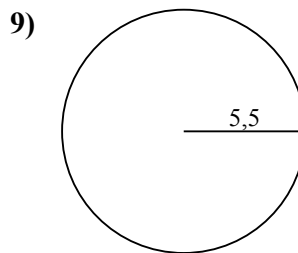
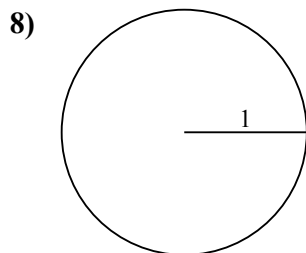
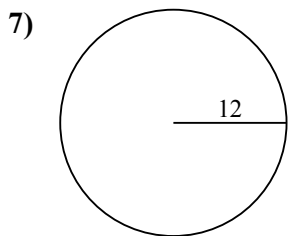
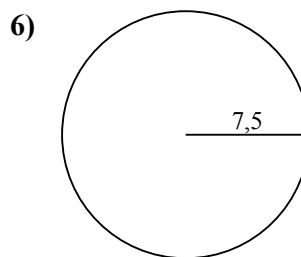
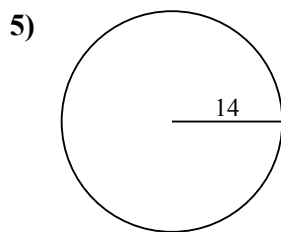
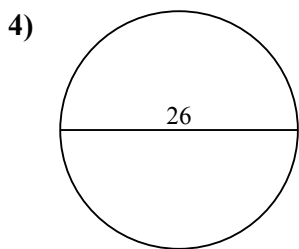
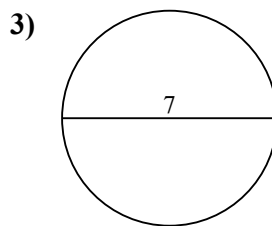
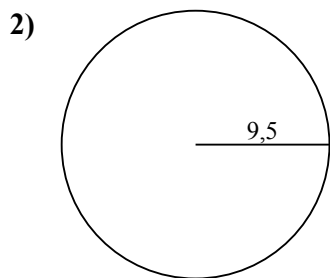
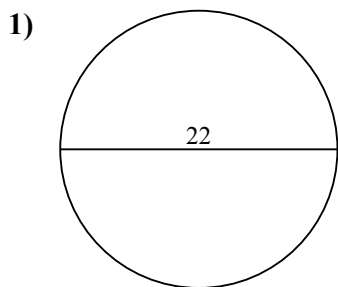
Определите площадь каждого круга. Круги не являются шкалами.

**ОТВЕТЫ**1. 380,12. 283,53. 38,54. 530,95. 615,86. 176,77. 452,48. 3,19. 9510. 0,8



Определите площадь каждого круга. Круги не являются шкалами.

176,7	38,5	530,9	283,5	95
615,8	3,1	452,4	380,1	



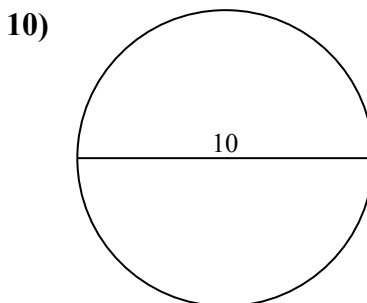
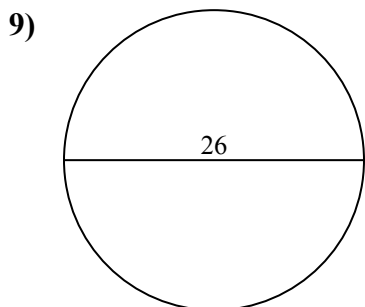
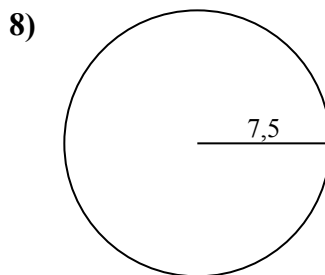
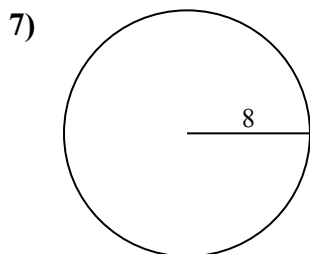
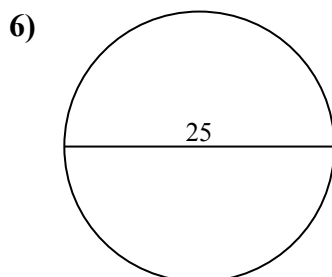
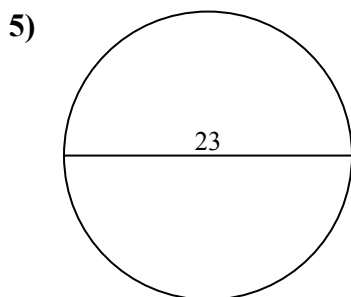
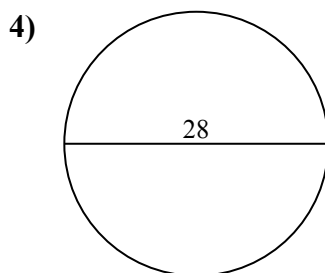
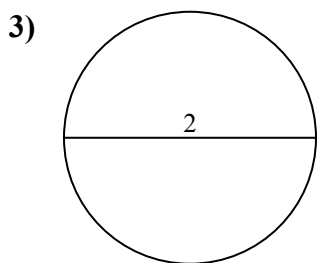
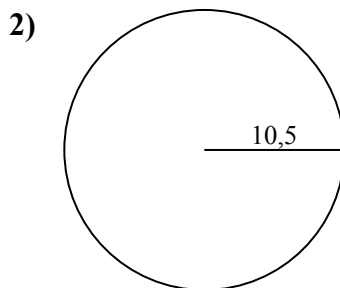
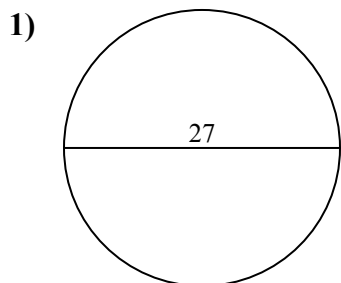
**ОТВЕТЫ**

- 1. \_\_\_\_\_
- 2. \_\_\_\_\_
- 3. \_\_\_\_\_
- 4. \_\_\_\_\_
- 5. \_\_\_\_\_
- 6. \_\_\_\_\_
- 7. \_\_\_\_\_
- 8. \_\_\_\_\_
- 9. \_\_\_\_\_



Определите площадь каждого круга. Круги не являются шкалами.

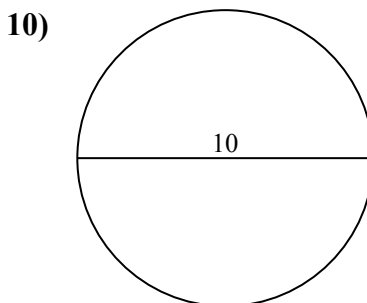
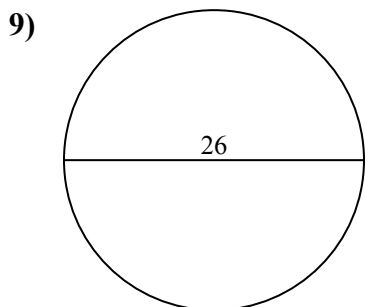
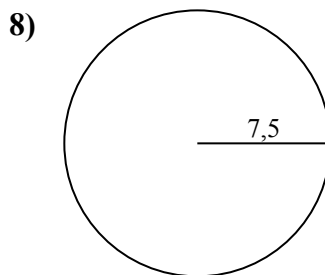
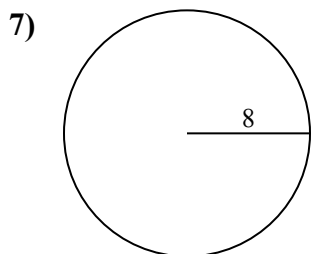
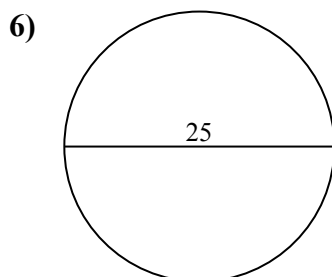
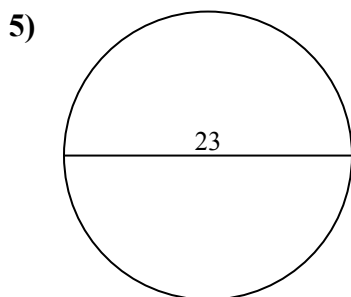
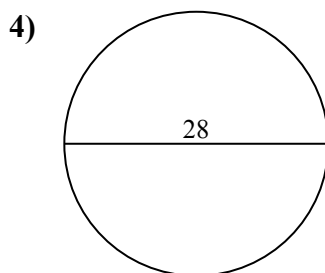
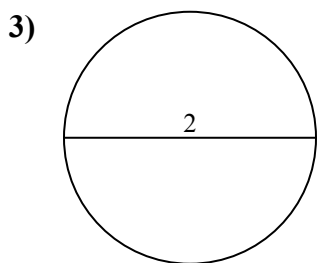
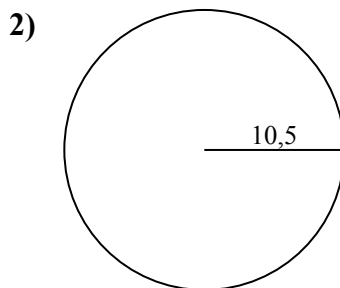
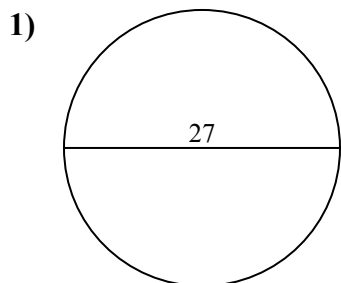
**ОТВЕТЫ**



- 1. \_\_\_\_\_
- 2. \_\_\_\_\_
- 3. \_\_\_\_\_
- 4. \_\_\_\_\_
- 5. \_\_\_\_\_
- 6. \_\_\_\_\_
- 7. \_\_\_\_\_
- 8. \_\_\_\_\_
- 9. \_\_\_\_\_
- 10. \_\_\_\_\_



Определите площадь каждого круга. Круги не являются шкалами.



**ОТВЕТЫ**

1. 572,6

2. 346,4

3. 3,1

4. 615,8

5. 415,5

6. 490,9

7. 201,1

8. 176,7

9. 530,9

10. 78,5

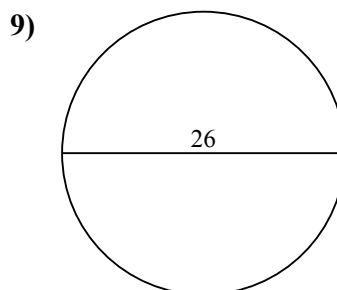
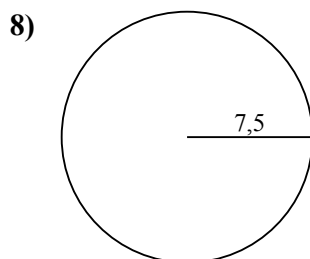
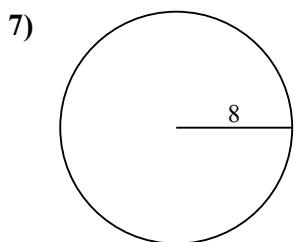
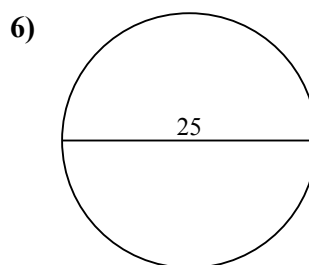
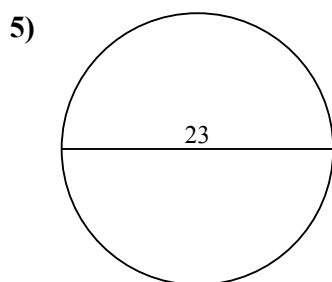
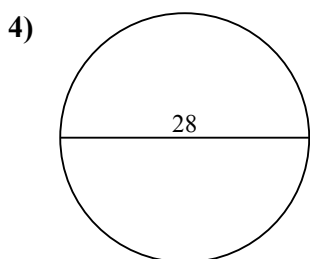
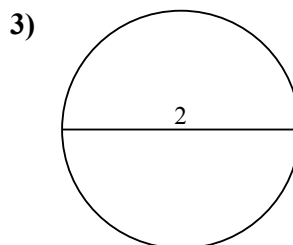
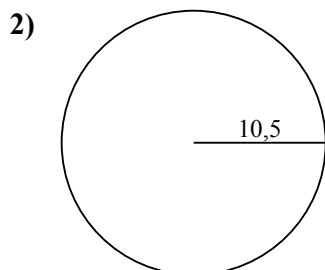
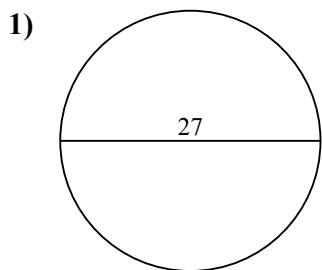




Определите площадь каждого круга. Круги не являются шкалами.

530,9	3,1	615,8	201,1	490,9
572,6	415,5	176,7	346,4	

**ОТВЕТЫ**

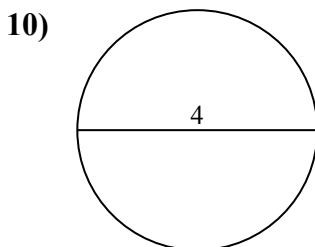
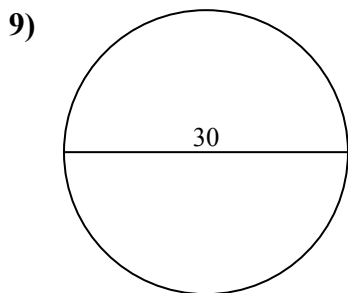
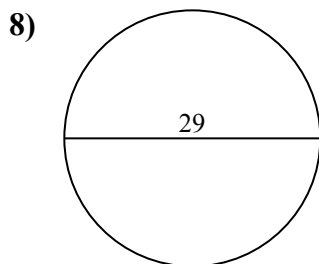
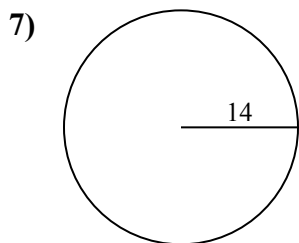
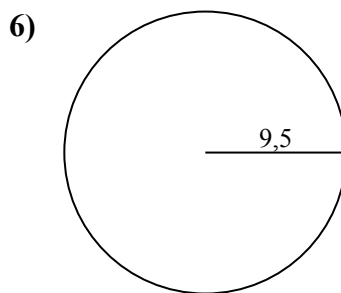
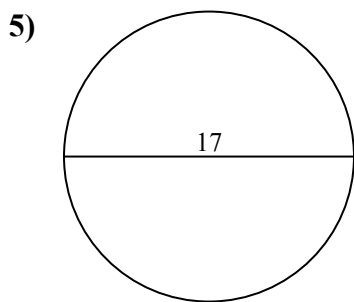
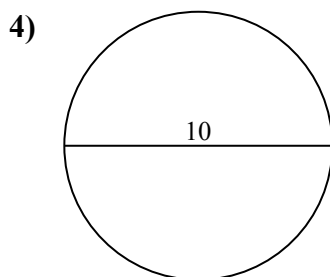
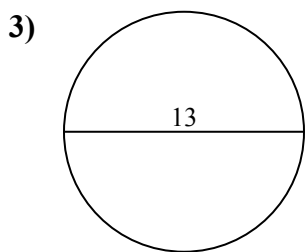
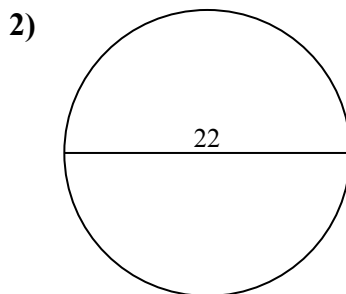
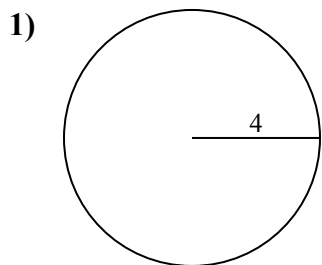


- 1. \_\_\_\_\_
- 2. \_\_\_\_\_
- 3. \_\_\_\_\_
- 4. \_\_\_\_\_
- 5. \_\_\_\_\_
- 6. \_\_\_\_\_
- 7. \_\_\_\_\_
- 8. \_\_\_\_\_
- 9. \_\_\_\_\_



Определите площадь каждого круга. Круги не являются шкалами.

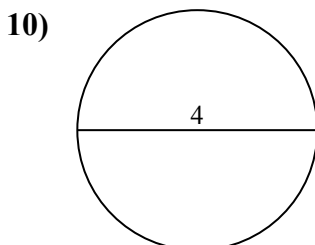
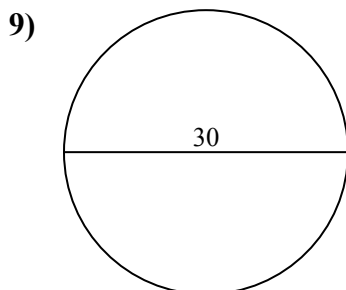
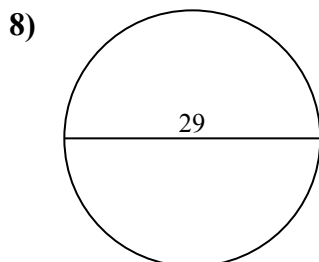
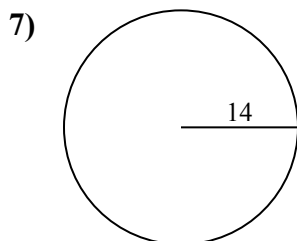
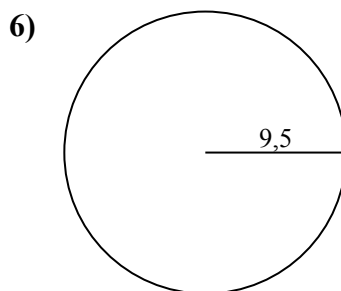
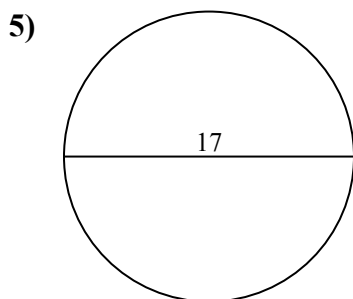
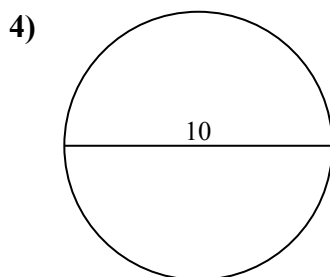
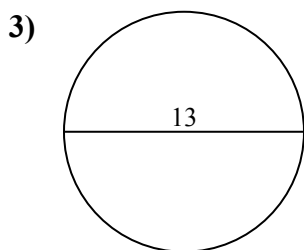
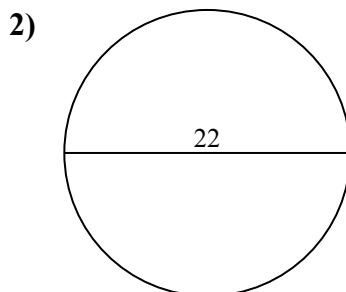
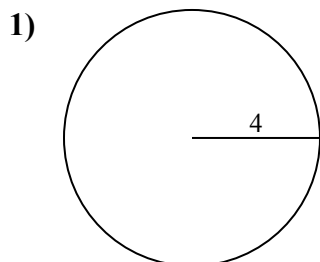
**ОТВЕТЫ**



1. \_\_\_\_\_
2. \_\_\_\_\_
3. \_\_\_\_\_
4. \_\_\_\_\_
5. \_\_\_\_\_
6. \_\_\_\_\_
7. \_\_\_\_\_
8. \_\_\_\_\_
9. \_\_\_\_\_
10. \_\_\_\_\_



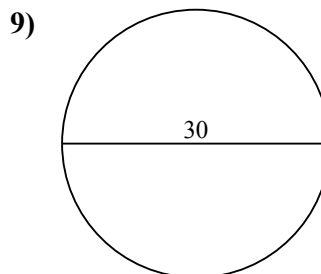
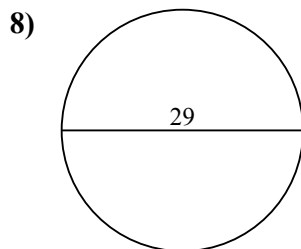
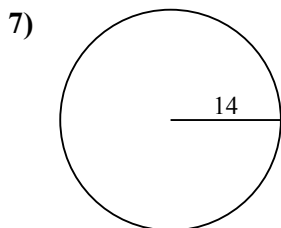
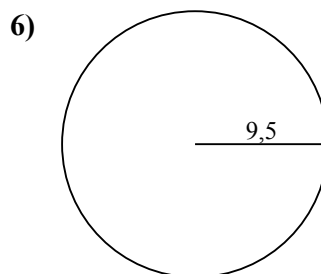
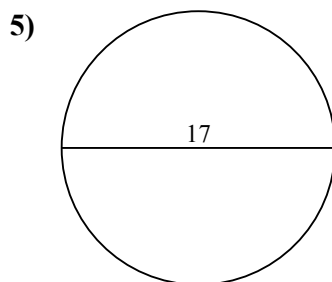
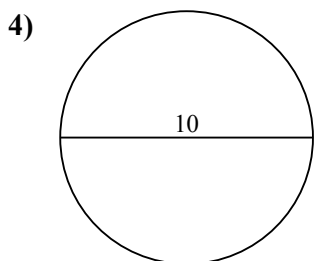
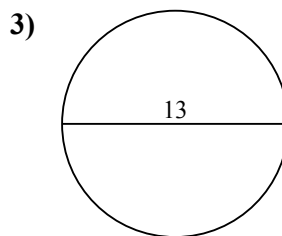
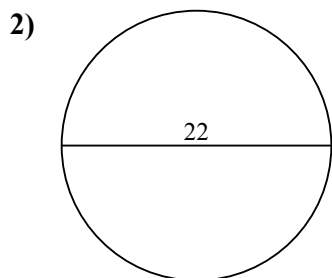
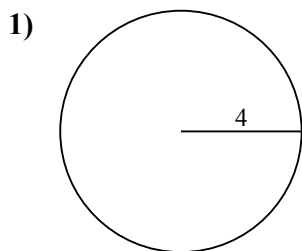
Определите площадь каждого круга. Круги не являются шкалами.

**ОТВЕТЫ**1. 50,32. 380,13. 132,74. 78,55. 2276. 283,57. 615,88. 660,59. 706,910. 12,6



Определите площадь каждого круга. Круги не являются шкалами.

78,5	227	660,5	615,8	380,1
283,5	132,7	50,3	706,9	



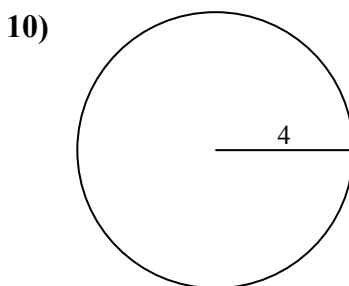
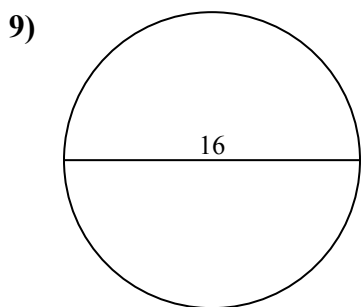
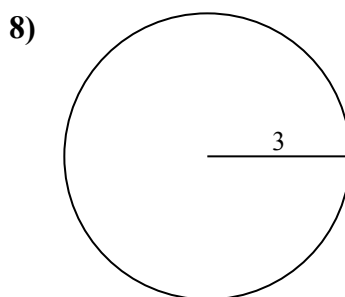
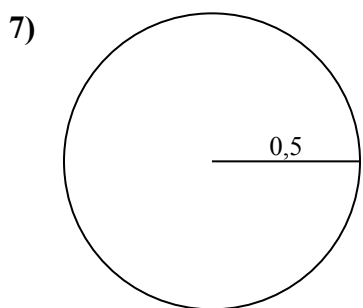
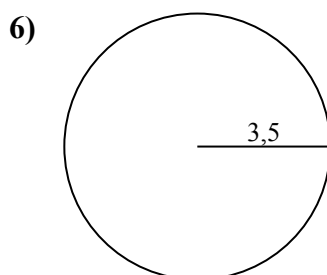
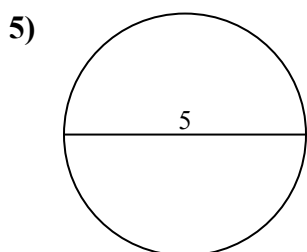
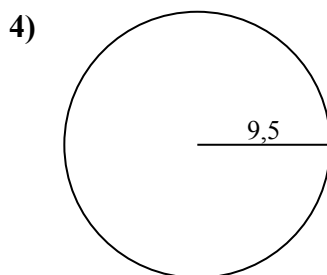
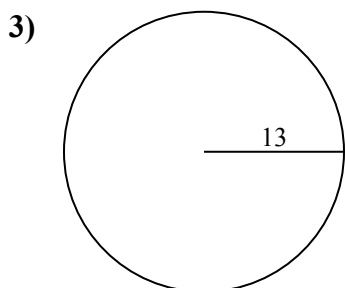
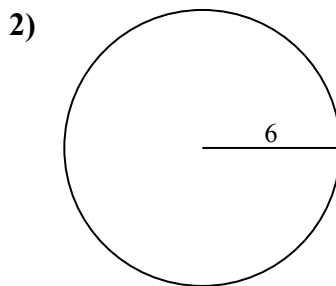
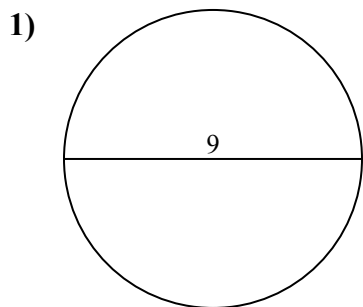
**ОТВЕТЫ**

- 1. \_\_\_\_\_
- 2. \_\_\_\_\_
- 3. \_\_\_\_\_
- 4. \_\_\_\_\_
- 5. \_\_\_\_\_
- 6. \_\_\_\_\_
- 7. \_\_\_\_\_
- 8. \_\_\_\_\_
- 9. \_\_\_\_\_



Определите площадь каждого круга. Круги не являются шкалами.

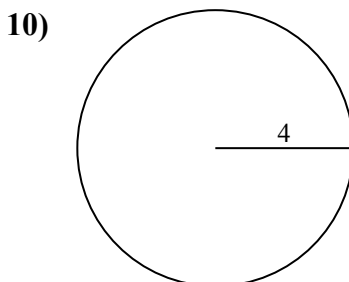
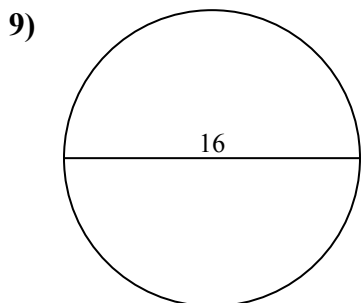
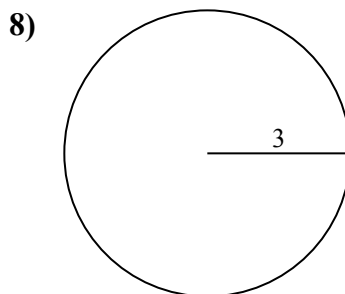
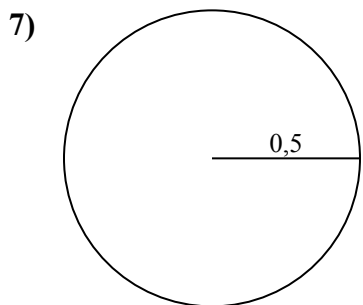
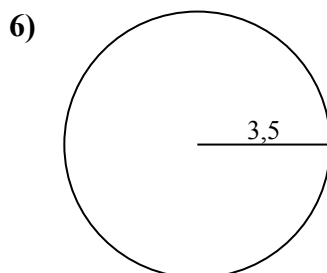
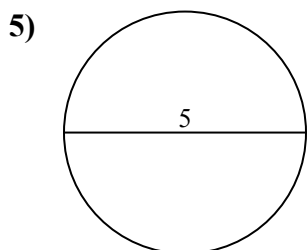
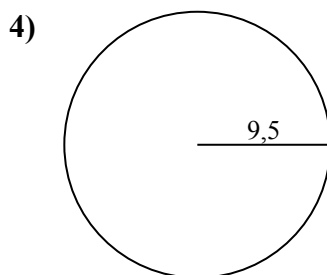
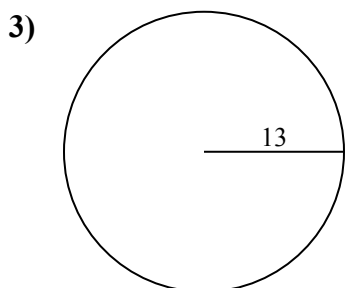
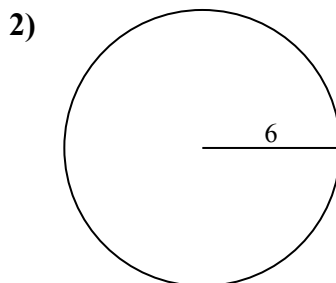
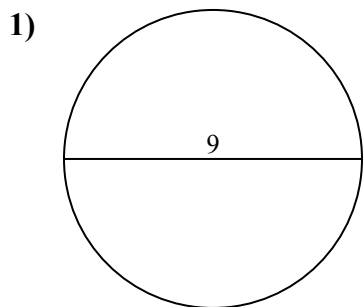
**ОТВЕТЫ**



- 1. \_\_\_\_\_
- 2. \_\_\_\_\_
- 3. \_\_\_\_\_
- 4. \_\_\_\_\_
- 5. \_\_\_\_\_
- 6. \_\_\_\_\_
- 7. \_\_\_\_\_
- 8. \_\_\_\_\_
- 9. \_\_\_\_\_
- 10. \_\_\_\_\_



Определите площадь каждого круга. Круги не являются шкалами.



**ОТВЕТЫ**

1. 63,6

2. 113,1

3. 530,9

4. 283,5

5. 19,6

6. 38,5

7. 0,8

8. 28,3

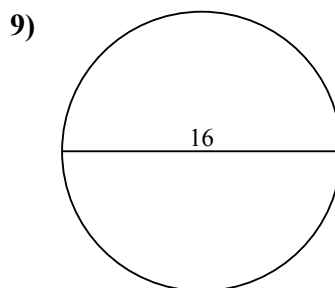
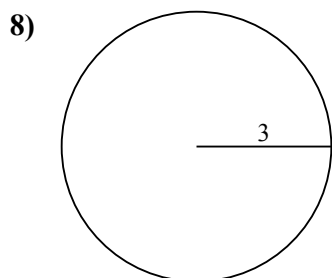
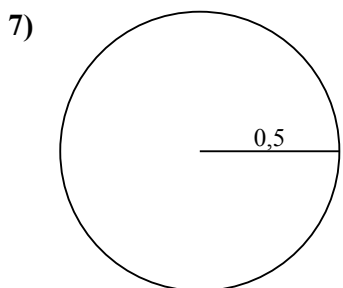
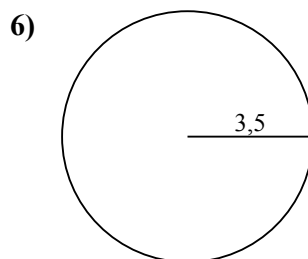
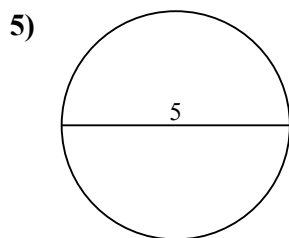
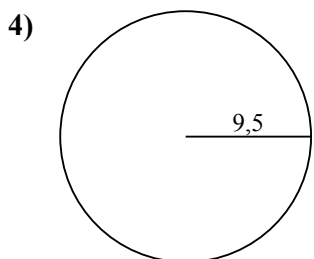
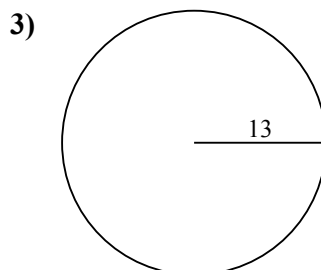
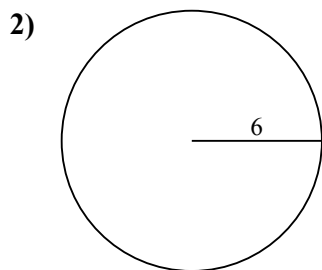
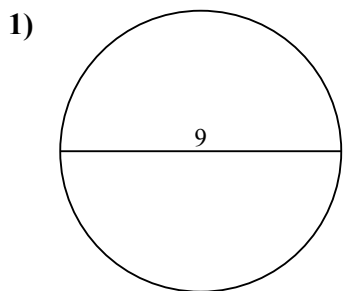
9. 201,1

10. 50,3



Определите площадь каждого круга. Круги не являются шкалами.

28,3	113,1	201,1	38,5	283,5
0,8	19,6	63,6	530,9	



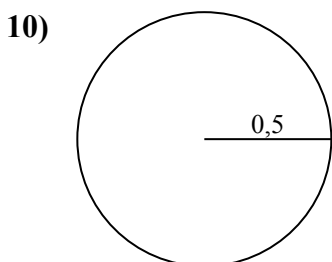
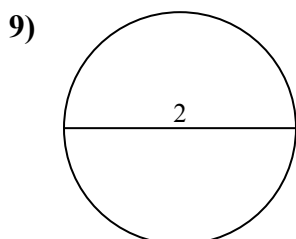
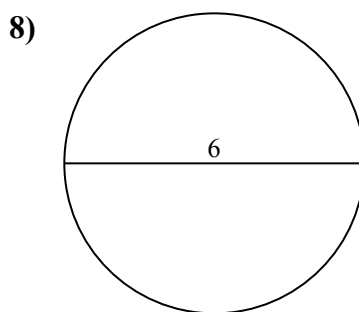
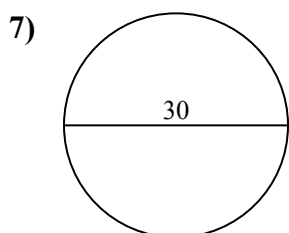
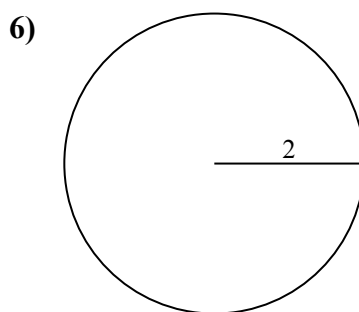
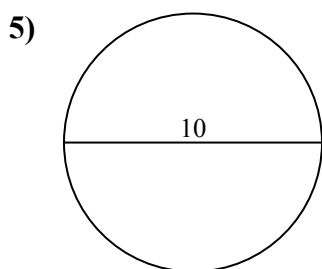
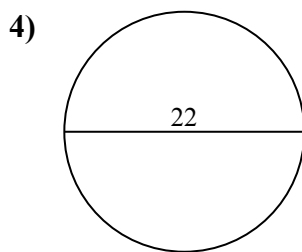
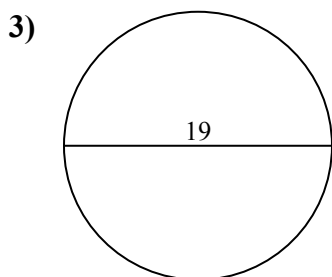
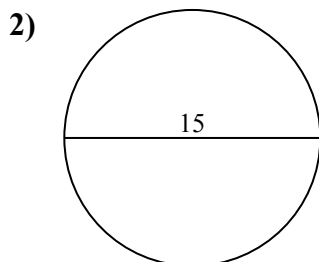
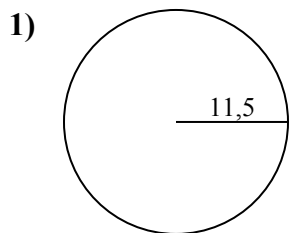
**ОТВЕТЫ**

- 1. \_\_\_\_\_
- 2. \_\_\_\_\_
- 3. \_\_\_\_\_
- 4. \_\_\_\_\_
- 5. \_\_\_\_\_
- 6. \_\_\_\_\_
- 7. \_\_\_\_\_
- 8. \_\_\_\_\_
- 9. \_\_\_\_\_



Определите площадь каждого круга. Круги не являются шкалами.

**ОТВЕТЫ**

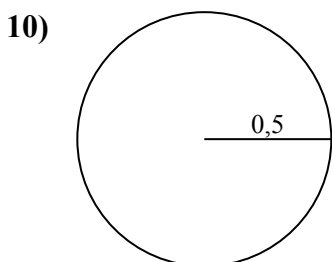
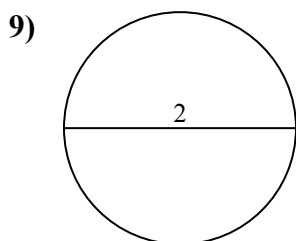
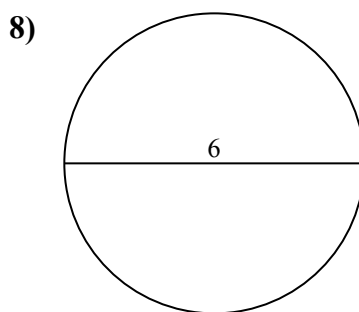
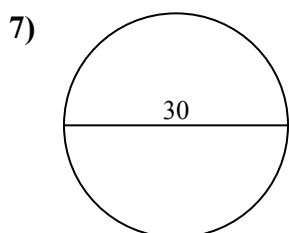
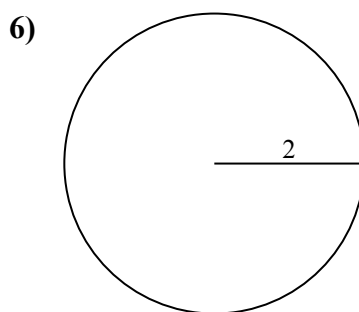
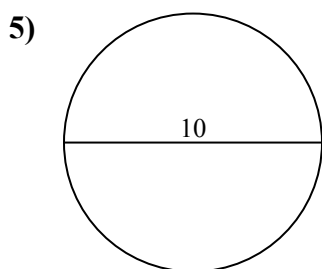
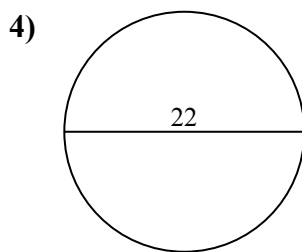
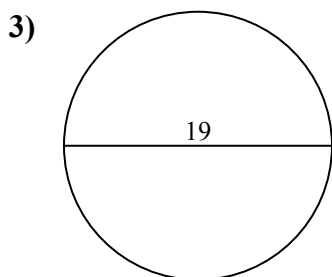
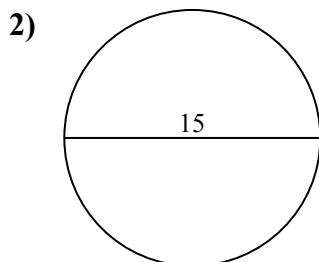
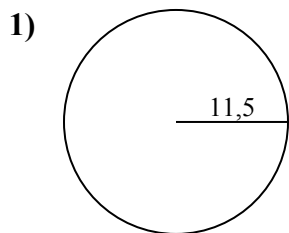


- 1. \_\_\_\_\_
- 2. \_\_\_\_\_
- 3. \_\_\_\_\_
- 4. \_\_\_\_\_
- 5. \_\_\_\_\_
- 6. \_\_\_\_\_
- 7. \_\_\_\_\_
- 8. \_\_\_\_\_
- 9. \_\_\_\_\_
- 10. \_\_\_\_\_





Определите площадь каждого круга. Круги не являются шкалами.



**ОТВЕТЫ**

1. 415,5

2. 176,7

3. 283,5

4. 380,1

5. 78,5

6. 12,6

7. 706,9

8. 28,3

9. 3,1

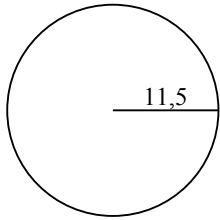
10. 0,8



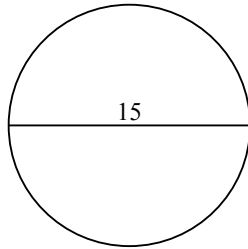
Определите площадь каждого круга. Круги не являются шкалами.

283,5	176,7	415,5	3,1	78,5
380,1	706,9	28,3	12,6	

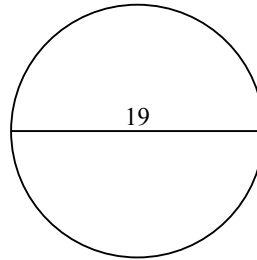
1)



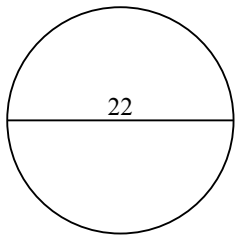
2)



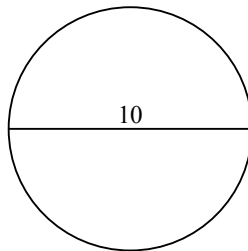
3)



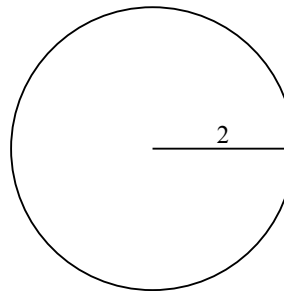
4)



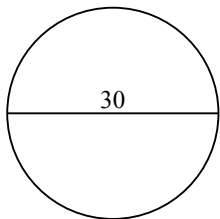
5)



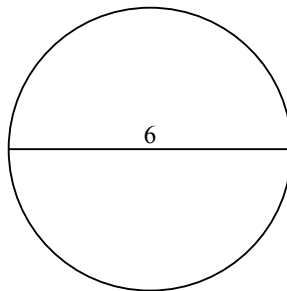
6)



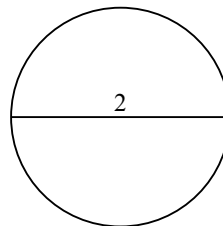
7)



8)



9)



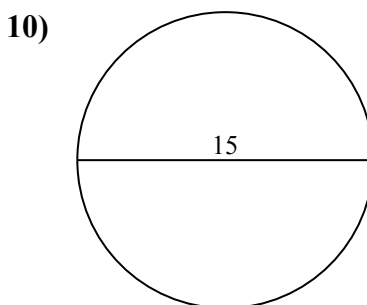
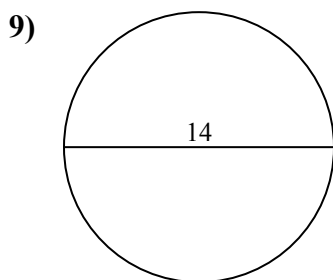
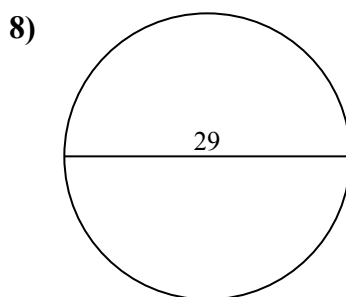
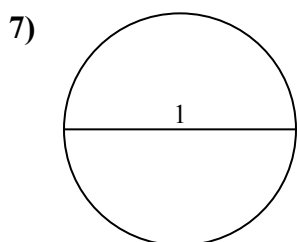
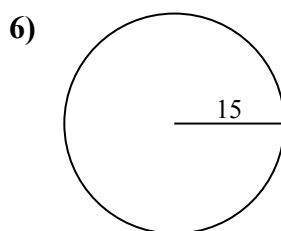
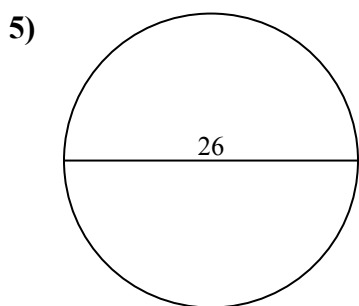
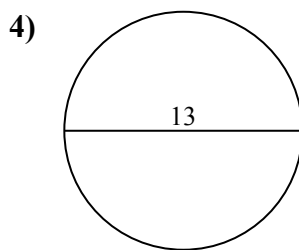
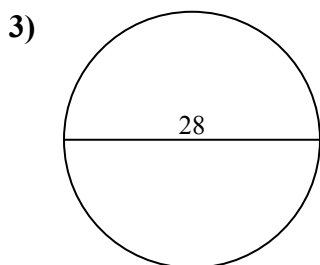
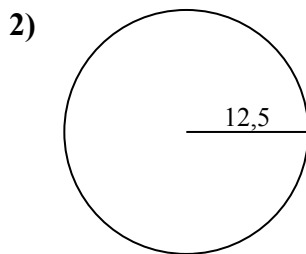
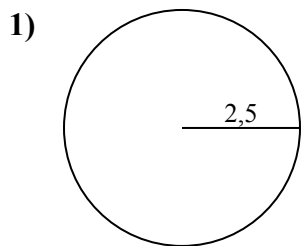
**ОТВЕТЫ**

- 1. \_\_\_\_\_
- 2. \_\_\_\_\_
- 3. \_\_\_\_\_
- 4. \_\_\_\_\_
- 5. \_\_\_\_\_
- 6. \_\_\_\_\_
- 7. \_\_\_\_\_
- 8. \_\_\_\_\_
- 9. \_\_\_\_\_



Определите площадь каждого круга. Круги не являются шкалами.

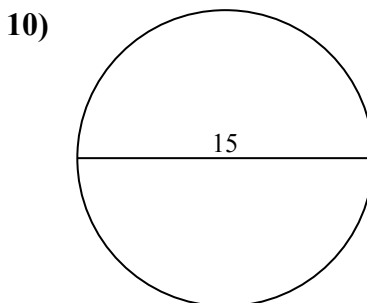
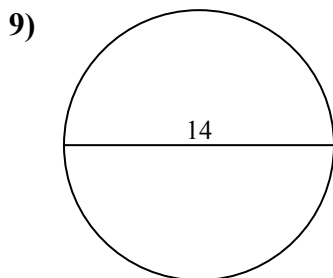
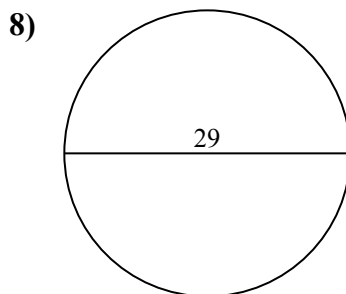
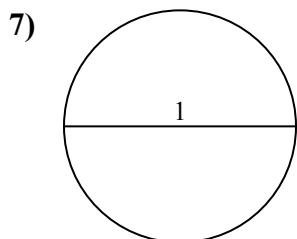
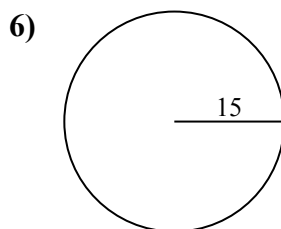
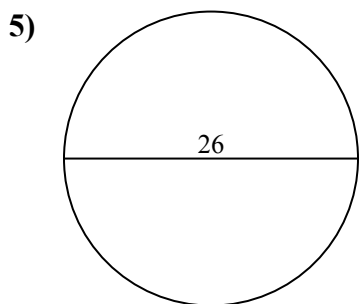
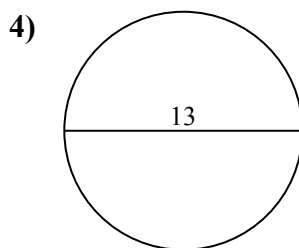
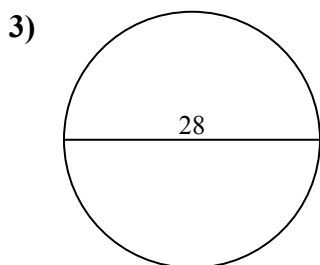
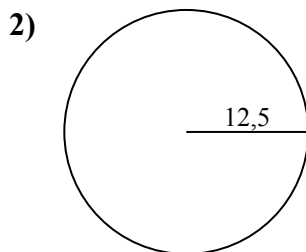
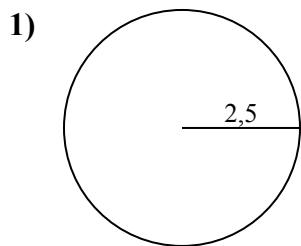
**ОТВЕТЫ**



- 1. \_\_\_\_\_
- 2. \_\_\_\_\_
- 3. \_\_\_\_\_
- 4. \_\_\_\_\_
- 5. \_\_\_\_\_
- 6. \_\_\_\_\_
- 7. \_\_\_\_\_
- 8. \_\_\_\_\_
- 9. \_\_\_\_\_
- 10. \_\_\_\_\_



Определите площадь каждого круга. Круги не являются шкалами.

**ОТВЕТЫ**1. 19,62. 490,93. 615,84. 132,75. 530,96. 706,97. 0,88. 660,59. 153,910. 176,7

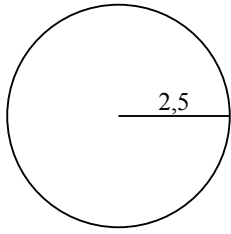


Определите площадь каждого круга. Круги не являются шкалами.

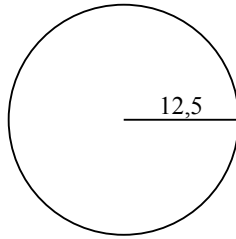
490,9	615,8	706,9	132,7	153,9
19,6	530,9	0,8	660,5	

**ОТВЕТЫ**

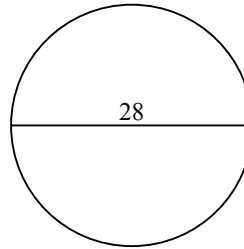
1)



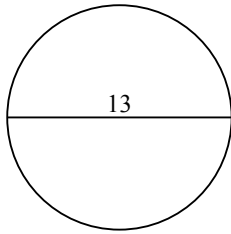
2)



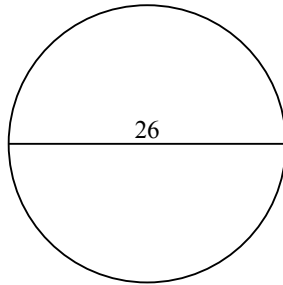
3)



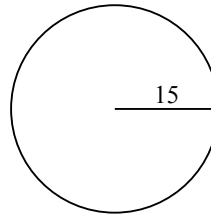
4)



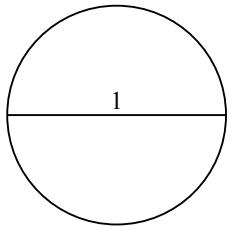
5)



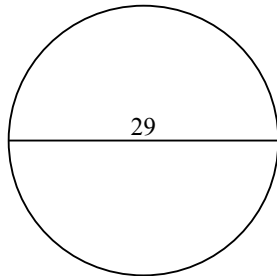
6)



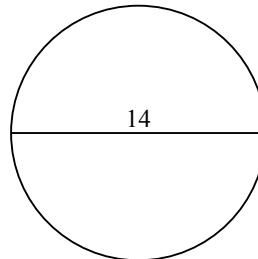
7)



8)



9)

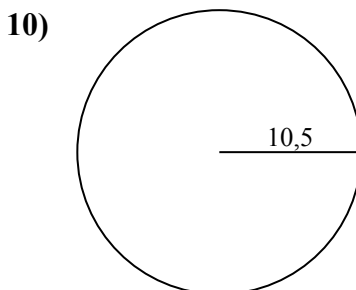
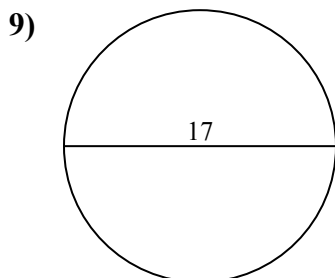
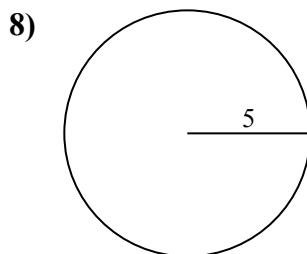
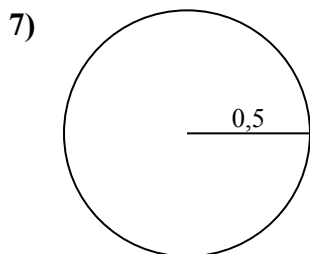
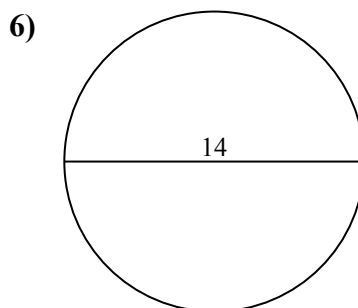
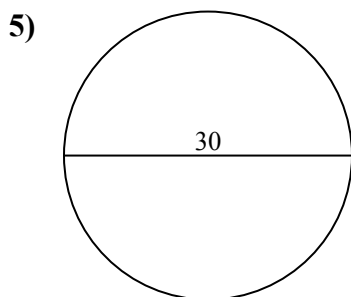
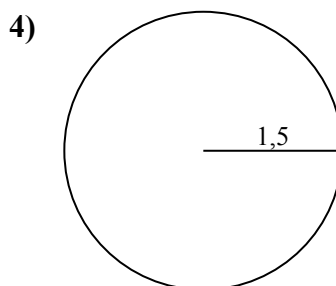
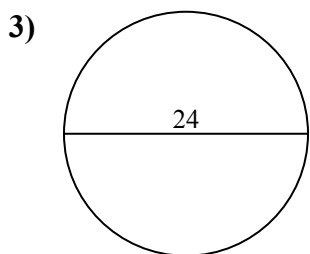
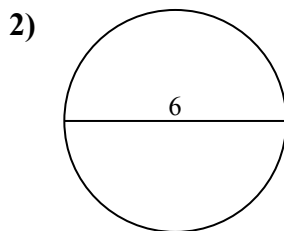
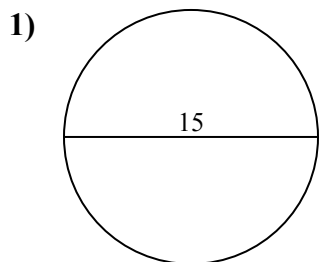


- 1. \_\_\_\_\_
- 2. \_\_\_\_\_
- 3. \_\_\_\_\_
- 4. \_\_\_\_\_
- 5. \_\_\_\_\_
- 6. \_\_\_\_\_
- 7. \_\_\_\_\_
- 8. \_\_\_\_\_
- 9. \_\_\_\_\_



Определите площадь каждого круга. Круги не являются шкалами.

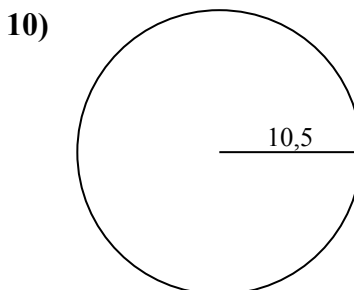
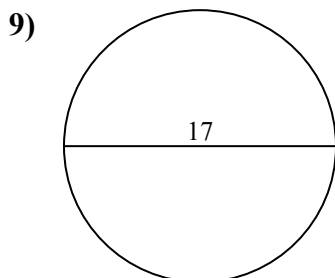
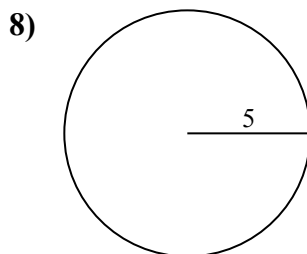
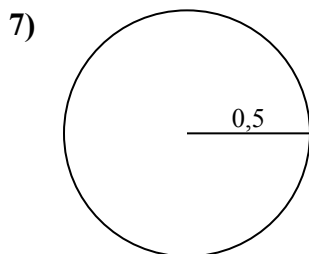
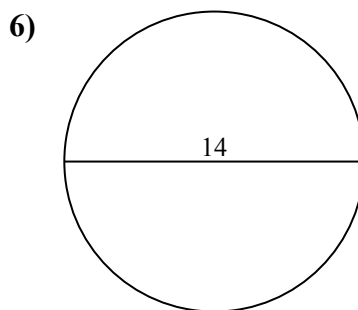
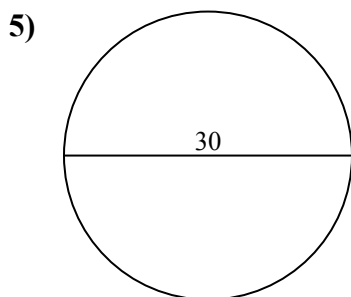
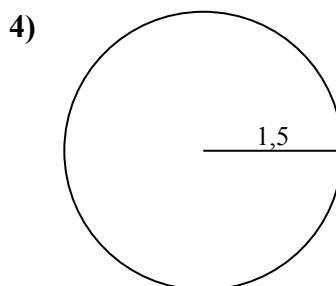
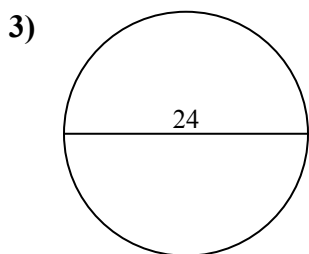
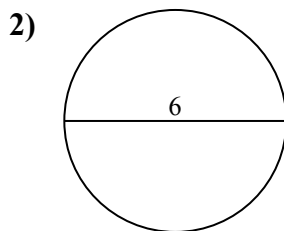
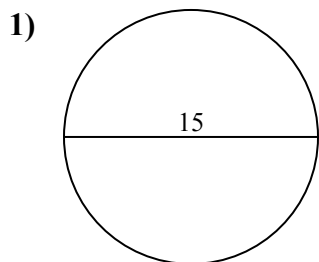
**ОТВЕТЫ**



- 1. \_\_\_\_\_
- 2. \_\_\_\_\_
- 3. \_\_\_\_\_
- 4. \_\_\_\_\_
- 5. \_\_\_\_\_
- 6. \_\_\_\_\_
- 7. \_\_\_\_\_
- 8. \_\_\_\_\_
- 9. \_\_\_\_\_
- 10. \_\_\_\_\_



Определите площадь каждого круга. Круги не являются шкалами.

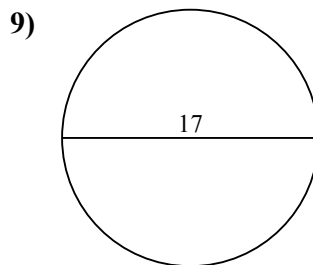
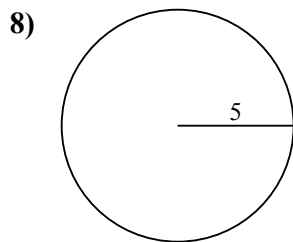
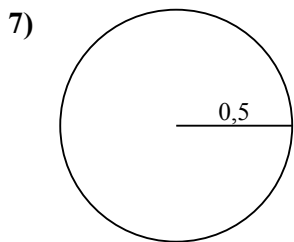
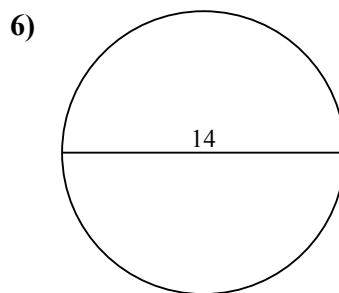
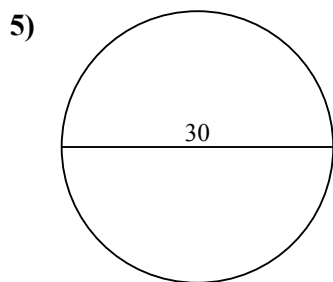
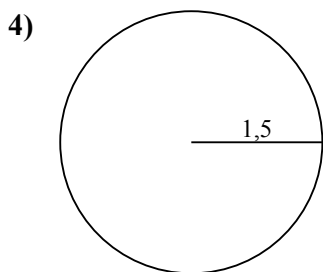
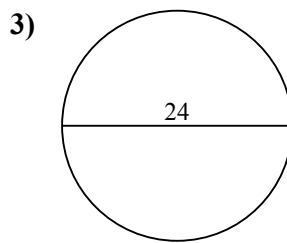
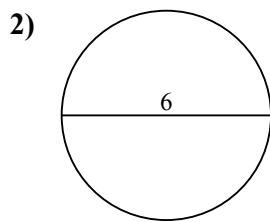
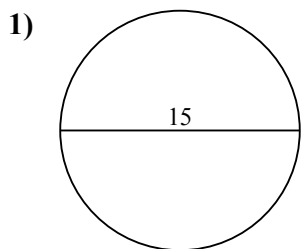
**ОТВЕТЫ**1. 176,72. 28,33. 452,44. 7,15. 706,96. 153,97. 0,88. 78,59. 22710. 346,4



Определите площадь каждого круга. Круги не являются шкалами.

452,4	0,8	153,9	7,1	227
28,3	78,5	706,9	176,7	

**ОТВЕТЫ**



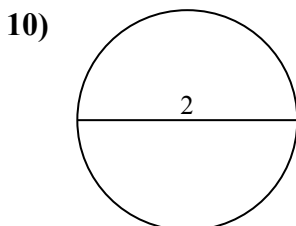
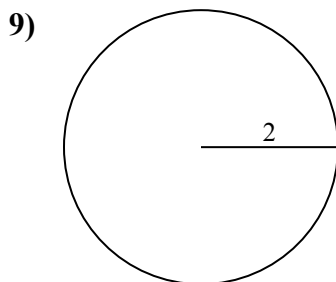
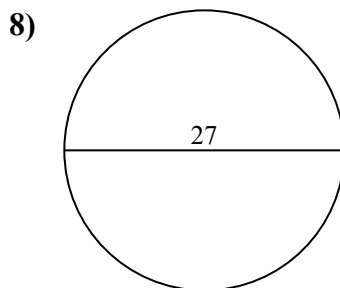
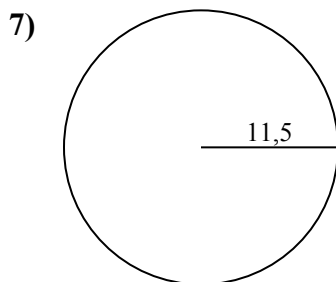
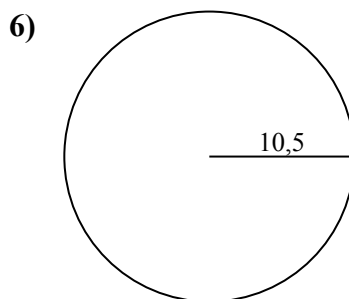
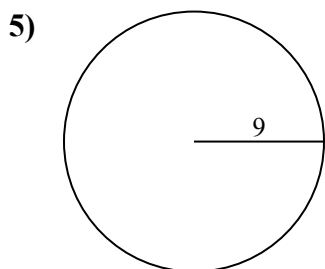
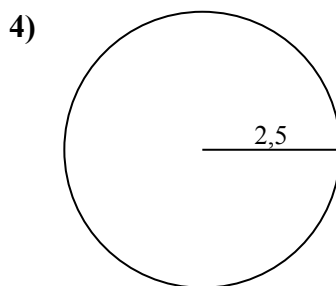
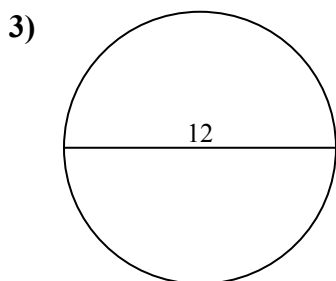
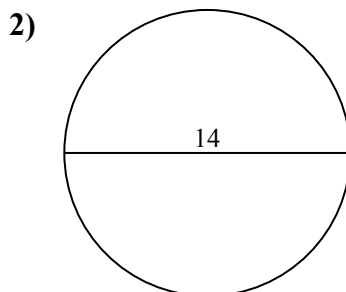
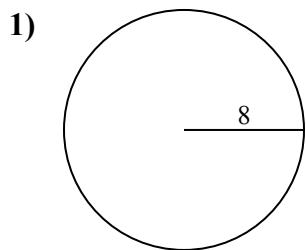
- 1. \_\_\_\_\_
- 2. \_\_\_\_\_
- 3. \_\_\_\_\_
- 4. \_\_\_\_\_
- 5. \_\_\_\_\_
- 6. \_\_\_\_\_
- 7. \_\_\_\_\_
- 8. \_\_\_\_\_
- 9. \_\_\_\_\_





Определите площадь каждого круга. Круги не являются шкалами.

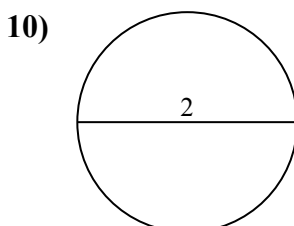
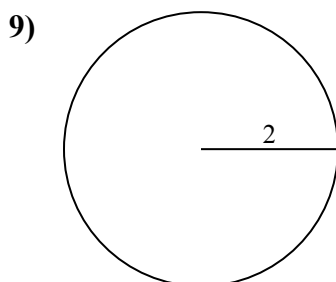
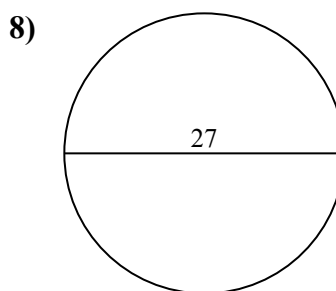
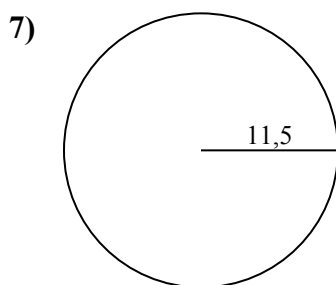
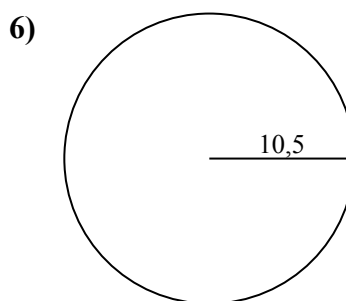
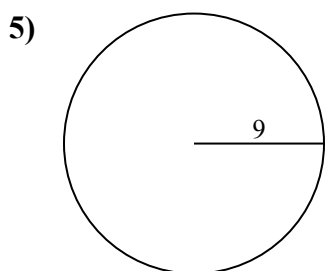
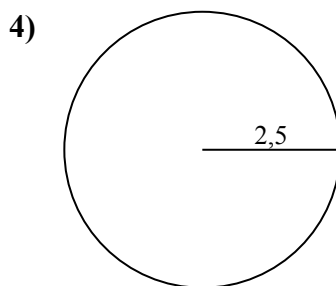
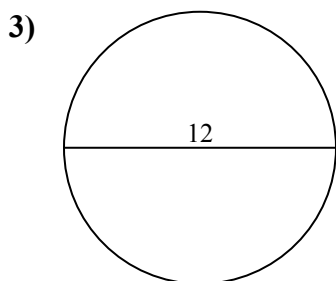
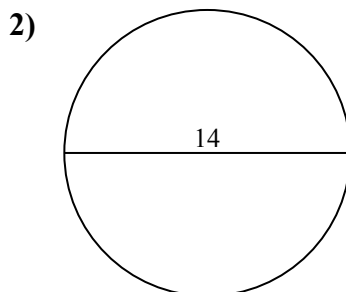
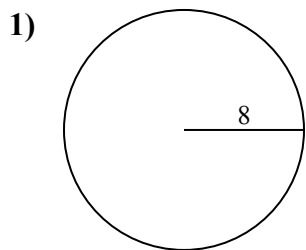
**ОТВЕТЫ**



- 1. \_\_\_\_\_
- 2. \_\_\_\_\_
- 3. \_\_\_\_\_
- 4. \_\_\_\_\_
- 5. \_\_\_\_\_
- 6. \_\_\_\_\_
- 7. \_\_\_\_\_
- 8. \_\_\_\_\_
- 9. \_\_\_\_\_
- 10. \_\_\_\_\_



Определите площадь каждого круга. Круги не являются шкалами.



**ОТВЕТЫ**

1. 201,1

2. 153,9

3. 113,1

4. 19,6

5. 254,5

6. 346,4

7. 415,5

8. 572,6

9. 12,6

10. 3,1

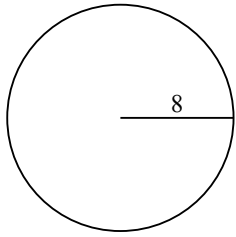


Определите площадь каждого круга. Круги не являются шкалами.

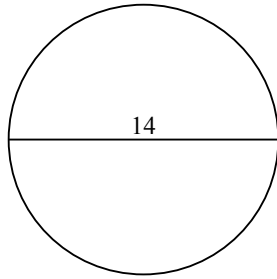
572,6	113,1	415,5	12,6	346,4
201,1	153,9	254,5	19,6	

**ОТВЕТЫ**

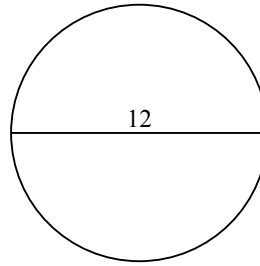
1)



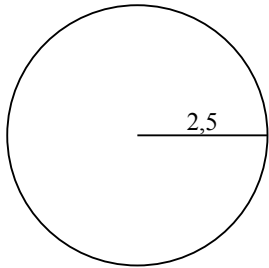
2)



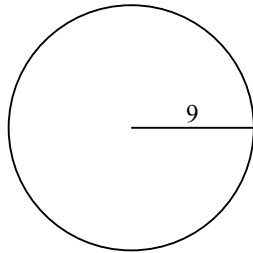
3)



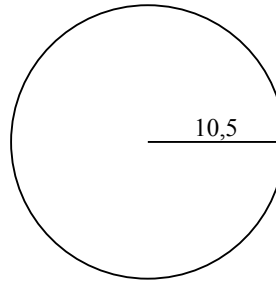
4)



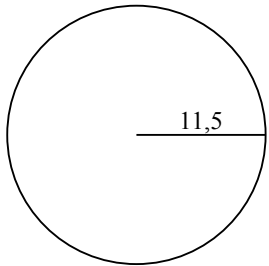
5)



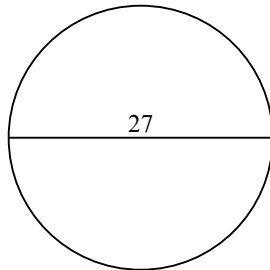
6)



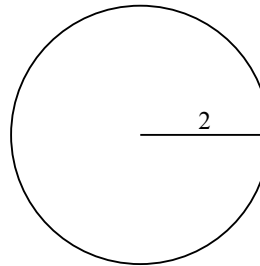
7)



8)



9)

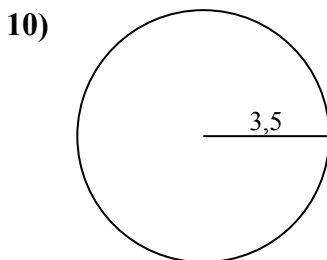
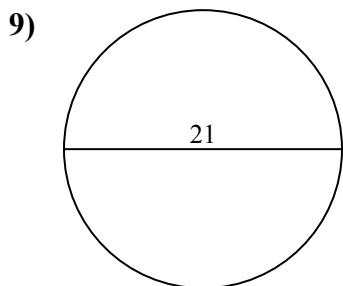
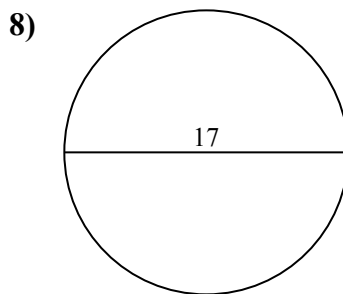
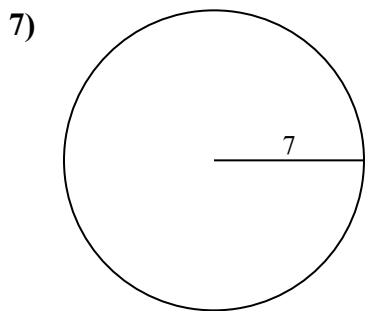
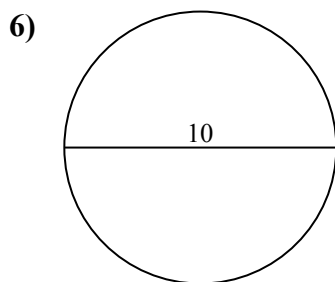
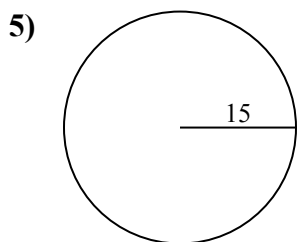
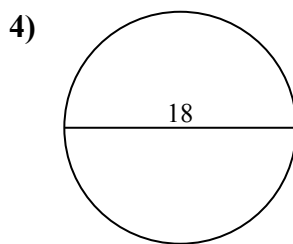
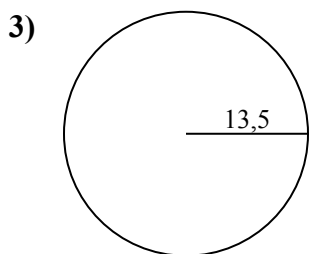
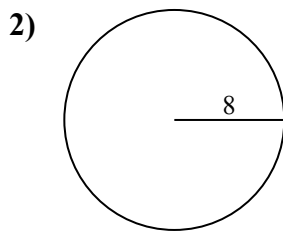
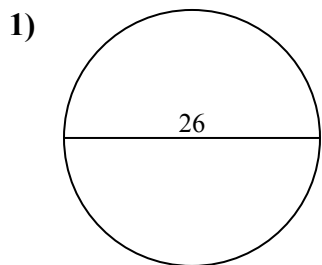


- 1. \_\_\_\_\_
- 2. \_\_\_\_\_
- 3. \_\_\_\_\_
- 4. \_\_\_\_\_
- 5. \_\_\_\_\_
- 6. \_\_\_\_\_
- 7. \_\_\_\_\_
- 8. \_\_\_\_\_
- 9. \_\_\_\_\_



Определите площадь каждого круга. Круги не являются шкалами.

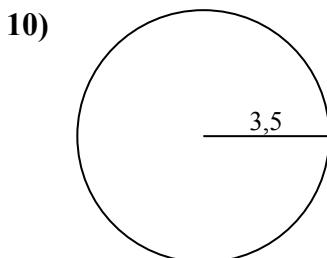
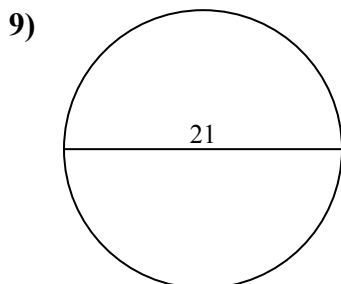
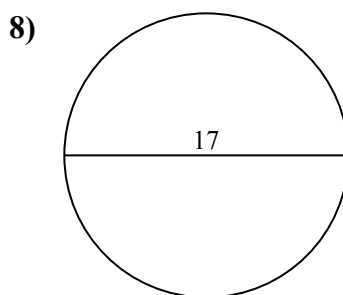
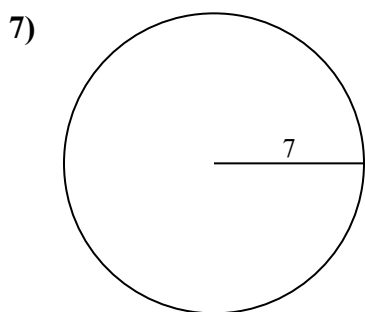
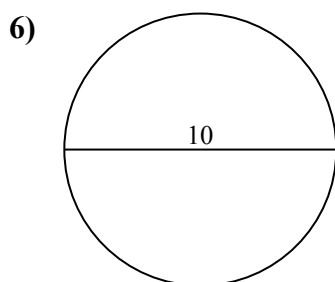
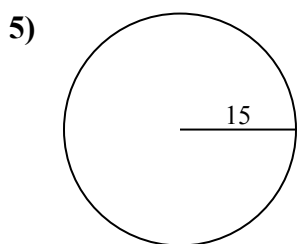
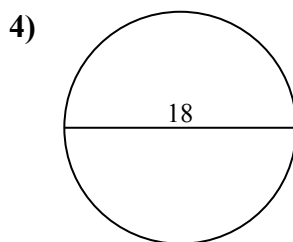
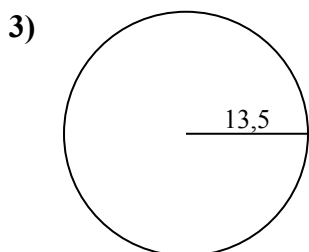
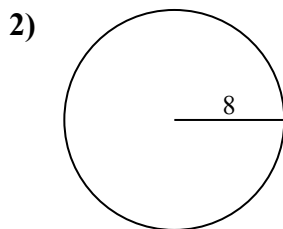
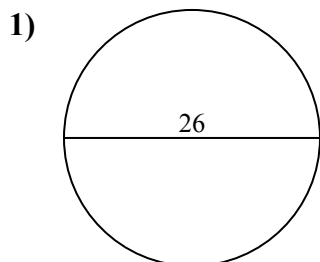
**ОТВЕТЫ**



- 1. \_\_\_\_\_
- 2. \_\_\_\_\_
- 3. \_\_\_\_\_
- 4. \_\_\_\_\_
- 5. \_\_\_\_\_
- 6. \_\_\_\_\_
- 7. \_\_\_\_\_
- 8. \_\_\_\_\_
- 9. \_\_\_\_\_
- 10. \_\_\_\_\_



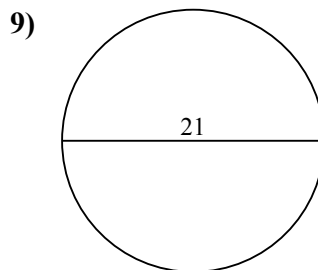
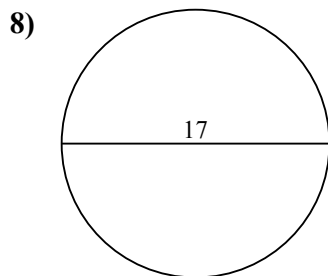
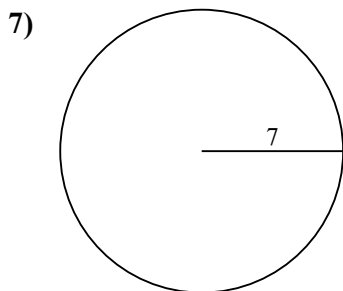
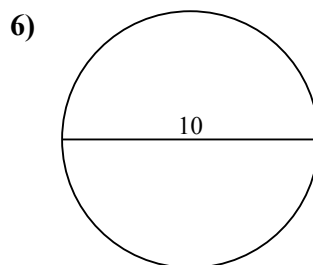
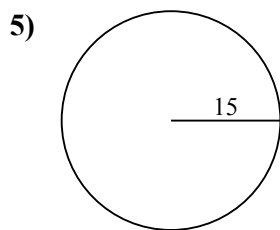
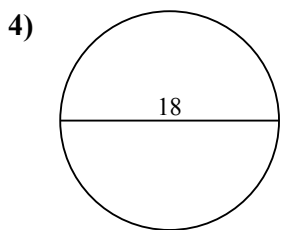
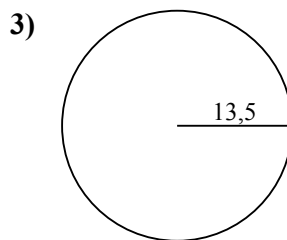
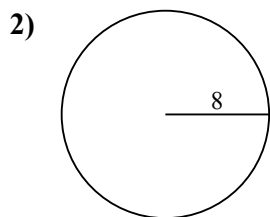
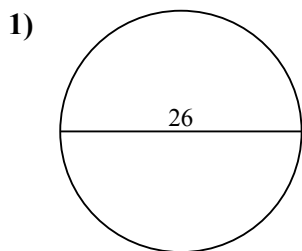
Определите площадь каждого круга. Круги не являются шкалами.

**ОТВЕТЫ**1. 530,92. 201,13. 572,64. 254,55. 706,96. 78,57. 153,98. 2279. 346,410. 38,5



Определите площадь каждого круга. Круги не являются шкалами.

572,6	78,5	227	346,4	530,9
153,9	201,1	706,9	254,5	



**ОТВЕТЫ**

- 1. \_\_\_\_\_
- 2. \_\_\_\_\_
- 3. \_\_\_\_\_
- 4. \_\_\_\_\_
- 5. \_\_\_\_\_
- 6. \_\_\_\_\_
- 7. \_\_\_\_\_
- 8. \_\_\_\_\_
- 9. \_\_\_\_\_