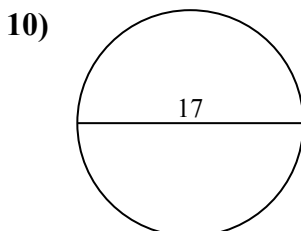
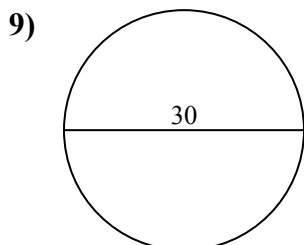
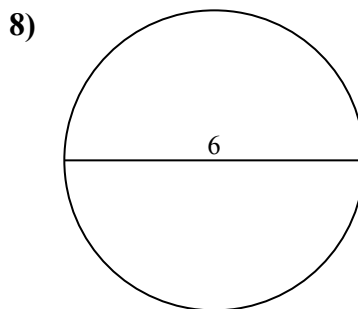
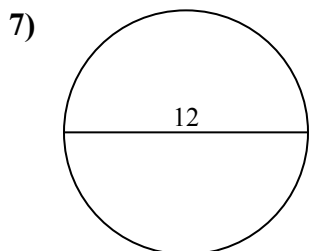
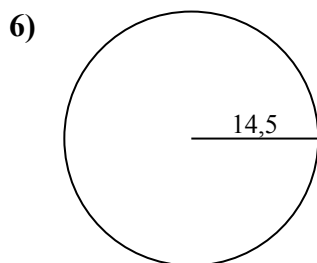
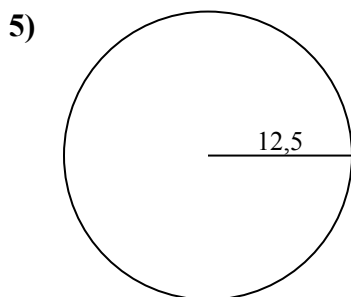
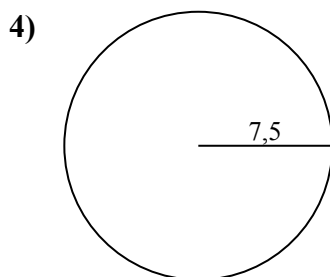
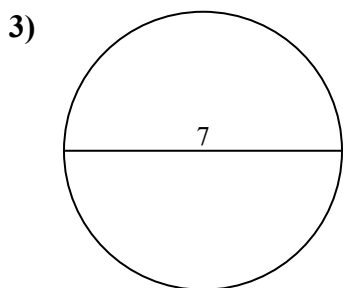
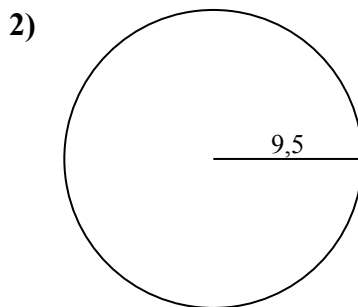
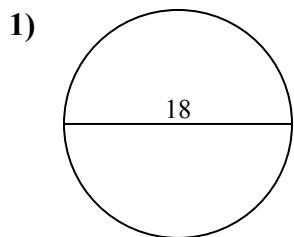




Определите площадь каждого круга. Круги не являются шкалами.

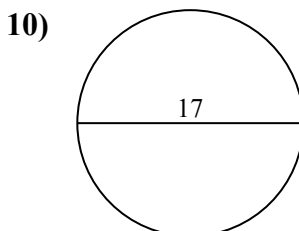
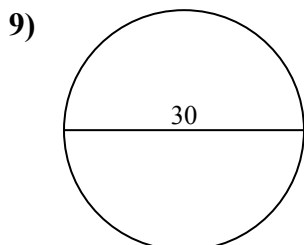
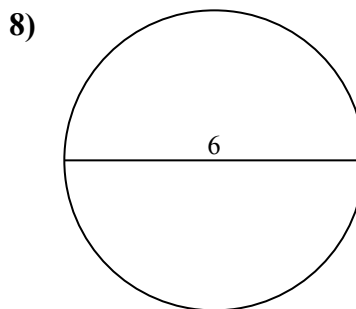
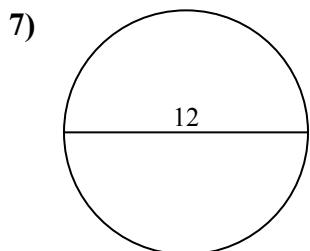
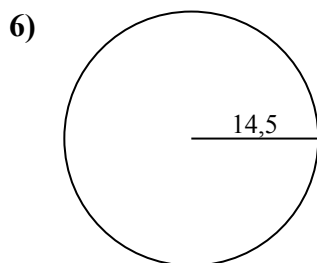
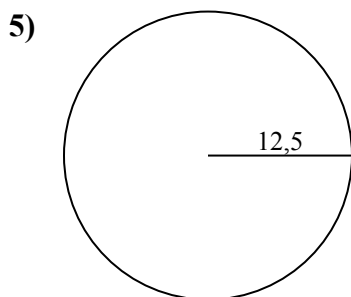
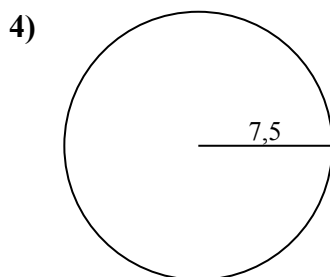
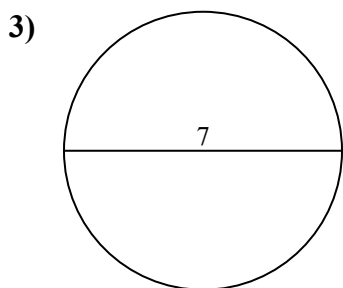
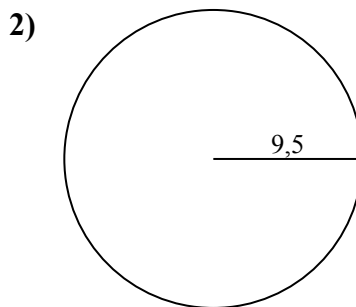
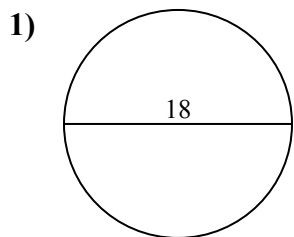
ОТВЕТЫ



- 1. _____
- 2. _____
- 3. _____
- 4. _____
- 5. _____
- 6. _____
- 7. _____
- 8. _____
- 9. _____
- 10. _____



Определите площадь каждого круга. Круги не являются шкалами.



ОТВЕТЫ

1. 254,5

2. 283,5

3. 38,5

4. 176,7

5. 490,9

6. 660,5

7. 113,1

8. 28,3

9. 706,9

10. 227

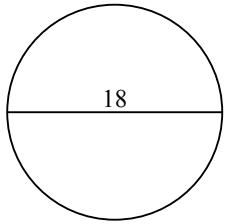


Определите площадь каждого круга. Круги не являются шкалами.

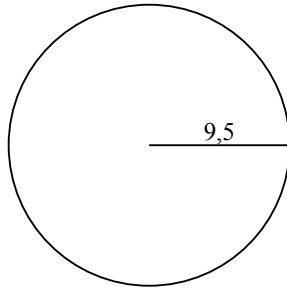
283,5	254,5	113,1	176,7	660,5
490,9	38,5	28,3	706,9	

ОТВЕТЫ

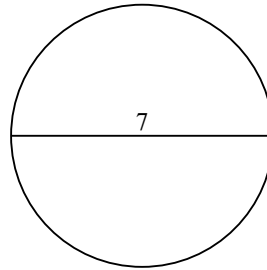
1)



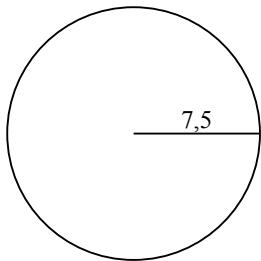
2)



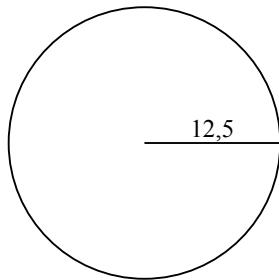
3)



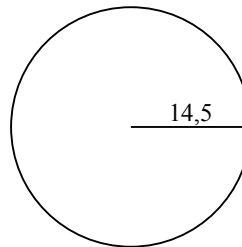
4)



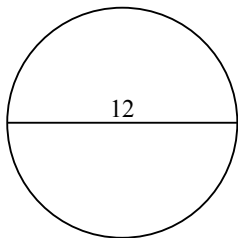
5)



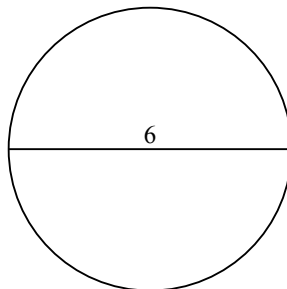
6)



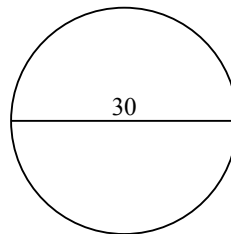
7)



8)



9)



- 1. _____
- 2. _____
- 3. _____
- 4. _____
- 5. _____
- 6. _____
- 7. _____
- 8. _____
- 9. _____