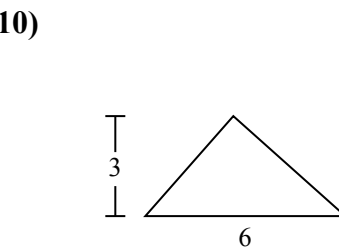
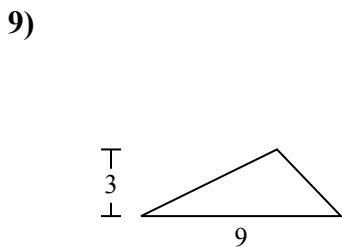
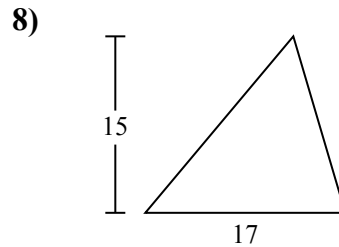
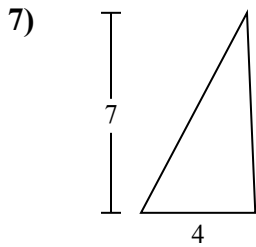
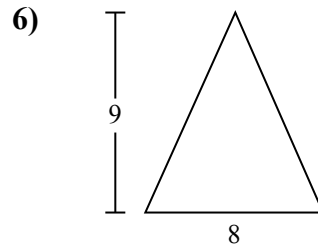
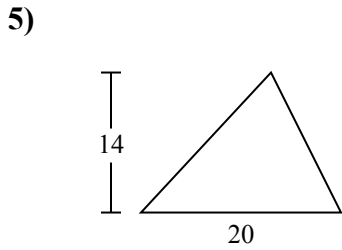
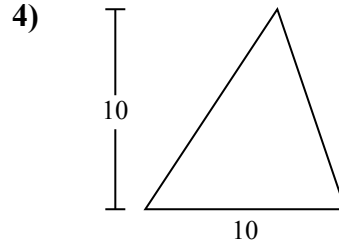
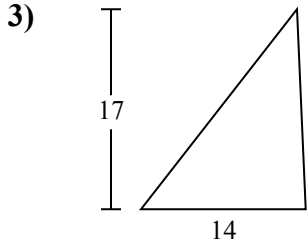
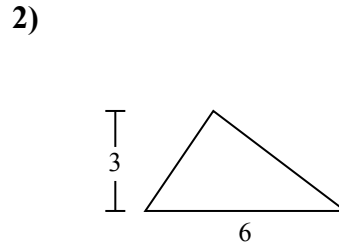
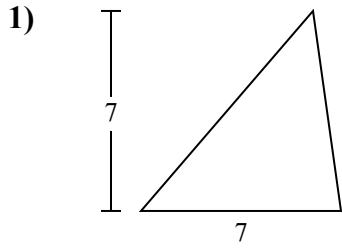




Определите площадь каждого треугольника. Единицы не являются шкалами.

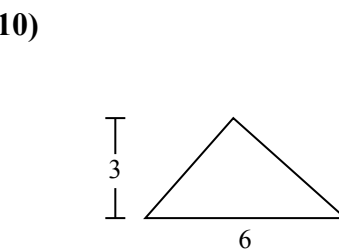
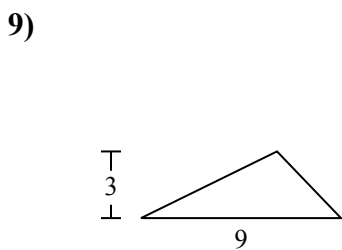
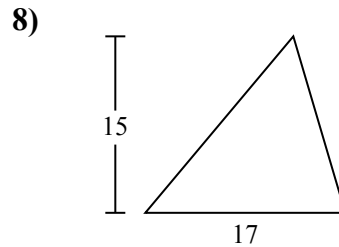
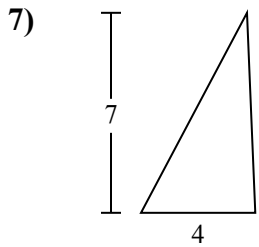
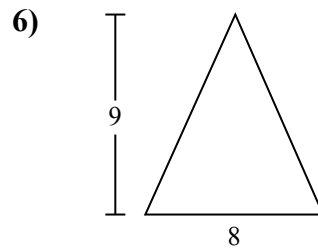
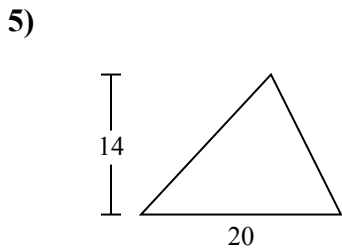
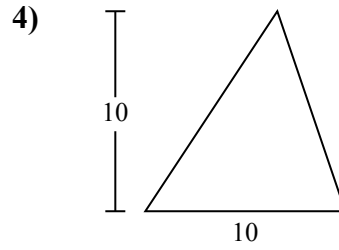
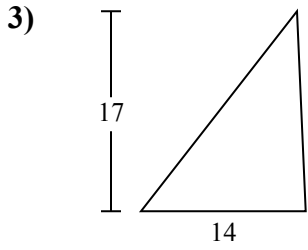
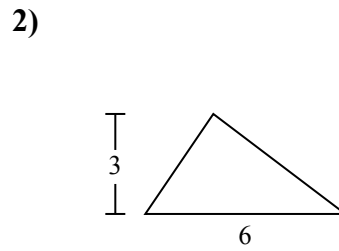
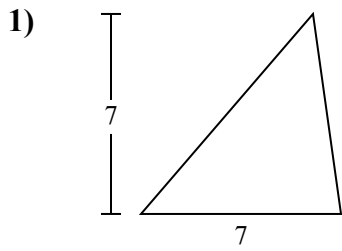


ОТВЕТЫ

- 1. _____
- 2. _____
- 3. _____
- 4. _____
- 5. _____
- 6. _____
- 7. _____
- 8. _____
- 9. _____
- 10. _____



Определите площадь каждого треугольника. Единицы не являются шкалами.



ОТВЕТЫ

1. 24,5
2. 9
3. 119
4. 50
5. 140
6. 36
7. 14
8. 127,5
9. 13,5
10. 9



Определите площадь каждого треугольника. Единицы не являются шкалами.

127,5

13,5

119

140

14

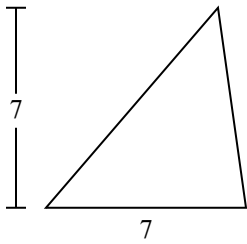
24,5

9

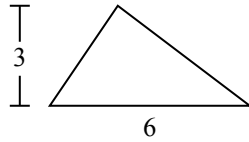
36

50

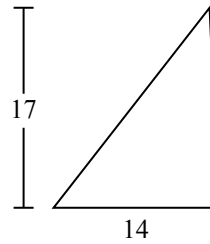
1)



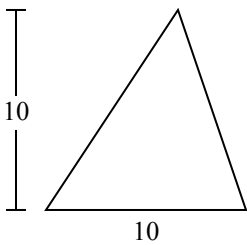
2)



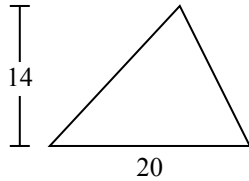
3)



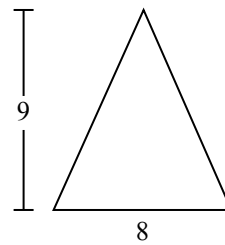
4)



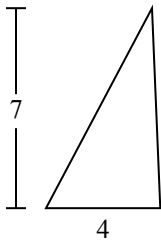
5)



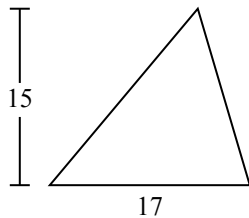
6)



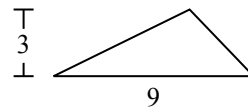
7)



8)



9)



ОТВЕТЫ

1. _____
2. _____
3. _____
4. _____
5. _____
6. _____
7. _____
8. _____
9. _____