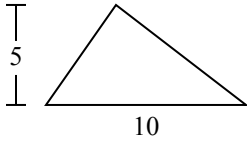




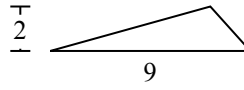
Определите площадь каждого треугольника. Единицы не являются шкалами.

**ОТВЕТЫ**

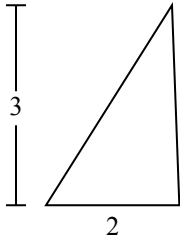
1)



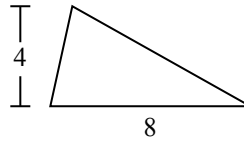
2)



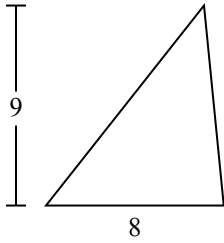
3)



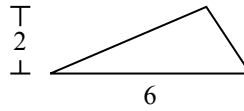
4)



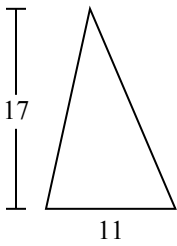
5)



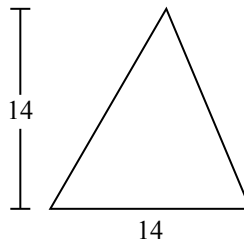
6)



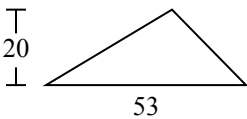
7)



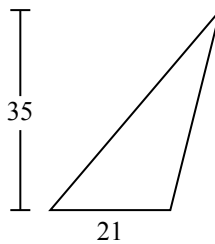
8)



9)



10)

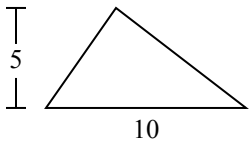


1. \_\_\_\_\_
2. \_\_\_\_\_
3. \_\_\_\_\_
4. \_\_\_\_\_
5. \_\_\_\_\_
6. \_\_\_\_\_
7. \_\_\_\_\_
8. \_\_\_\_\_
9. \_\_\_\_\_
10. \_\_\_\_\_

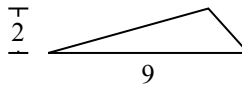


Определите площадь каждого треугольника. Единицы не являются шкалами.

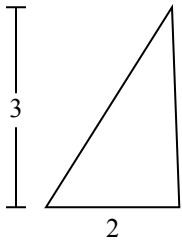
1)



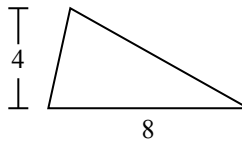
2)



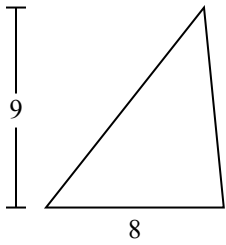
3)



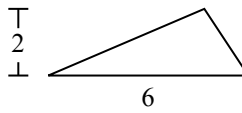
4)



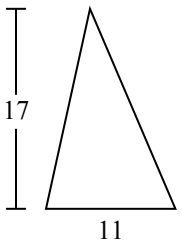
5)



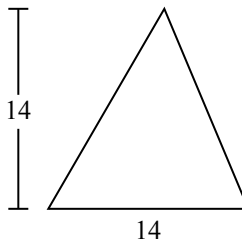
6)



7)



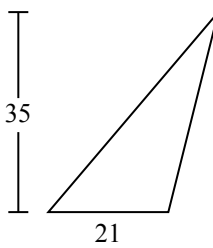
8)



9)



10)



**ОТВЕТЫ**

1. 25
2. 9
3. 3
4. 16
5. 36
6. 6
7. 93,5
8. 98
9. 530
10. 367,5

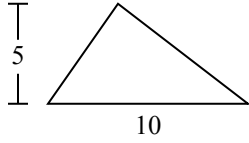


Определите площадь каждого треугольника. Единицы не являются шкалами.

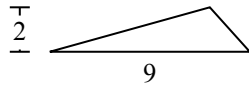
93,5	98	530	25	9
6	36	16	3	

ОТВЕТЫ

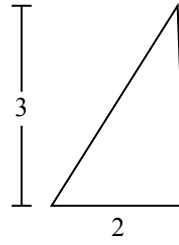
1)



2)



3)



1. \_\_\_\_\_

2. \_\_\_\_\_

3. \_\_\_\_\_

4. \_\_\_\_\_

5. \_\_\_\_\_

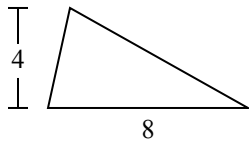
6. \_\_\_\_\_

7. \_\_\_\_\_

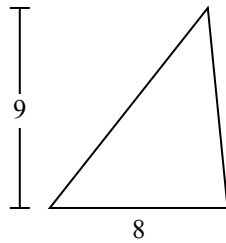
8. \_\_\_\_\_

9. \_\_\_\_\_

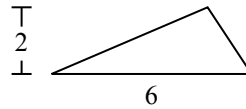
4)



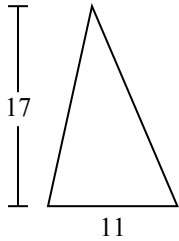
5)



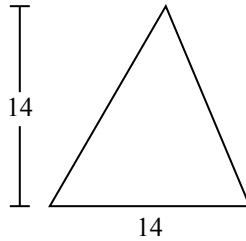
6)



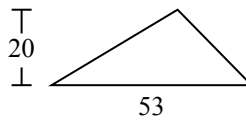
7)



8)



9)

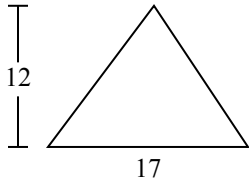




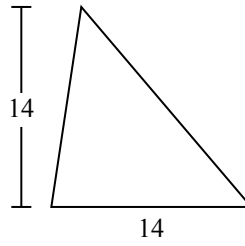
Определите площадь каждого треугольника. Единицы не являются шкалами.

**ОТВЕТЫ**

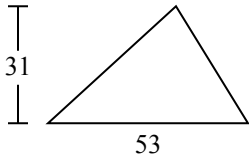
1)



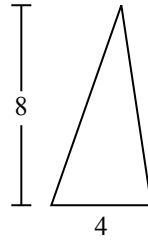
2)



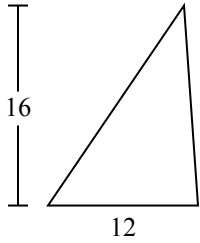
3)



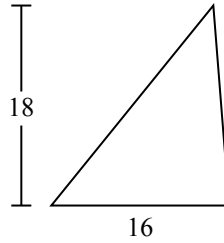
4)



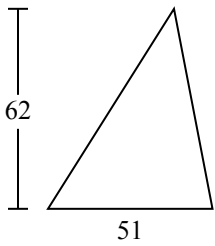
5)



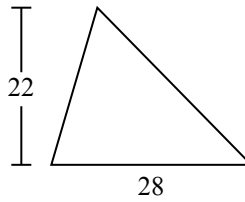
6)



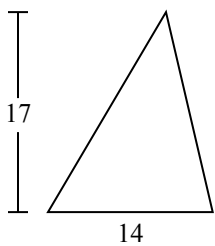
7)



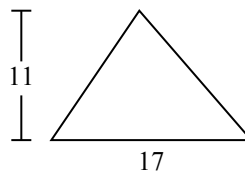
8)



9)



10)

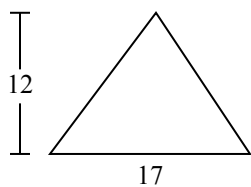


- 1. \_\_\_\_\_
- 2. \_\_\_\_\_
- 3. \_\_\_\_\_
- 4. \_\_\_\_\_
- 5. \_\_\_\_\_
- 6. \_\_\_\_\_
- 7. \_\_\_\_\_
- 8. \_\_\_\_\_
- 9. \_\_\_\_\_
- 10. \_\_\_\_\_

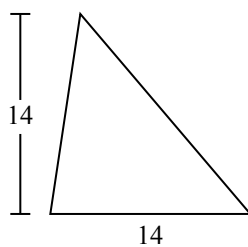


Определите площадь каждого треугольника. Единицы не являются шкалами.

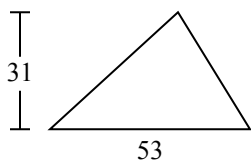
1)



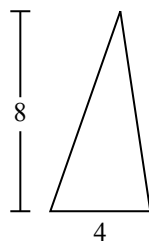
2)



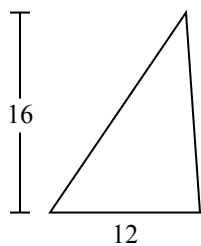
3)



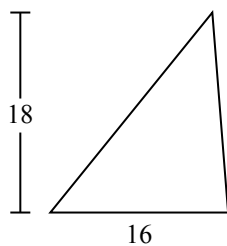
4)



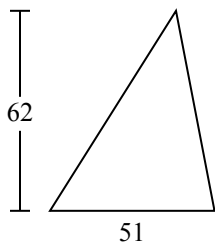
5)



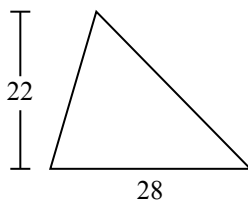
6)



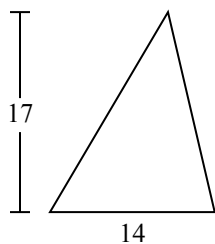
7)



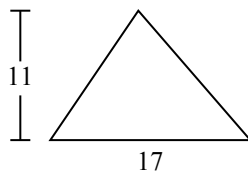
8)



9)



10)

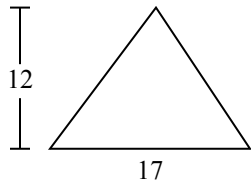
**ОТВЕТЫ**1. 1022. 983. 821,54. 165. 966. 1447. 1 5818. 3089. 11910. 93,5



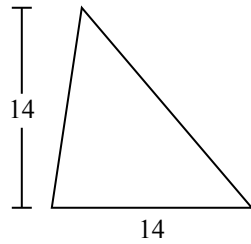
Определите площадь каждого треугольника. Единицы не являются шкалами.

102	1 581	308	144	16
119	821,5	98	96	

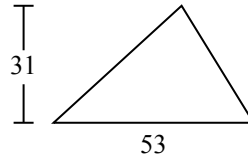
1)



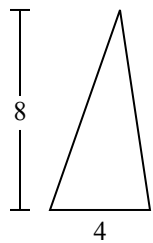
2)



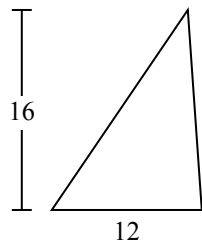
3)



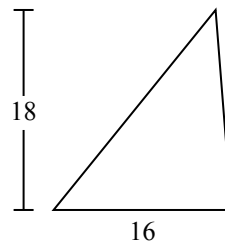
4)



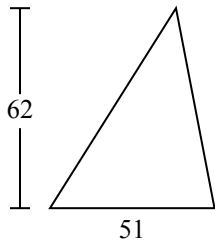
5)



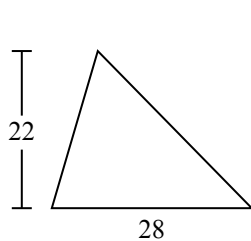
6)



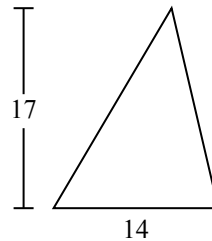
7)



8)



9)



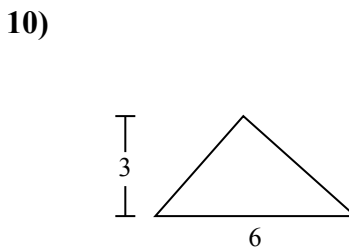
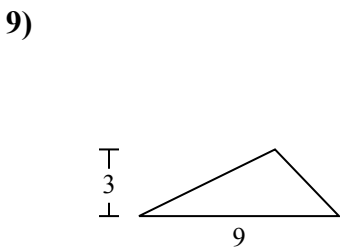
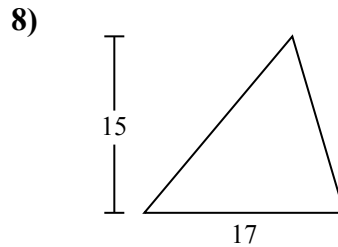
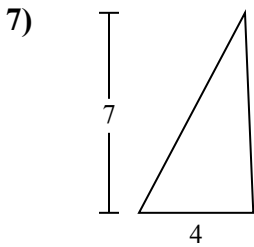
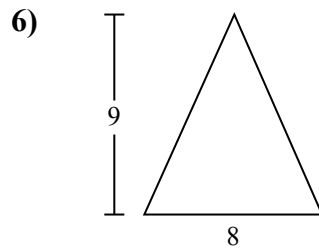
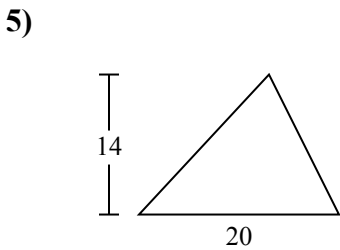
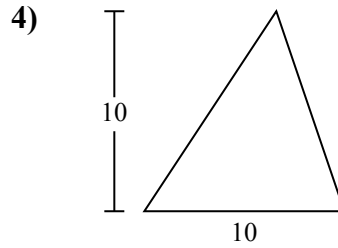
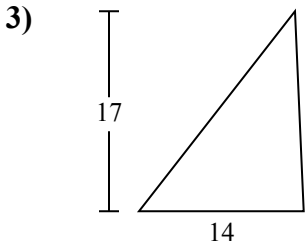
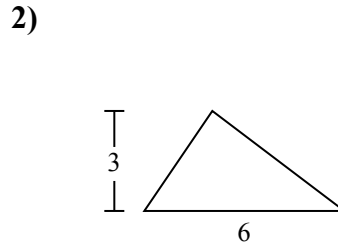
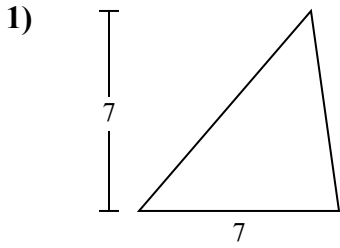
**ОТВЕТЫ**

1. \_\_\_\_\_
2. \_\_\_\_\_
3. \_\_\_\_\_
4. \_\_\_\_\_
5. \_\_\_\_\_
6. \_\_\_\_\_
7. \_\_\_\_\_
8. \_\_\_\_\_
9. \_\_\_\_\_



Определите площадь каждого треугольника. Единицы не являются шкалами.

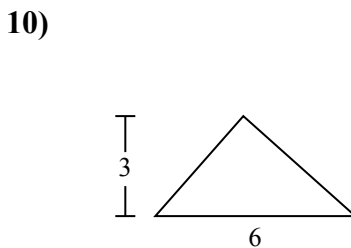
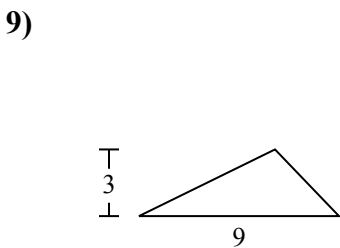
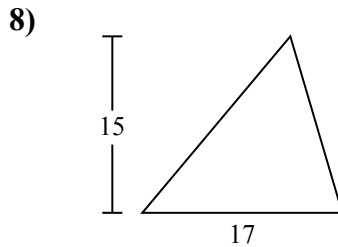
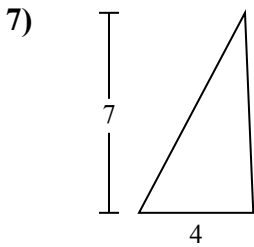
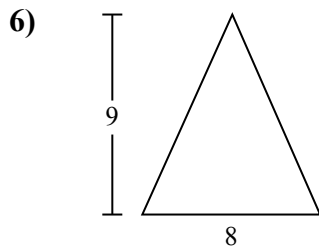
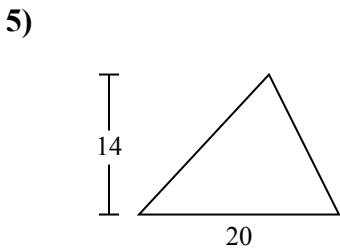
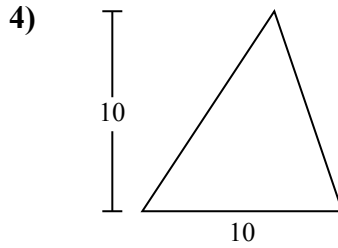
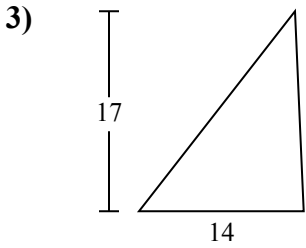
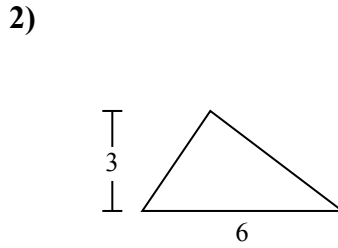
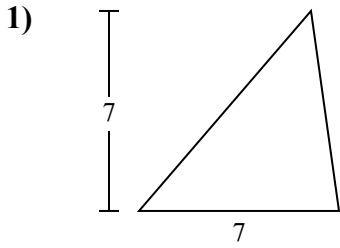
**ОТВЕТЫ**



1. \_\_\_\_\_
2. \_\_\_\_\_
3. \_\_\_\_\_
4. \_\_\_\_\_
5. \_\_\_\_\_
6. \_\_\_\_\_
7. \_\_\_\_\_
8. \_\_\_\_\_
9. \_\_\_\_\_
10. \_\_\_\_\_



Определите площадь каждого треугольника. Единицы не являются шкалами.



**ОТВЕТЫ**

1. 24,5
2. 9
3. 119
4. 50
5. 140
6. 36
7. 14
8. 127,5
9. 13,5
10. 9





Определите площадь каждого треугольника. Единицы не являются шкалами.

127,5

13,5

119

140

14

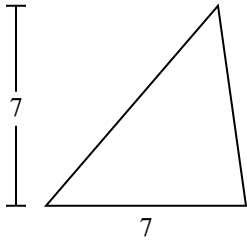
24,5

9

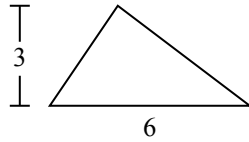
36

50

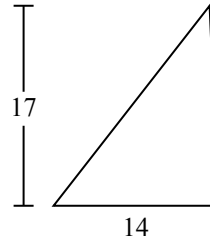
1)



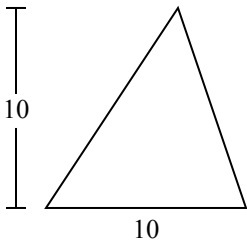
2)



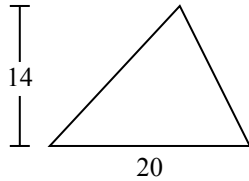
3)



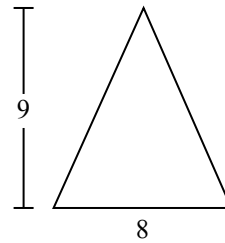
4)



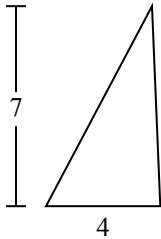
5)



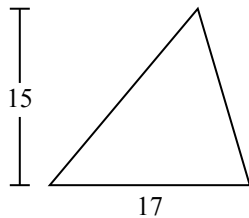
6)



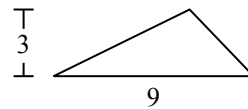
7)



8)



9)



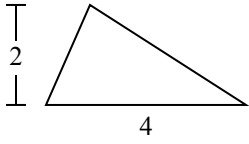
ОТВЕТЫ

1. \_\_\_\_\_
2. \_\_\_\_\_
3. \_\_\_\_\_
4. \_\_\_\_\_
5. \_\_\_\_\_
6. \_\_\_\_\_
7. \_\_\_\_\_
8. \_\_\_\_\_
9. \_\_\_\_\_

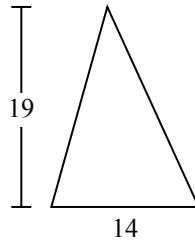


Определите площадь каждого треугольника. Единицы не являются шкалами.

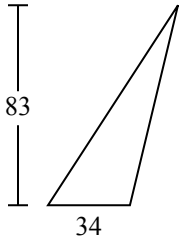
1)



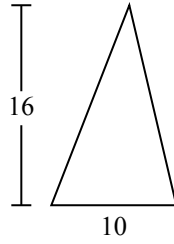
2)



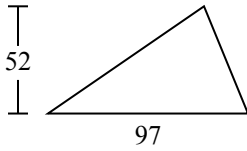
3)



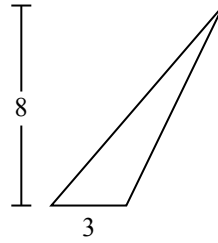
4)



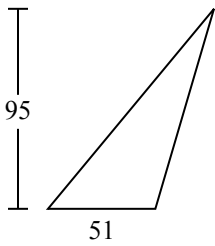
5)



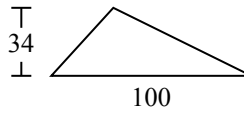
6)



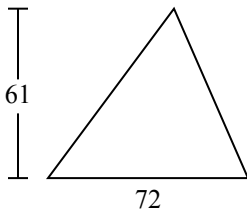
7)



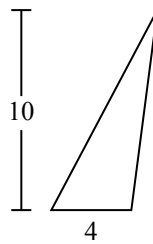
8)



9)



10)



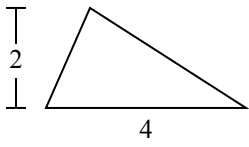
**ОТВЕТЫ**

1. \_\_\_\_\_
2. \_\_\_\_\_
3. \_\_\_\_\_
4. \_\_\_\_\_
5. \_\_\_\_\_
6. \_\_\_\_\_
7. \_\_\_\_\_
8. \_\_\_\_\_
9. \_\_\_\_\_
10. \_\_\_\_\_

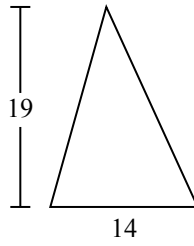


Определите площадь каждого треугольника. Единицы не являются шкалами.

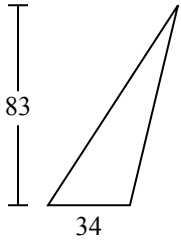
1)



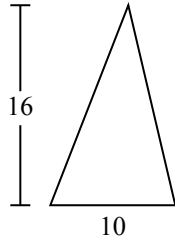
2)



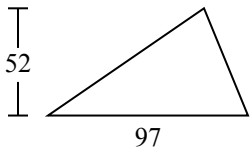
3)



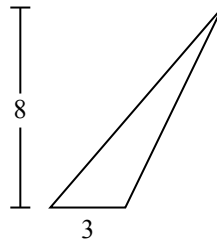
4)



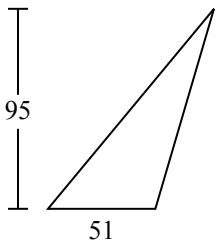
5)



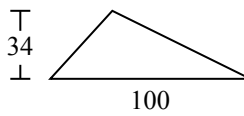
6)



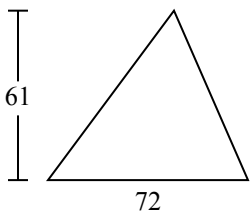
7)



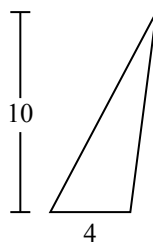
8)



9)



10)



**ОТВЕТЫ**

1. 4
2. 133
3. 1 411
4. 80
5. 2 522
6. 12
7. 2 422,5
8. 1 700
9. 2 196
10. 20



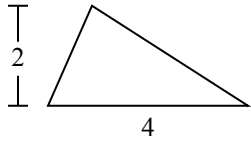
Определите площадь каждого треугольника. Единицы не являются шкалами.

133	4	1 411	2 522	2 196
1 700	2 422,5	80	12	

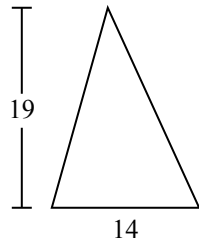
ОТВЕТЫ

1. \_\_\_\_\_
2. \_\_\_\_\_
3. \_\_\_\_\_
4. \_\_\_\_\_
5. \_\_\_\_\_
6. \_\_\_\_\_
7. \_\_\_\_\_
8. \_\_\_\_\_
9. \_\_\_\_\_

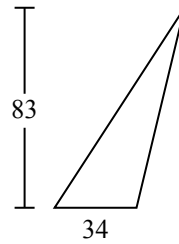
1)



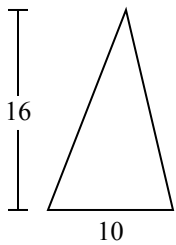
2)



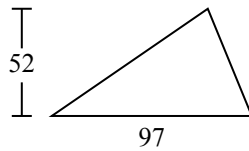
3)



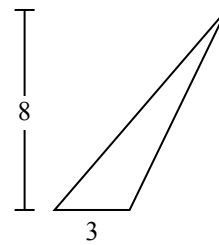
4)



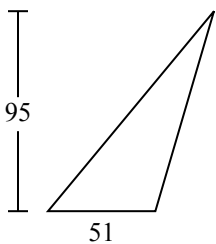
5)



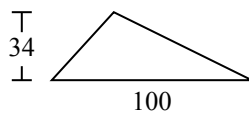
6)



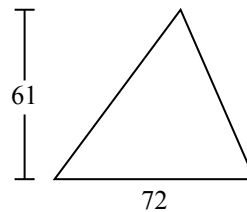
7)



8)



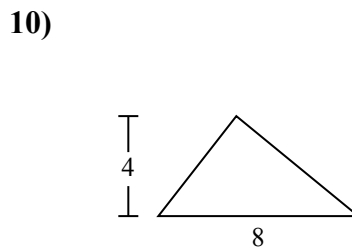
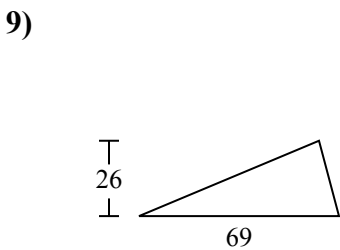
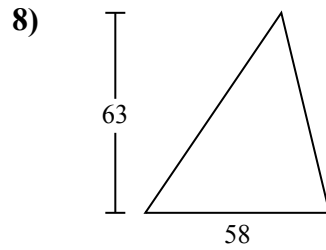
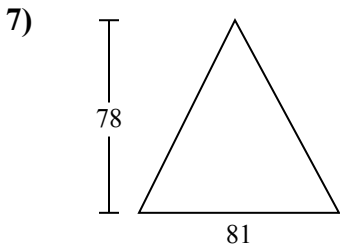
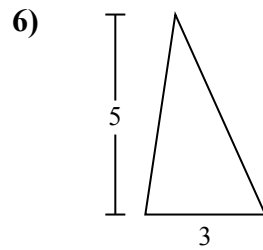
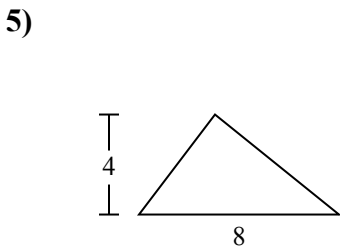
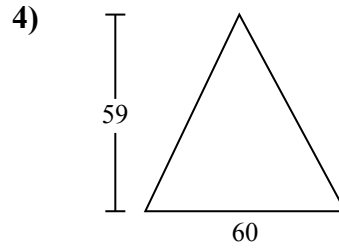
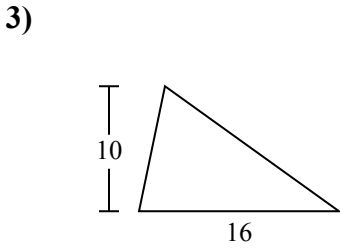
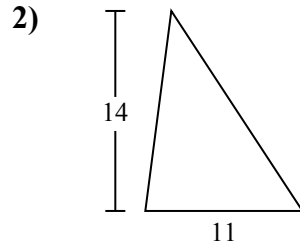
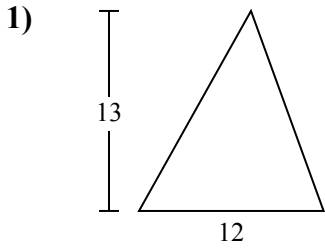
9)





Определите площадь каждого треугольника. Единицы не являются шкалами.

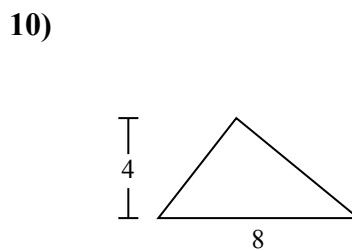
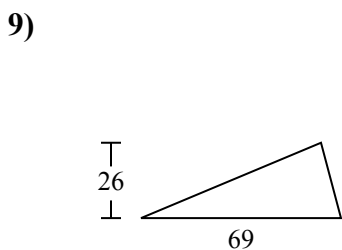
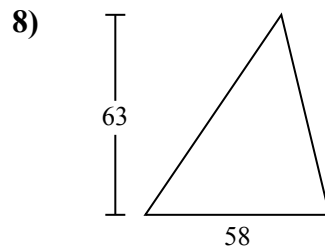
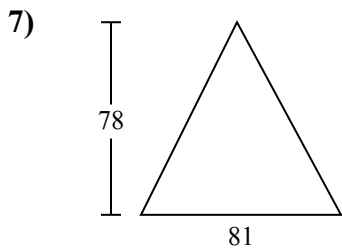
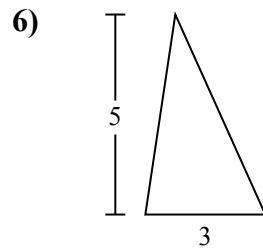
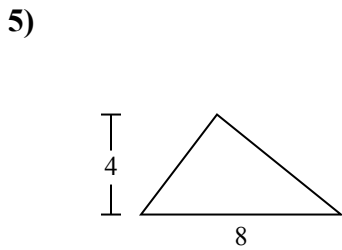
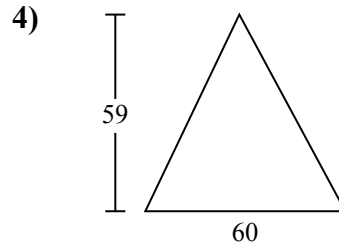
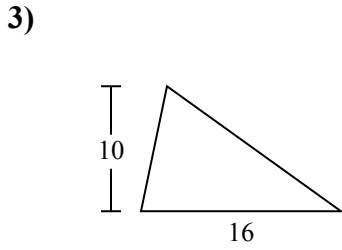
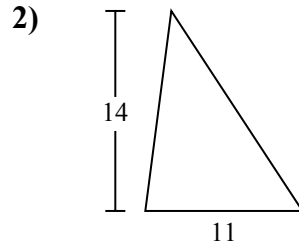
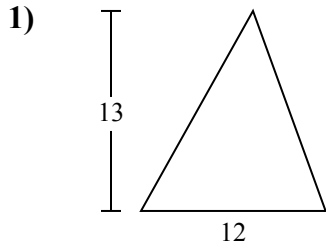
**ОТВЕТЫ**



- 1. \_\_\_\_\_
- 2. \_\_\_\_\_
- 3. \_\_\_\_\_
- 4. \_\_\_\_\_
- 5. \_\_\_\_\_
- 6. \_\_\_\_\_
- 7. \_\_\_\_\_
- 8. \_\_\_\_\_
- 9. \_\_\_\_\_
- 10. \_\_\_\_\_



Определите площадь каждого треугольника. Единицы не являются шкалами.



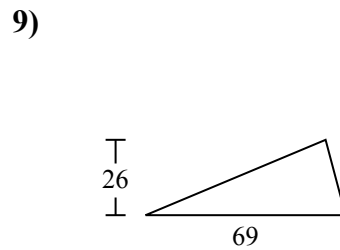
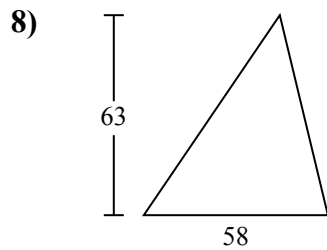
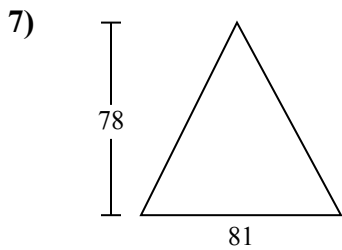
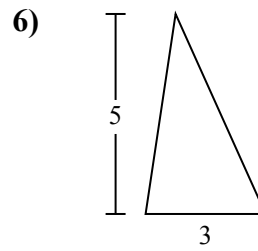
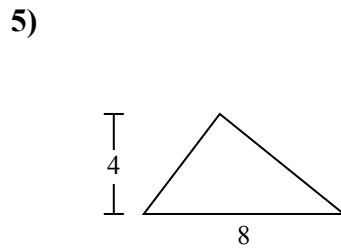
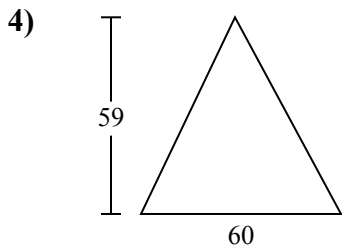
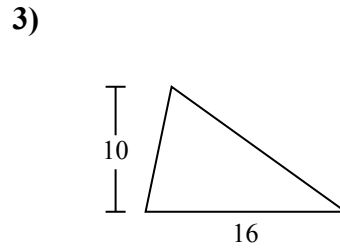
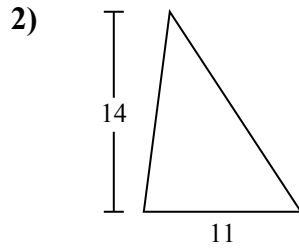
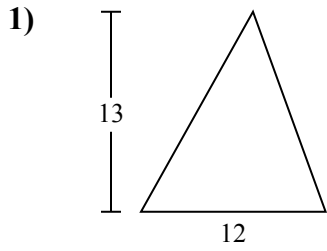
**ОТВЕТЫ**

- 1. 78
- 2. 77
- 3. 80
- 4. 1 770
- 5. 16
- 6. 7,5
- 7. 3 159
- 8. 1 827
- 9. 897
- 10. 16



Определите площадь каждого треугольника. Единицы не являются шкалами.

1 827	1 770	7,5	78	3 159
80	77	897	16	



ОТВЕТЫ

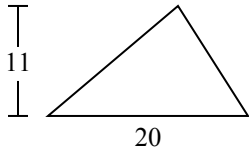
1. \_\_\_\_\_
2. \_\_\_\_\_
3. \_\_\_\_\_
4. \_\_\_\_\_
5. \_\_\_\_\_
6. \_\_\_\_\_
7. \_\_\_\_\_
8. \_\_\_\_\_
9. \_\_\_\_\_



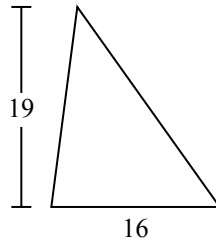
Определите площадь каждого треугольника. Единицы не являются шкалами.

**ОТВЕТЫ**

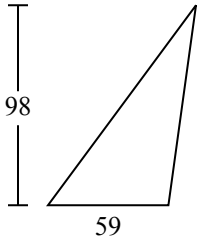
1)



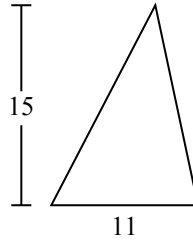
2)



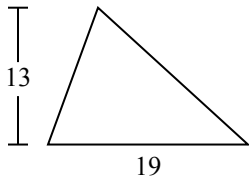
3)



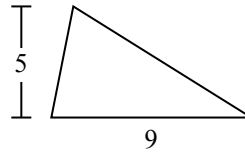
4)



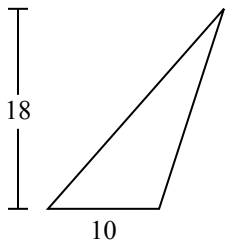
5)



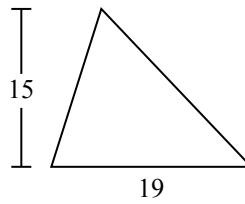
6)



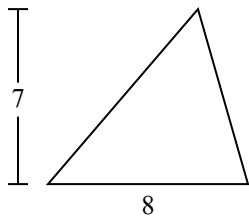
7)



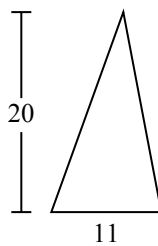
8)



9)



10)



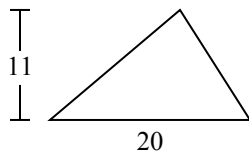
- 1. \_\_\_\_\_
- 2. \_\_\_\_\_
- 3. \_\_\_\_\_
- 4. \_\_\_\_\_
- 5. \_\_\_\_\_
- 6. \_\_\_\_\_
- 7. \_\_\_\_\_
- 8. \_\_\_\_\_
- 9. \_\_\_\_\_
- 10. \_\_\_\_\_



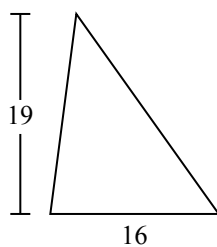


Определите площадь каждого треугольника. Единицы не являются шкалами.

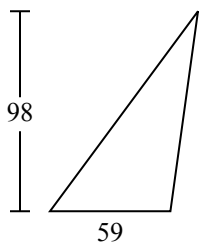
1)



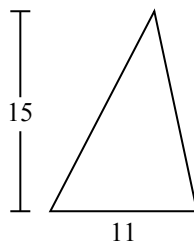
2)



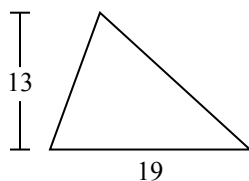
3)



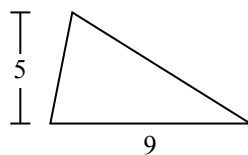
4)



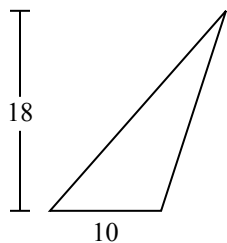
5)



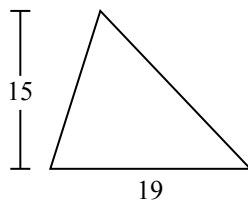
6)



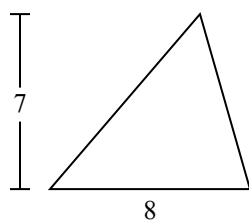
7)



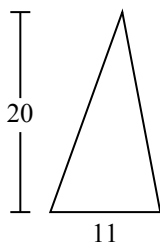
8)



9)



10)



**ОТВЕТЫ**

1. 110

2. 152

3. 2 891

4. 82,5

5. 123,5

6. 22,5

7. 90

8. 142,5

9. 28

10. 110

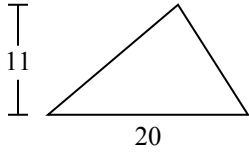


Определите площадь каждого треугольника. Единицы не являются шкалами.

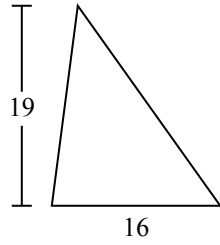
22,5	152	28	90	142,5
123,5	2 891	82,5	110	

**ОТВЕТЫ**

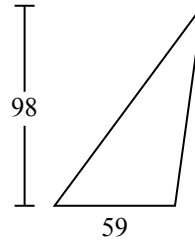
1)



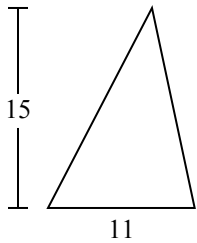
2)



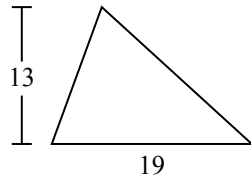
3)



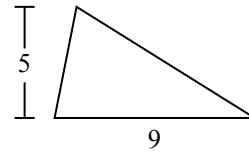
4)



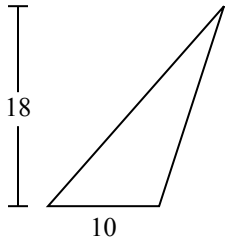
5)



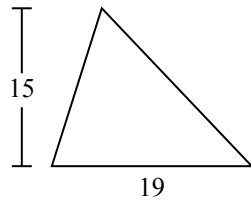
6)



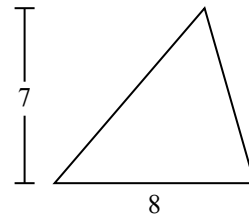
7)



8)



9)



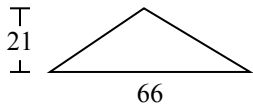
1. \_\_\_\_\_
2. \_\_\_\_\_
3. \_\_\_\_\_
4. \_\_\_\_\_
5. \_\_\_\_\_
6. \_\_\_\_\_
7. \_\_\_\_\_
8. \_\_\_\_\_
9. \_\_\_\_\_



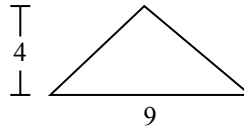
Определите площадь каждого треугольника. Единицы не являются шкалами.

**ОТВЕТЫ**

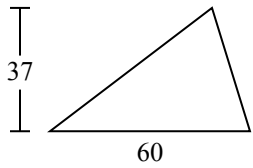
1)



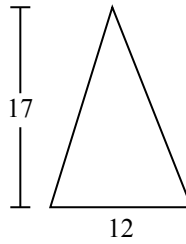
2)



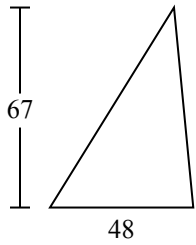
3)



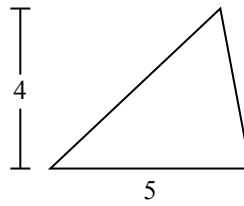
4)



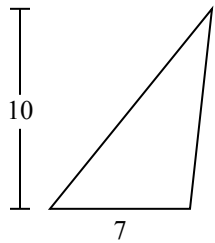
5)



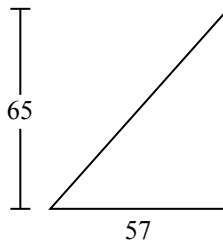
6)



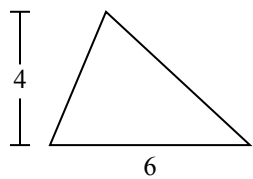
7)



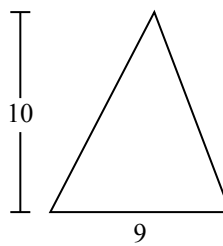
8)



9)



10)

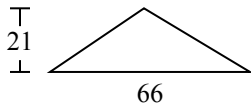


- 1. \_\_\_\_\_
- 2. \_\_\_\_\_
- 3. \_\_\_\_\_
- 4. \_\_\_\_\_
- 5. \_\_\_\_\_
- 6. \_\_\_\_\_
- 7. \_\_\_\_\_
- 8. \_\_\_\_\_
- 9. \_\_\_\_\_
- 10. \_\_\_\_\_

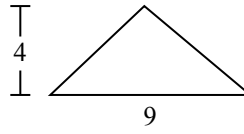


Определите площадь каждого треугольника. Единицы не являются шкалами.

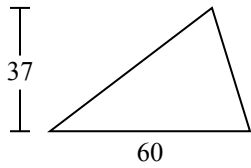
1)



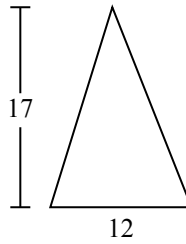
2)



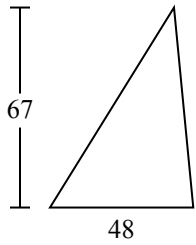
3)



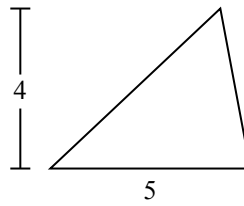
4)



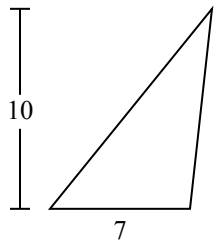
5)



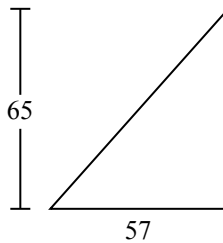
6)



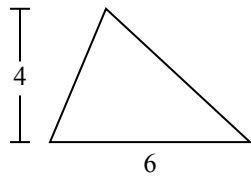
7)



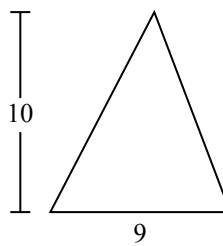
8)



9)



10)



**ОТВЕТЫ**

1. 693

2. 18

3. 1 110

4. 102

5. 1 608

6. 10

7. 35

8. 1 852,5

9. 12

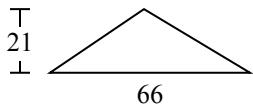
10. 45



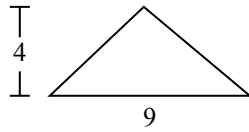
Определите площадь каждого треугольника. Единицы не являются шкалами.

1 110	693	102	1 852,5	10
18	12	1 608	35	

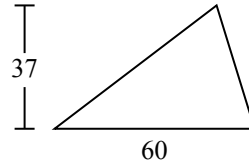
1)



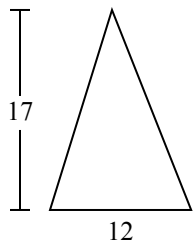
2)



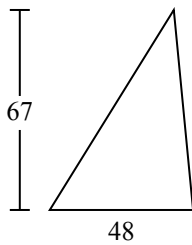
3)



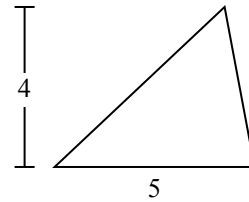
4)



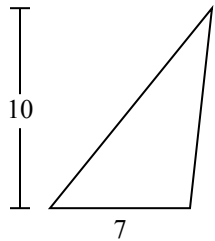
5)



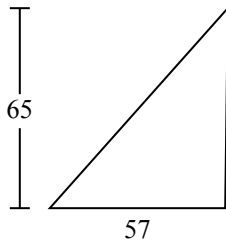
6)



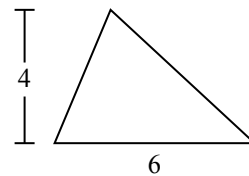
7)



8)



9)



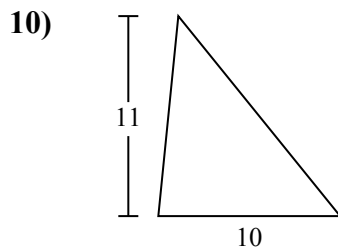
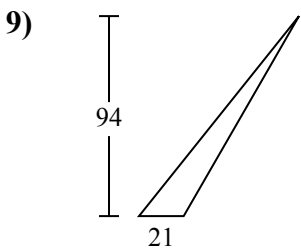
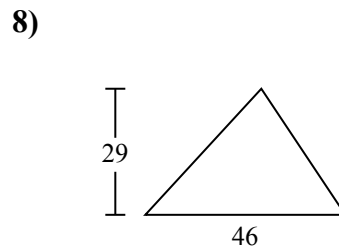
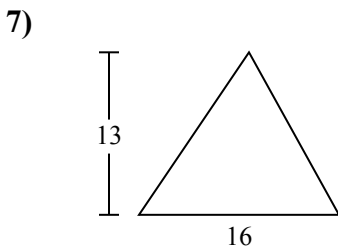
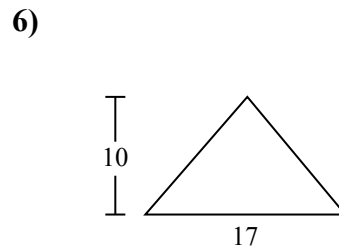
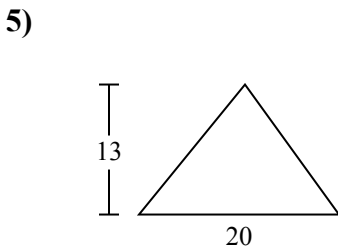
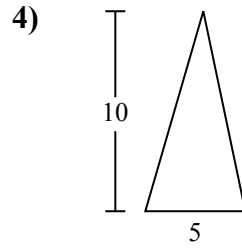
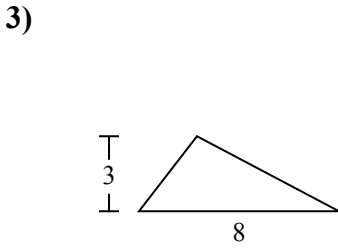
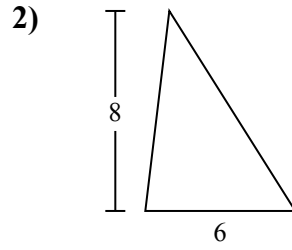
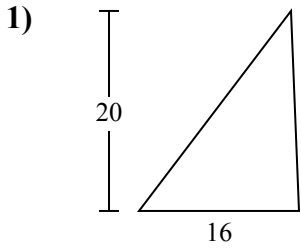
**ОТВЕТЫ**

1. \_\_\_\_\_
2. \_\_\_\_\_
3. \_\_\_\_\_
4. \_\_\_\_\_
5. \_\_\_\_\_
6. \_\_\_\_\_
7. \_\_\_\_\_
8. \_\_\_\_\_
9. \_\_\_\_\_



Определите площадь каждого треугольника. Единицы не являются шкалами.

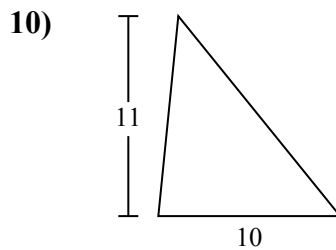
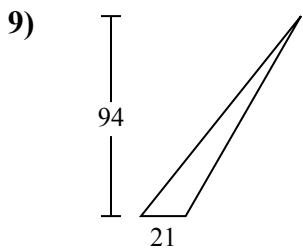
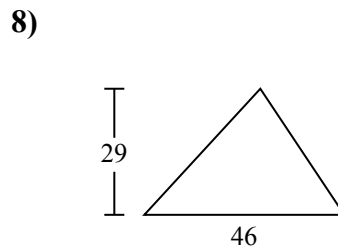
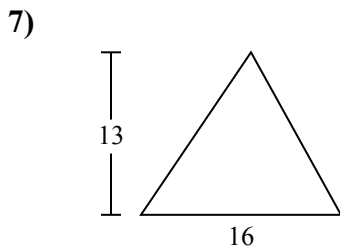
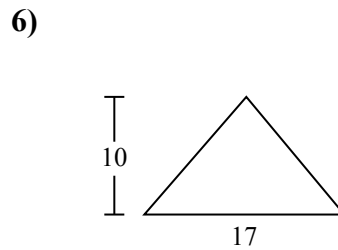
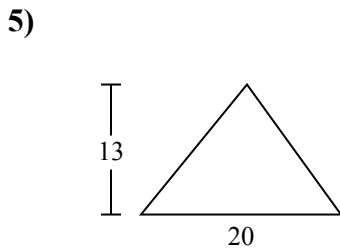
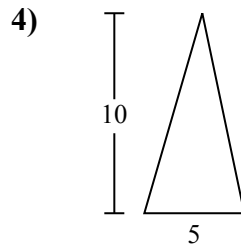
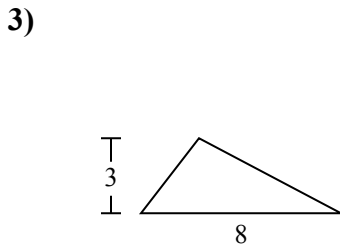
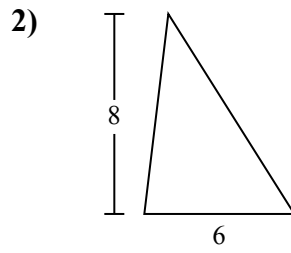
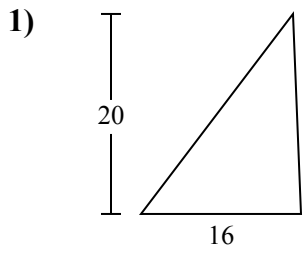
**ОТВЕТЫ**



- 1. \_\_\_\_\_
- 2. \_\_\_\_\_
- 3. \_\_\_\_\_
- 4. \_\_\_\_\_
- 5. \_\_\_\_\_
- 6. \_\_\_\_\_
- 7. \_\_\_\_\_
- 8. \_\_\_\_\_
- 9. \_\_\_\_\_
- 10. \_\_\_\_\_



Определите площадь каждого треугольника. Единицы не являются шкалами.



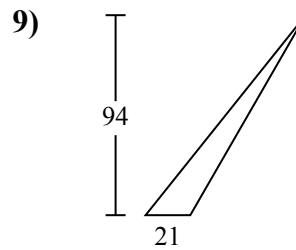
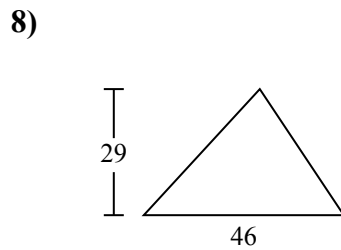
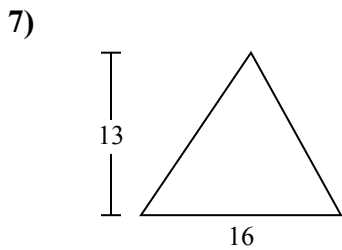
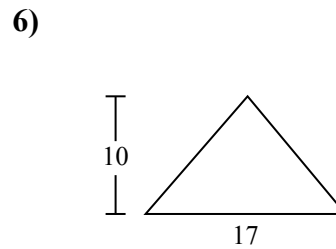
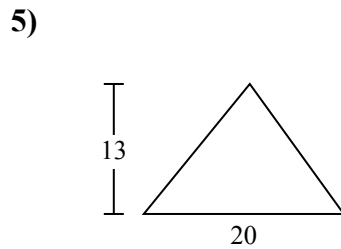
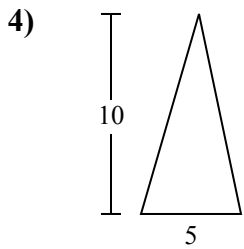
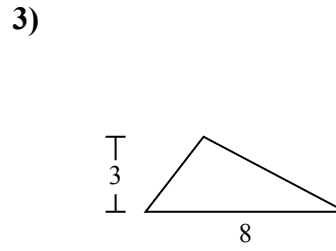
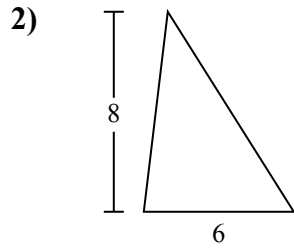
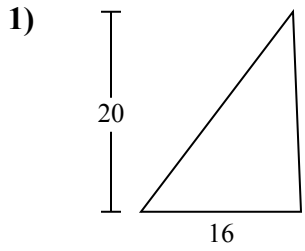
**ОТВЕТЫ**

1. 160
2. 24
3. 12
4. 25
5. 130
6. 85
7. 104
8. 667
9. 987
10. 55



Определите площадь каждого треугольника. Единицы не являются шкалами.

25	160	85	24	667
987	104	12	130	



ОТВЕТЫ

1. \_\_\_\_\_
2. \_\_\_\_\_
3. \_\_\_\_\_
4. \_\_\_\_\_
5. \_\_\_\_\_
6. \_\_\_\_\_
7. \_\_\_\_\_
8. \_\_\_\_\_
9. \_\_\_\_\_

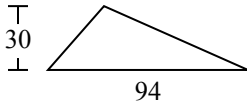




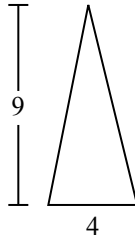
Определите площадь каждого треугольника. Единицы не являются шкалами.

ОТВЕТЫ

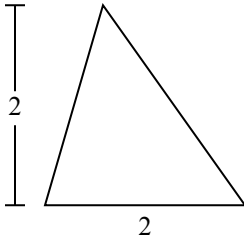
1)



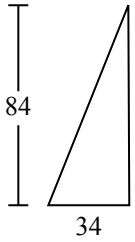
2)



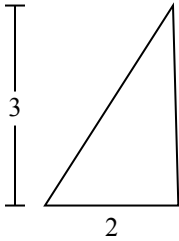
3)



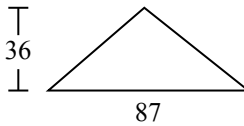
4)



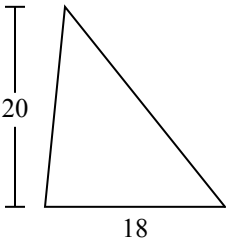
5)



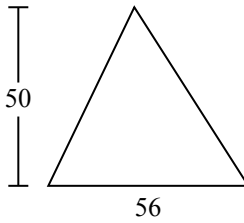
6)



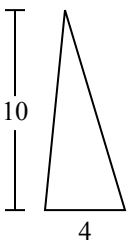
7)



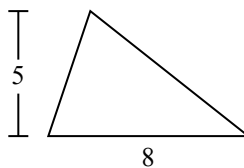
8)



9)



10)

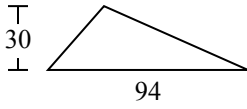


- 1. \_\_\_\_\_
- 2. \_\_\_\_\_
- 3. \_\_\_\_\_
- 4. \_\_\_\_\_
- 5. \_\_\_\_\_
- 6. \_\_\_\_\_
- 7. \_\_\_\_\_
- 8. \_\_\_\_\_
- 9. \_\_\_\_\_
- 10. \_\_\_\_\_

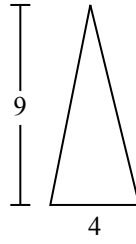


Определите площадь каждого треугольника. Единицы не являются шкалами.

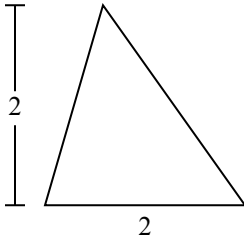
1)



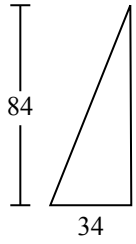
2)



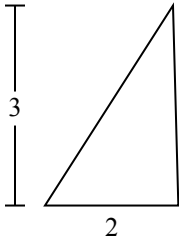
3)



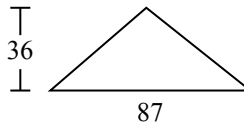
4)



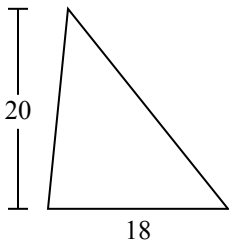
5)



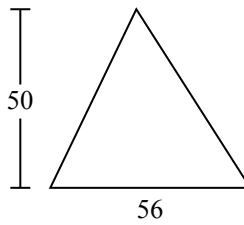
6)



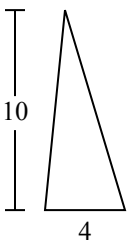
7)



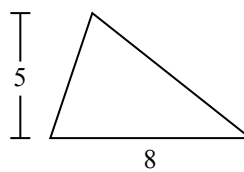
8)



9)



10)



**ОТВЕТЫ**

- 1. 1 410
- 2. 18
- 3. 2
- 4. 1 428
- 5. 3
- 6. 1 566
- 7. 180
- 8. 1 400
- 9. 20
- 10. 20



Определите площадь каждого треугольника. Единицы не являются шкалами.

180  
3

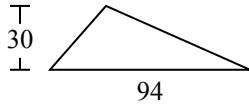
1 428  
2

18  
20

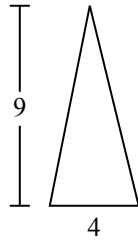
1 566  
1 410

1 400

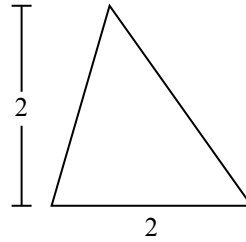
1)



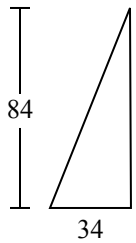
2)



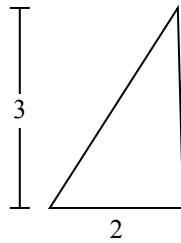
3)



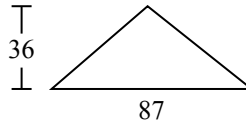
4)



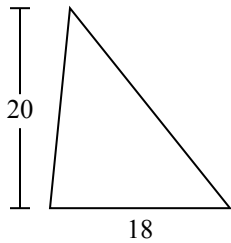
5)



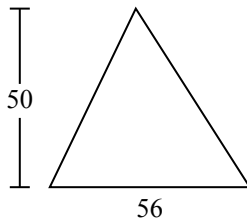
6)



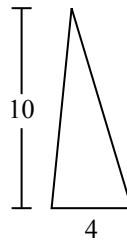
7)



8)



9)



ОТВЕТЫ

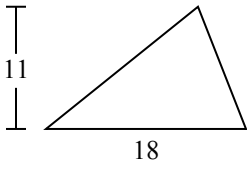
1. \_\_\_\_\_
2. \_\_\_\_\_
3. \_\_\_\_\_
4. \_\_\_\_\_
5. \_\_\_\_\_
6. \_\_\_\_\_
7. \_\_\_\_\_
8. \_\_\_\_\_
9. \_\_\_\_\_



Определите площадь каждого треугольника. Единицы не являются шкалами.

**ОТВЕТЫ**

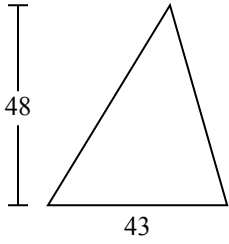
1)



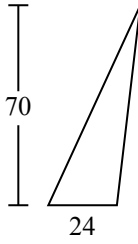
2)



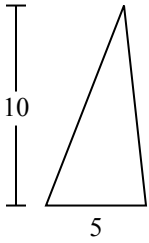
3)



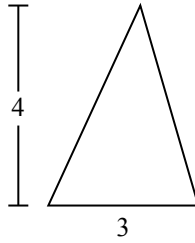
4)



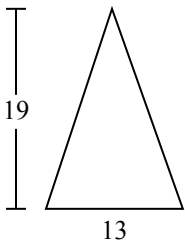
5)



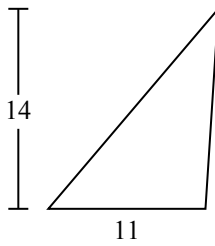
6)



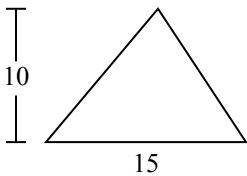
7)



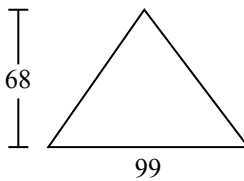
8)



9)



10)

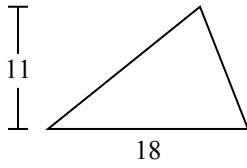


- 1. \_\_\_\_\_
- 2. \_\_\_\_\_
- 3. \_\_\_\_\_
- 4. \_\_\_\_\_
- 5. \_\_\_\_\_
- 6. \_\_\_\_\_
- 7. \_\_\_\_\_
- 8. \_\_\_\_\_
- 9. \_\_\_\_\_
- 10. \_\_\_\_\_



Определите площадь каждого треугольника. Единицы не являются шкалами.

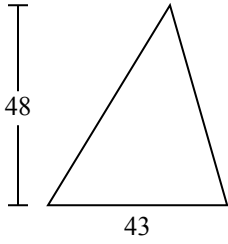
1)



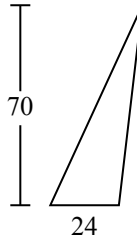
2)



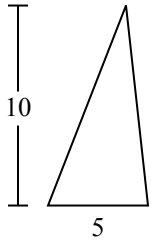
3)



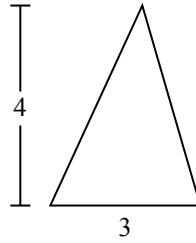
4)



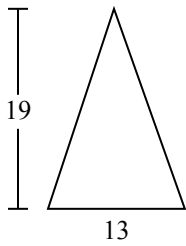
5)



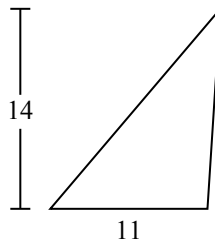
6)



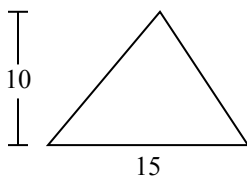
7)



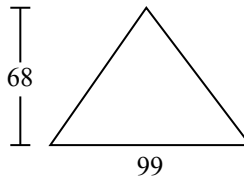
8)



9)



10)



**ОТВЕТЫ**

1. 99
2. 7
3. 1 032
4. 840
5. 25
6. 6
7. 123,5
8. 77
9. 75
10. 3 366

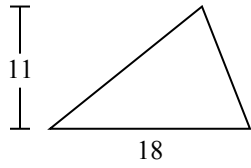


Определите площадь каждого треугольника. Единицы не являются шкалами.

**ОТВЕТЫ**

77	6	99	1 032	25
840	75	123,5	7	

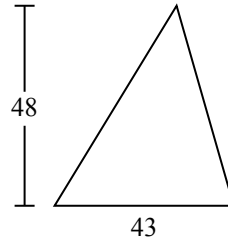
1)



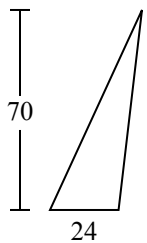
2)



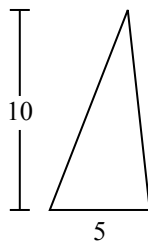
3)



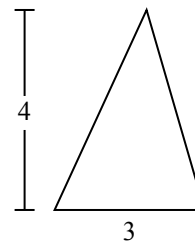
4)



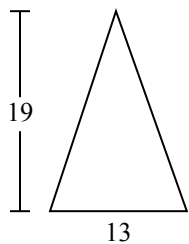
5)



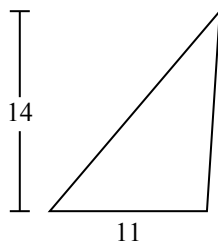
6)



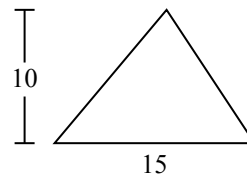
7)



8)



9)



1. \_\_\_\_\_
2. \_\_\_\_\_
3. \_\_\_\_\_
4. \_\_\_\_\_
5. \_\_\_\_\_
6. \_\_\_\_\_
7. \_\_\_\_\_
8. \_\_\_\_\_
9. \_\_\_\_\_