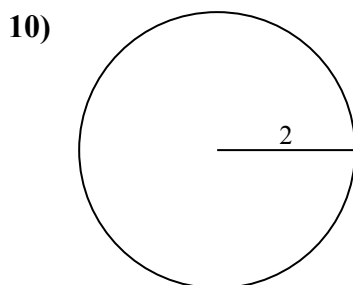
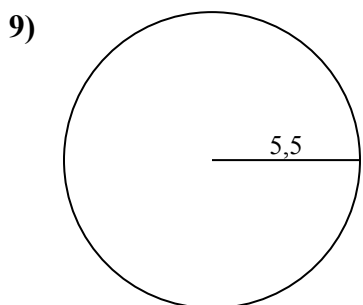
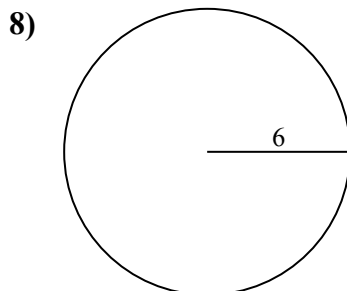
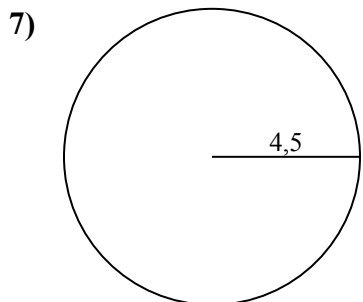
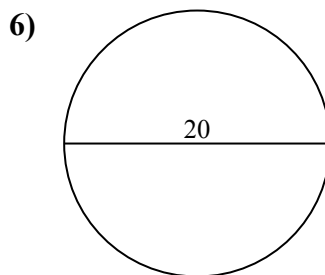
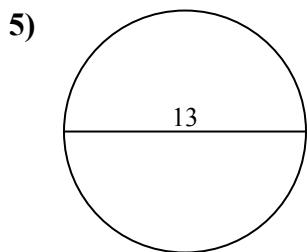
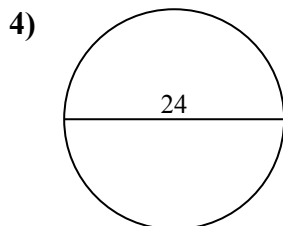
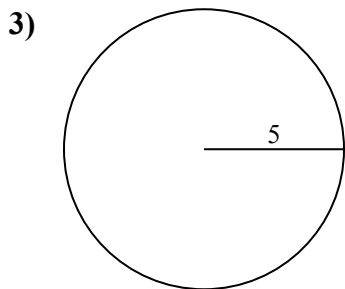
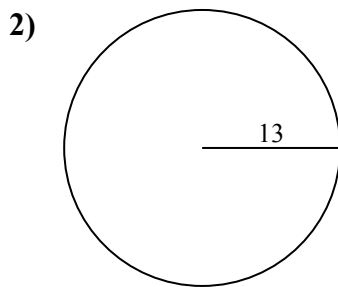
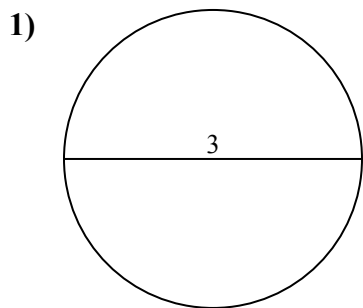




Определите окружность каждого круга. Круги не являются шкалой.

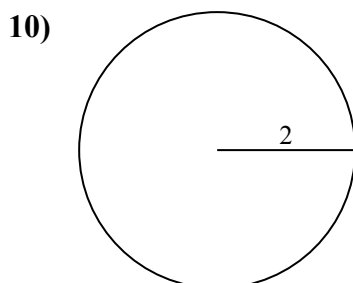
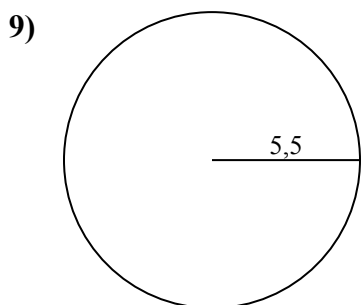
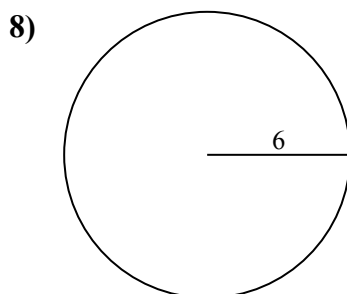
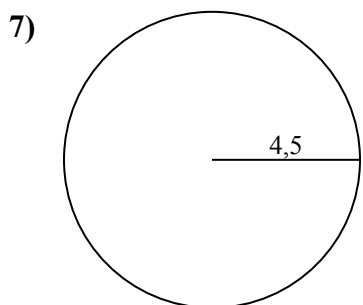
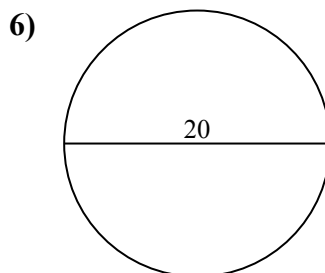
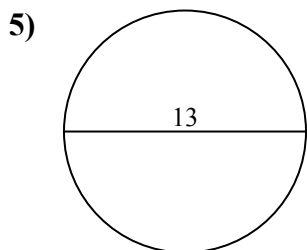
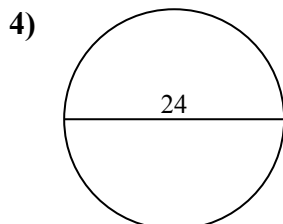
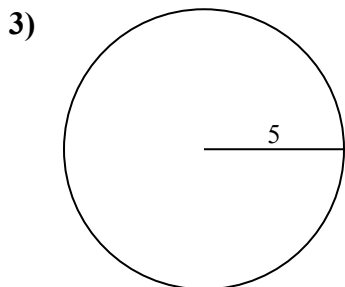
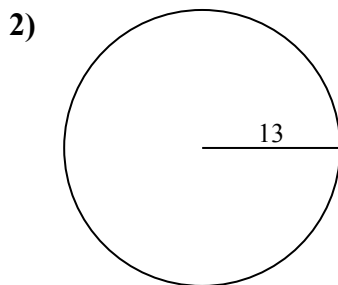
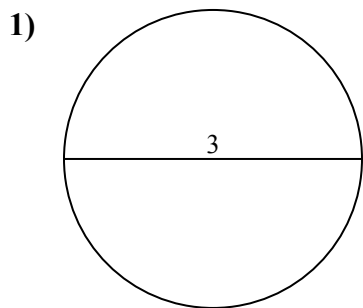


**Ответы**

- 1. \_\_\_\_\_
- 2. \_\_\_\_\_
- 3. \_\_\_\_\_
- 4. \_\_\_\_\_
- 5. \_\_\_\_\_
- 6. \_\_\_\_\_
- 7. \_\_\_\_\_
- 8. \_\_\_\_\_
- 9. \_\_\_\_\_
- 10. \_\_\_\_\_



Определите окружность каждого круга. Круги не являются шкалой.

**ОТВЕТЫ**1. 9,42 см2. 81,68 см3. 31,42 см4. 75,4 см5. 40,84 см6. 62,83 см7. 28,27 см8. 37,7 см9. 34,56 см10. 12,57 см



Определите окружность каждого круга. Круги не являются шкалой.

12,57 cm

28,27 cm

62,83 cm

34,56 cm

81,68 cm

9,42 cm

37,7 cm

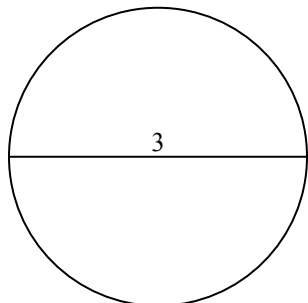
75,4 cm

31,42 cm

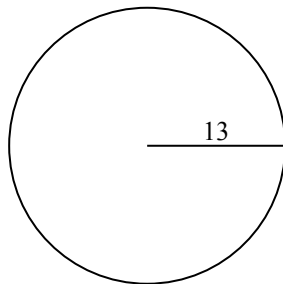
40,84 cm

**ОТВЕТЫ**

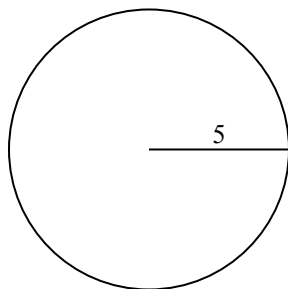
1)



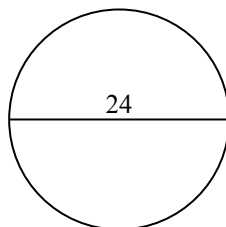
2)



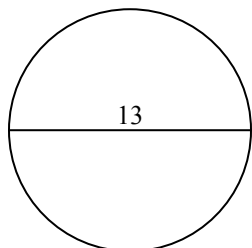
3)



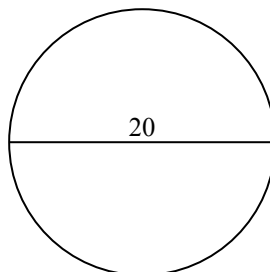
4)



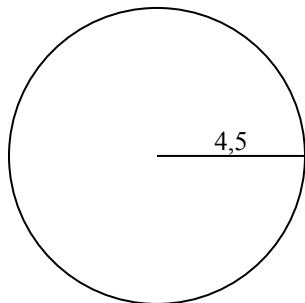
5)



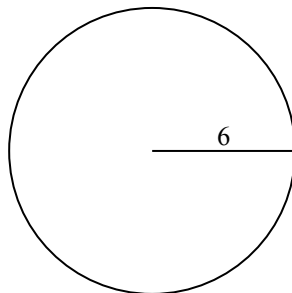
6)



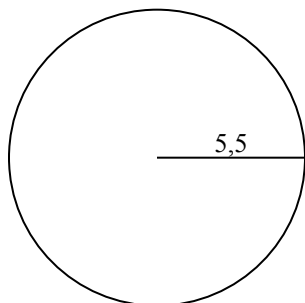
7)



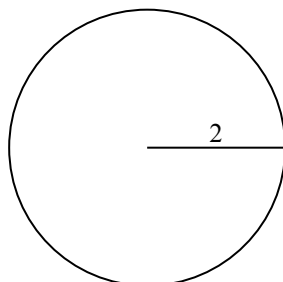
8)



9)



10)



- 1. \_\_\_\_\_
- 2. \_\_\_\_\_
- 3. \_\_\_\_\_
- 4. \_\_\_\_\_
- 5. \_\_\_\_\_
- 6. \_\_\_\_\_
- 7. \_\_\_\_\_
- 8. \_\_\_\_\_
- 9. \_\_\_\_\_
- 10. \_\_\_\_\_