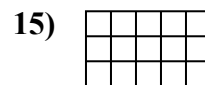

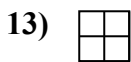
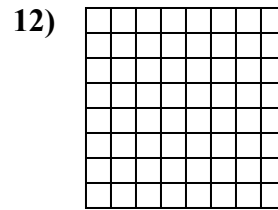
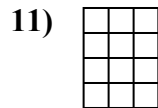
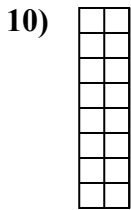
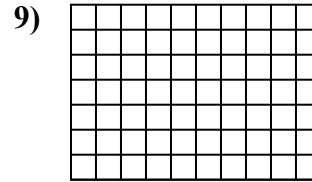
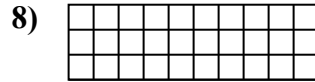
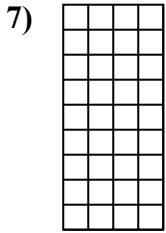
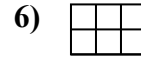
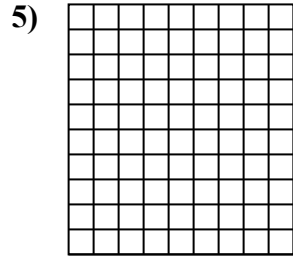
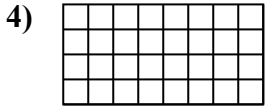
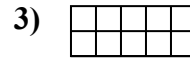
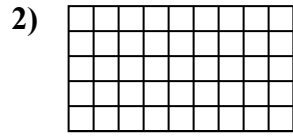
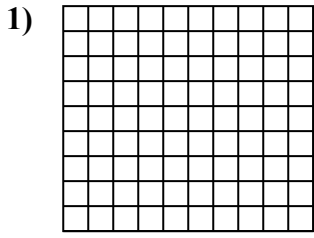




Определите площадь. Каждый блок= 1 единице (u<sup>2</sup>).

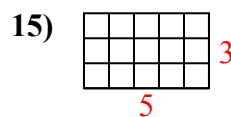
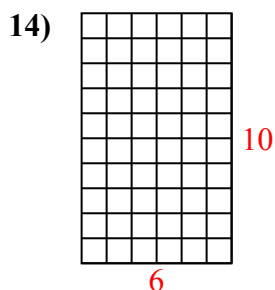
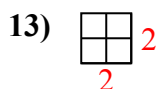
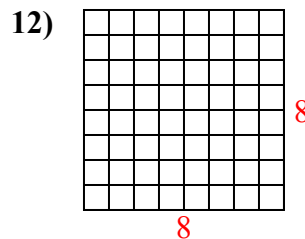
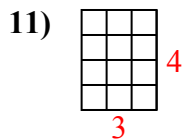
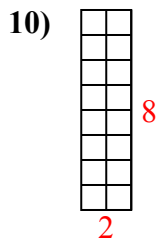
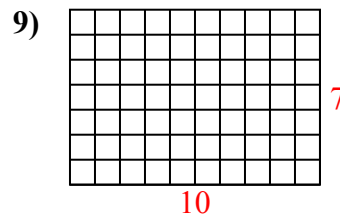
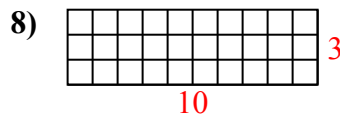
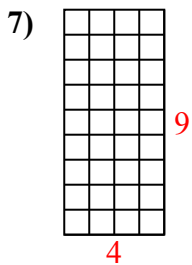
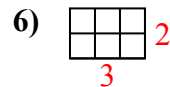
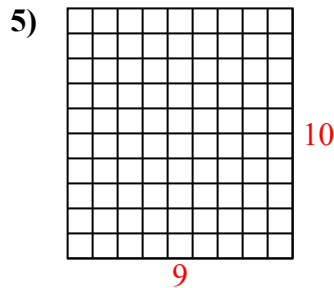
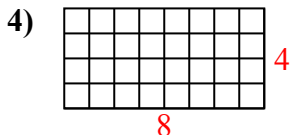
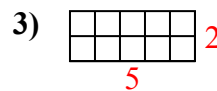
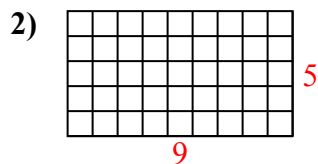
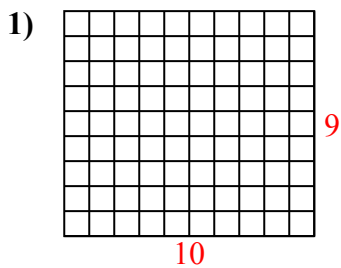


**ОТВЕТЫ**

1. \_\_\_\_\_
2. \_\_\_\_\_
3. \_\_\_\_\_
4. \_\_\_\_\_
5. \_\_\_\_\_
6. \_\_\_\_\_
7. \_\_\_\_\_
8. \_\_\_\_\_
9. \_\_\_\_\_
10. \_\_\_\_\_
11. \_\_\_\_\_
12. \_\_\_\_\_
13. \_\_\_\_\_
14. \_\_\_\_\_
15. \_\_\_\_\_



Определите площадь. Каждый блок = 1 единице ( $u^2$ ).



**ОТВЕТЫ**

1. 90  $u^2$

2. 45  $u^2$

3. 10  $u^2$

4. 32  $u^2$

5. 90  $u^2$

6. 6  $u^2$

7. 36  $u^2$

8. 30  $u^2$

9. 70  $u^2$

10. 16  $u^2$

11. 12  $u^2$

12. 64  $u^2$

13. 4  $u^2$

14. 60  $u^2$

15. 15  $u^2$